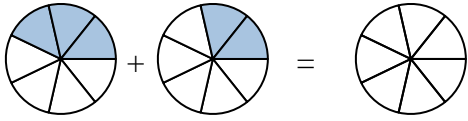




Schattiere die Fläche, damit der Bruch als Summe richtig dargestellt wird.

Antworten

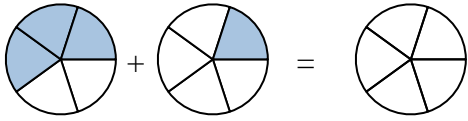
Bsp)



Bsp. $\frac{3}{7}$ $\frac{2}{7}$ $\frac{5}{7}$

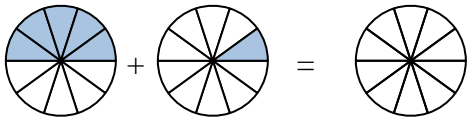
1. _____

1)



2. _____

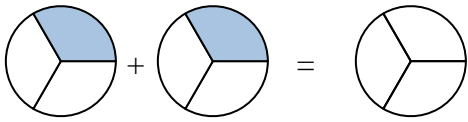
2)



3. _____

4. _____

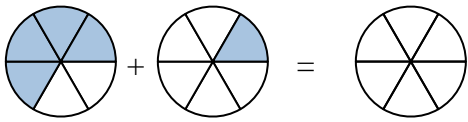
3)



5. _____

6. _____

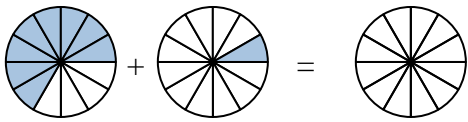
4)



7. _____

8. _____

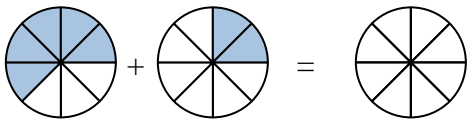
5)



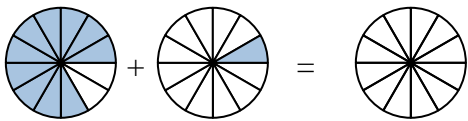
9. _____

10. _____

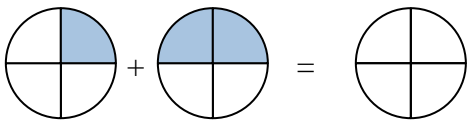
6)



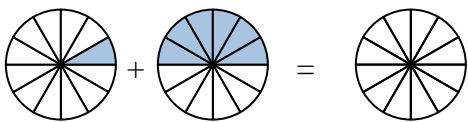
7)



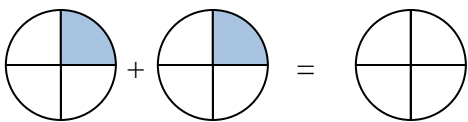
8)



9)



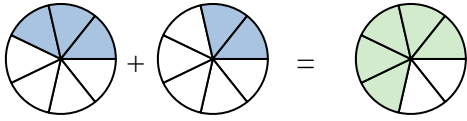
10)



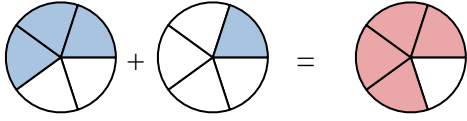


Schattiere die Fläche, damit der Bruch als Summe richtig dargestellt wird.

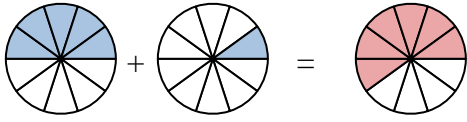
Bsp)

Bsp. $\frac{3}{7}$ $\frac{2}{7}$ $\frac{5}{7}$

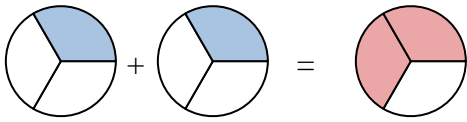
1)

1. $\frac{3}{5}$ $\frac{1}{5}$ $\frac{4}{5}$

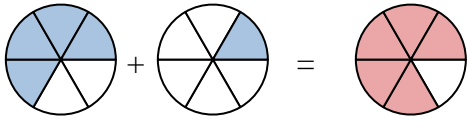
2)

2. $\frac{5}{10}$ $\frac{1}{10}$ $\frac{6}{10}$

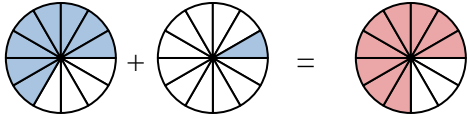
3)

3. $\frac{1}{3}$ $\frac{1}{3}$ $\frac{2}{3}$

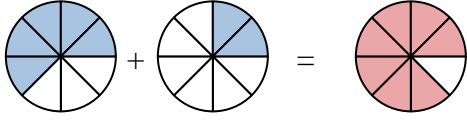
4)

4. $\frac{4}{6}$ $\frac{1}{6}$ $\frac{5}{6}$

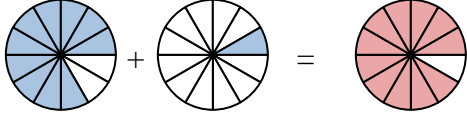
5)

5. $\frac{8}{12}$ $\frac{1}{12}$ $\frac{9}{12}$

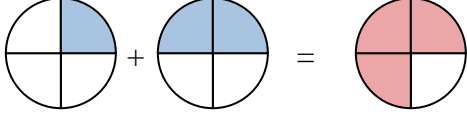
6)

6. $\frac{5}{8}$ $\frac{2}{8}$ $\frac{7}{8}$

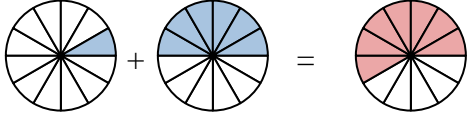
7)

7. $\frac{10}{12}$ $\frac{1}{12}$ $\frac{11}{12}$

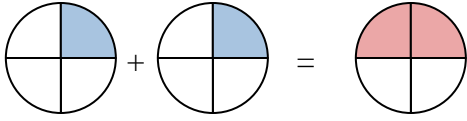
8)

8. $\frac{1}{4}$ $\frac{2}{4}$ $\frac{3}{4}$

9)

9. $\frac{1}{12}$ $\frac{6}{12}$ $\frac{7}{12}$

10)

10. $\frac{1}{4}$ $\frac{1}{4}$ $\frac{2}{4}$