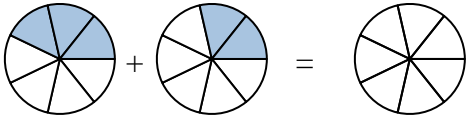




Schattiere die Fläche, damit der Bruch als Summe richtig dargestellt wird.

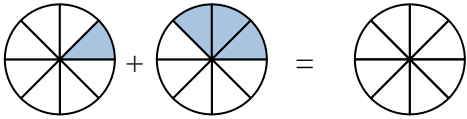
**Antworten**

Bsp)



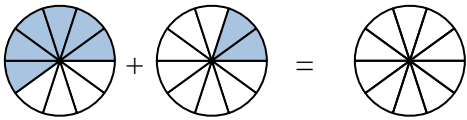
Bsp.  $\frac{3}{7}$     $\frac{2}{7}$     $\frac{5}{7}$

1)



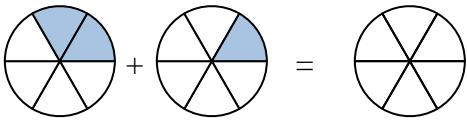
1. \_\_\_\_\_

2)



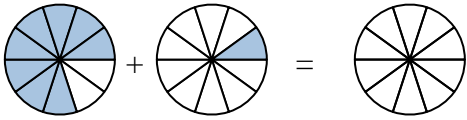
2. \_\_\_\_\_

3)



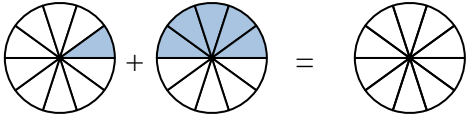
3. \_\_\_\_\_

4)



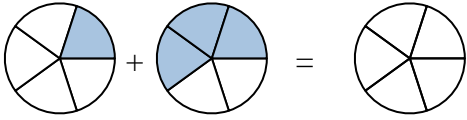
4. \_\_\_\_\_

5)



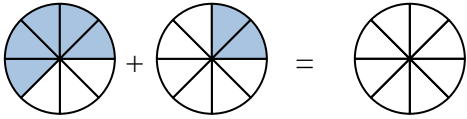
5. \_\_\_\_\_

6)



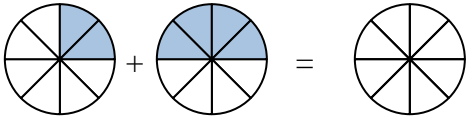
6. \_\_\_\_\_

7)



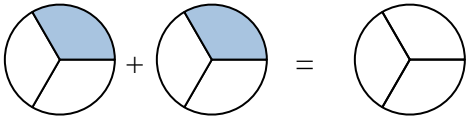
7. \_\_\_\_\_

8)



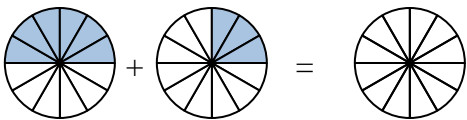
8. \_\_\_\_\_

9)



9. \_\_\_\_\_

10)

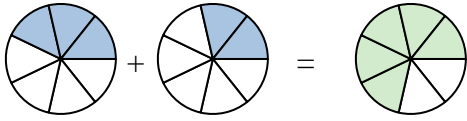


10. \_\_\_\_\_

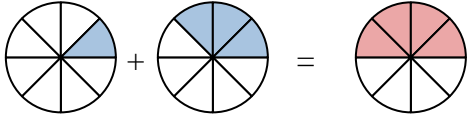


Schattiere die Fläche, damit der Bruch als Summe richtig dargestellt wird.

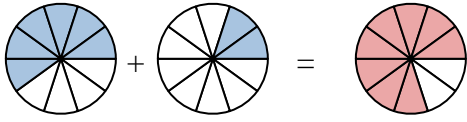
Bsp)

Bsp.  $\frac{3}{7}$   $\frac{2}{7}$   $\frac{5}{7}$ 

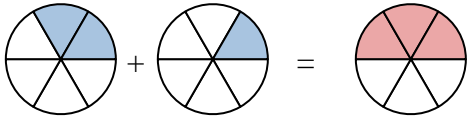
1)

1.  $\frac{1}{8}$   $\frac{3}{8}$   $\frac{4}{8}$ 

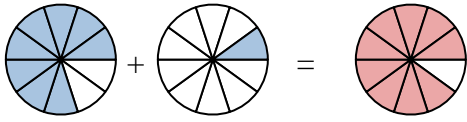
2)

2.  $\frac{6}{10}$   $\frac{2}{10}$   $\frac{8}{10}$ 

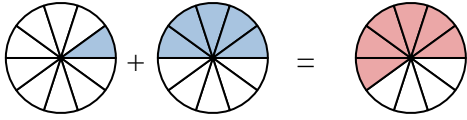
3)

3.  $\frac{2}{6}$   $\frac{1}{6}$   $\frac{3}{6}$ 

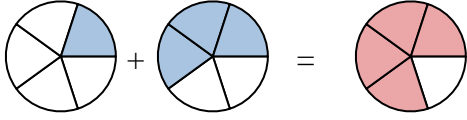
4)

4.  $\frac{8}{10}$   $\frac{1}{10}$   $\frac{9}{10}$ 

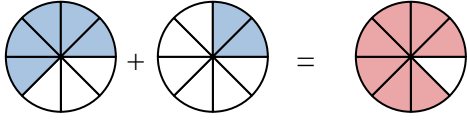
5)

5.  $\frac{1}{10}$   $\frac{5}{10}$   $\frac{6}{10}$ 

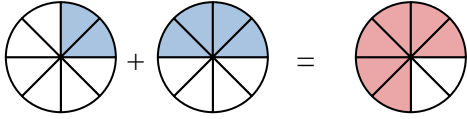
6)

6.  $\frac{1}{5}$   $\frac{3}{5}$   $\frac{4}{5}$ 

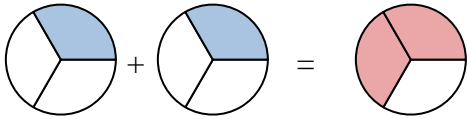
7)

7.  $\frac{5}{8}$   $\frac{2}{8}$   $\frac{7}{8}$ 

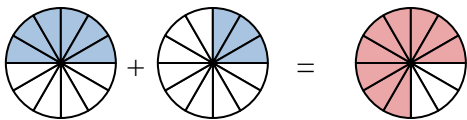
8)

8.  $\frac{2}{8}$   $\frac{4}{8}$   $\frac{6}{8}$ 

9)

9.  $\frac{1}{3}$   $\frac{2}{3}$   $\frac{3}{3}$ 

10)

10.  $\frac{6}{12}$   $\frac{3}{12}$   $\frac{9}{12}$ **Antworten**