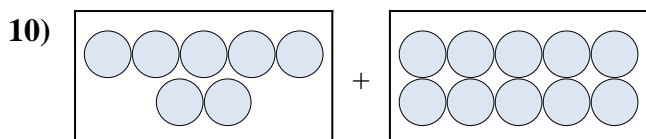

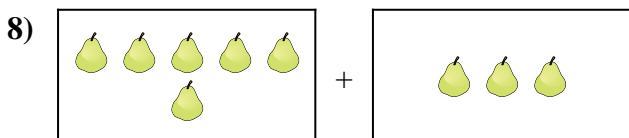

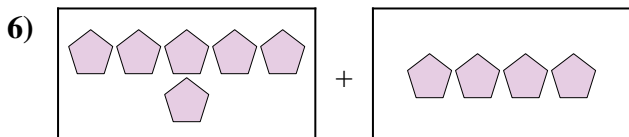
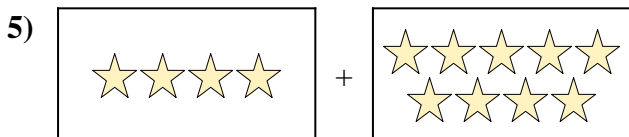
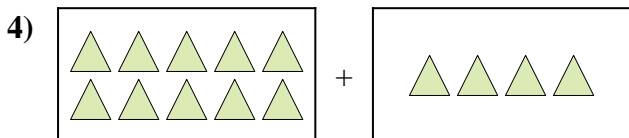
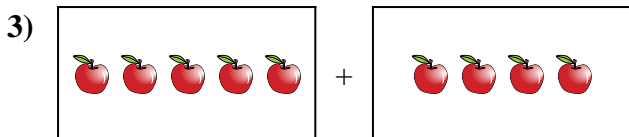
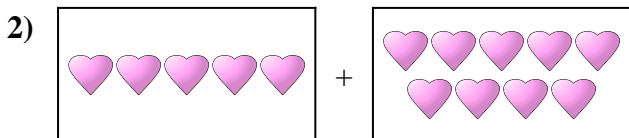
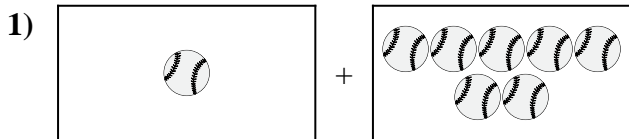




Drücken Sie das visuelle Problem als Gleichung mit Antwort aus.

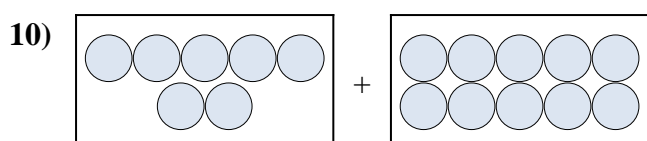

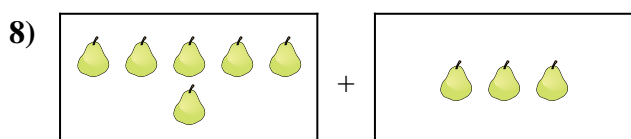

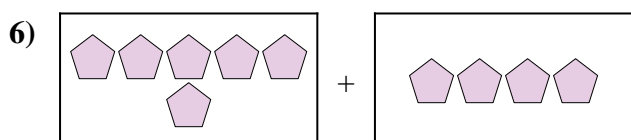
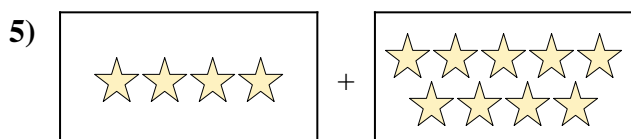
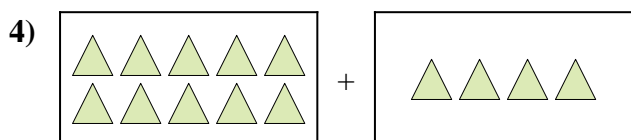
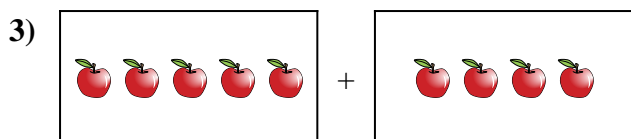
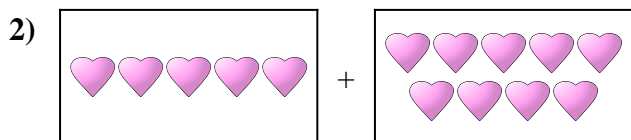
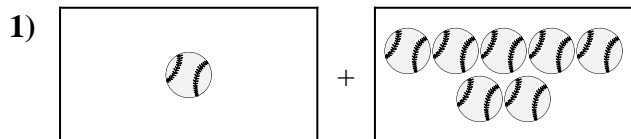
**Antworten**



1. \_\_\_\_\_
2. \_\_\_\_\_
3. \_\_\_\_\_
4. \_\_\_\_\_
5. \_\_\_\_\_
6. \_\_\_\_\_
7. \_\_\_\_\_
8. \_\_\_\_\_
9. \_\_\_\_\_
10. \_\_\_\_\_



Drücken Sie das visuelle Problem als Gleichung mit Antwort aus.

**Antworten**

1.  $1 + 7 = 8$

2.  $5 + 9 = 14$

3.  $5 + 4 = 9$

4.  $10 + 4 = 14$

5.  $4 + 9 = 13$

6.  $6 + 4 = 10$

7.  $6 + 10 = 16$

8.  $6 + 3 = 9$

9.  $7 + 4 = 11$

10.  $7 + 10 = 17$