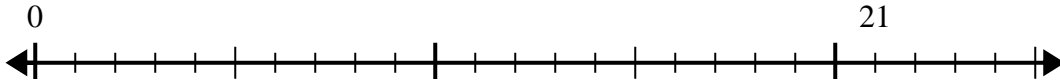




Verwenden Sie den Zahlenstrahl, um das Divisionsproblem zu lösen.

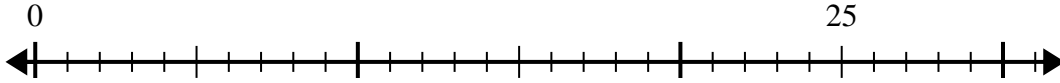
Antworten

1) $21:5=$
0



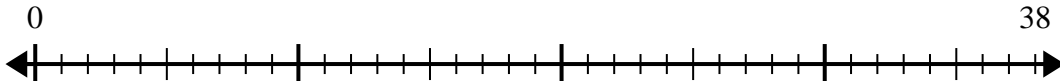
1. _____

2) $25:6=$
0



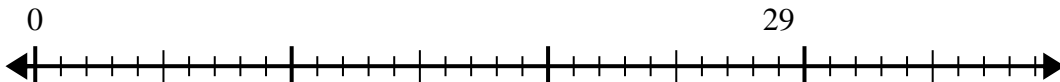
2. _____

3) $38:8=$
0



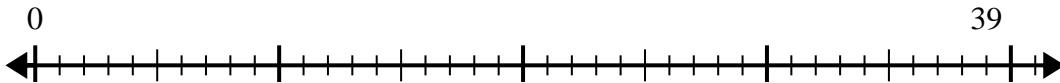
3. _____

4) $29:7=$
0



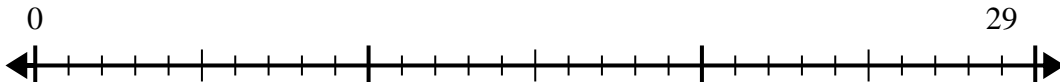
4. _____

5) $39:5=$
0



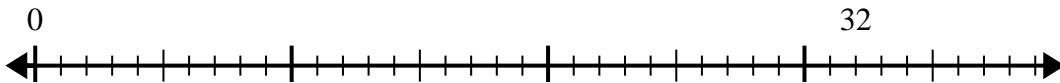
5. _____

6) $29:4=$
0



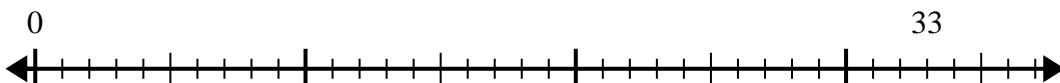
6. _____

7) $32:6=$
0



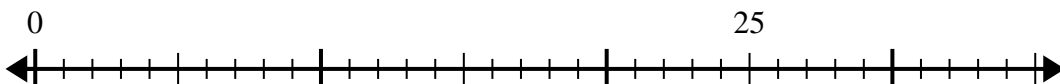
7. _____

8) $33:4=$
0



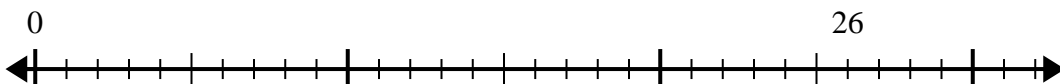
8. _____

9) $25:4=$
0



9. _____

10) $26:7=$
0

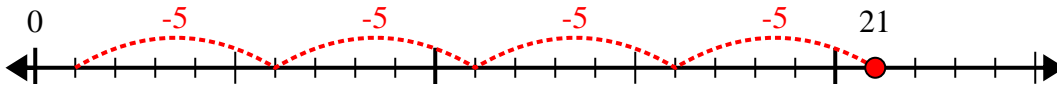


10. _____

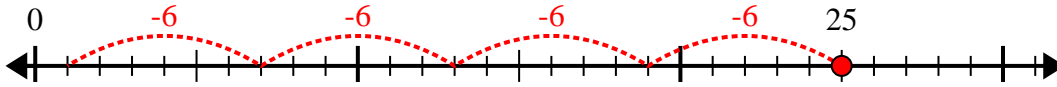


Verwenden Sie den Zahlenstrahl, um das Divisionsproblem zu lösen.

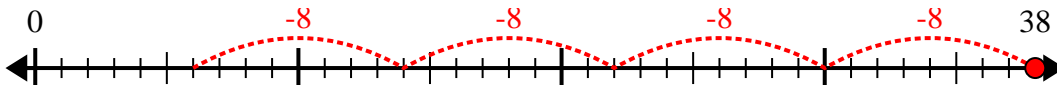
1) $21:5=$



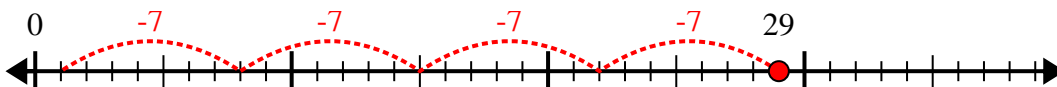
2) $25:6=$



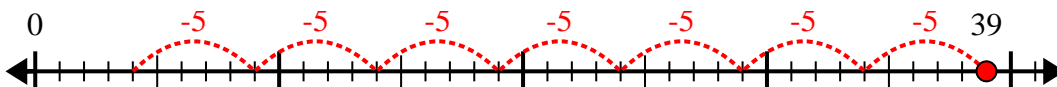
3) $38:8=$



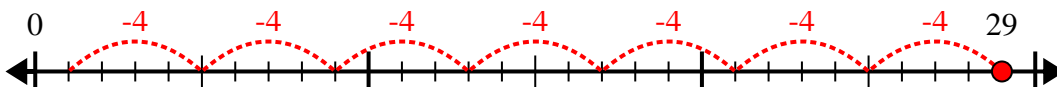
4) $29:7=$



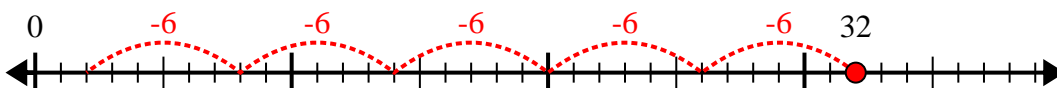
5) $39:5=$



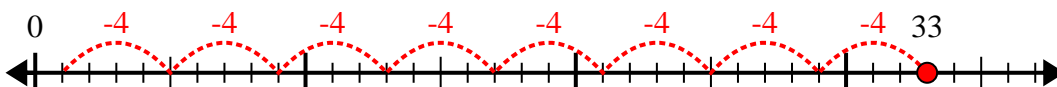
6) $29:4=$



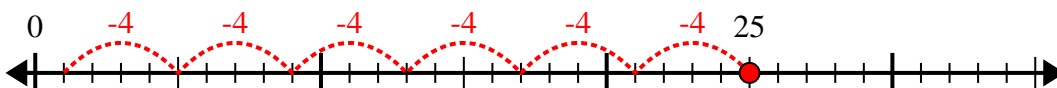
7) $32:6=$



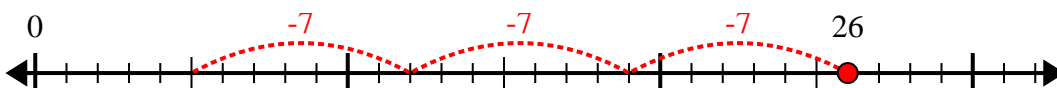
8) $33:4=$



9) $25:4=$



10) $26:7=$



Antworten

1. 4r1

2. 4r1

3. 4r6

4. 4r1

5. 7r4

6. 7r1

7. 5r2

8. 8r1

9. 6r1

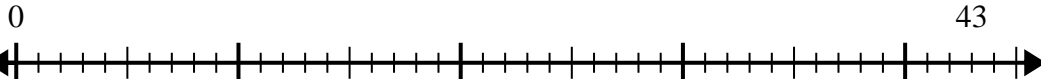
10. 3r5



Verwenden Sie den Zahlenstrahl, um das Divisionsproblem zu lösen.

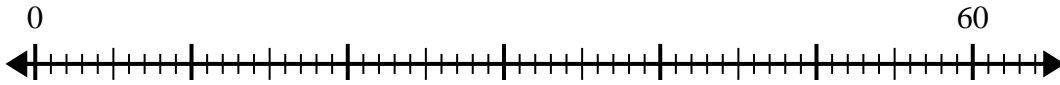
Antworten

1) $43:5=$



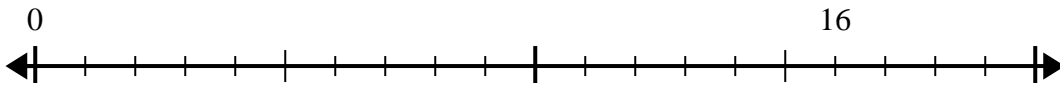
1. _____

2) $60:7=$



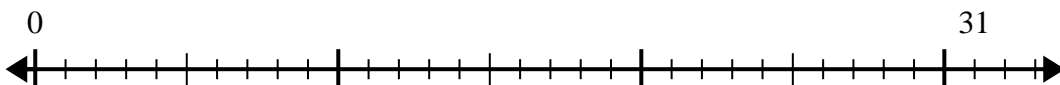
2. _____

3) $16:5=$



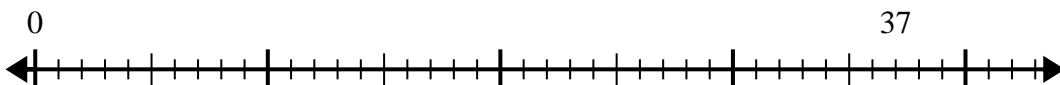
3. _____

4) $31:4=$



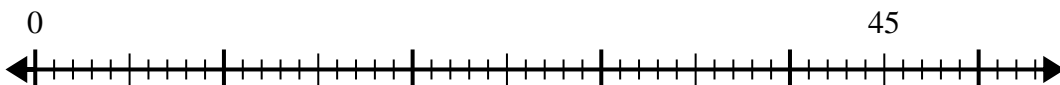
4. _____

5) $37:7=$



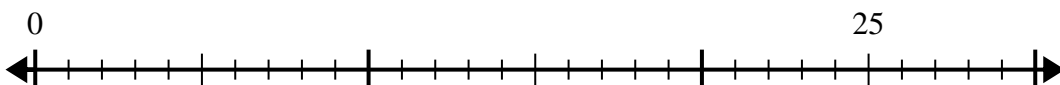
5. _____

6) $45:8=$



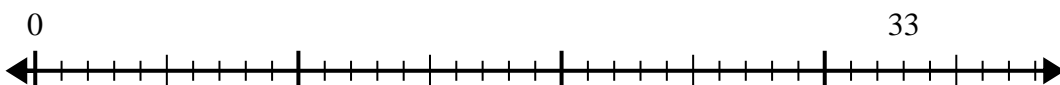
6. _____

7) $25:4=$



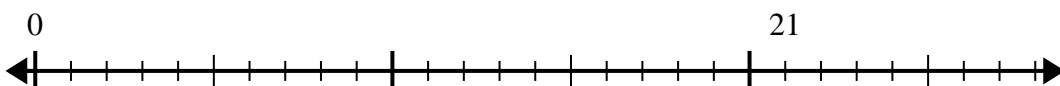
7. _____

8) $33:5=$



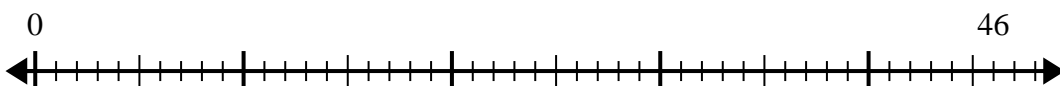
8. _____

9) $21:4=$



9. _____

10) $46:6=$

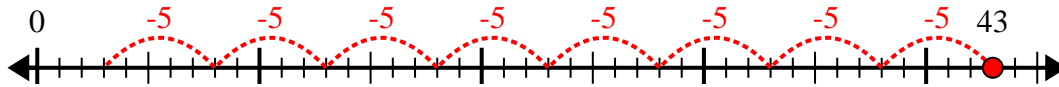


10. _____

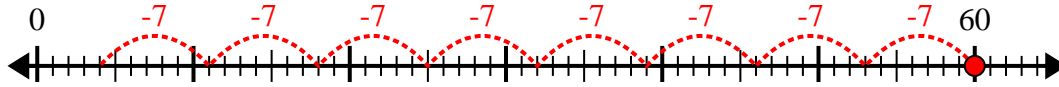


Verwenden Sie den Zahlenstrahl, um das Divisionsproblem zu lösen.

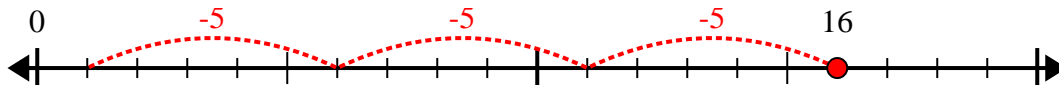
1) $43:5=$



2) $60:7=$



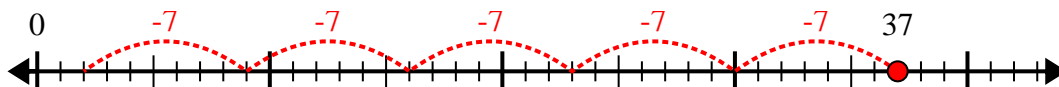
3) $16:5=$



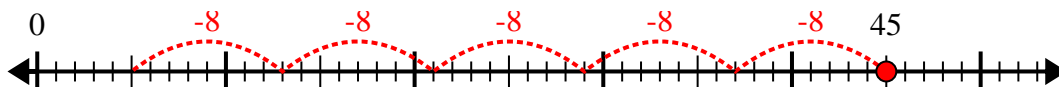
4) $31:4=$



5) $37:7=$



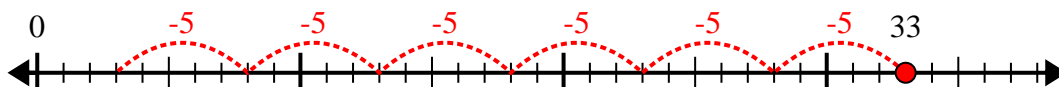
6) $45:8=$



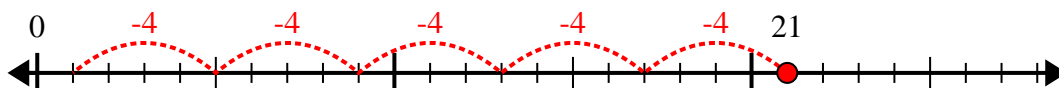
7) $25:4=$



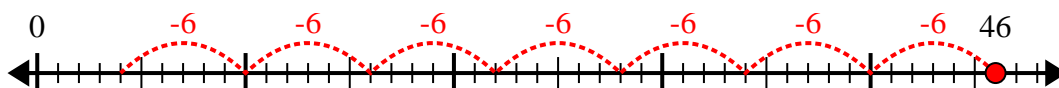
8) $33:5=$



9) $21:4=$



10) $46:6=$



Antworten

1. 8r3

2. 8r4

3. 3r1

4. 7r3

5. 5r2

6. 5r5

7. 6r1

8. 6r3

9. 5r1

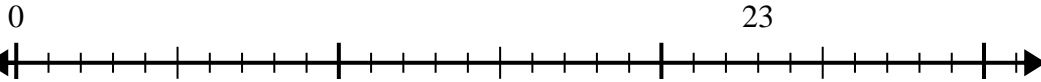
10. 7r4



Verwenden Sie den Zahlenstrahl, um das Divisionsproblem zu lösen.

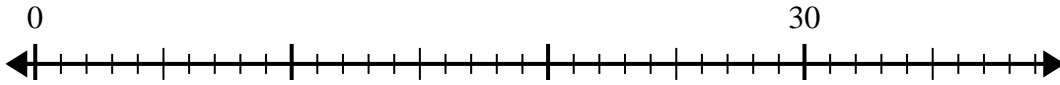
Antworten

1) $23:5=$



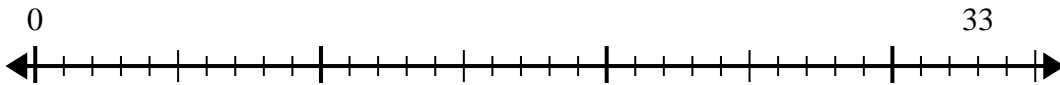
1. _____

2) $30:4=$



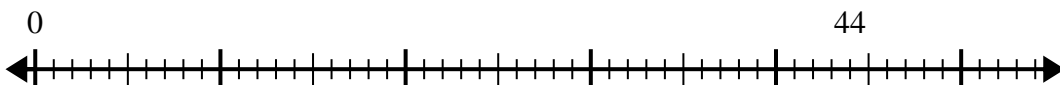
2. _____

3) $33:6=$



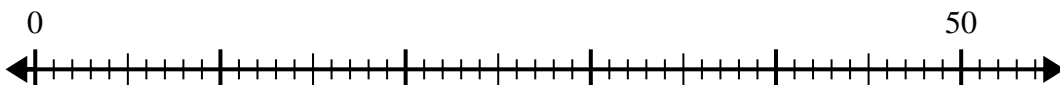
3. _____

4) $44:6=$



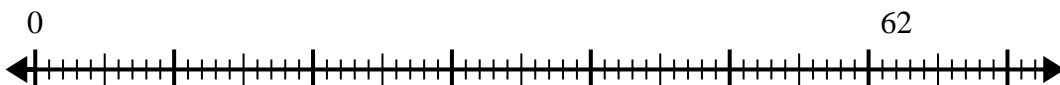
4. _____

5) $50:6=$



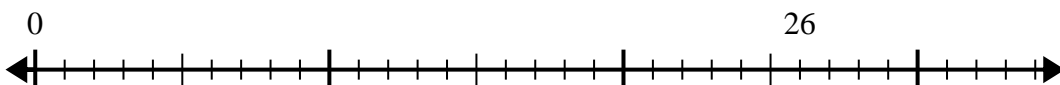
5. _____

6) $62:8=$



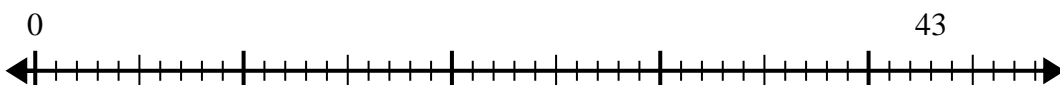
6. _____

7) $26:6=$



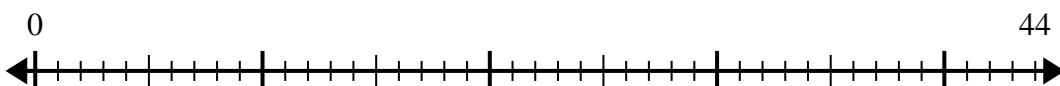
7. _____

8) $43:8=$



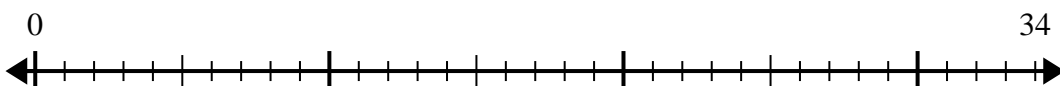
8. _____

9) $44:7=$



9. _____

10) $34:4=$

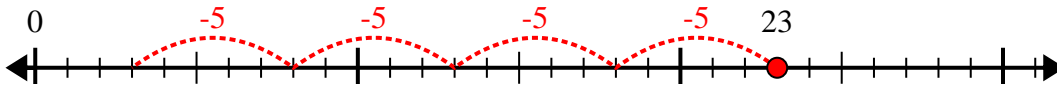


10. _____

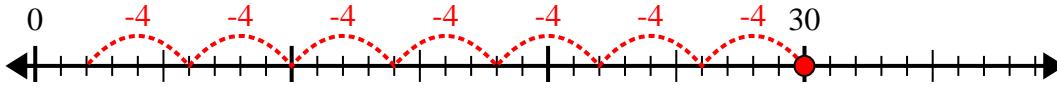


Verwenden Sie den Zahlenstrahl, um das Divisionsproblem zu lösen.

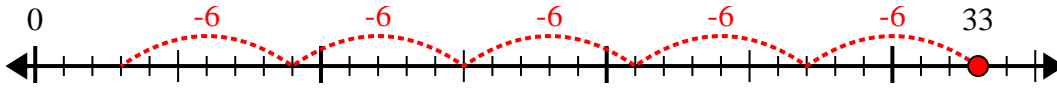
1) $23:5=$



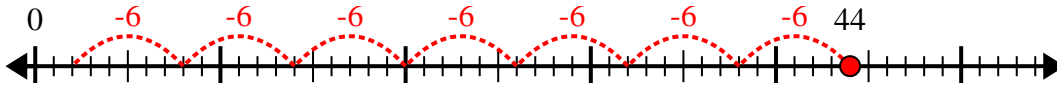
2) $30:4=$



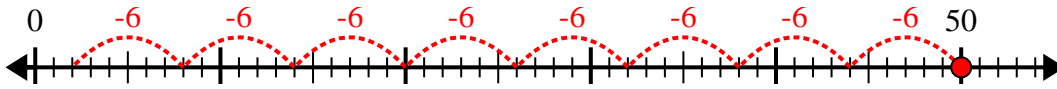
3) $33:6=$



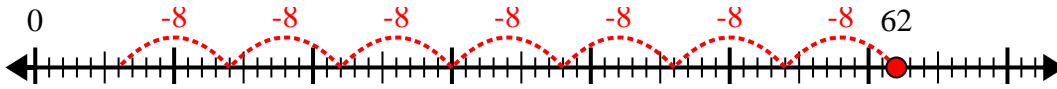
4) $44:6=$



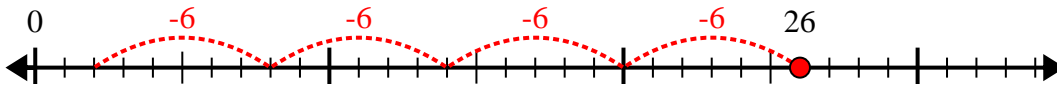
5) $50:6=$



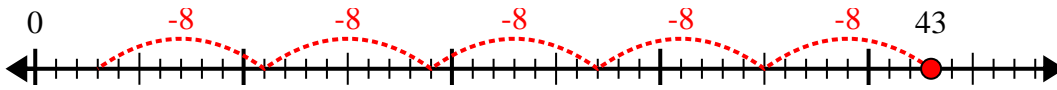
6) $62:8=$



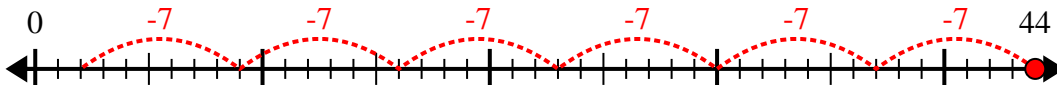
7) $26:6=$



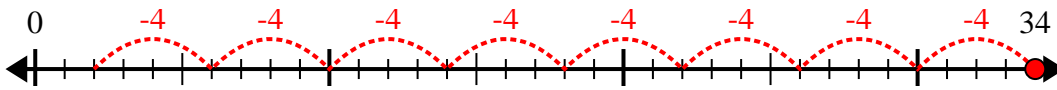
8) $43:8=$



9) $44:7=$



10) $34:4=$



Antworten

1. 4r3

2. 7r2

3. 5r3

4. 7r2

5. 8r2

6. 7r6

7. 4r2

8. 5r3

9. 6r2

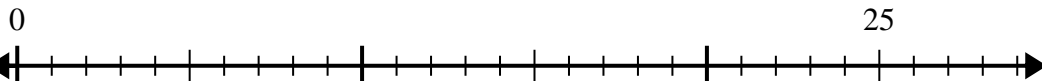
10. 8r2



Verwenden Sie den Zahlenstrahl, um das Divisionsproblem zu lösen.

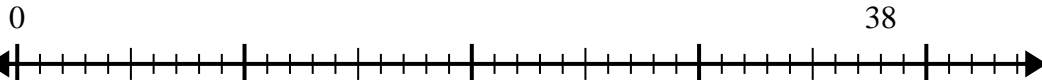
Antworten

1) $25:6=$



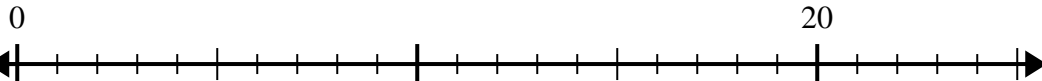
1. _____

2) $38:7=$



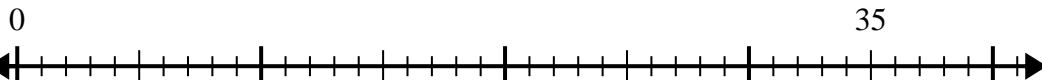
2. _____

3) $20:6=$



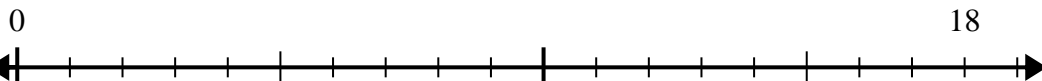
3. _____

4) $35:6=$



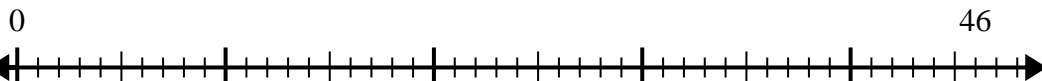
4. _____

5) $18:5=$



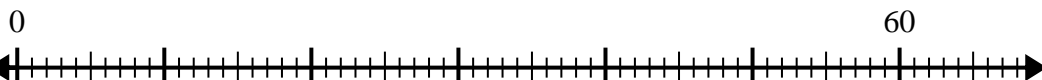
5. _____

6) $46:6=$



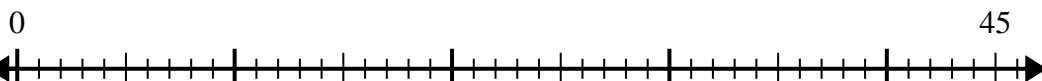
6. _____

7) $60:8=$



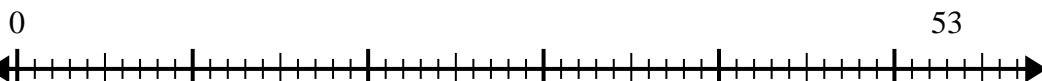
7. _____

8) $45:7=$



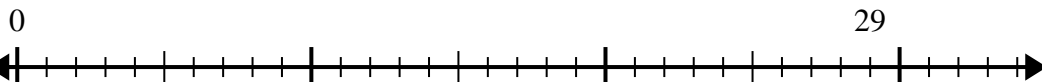
8. _____

9) $53:8=$



9. _____

10) $29:4=$

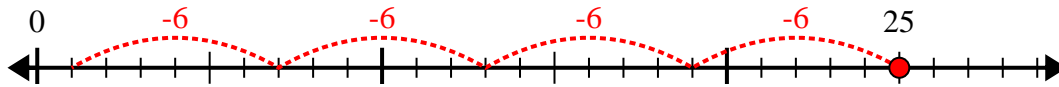


10. _____

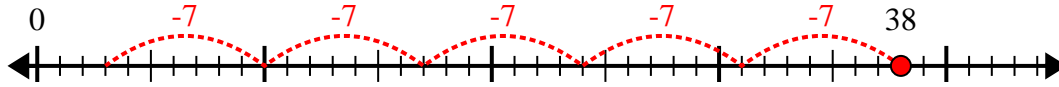


Verwenden Sie den Zahlenstrahl, um das Divisionsproblem zu lösen.

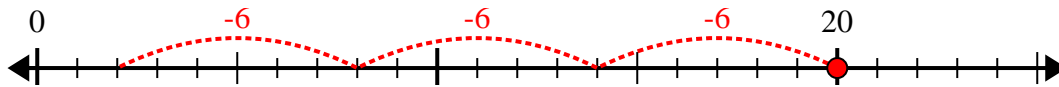
1) $25:6=$



2) $38:7=$



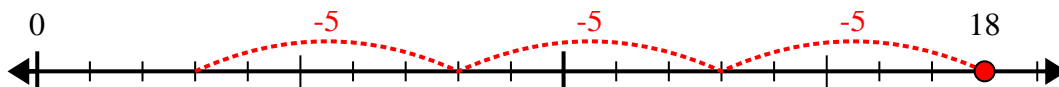
3) $20:6=$



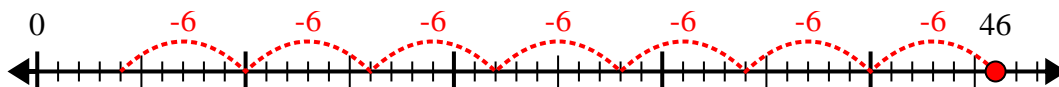
4) $35:6=$



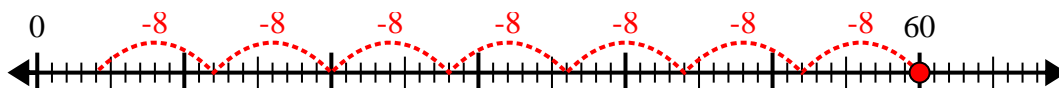
5) $18:5=$



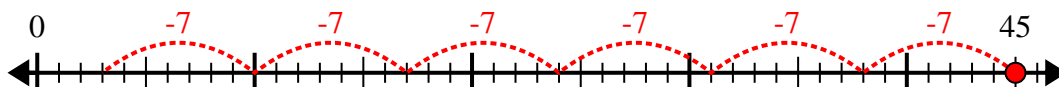
6) $46:6=$



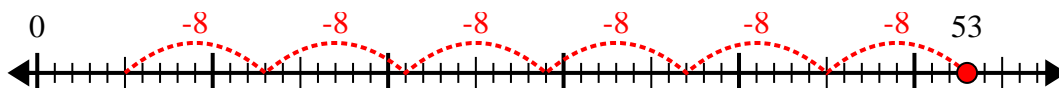
7) $60:8=$



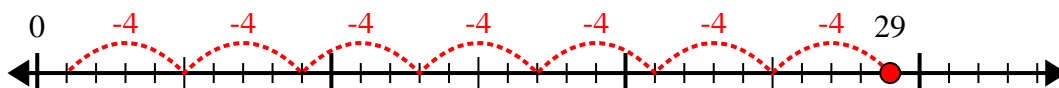
8) $45:7=$



9) $53:8=$



10) $29:4=$



Antworten

1. **4r1**

2. **5r3**

3. **3r2**

4. **5r5**

5. **3r3**

6. **7r4**

7. **7r4**

8. **6r3**

9. **6r5**

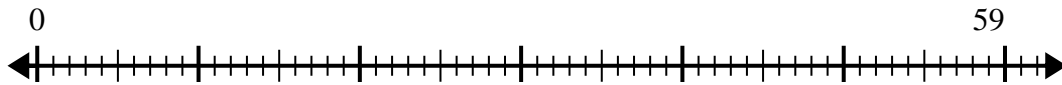
10. **7r1**



Verwenden Sie den Zahlenstrahl, um das Divisionsproblem zu lösen.

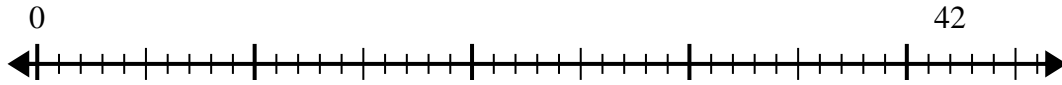
Antworten

1) $59:7=$



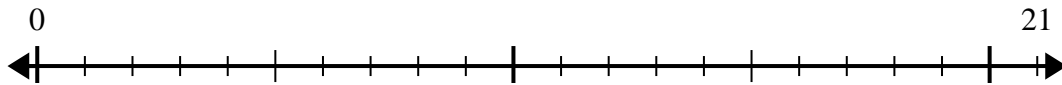
1. _____

2) $42:5=$



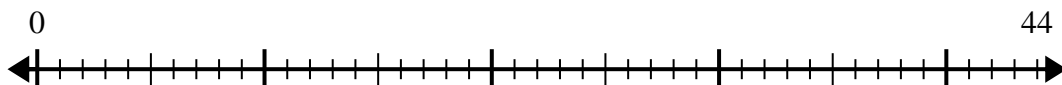
2. _____

3) $21:4=$



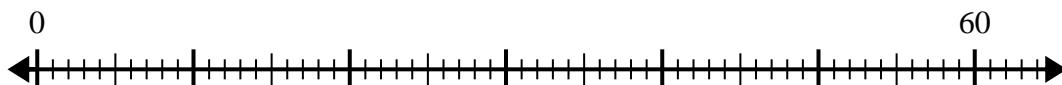
3. _____

4) $44:7=$



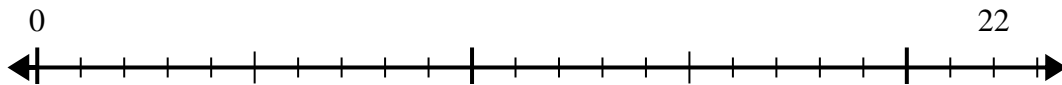
4. _____

5) $60:8=$



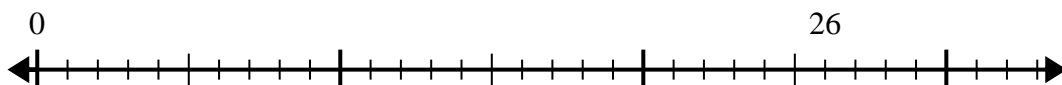
5. _____

6) $22:5=$



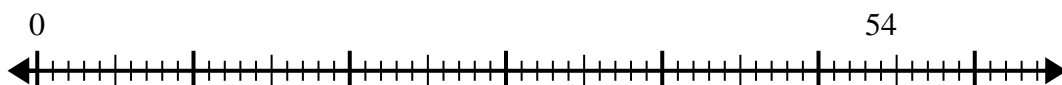
6. _____

7) $26:4=$



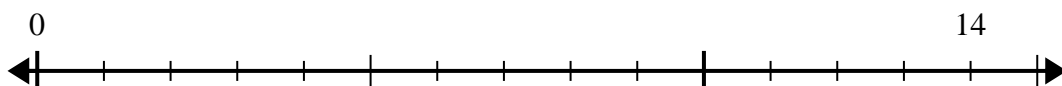
7. _____

8) $54:8=$



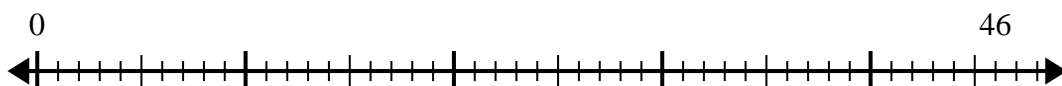
8. _____

9) $14:4=$



9. _____

10) $46:6=$

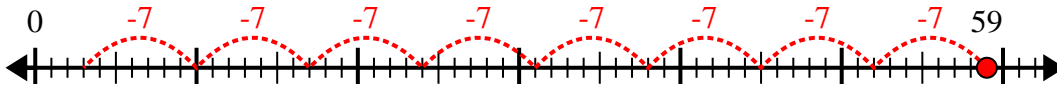


10. _____

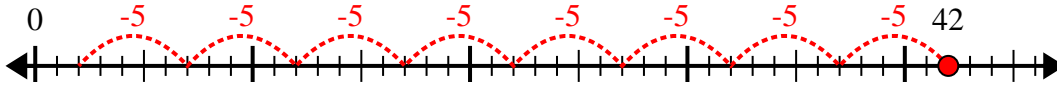


Verwenden Sie den Zahlenstrahl, um das Divisionsproblem zu lösen.

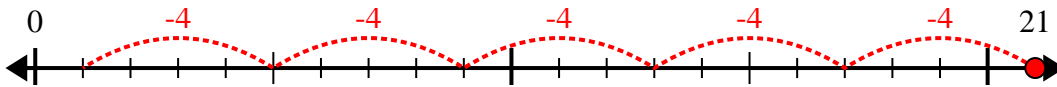
1) $59:7=$



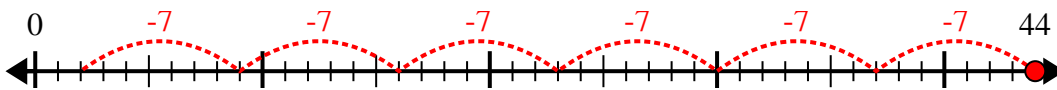
2) $42:5=$



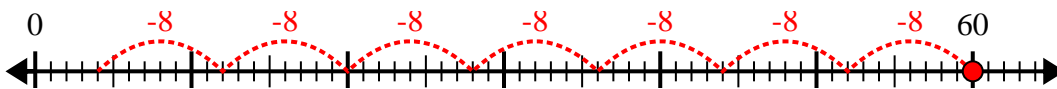
3) $21:4=$



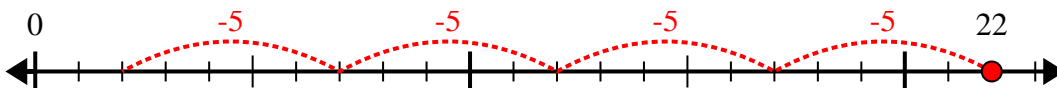
4) $44:7=$



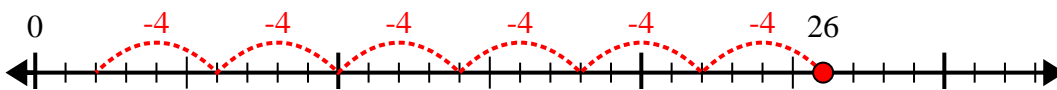
5) $60:8=$



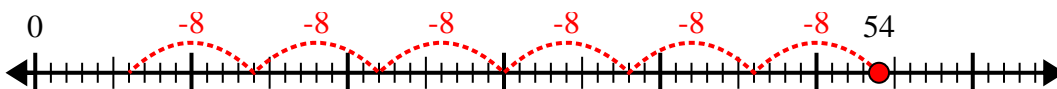
6) $22:5=$



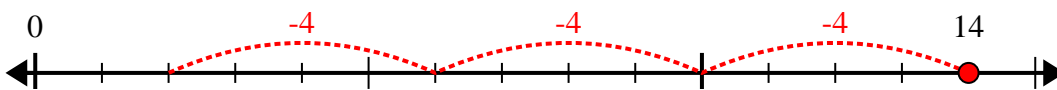
7) $26:4=$



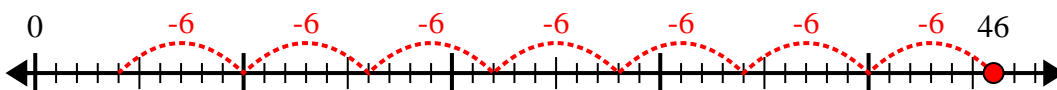
8) $54:8=$



9) $14:4=$



10) $46:6=$



Antworten

1. 8r3

2. 8r2

3. 5r1

4. 6r2

5. 7r4

6. 4r2

7. 6r2

8. 6r6

9. 3r2

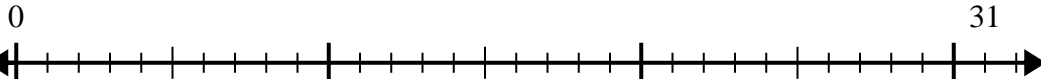
10. 7r4



Verwenden Sie den Zahlenstrahl, um das Divisionsproblem zu lösen.

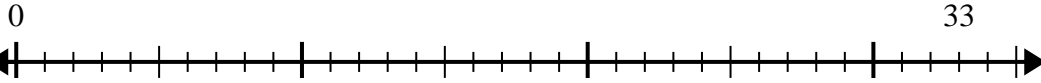
Antworten

1) $31:6=$



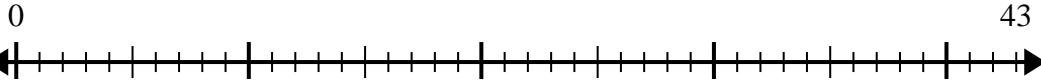
1. _____

2) $33:4=$



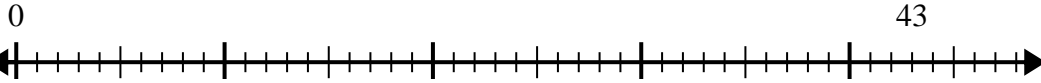
2. _____

3) $43:7=$



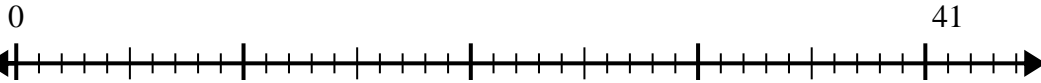
3. _____

4) $43:5=$



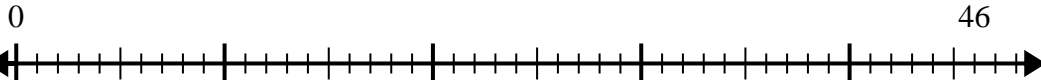
4. _____

5) $41:8=$



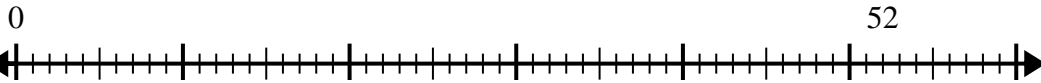
5. _____

6) $46:6=$



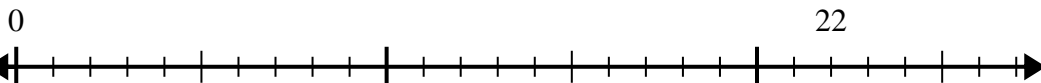
6. _____

7) $52:6=$



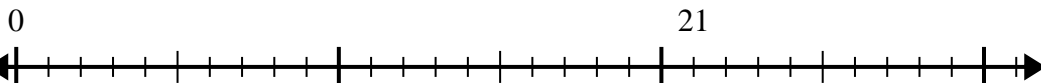
7. _____

8) $22:4=$



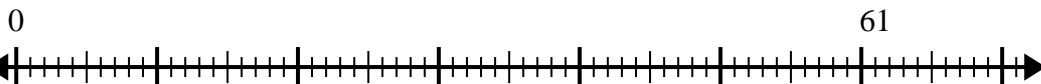
8. _____

9) $21:5=$



9. _____

10) $61:8=$

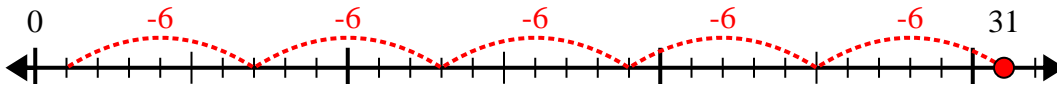


10. _____

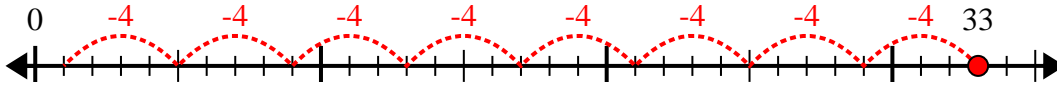


Verwenden Sie den Zahlenstrahl, um das Divisionsproblem zu lösen.

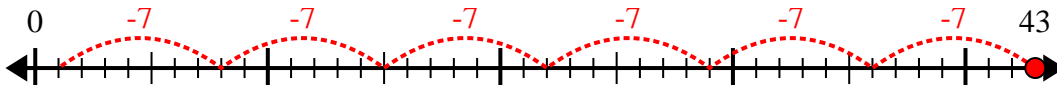
1) $31:6=$



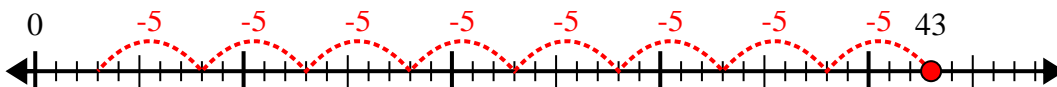
2) $33:4=$



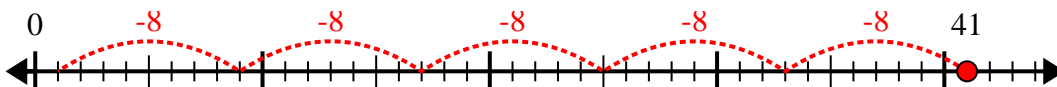
3) $43:7=$



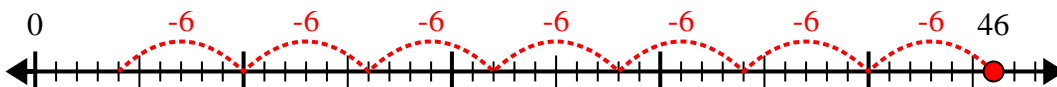
4) $43:5=$



5) $41:8=$



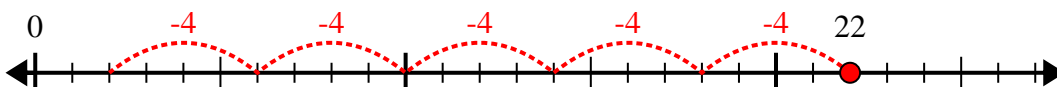
6) $46:6=$



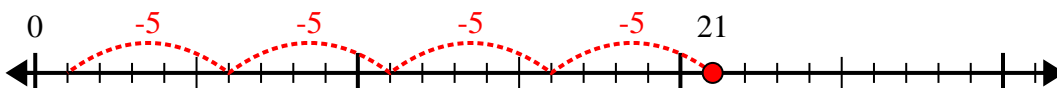
7) $52:6=$



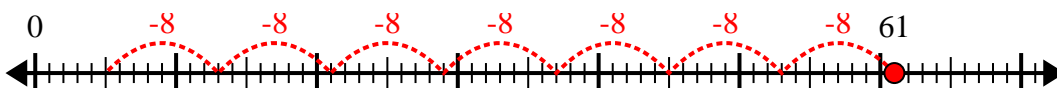
8) $22:4=$



9) $21:5=$



10) $61:8=$



Antworten

1. 5r1

2. 8r1

3. 6r1

4. 8r3

5. 5r1

6. 7r4

7. 8r4

8. 5r2

9. 4r1

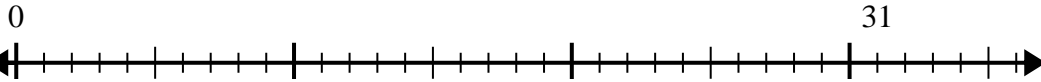
10. 7r5



Verwenden Sie den Zahlenstrahl, um das Divisionsproblem zu lösen.

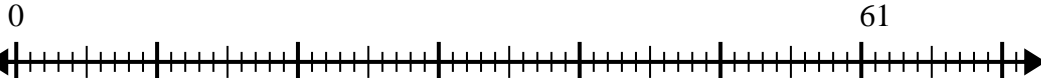
Antworten

1) $31:8=$



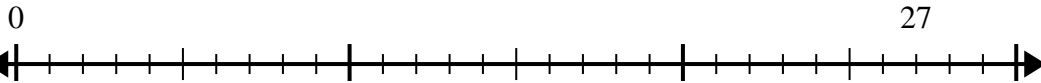
1. _____

2) $61:8=$



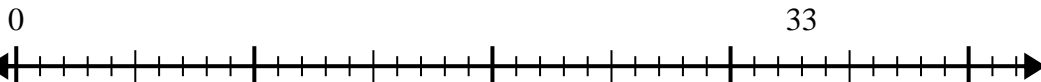
2. _____

3) $27:4=$



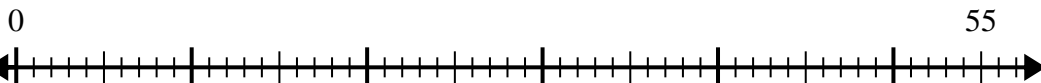
3. _____

4) $33:4=$



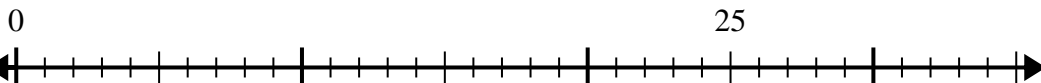
4. _____

5) $55:8=$



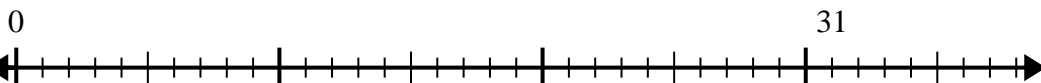
5. _____

6) $25:6=$



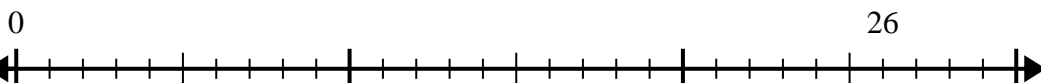
6. _____

7) $31:4=$



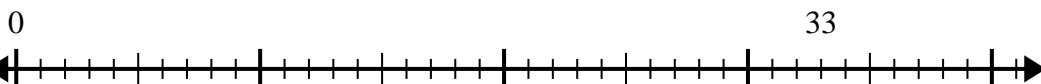
7. _____

8) $26:7=$



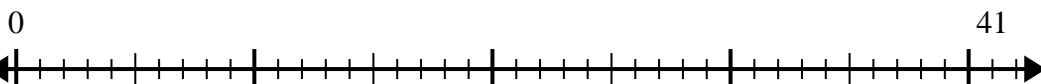
8. _____

9) $33:7=$



9. _____

10) $41:5=$

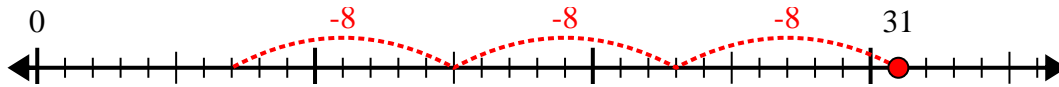


10. _____

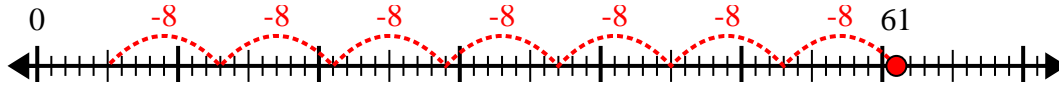


Verwenden Sie den Zahlenstrahl, um das Divisionsproblem zu lösen.

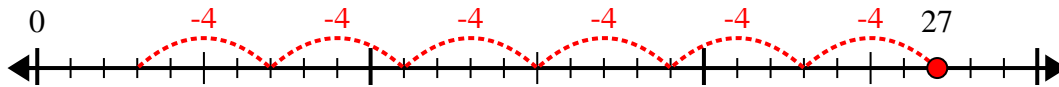
1) $31:8=$



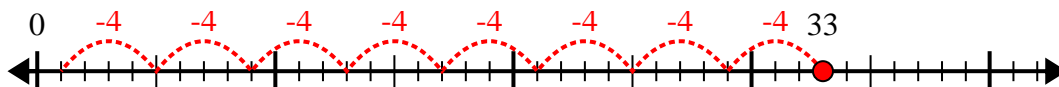
2) $61:8=$



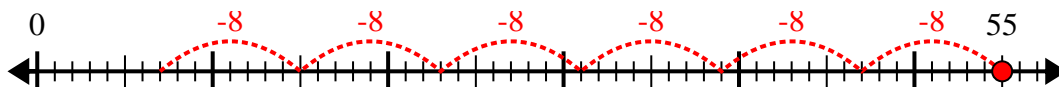
3) $27:4=$



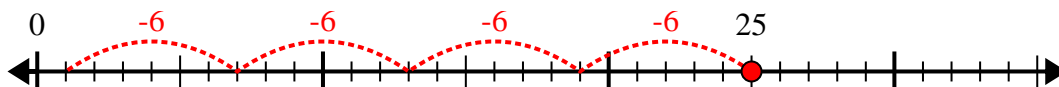
4) $33:4=$



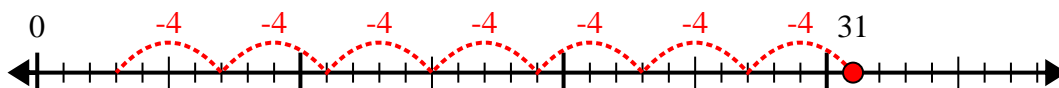
5) $55:8=$



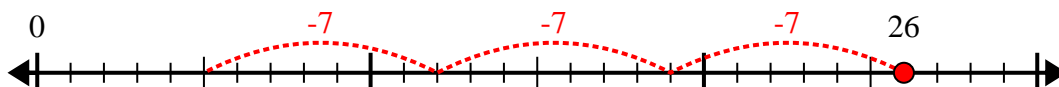
6) $25:6=$



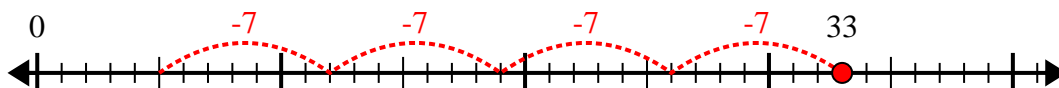
7) $31:4=$



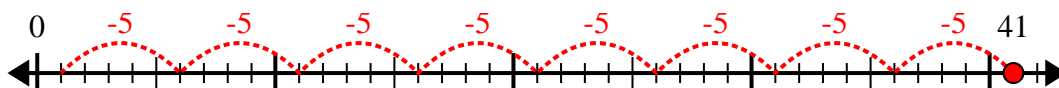
8) $26:7=$



9) $33:7=$



10) $41:5=$



Antworten

1. 3r7

2. 7r5

3. 6r3

4. 8r1

5. 6r7

6. 4r1

7. 7r3

8. 3r5

9. 4r5

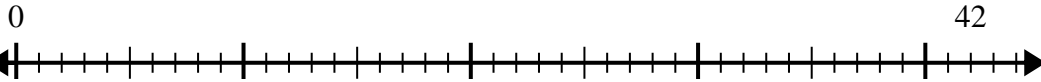
10. 8r1



Verwenden Sie den Zahlenstrahl, um das Divisionsproblem zu lösen.

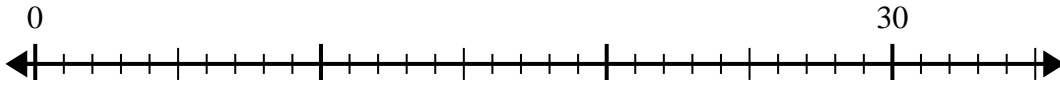
Antworten

1) $42:5=$



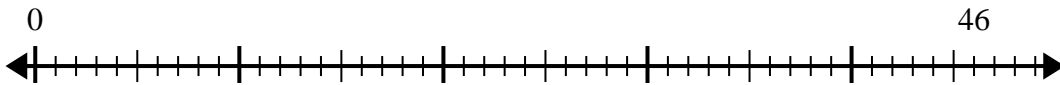
1. _____

2) $30:4=$



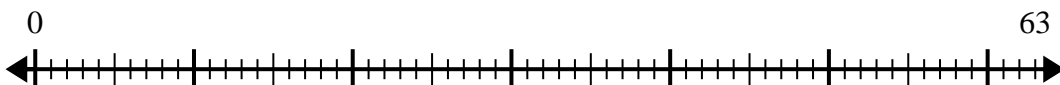
2. _____

3) $46:6=$



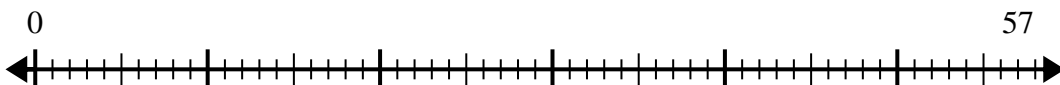
3. _____

4) $63:8=$



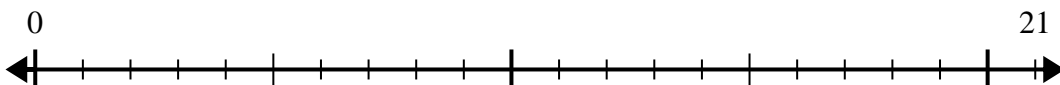
4. _____

5) $57:7=$



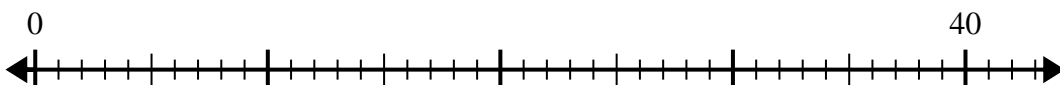
5. _____

6) $21:5=$



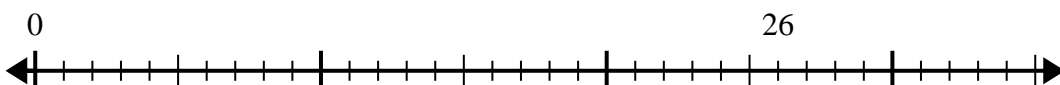
6. _____

7) $40:7=$



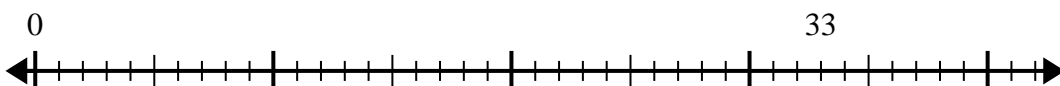
7. _____

8) $26:8=$



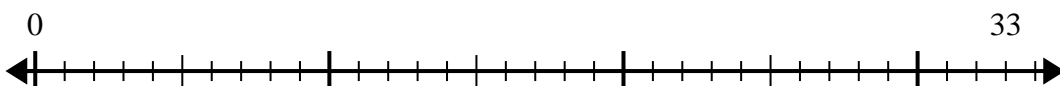
8. _____

9) $33:5=$



9. _____

10) $33:4=$

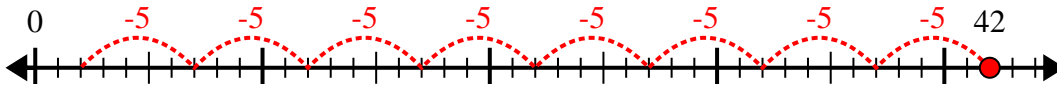


10. _____

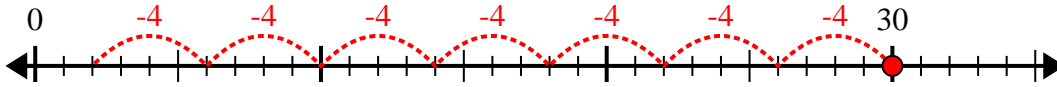


Verwenden Sie den Zahlenstrahl, um das Divisionsproblem zu lösen.

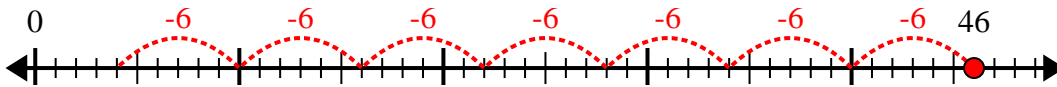
1) $42:5=$



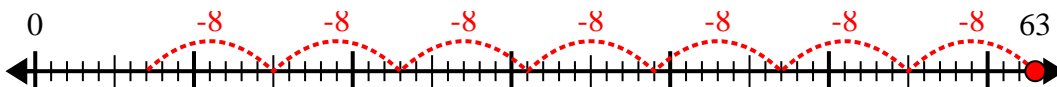
2) $30:4=$



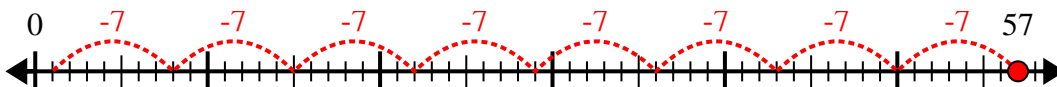
3) $46:6=$



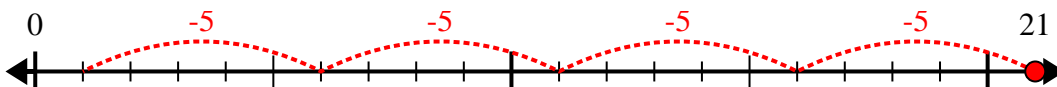
4) $63:8=$



5) $57:7=$



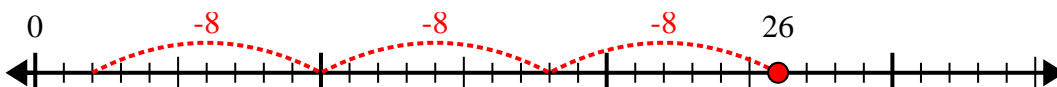
6) $21:5=$



7) $40:7=$



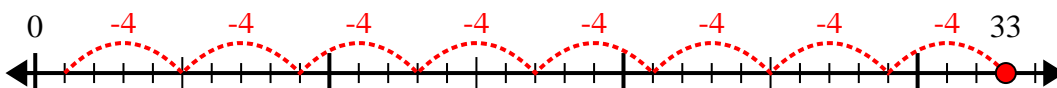
8) $26:8=$



9) $33:5=$



10) $33:4=$



Antworten

1. 8r2

2. 7r2

3. 7r4

4. 7r7

5. 8r1

6. 4r1

7. 5r5

8. 3r2

9. 6r3

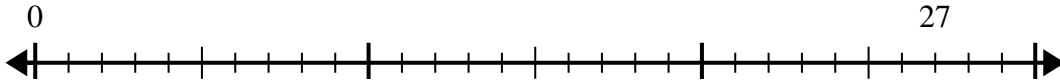
10. 8r1



Verwenden Sie den Zahlenstrahl, um das Divisionsproblem zu lösen.

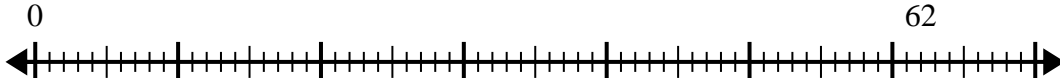
Antworten

1) $27:4=$
0



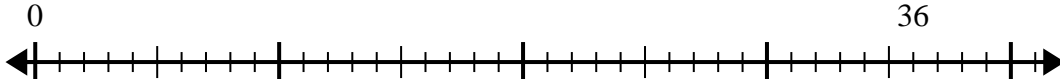
1. _____

2) $62:8=$
0



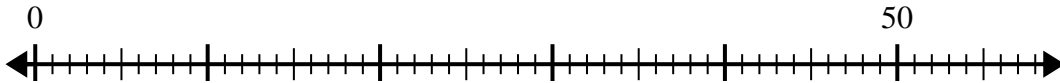
2. _____

3) $36:5=$
0



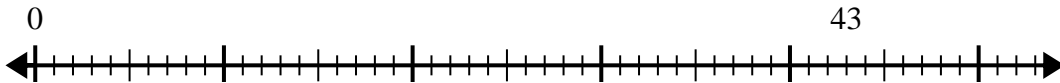
3. _____

4) $50:8=$
0



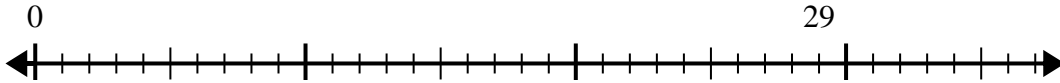
4. _____

5) $43:6=$
0



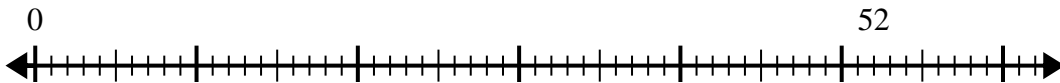
5. _____

6) $29:6=$
0



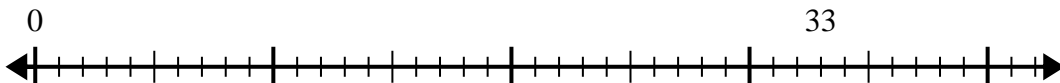
6. _____

7) $52:6=$
0



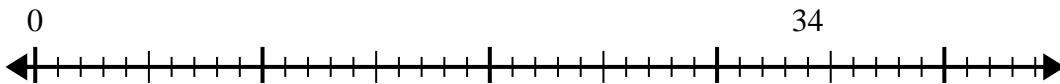
7. _____

8) $33:5=$
0



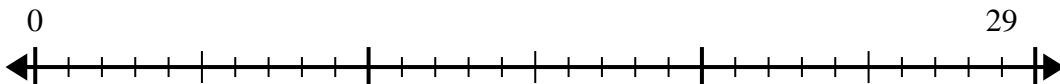
8. _____

9) $34:7=$
0



9. _____

10) $29:4=$
0

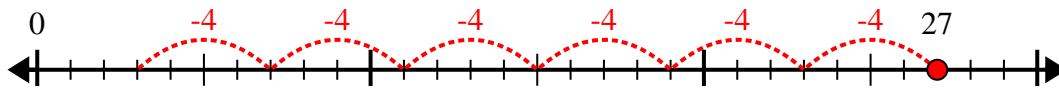


10. _____

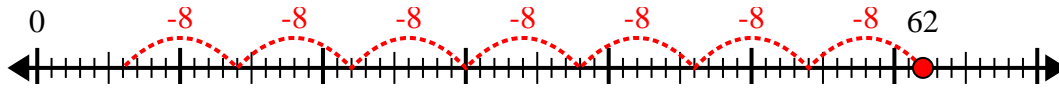


Verwenden Sie den Zahlenstrahl, um das Divisionsproblem zu lösen.

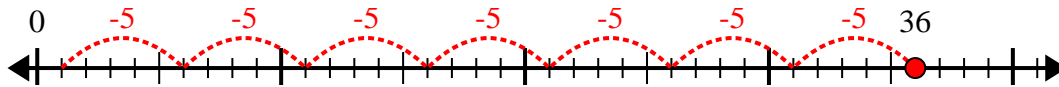
1) $27:4=$



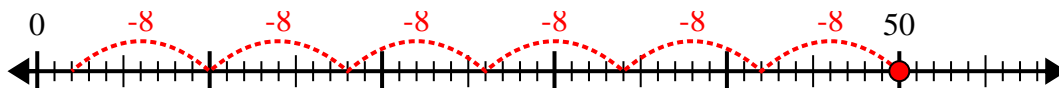
2) $62:8=$



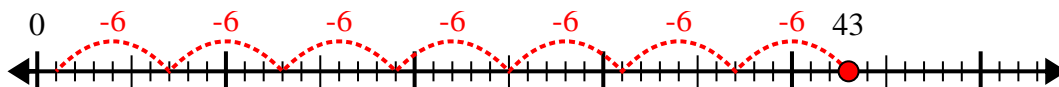
3) $36:5=$



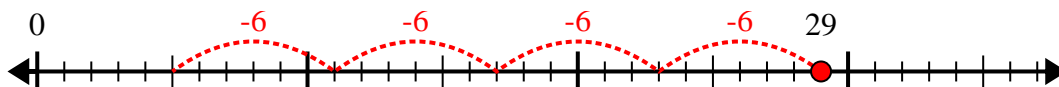
4) $50:8=$



5) $43:6=$



6) $29:6=$



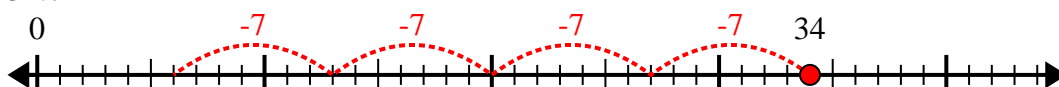
7) $52:6=$



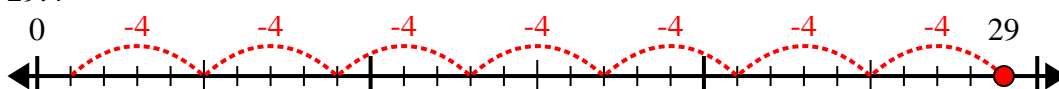
8) $33:5=$



9) $34:7=$



10) $29:4=$



Antworten

1. **6r3**

2. **7r6**

3. **7r1**

4. **6r2**

5. **7r1**

6. **4r5**

7. **8r4**

8. **6r3**

9. **4r6**

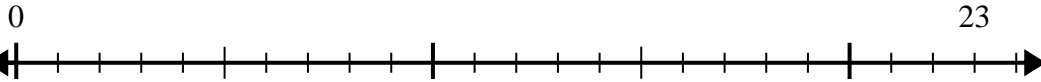
10. **7r1**



Verwenden Sie den Zahlenstrahl, um das Divisionsproblem zu lösen.

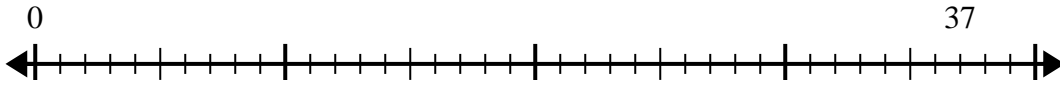
Antworten

1) $23:4=$



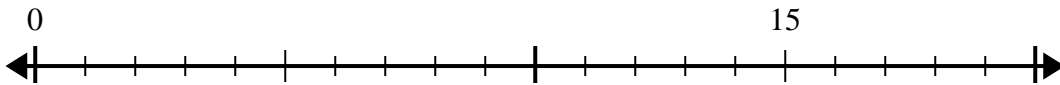
1. _____

2) $37:8=$



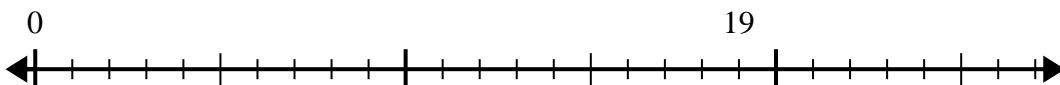
2. _____

3) $15:4=$



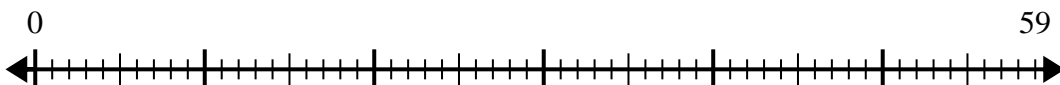
3. _____

4) $19:6=$



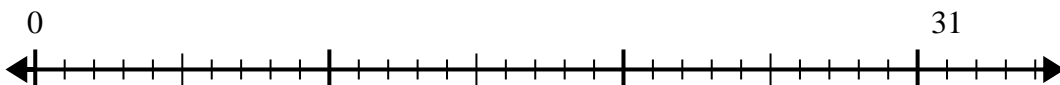
4. _____

5) $59:8=$



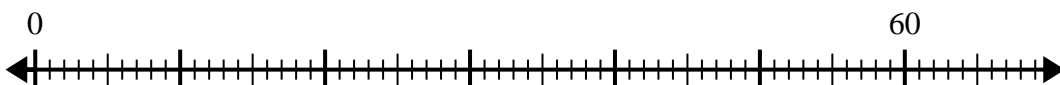
5. _____

6) $31:8=$



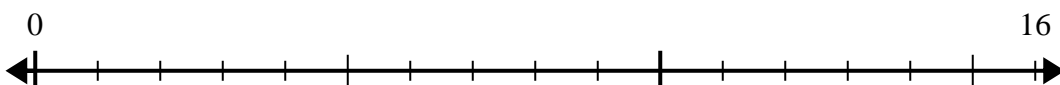
6. _____

7) $60:7=$



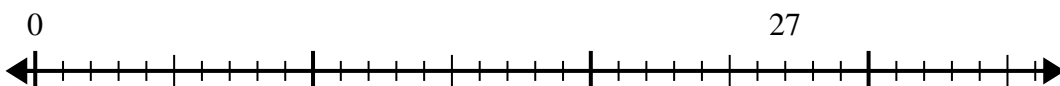
7. _____

8) $16:5=$



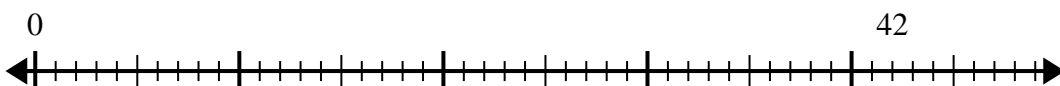
8. _____

9) $27:4=$



9. _____

10) $42:5=$

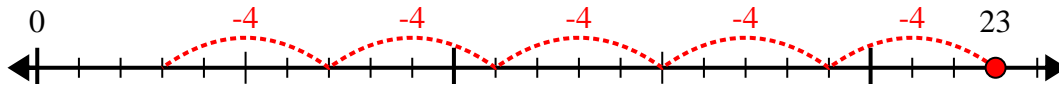


10. _____

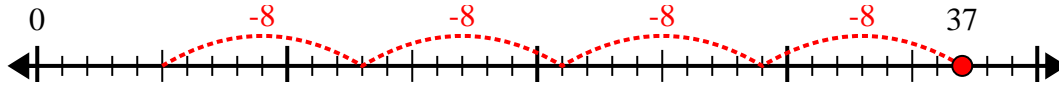


Verwenden Sie den Zahlenstrahl, um das Divisionsproblem zu lösen.

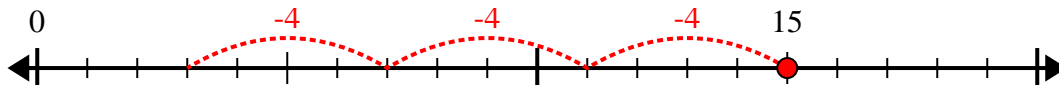
1) $23:4=$



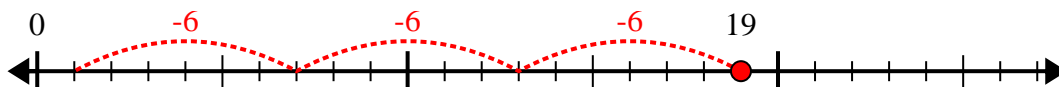
2) $37:8=$



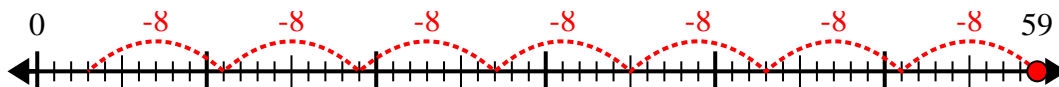
3) $15:4=$



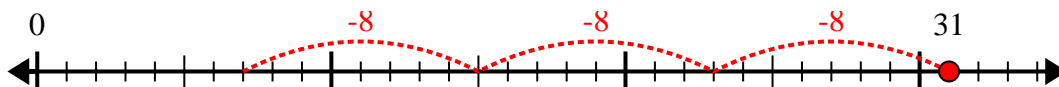
4) $19:6=$



5) $59:8=$



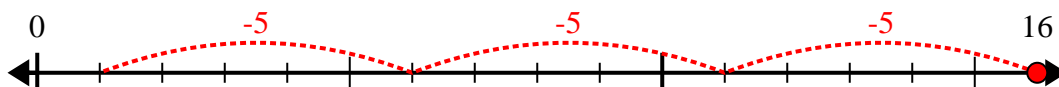
6) $31:8=$



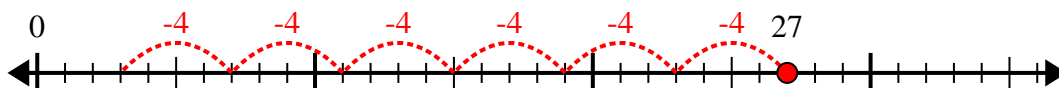
7) $60:7=$



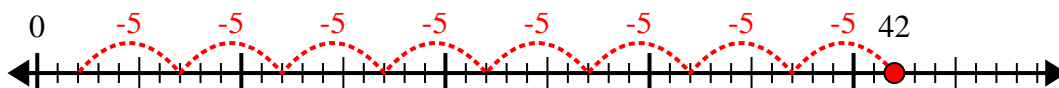
8) $16:5=$



9) $27:4=$



10) $42:5=$



Antworten

1. 5r3

2. 4r5

3. 3r3

4. 3r1

5. 7r3

6. 3r7

7. 8r4

8. 3r1

9. 6r3

10. 8r2