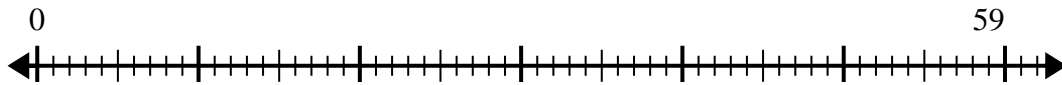




Verwenden Sie den Zahlenstrahl, um das Divisionsproblem zu lösen.

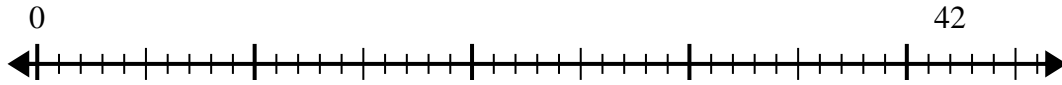
Antworten

1) $59:7=$



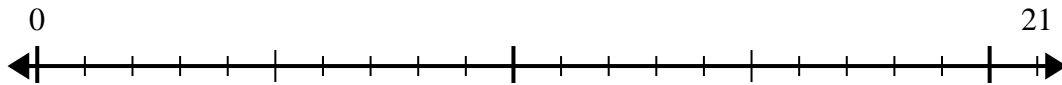
1. _____

2) $42:5=$



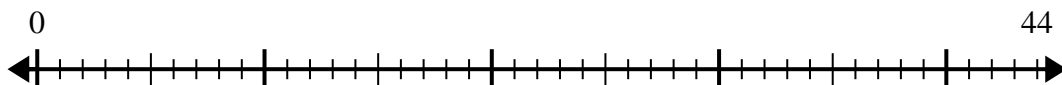
2. _____

3) $21:4=$



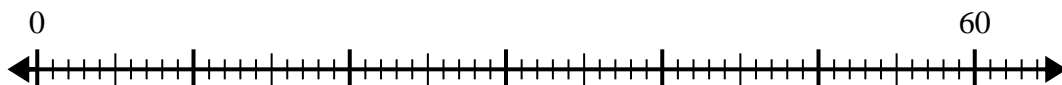
3. _____

4) $44:7=$



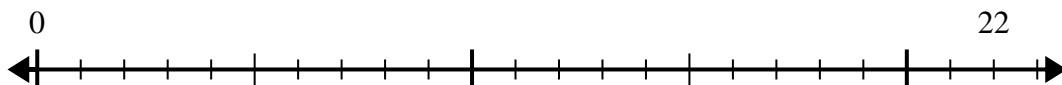
4. _____

5) $60:8=$



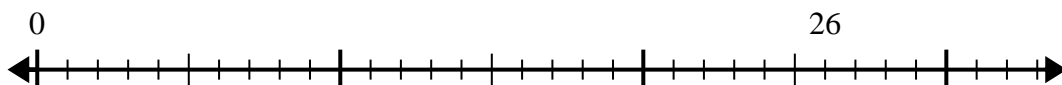
5. _____

6) $22:5=$



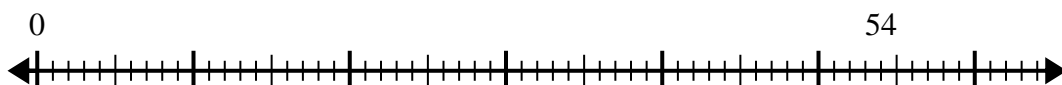
6. _____

7) $26:4=$



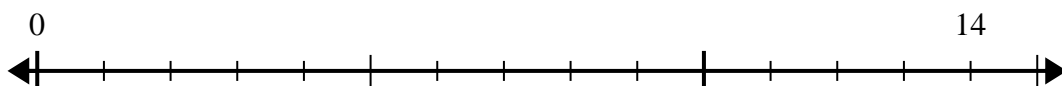
7. _____

8) $54:8=$



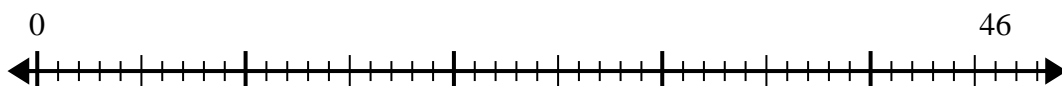
8. _____

9) $14:4=$



9. _____

10) $46:6=$

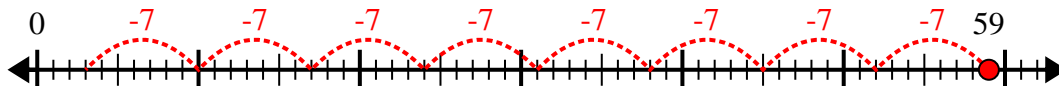


10. _____

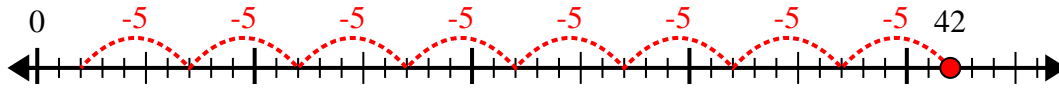


Verwenden Sie den Zahlenstrahl, um das Divisionsproblem zu lösen.

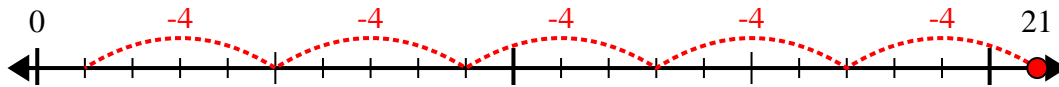
1) $59:7=$



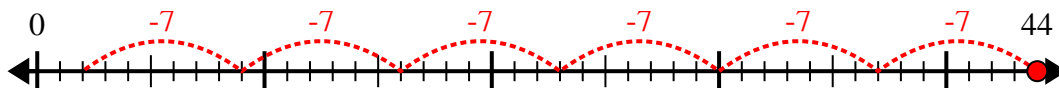
2) $42:5=$



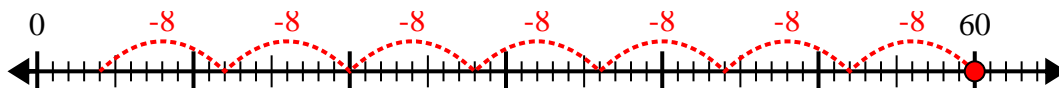
3) $21:4=$



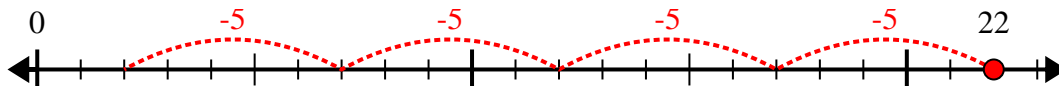
4) $44:7=$



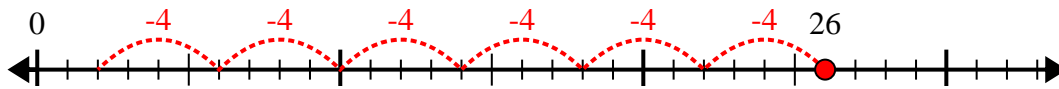
5) $60:8=$



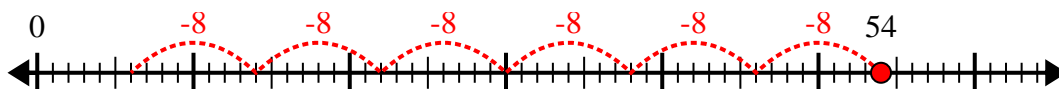
6) $22:5=$



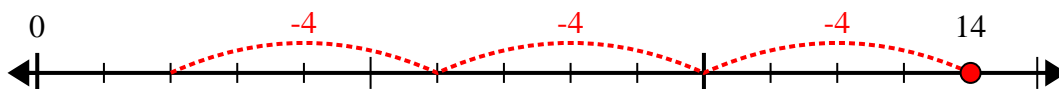
7) $26:4=$



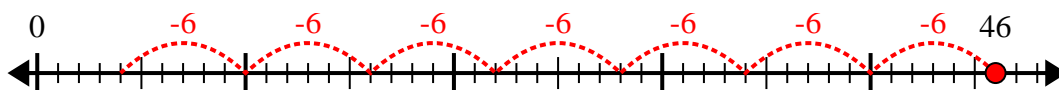
8) $54:8=$



9) $14:4=$



10) $46:6=$



Antworten

1. 8r3

2. 8r2

3. 5r1

4. 6r2

5. 7r4

6. 4r2

7. 6r2

8. 6r6

9. 3r2

10. 7r4