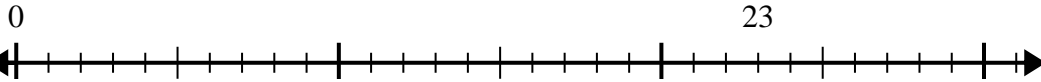




Verwenden Sie den Zahlenstrahl, um das Divisionsproblem zu lösen.

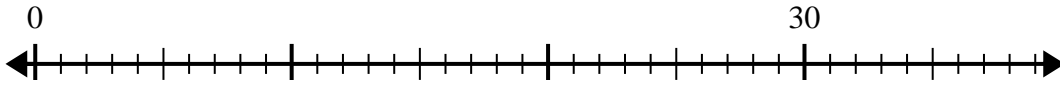
Antworten

1) $23:5=$



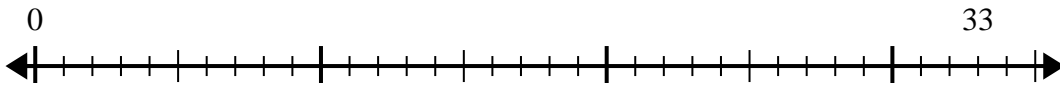
1. _____

2) $30:4=$



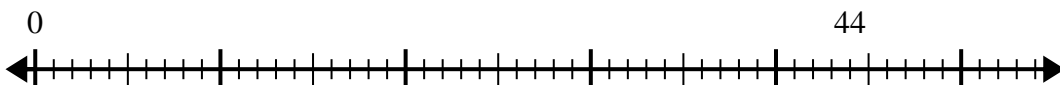
2. _____

3) $33:6=$



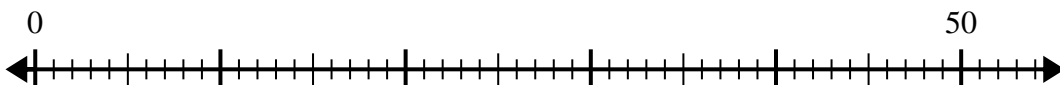
3. _____

4) $44:6=$



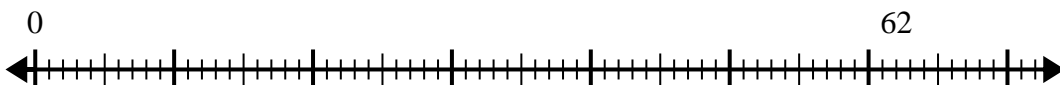
4. _____

5) $50:6=$



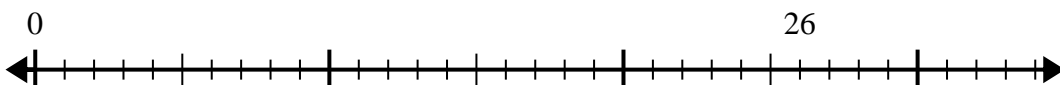
5. _____

6) $62:8=$



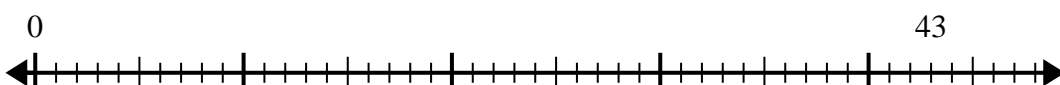
6. _____

7) $26:6=$



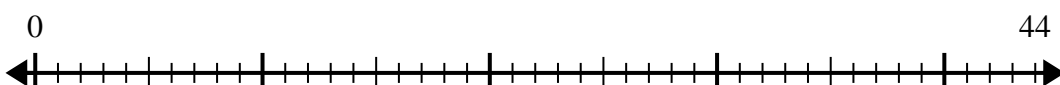
7. _____

8) $43:8=$



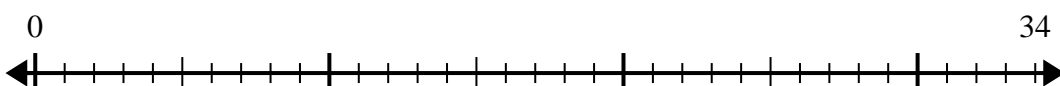
8. _____

9) $44:7=$



9. _____

10) $34:4=$



10. _____

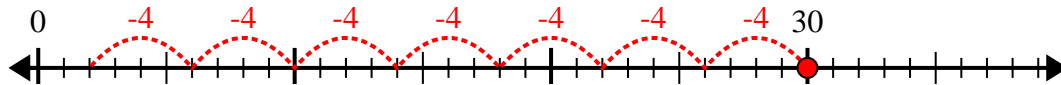


Verwenden Sie den Zahlenstrahl, um das Divisionsproblem zu lösen.

1) $23:5=$



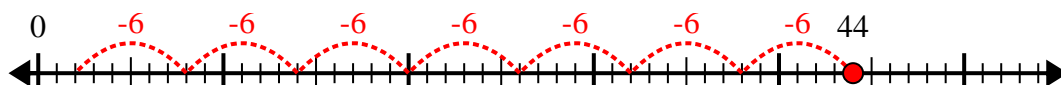
2) $30:4=$



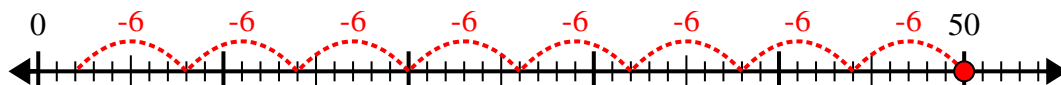
3) $33:6=$



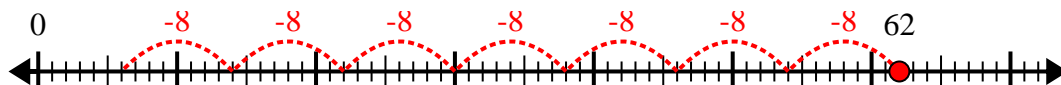
4) $44:6=$



5) $50:6=$



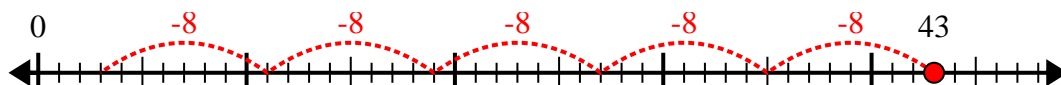
6) $62:8=$



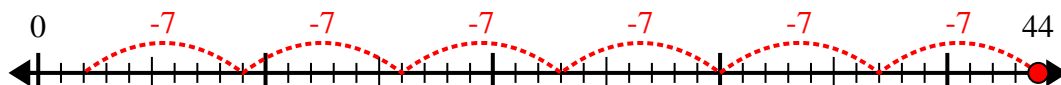
7) $26:6=$



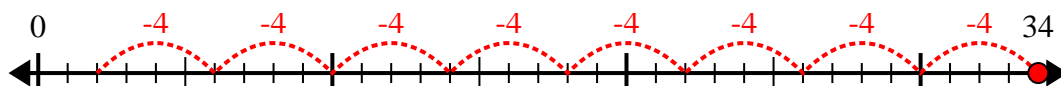
8) $43:8=$



9) $44:7=$



10) $34:4=$



Antworten

1. 4r3

2. 7r2

3. 5r3

4. 7r2

5. 8r2

6. 7r6

7. 4r2

8. 5r3

9. 6r2

10. 8r2