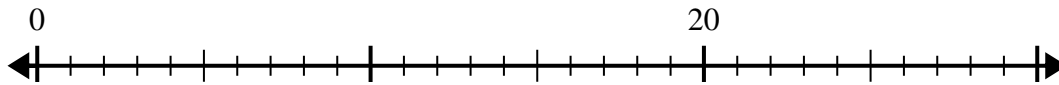




Verwenden Sie den Zahlenstrahl, um das Divisionsproblem zu lösen.

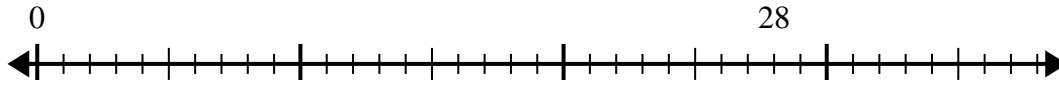
**Antworten**

1)  $20:5=$



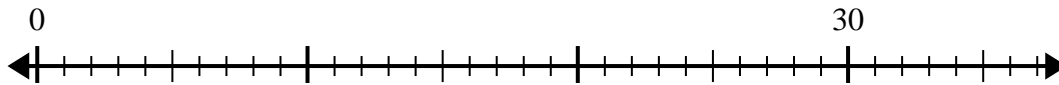
1. \_\_\_\_\_

2)  $28:4=$



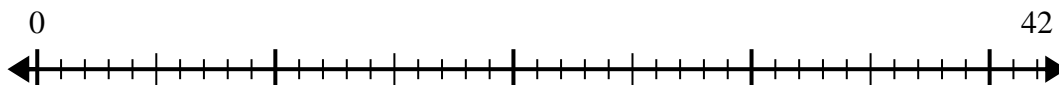
2. \_\_\_\_\_

3)  $30:6=$



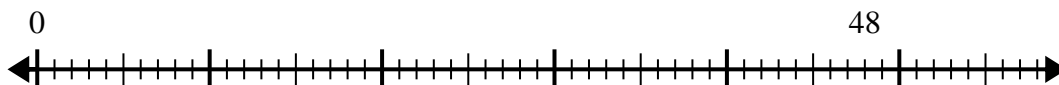
3. \_\_\_\_\_

4)  $42:6=$



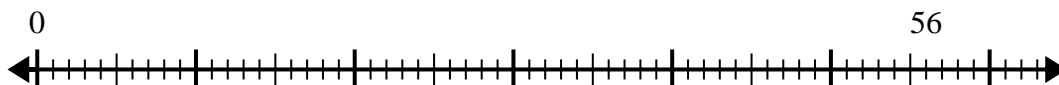
4. \_\_\_\_\_

5)  $48:6=$



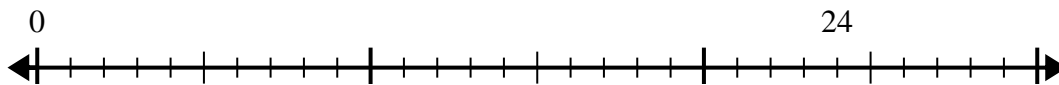
5. \_\_\_\_\_

6)  $56:8=$



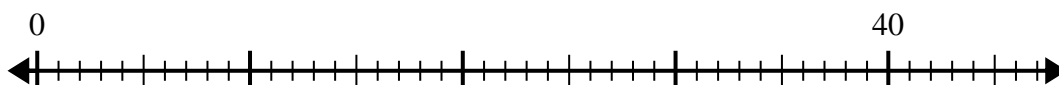
6. \_\_\_\_\_

7)  $24:6=$



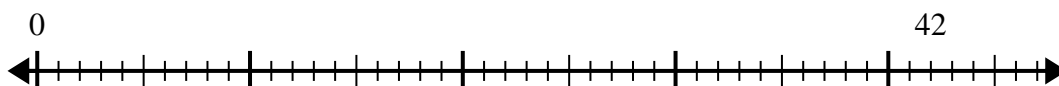
7. \_\_\_\_\_

8)  $40:8=$



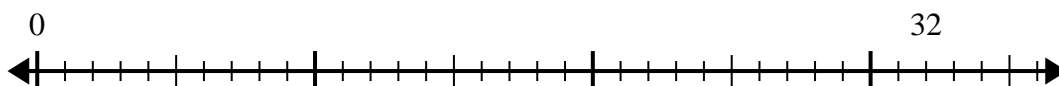
8. \_\_\_\_\_

9)  $42:7=$



9. \_\_\_\_\_

10)  $32:4=$

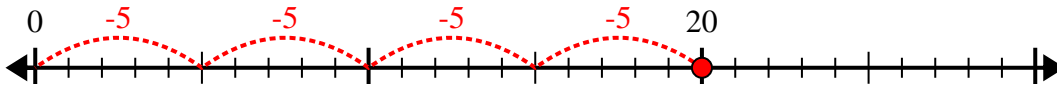


10. \_\_\_\_\_

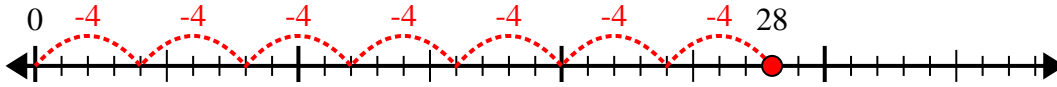


Verwenden Sie den Zahlenstrahl, um das Divisionsproblem zu lösen.

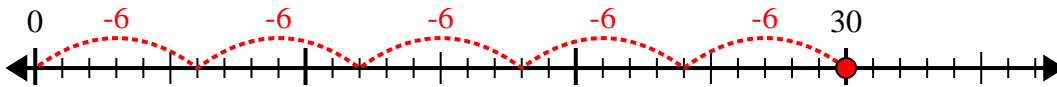
1)  $20:5=$



2)  $28:4=$



3)  $30:6=$



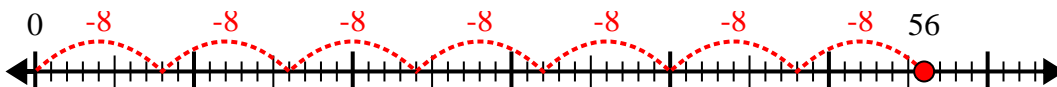
4)  $42:6=$



5)  $48:6=$



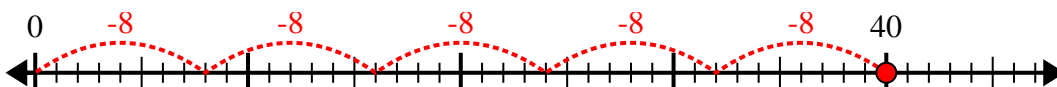
6)  $56:8=$



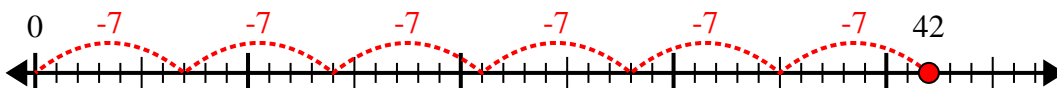
7)  $24:6=$



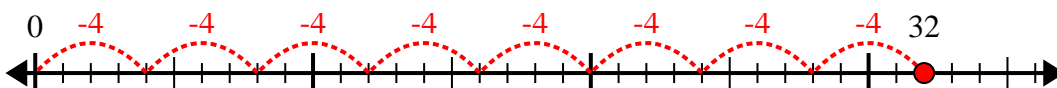
8)  $40:8=$



9)  $42:7=$



10)  $32:4=$



**Antworten**

1. 4

2. 7

3. 5

4. 7

5. 8

6. 7

7. 4

8. 5

9. 6

10. 8