



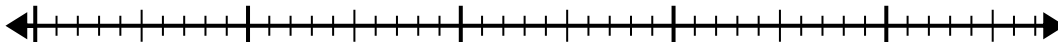
Verwenden Sie den Zahlenstrahl, um das Divisionsproblem zu lösen.

**Antworten**

1)  $40:5=$

0

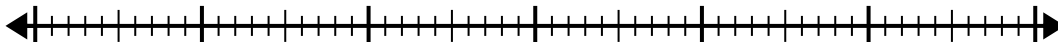
40



2)  $56:7=$

0

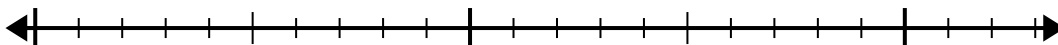
56



3)  $15:5=$

0

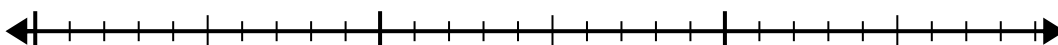
15



4)  $28:4=$

0

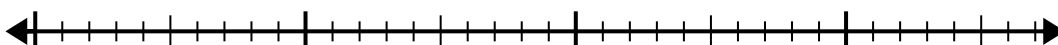
28



5)  $35:7=$

0

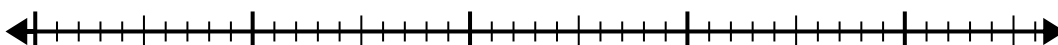
35



6)  $40:8=$

0

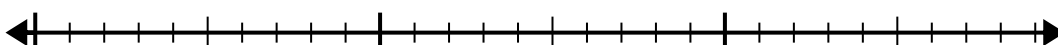
40



7)  $24:4=$

0

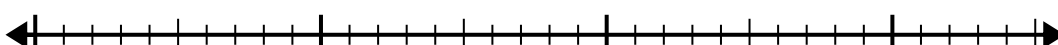
24



8)  $30:5=$

0

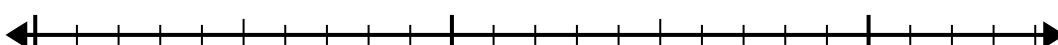
30



9)  $20:4=$

0

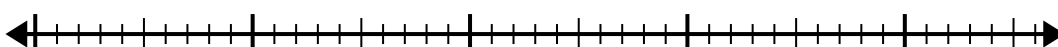
20



10)  $42:6=$

0

42

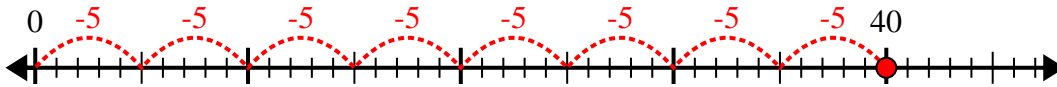


1. \_\_\_\_\_
2. \_\_\_\_\_
3. \_\_\_\_\_
4. \_\_\_\_\_
5. \_\_\_\_\_
6. \_\_\_\_\_
7. \_\_\_\_\_
8. \_\_\_\_\_
9. \_\_\_\_\_
10. \_\_\_\_\_

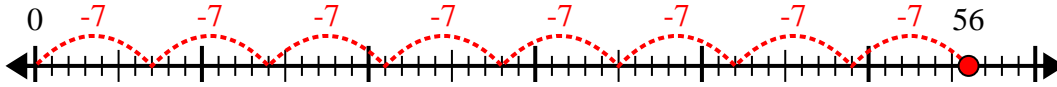


Verwenden Sie den Zahlenstrahl, um das Divisionsproblem zu lösen.

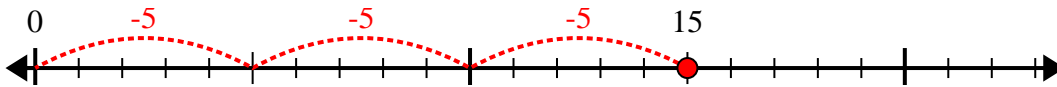
1)  $40:5=$



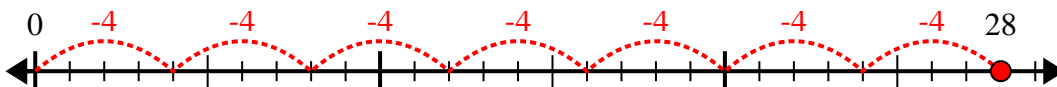
2)  $56:7=$



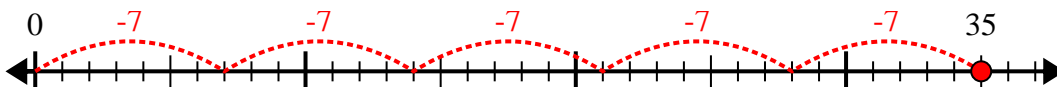
3)  $15:5=$



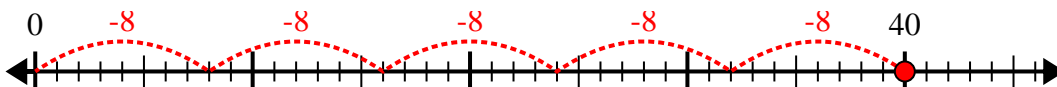
4)  $28:4=$



5)  $35:7=$



6)  $40:8=$



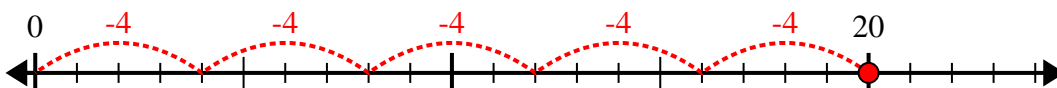
7)  $24:4=$



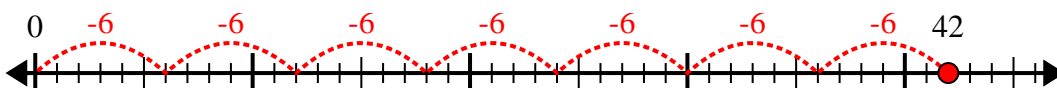
8)  $30:5=$



9)  $20:4=$



10)  $42:6=$



**Antworten**

1. 8

2. 8

3. 3

4. 7

5. 5

6. 5

7. 6

8. 6

9. 5

10. 7