


Benutze den Zahlenstrahl zur Lösung jeder Aufgabe.

Antworten

1) $50:10=0$




2) $16:4=0$

A horizontal number line with arrows at both ends. Major tick marks are labeled 0, 10, 16, and 20. There are 4 small tick marks between each major tick mark, representing intervals of 1 unit. The number 16 is written in a larger font above the tick mark for 16.

3) $14:7=0$


A horizontal number line with an arrow pointing to the right. There are three major tick marks labeled 0, 10, and 14. Between 0 and 10, there are 10 minor tick marks, representing increments of 1. Between 10 and 14, there are 4 minor tick marks, also representing increments of 1. The total length of the line is 14 units.

4) $28:7=0$



The number line shows the division $28:7=0$. The line has major tick marks at 0, 10, 20, 28, and 30. There are 10 small tick marks between each major tick mark, representing increments of 1. The number 28 is written above the tick mark for 28, and 30 is written above the tick mark for 30. The line ends with an arrow pointing to the right.


5) $20:4=0$




6) $45:9=0$

A horizontal number line with arrows at both ends. Major tick marks are labeled 0, 10, 20, 30, 40, 45, and 50. Minor tick marks are present between every two major tick marks. The number 45 is written in a larger, bold font compared to the other labels.

7) $20:10=0$




8) $16:8=0$




A horizontal number line with an arrowhead on the right. Major tick marks are labeled 0, 10, 16, and 20. There are 10 small tick marks between 0 and 10, 4 small tick marks between 10 and 16, and 4 small tick marks between 16 and 20.

9) $12:4=0$




10 12 20

10) $4:2=0$



A horizontal number line with an arrowhead at the right end. There are 11 tick marks in total, representing integers from 0 to 10. The first tick mark on the left is labeled '0' above it. The fifth tick mark from the left is labeled '4' above it. The eleventh tick mark from the left is labeled '10' above it.

11) $36:9=0$



A number line starting at 0 and ending at 40. Major tick marks are labeled at 10, 20, 30, 36, and 40. There are 10 small tick marks between each major tick mark, representing increments of 1. The number 36 is written in bold above the 36th tick mark.

1. _____

2. _____

3. _____

4. _____

5. _____

6. _____

7.

8.

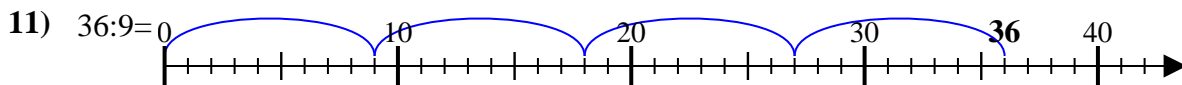
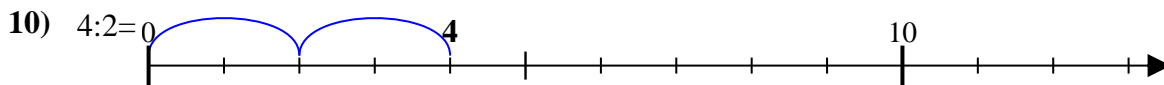
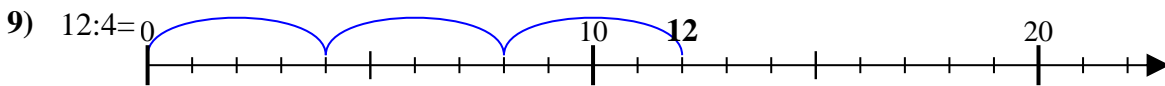
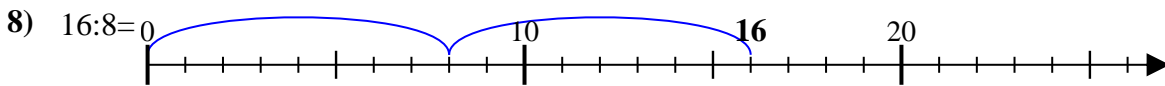
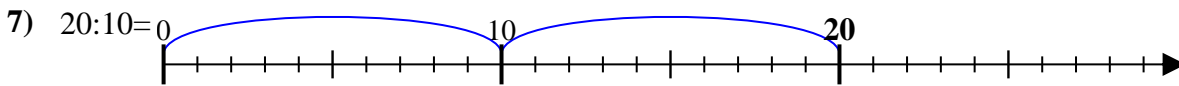
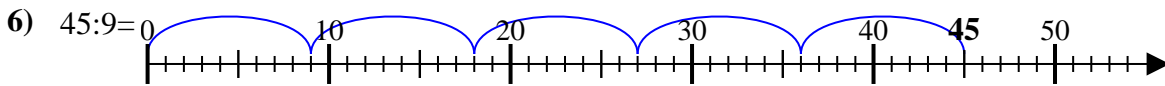
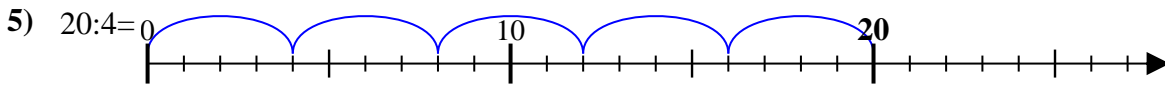
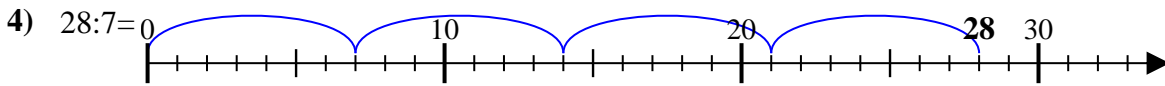

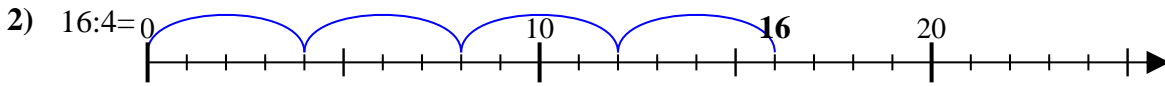
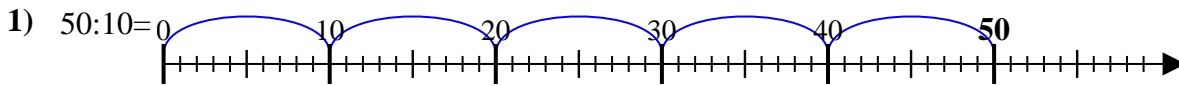
9.

10.

11.

Benutze den Zahlenstrahl zur Lösung jeder Aufgabe.

Antworten



1. 5

2. 4

3. 2

4. 4

5. 5

6. 5

7. 2

8. 2

9. 3

10. 2

11. 4