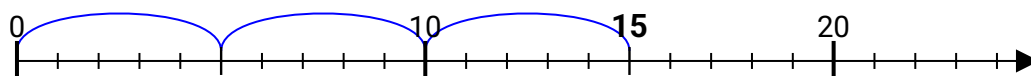
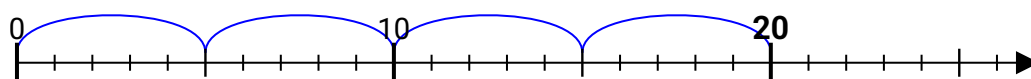


Benutze den Zahlenstrahl zur Lösung jeder Aufgabe.

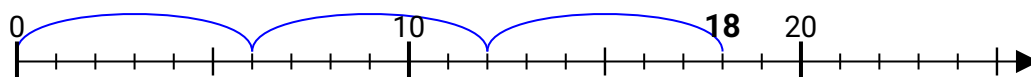
1) $15:5=$



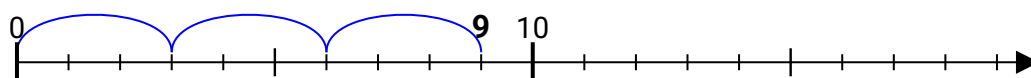
2) $20:5=$



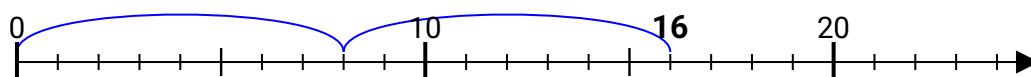
3) $18:6=$



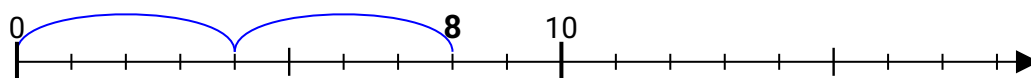
4) $9:3=$



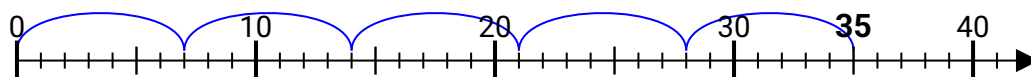
5) $16:8=$



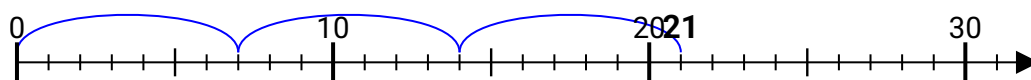
6) $8:4=$



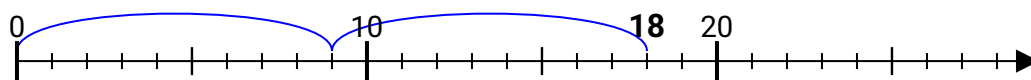
7) $35:7=$



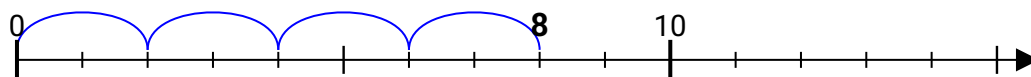
8) $21:7=$



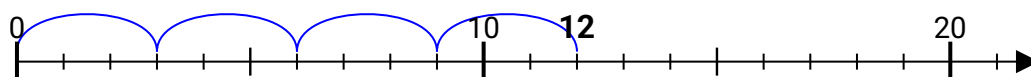
9) $18:9=$



10) $8:2=$



11) $12:3=$



Antworten

1. **3**

2. **4**

3. **3**

4. 3

5. 2

6. **2**

7. **5**

8. **3**

9. **2**

10. **4**

11. **4**