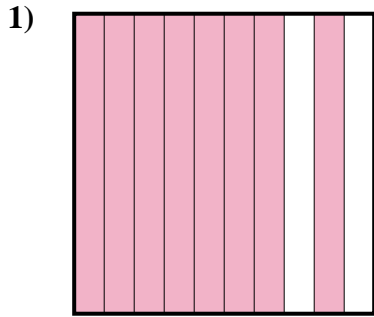
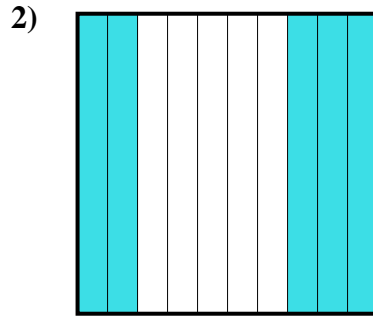





Stelle fest, welcher Buchstabe die schraffierte Fläche in Bezug auf das Ganze richtig darstellt.

Antworten

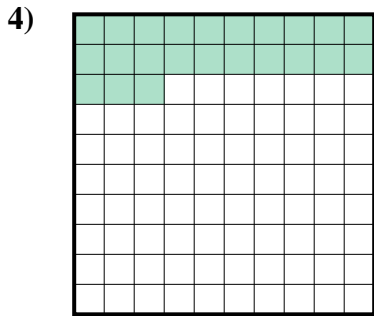
- A. 8
B. 800,0
C. 80
D. 0,8



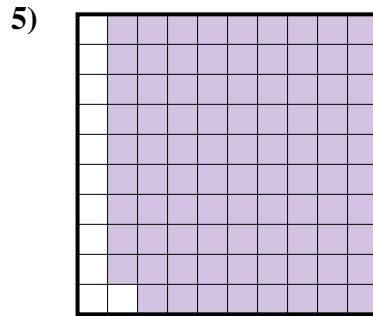
- A. 500,0
B. 0,5
C. 0,05
D. 5



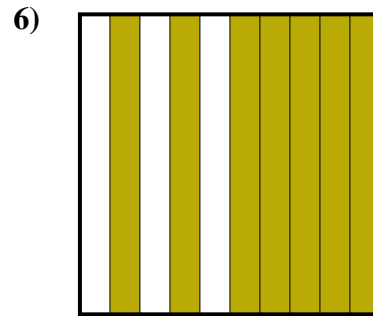
- A. 1
B. 0,1
C. 100,00
D. 100,0



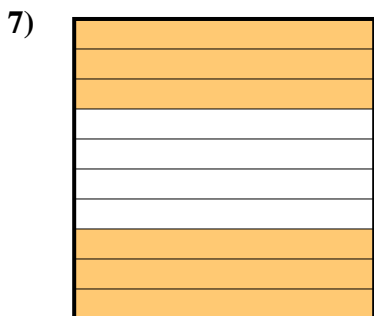
- A. 0,023
B. 230,0
C. 2,3
D. 0,23




- A. 0,89
B. 0,089
C. 8,9
D. 890,0



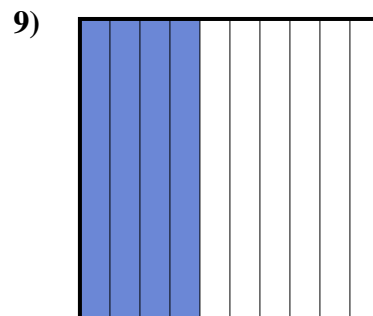
- A. 70
B. 700,0
C. 0,07
D. 0,7



- A. 60
B. 0,06
C. 0,6
D. 600,00



- A. 300,0
B. 0,3
C. 30
D. 300,00

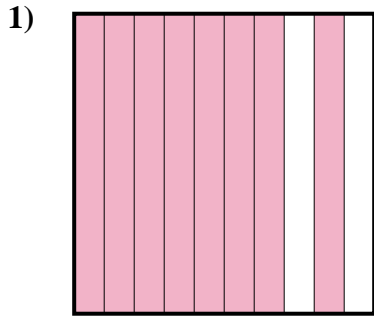


- A. 0,4
B. 0,04
C. 400,0
D. 400,00

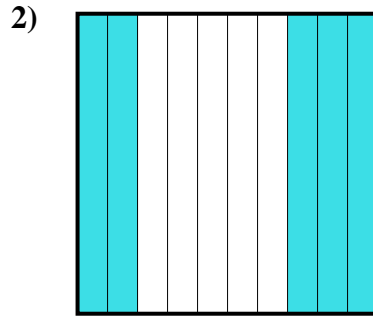
1. _____
2. _____
3. _____
4. _____
5. _____
6. _____
7. _____
8. _____
9. _____




Stelle fest, welcher Buchstabe die schraffierte Fläche in Bezug auf das Ganze richtig darstellt.

Antworten

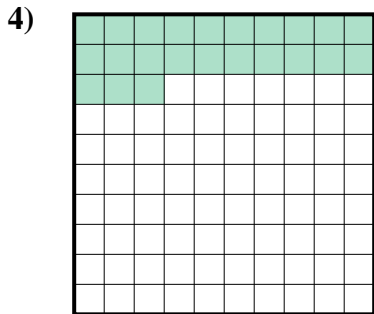
- A. 8
B. 800,0
C. 80
D. 0,8



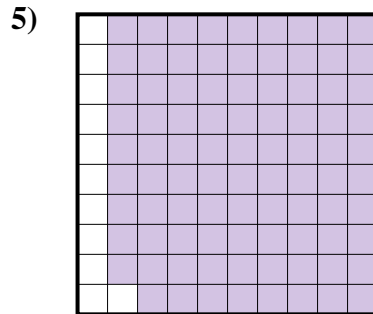
- A. 500,0
B. 0,5
C. 0,05
D. 5



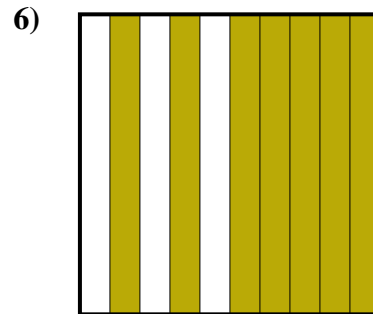
- A. 1
B. 0,1
C. 100,00
D. 100,0




- A. 0,023
B. 230,0
C. 2,3
D. 0,23




- A. 0,89
B. 0,089
C. 8,9
D. 890,0



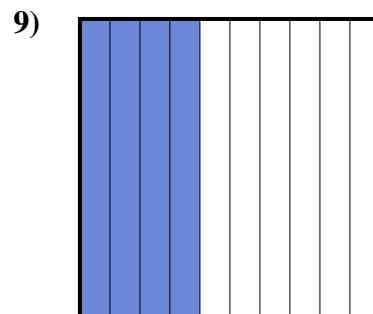
- A. 70
B. 700,0
C. 0,07
D. 0,7



- A. 60
B. 0,06
C. 0,6
D. 600,00



- A. 300,0
B. 0,3
C. 30
D. 300,00

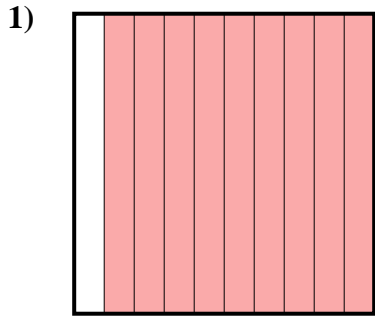


- A. 0,4
B. 0,04
C. 400,0
D. 400,00

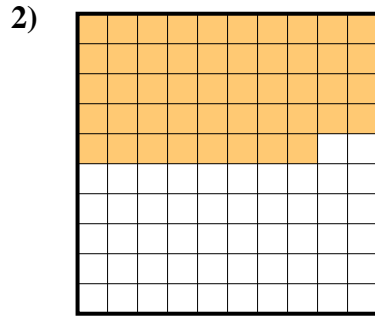
1. **D**
2. **B**
3. **B**
4. **D**
5. **A**
6. **D**
7. **C**
8. **B**
9. **A**




Stelle fest, welcher Buchstabe die schraffierte Fläche in Bezug auf das Ganze richtig darstellt.

Antworten

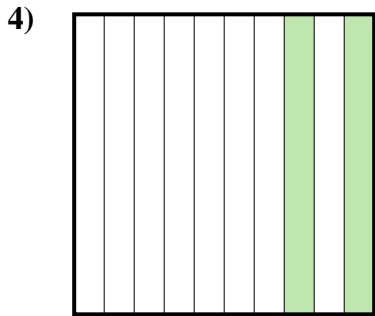
- A. 900,00
B. 900,0
C. 90
D. 0,9



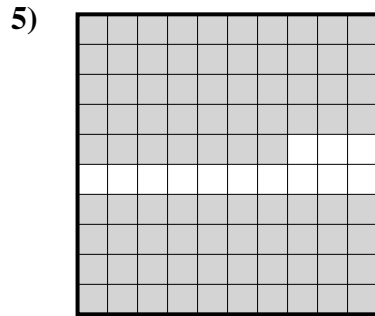
- A. 0,48
B. 48
C. 480,00
D. 4,8



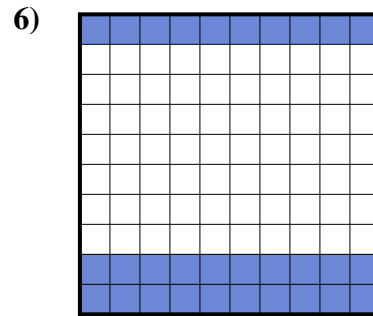
- A. 0,1
B. 100,00
C. 10
D. 1



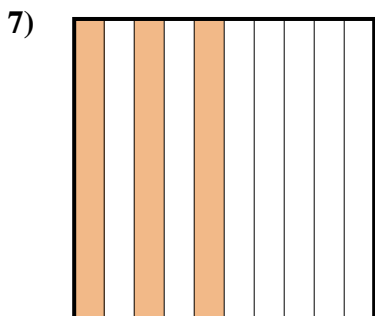
- A. 200,0
B. 0,2
C. 20
D. 200,00



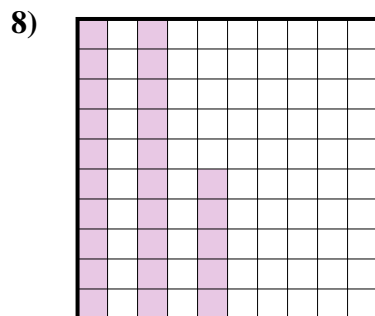
- A. 870,0
B. 0,087
C. 0,87
D. 870,00




- A. 3
B. 30
C. 300,00
D. 0,3



- A. 3
B. 30
C. 300,0
D. 0,3



- A. 2,5
B. 0,025
C. 250,0
D. 0,25

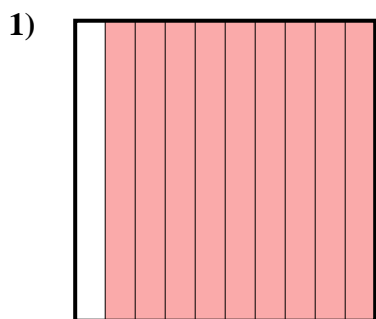


- A. 0,06
B. 0,6
C. 600,0
D. 60

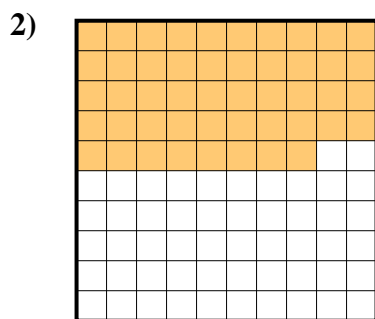
1. _____
2. _____
3. _____
4. _____
5. _____
6. _____
7. _____
8. _____
9. _____




Stelle fest, welcher Buchstabe die schraffierte Fläche in Bezug auf das Ganze richtig darstellt.



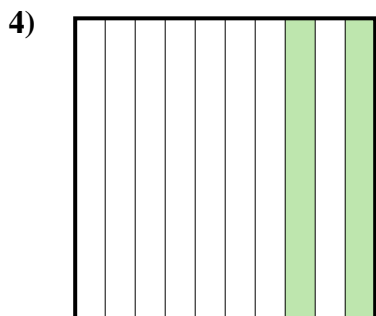
- A. 900,00
B. 900,0
C. 90
D. 0,9



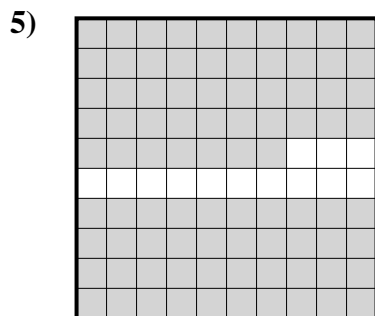
- A. 0,48
B. 48
C. 480,00
D. 4,8



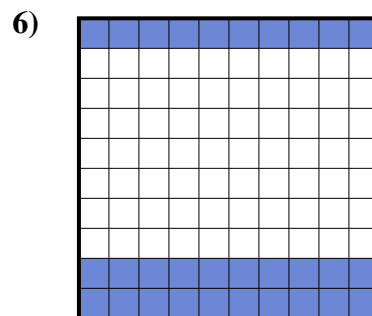
- A. 0,1
B. 100,00
C. 10
D. 1



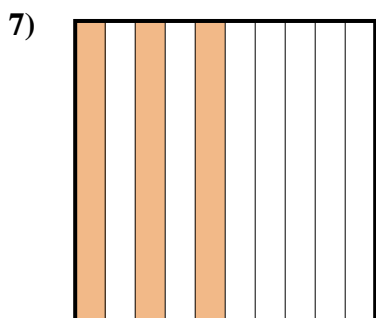
- A. 200,0
B. 0,2
C. 20
D. 200,00



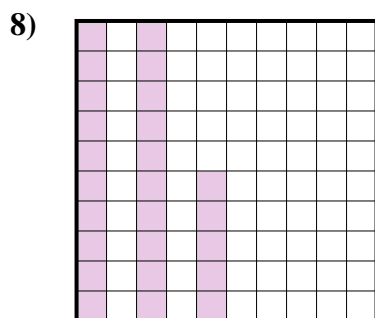
- A. 870,0
B. 0,087
C. 0,87
D. 870,00




- A. 3
B. 30
C. 300,00
D. 0,3



- A. 3
B. 30
C. 300,0
D. 0,3



- A. 2,5
B. 0,025
C. 250,0
D. 0,25

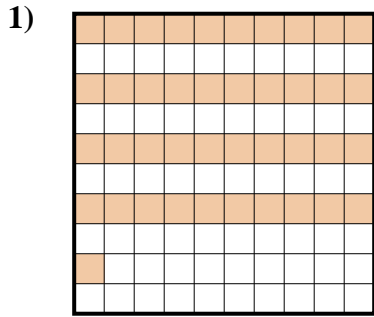


- A. 0,06
B. 0,6
C. 600,0
D. 60

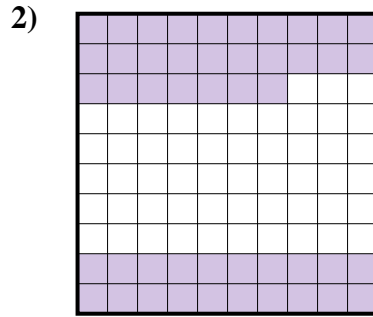
Antworten1. **D**2. **A**3. **A**4. **B**5. **C**6. **D**7. **D**8. **D**9. **B**



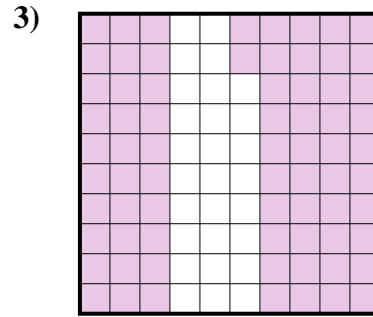
Stelle fest, welcher Buchstabe die schraffierte Fläche in Bezug auf das Ganze richtig darstellt.

Antworten

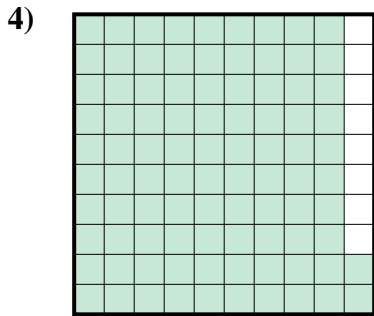
- A. 410,00
B. 0,41
C. 410,0
D. 0,041



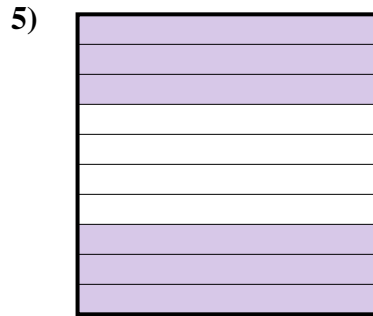
- A. 470,00
B. 47
C. 0,47
D. 4,7



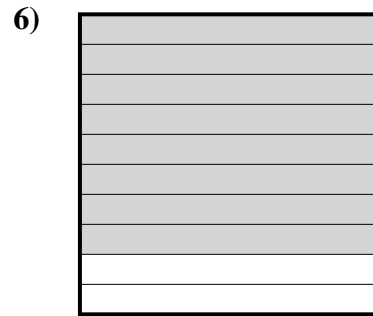
- A. 7,2
B. 0,072
C. 0,72
D. 720,0



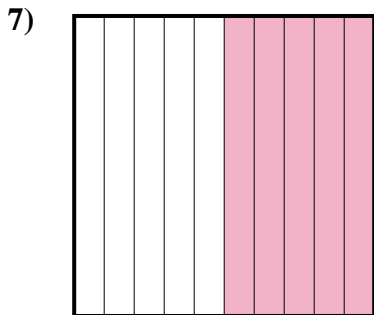
- A. 0,92
B. 920,00
C. 92
D. 9,2




- A. 0,06
B. 60
C. 0,6
D. 600,0



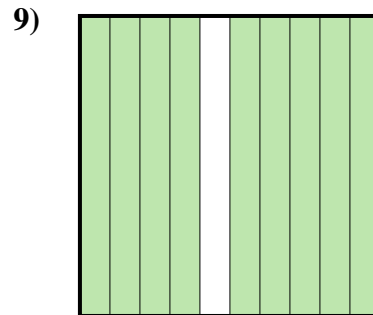
- A. 80
B. 800,0
C. 0,8
D. 0,08



- A. 0,05
B. 0,5
C. 5
D. 500,00



- A. 30
B. 3
C. 0,03
D. 0,3

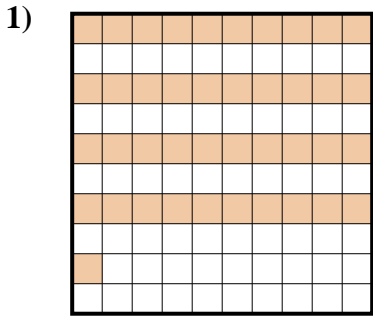


- A. 0,9
B. 0,09
C. 900,00
D. 9

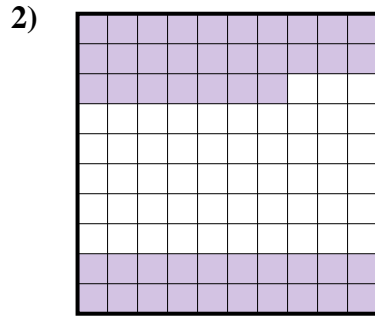
1. _____
2. _____
3. _____
4. _____
5. _____
6. _____
7. _____
8. _____
9. _____



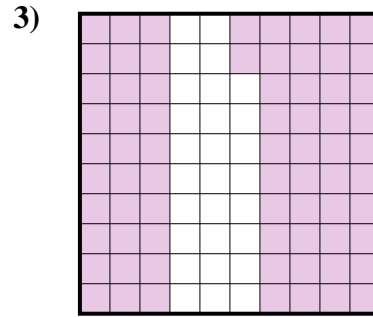
Stelle fest, welcher Buchstabe die schraffierte Fläche in Bezug auf das Ganze richtig darstellt.

Antworten

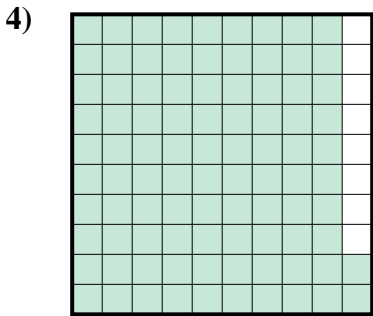
- A. 410,00
B. 0,41
C. 410,0
D. 0,041



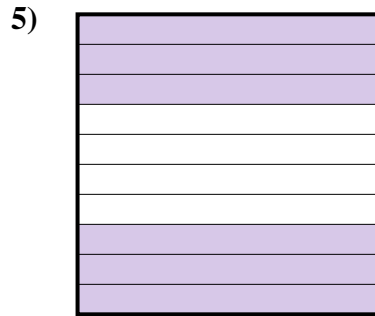
- A. 470,00
B. 47
C. 0,47
D. 4,7



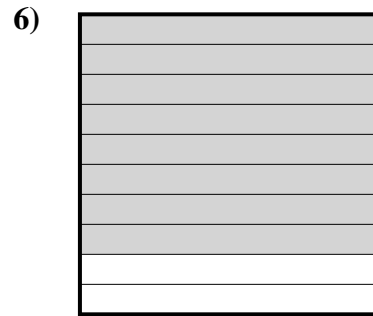
- A. 7,2
B. 0,072
C. 0,72
D. 720,0



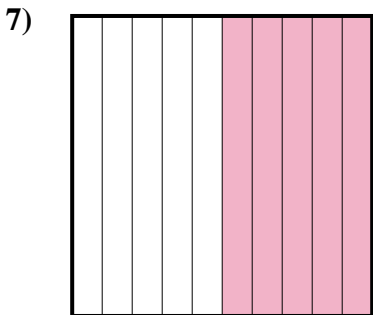
- A. 0,92
B. 920,00
C. 92
D. 9,2



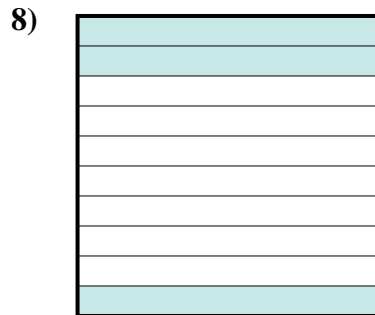
- A. 0,06
B. 60
C. 0,6
D. 600,0



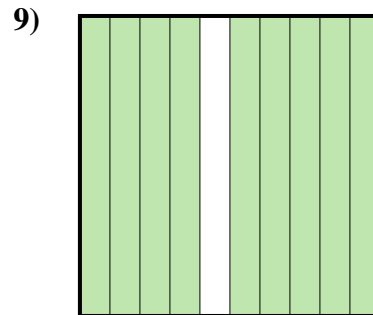
- A. 80
B. 800,0
C. 0,8
D. 0,08



- A. 0,05
B. 0,5
C. 5
D. 500,00



- A. 30
B. 3
C. 0,03
D. 0,3

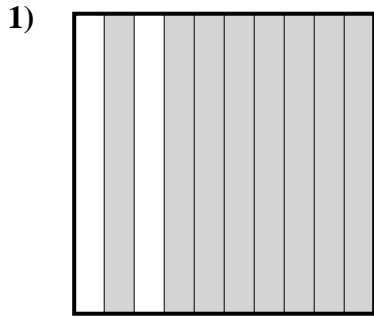


- A. 0,9
B. 0,09
C. 900,00
D. 9

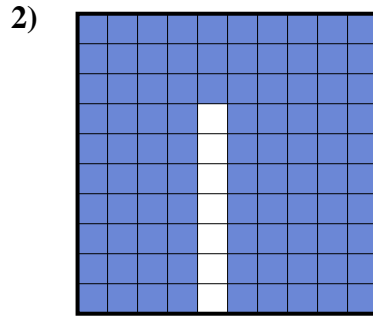
1. **B**
2. **C**
3. **C**
4. **A**
5. **C**
6. **C**
7. **B**
8. **D**
9. **A**



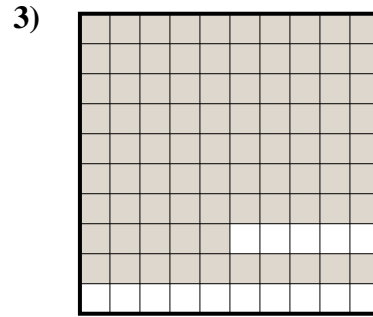
Stelle fest, welcher Buchstabe die schraffierte Fläche in Bezug auf das Ganze richtig darstellt.

Antworten

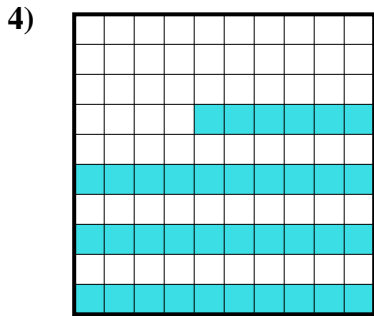
- A. 800,00
B. 80
C. 0,8
D. 8



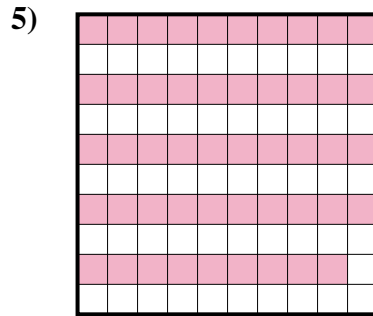
- A. 0,093
B. 930,0
C. 93
D. 0,93



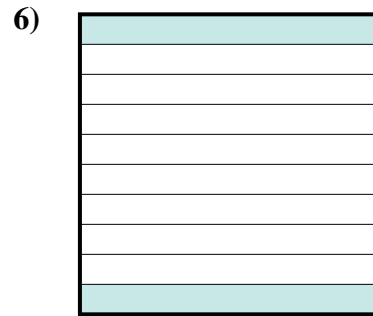
- A. 0,85
B. 0,085
C. 85
D. 8,5



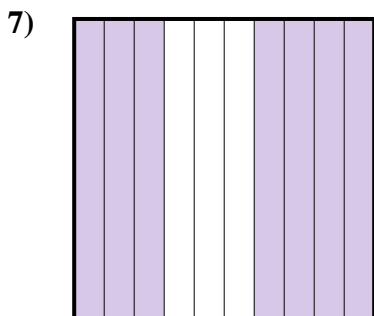
- A. 0,36
B. 3,6
C. 360,0
D. 360,00



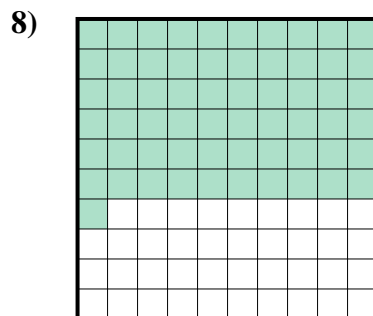
- A. 0,49
B. 49
C. 490,0
D. 490,00



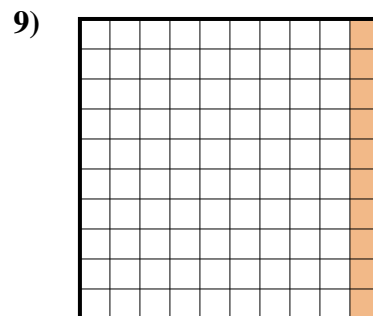
- A. 200,0
B. 0,02
C. 200,00
D. 0,2



- A. 7
B. 0,7
C. 700,0
D. 700,00



- A. 0,61
B. 610,0
C. 6,1
D. 61

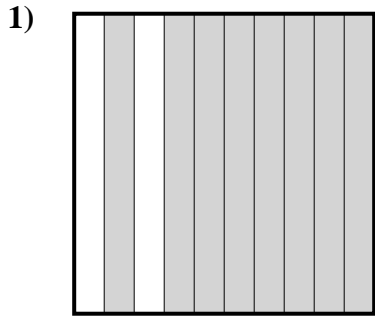


- A. 10
B. 0,01
C. 1
D. 0,1

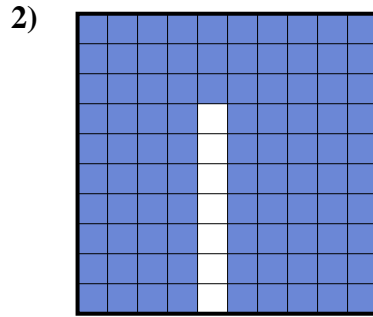
1. _____
2. _____
3. _____
4. _____
5. _____
6. _____
7. _____
8. _____
9. _____



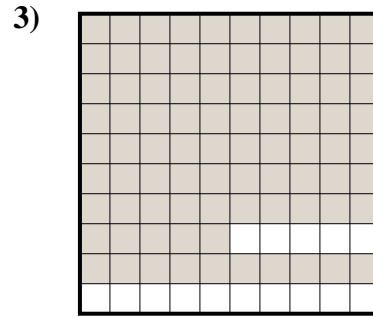
Stelle fest, welcher Buchstabe die schraffierte Fläche in Bezug auf das Ganze richtig darstellt.



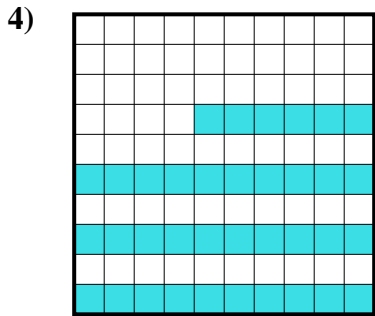
- A. 800,00
B. 80
C. 0,8
D. 8



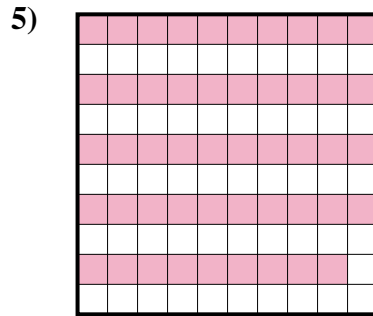
- A. 0,093
B. 930,0
C. 93
D. 0,93



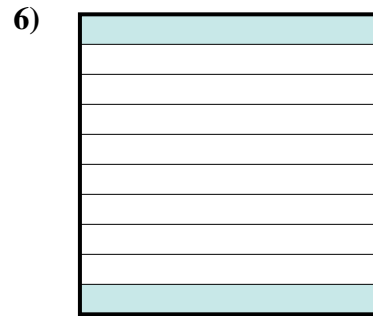
- A. 0,85
B. 0,085
C. 85
D. 8,5



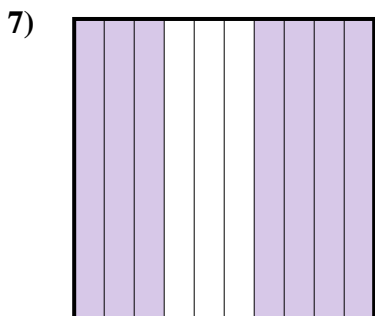
- A. 0,36
B. 3,6
C. 360,0
D. 360,00



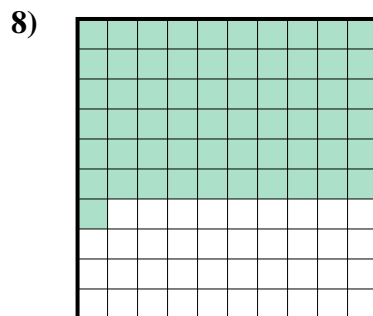
- A. 0,49
B. 49
C. 490,0
D. 490,00



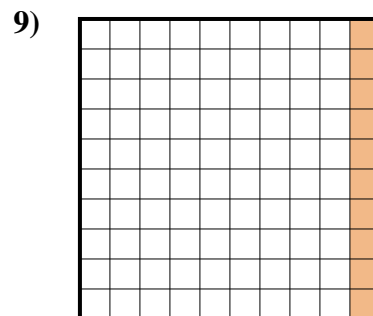
- A. 200,0
B. 0,02
C. 200,00
D. 0,2



- A. 7
B. 0,7
C. 700,0
D. 700,00



- A. 0,61
B. 610,0
C. 6,1
D. 61



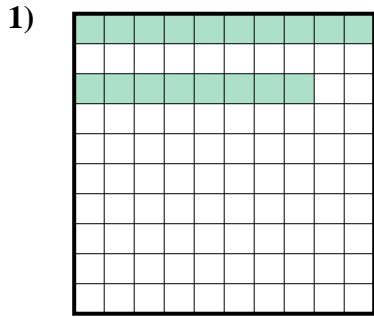
- A. 10
B. 0,01
C. 1
D. 0,1

Antworten

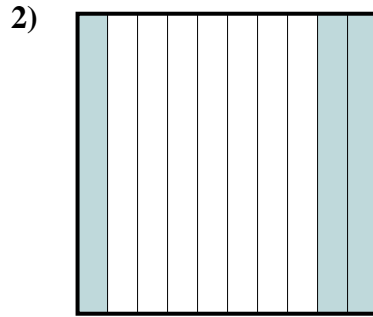
1. **C**
2. **D**
3. **A**
4. **A**
5. **A**
6. **D**
7. **B**
8. **A**
9. **D**



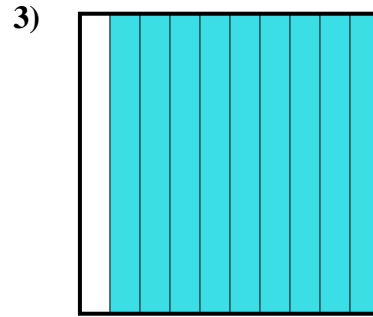
Stelle fest, welcher Buchstabe die schraffierte Fläche in Bezug auf das Ganze richtig darstellt.

Antworten

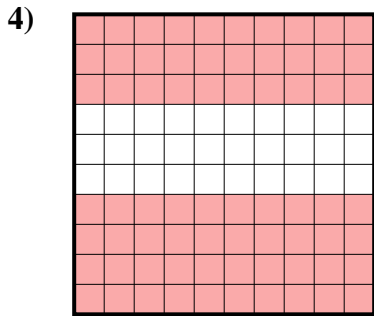
- A. 0,18
B. 180,00
C. 0,018
D. 180,0



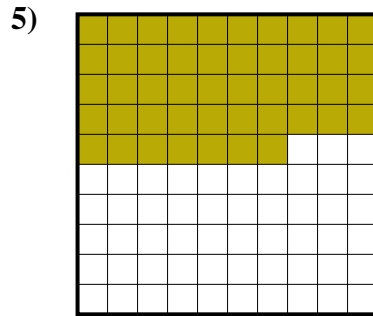
- A. 300,0
B. 30
C. 3
D. 0,3



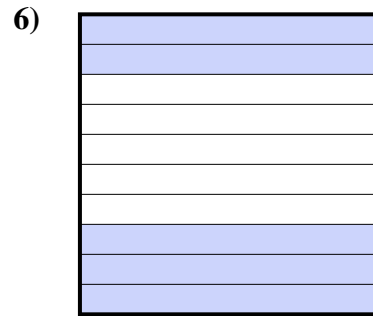
- A. 90
B. 0,09
C. 0,9
D. 900,00



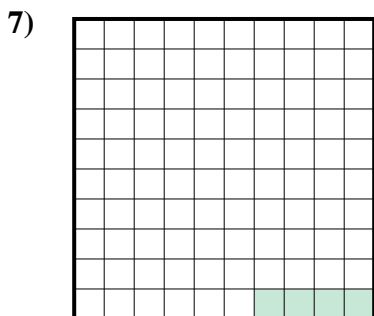
- A. 0,7
B. 700,0
C. 700,00
D. 70



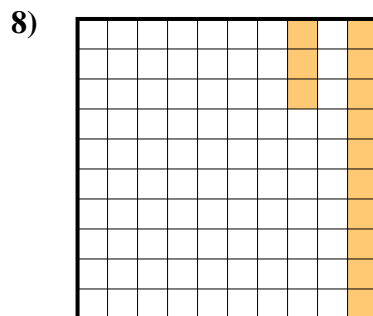
- A. 470,0
B. 0,047
C. 0,47
D. 470,00



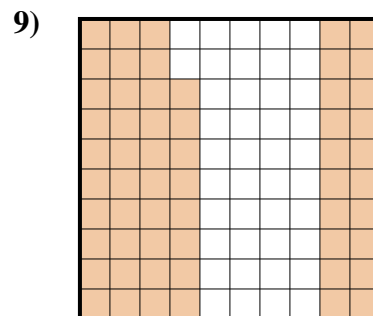
- A. 0,5
B. 50
C. 0,05
D. 5



- A. 0,004
B. 40,0
C. 0,04
D. 0,4



- A. 13
B. 0,13
C. 1,3
D. 130,0

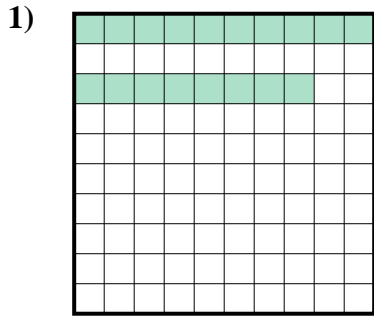


- A. 0,058
B. 580,00
C. 0,58
D. 580,0

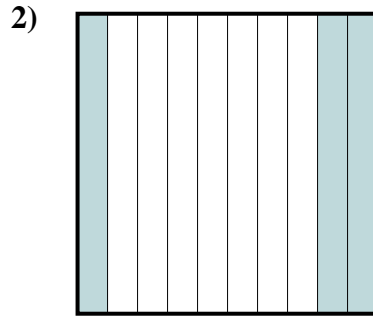
1. _____
2. _____
3. _____
4. _____
5. _____
6. _____
7. _____
8. _____
9. _____



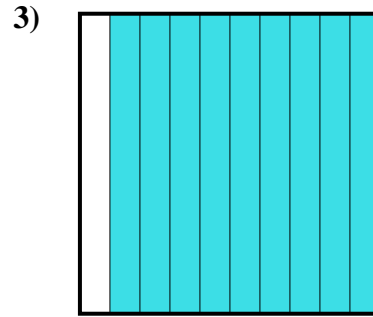
Stelle fest, welcher Buchstabe die schraffierte Fläche in Bezug auf das Ganze richtig darstellt.



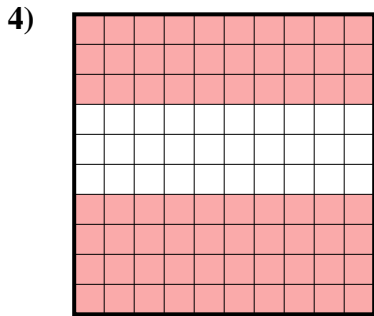
- A. 0,18
B. 180,00
C. 0,018
D. 180,0



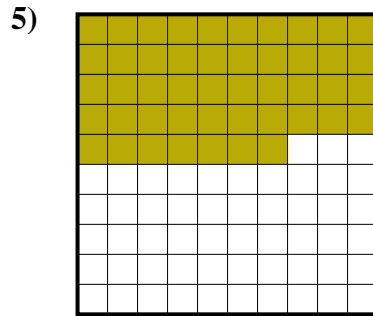
- A. 300,0
B. 30
C. 3
D. 0,3



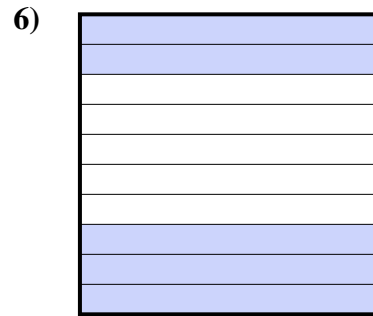
- A. 90
B. 0,09
C. 0,9
D. 900,00



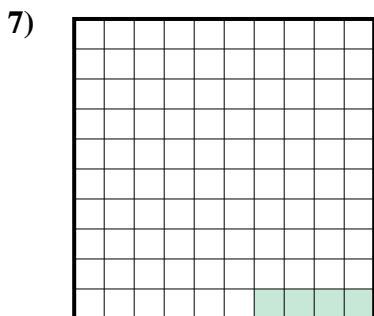
- A. 0,7
B. 700,0
C. 700,00
D. 70



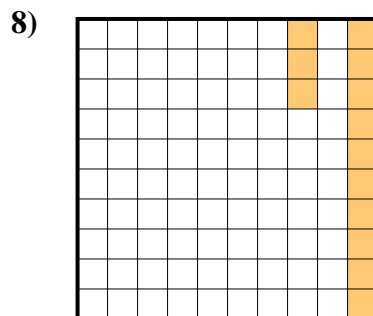
- A. 470,0
B. 0,047
C. 0,47
D. 470,00



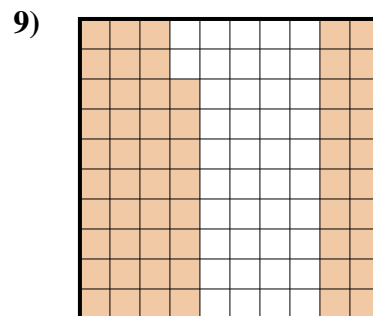
- A. 0,5
B. 50
C. 0,05
D. 5



- A. 0,004
B. 40,0
C. 0,04
D. 0,4



- A. 13
B. 0,13
C. 1,3
D. 130,0




- A. 0,058
B. 580,00
C. 0,58
D. 580,0

Antworten

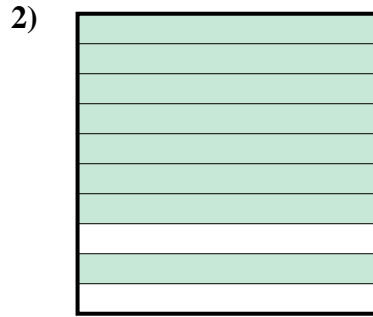
1. **A**
2. **D**
3. **C**
4. **A**
5. **C**
6. **A**
7. **C**
8. **B**
9. **C**



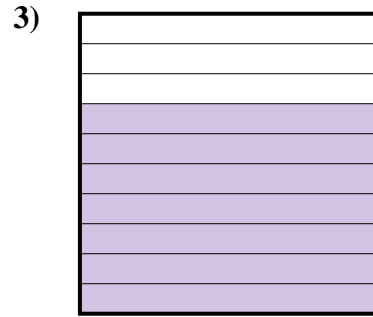
Stelle fest, welcher Buchstabe die schraffierte Fläche in Bezug auf das Ganze richtig darstellt.

Antworten

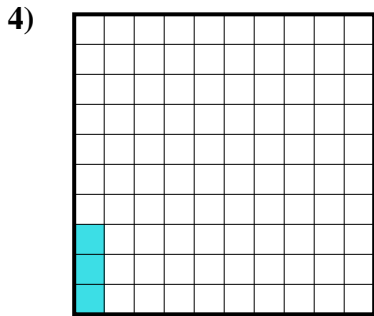
- A. 6
B. 0,6
C. 0,06
D. 600,00



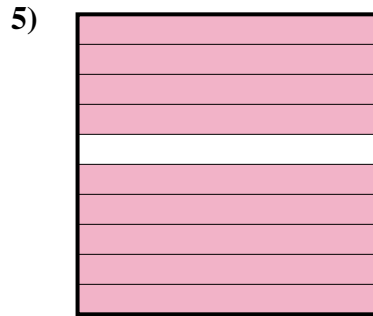
- A. 0,08
B. 8
C. 80
D. 0,8



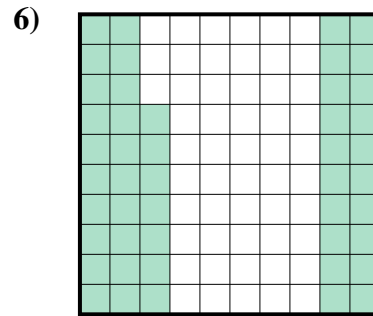
- A. 70
B. 0,07
C. 700,00
D. 0,7



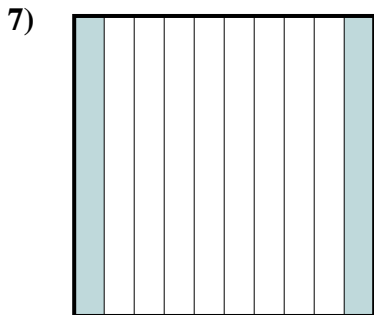
- A. 0,3
B. 0,003
C. 0,03
D. 3



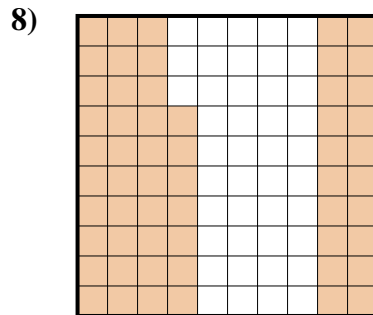
- A. 0,9
B. 90
C. 0,09
D. 900,00



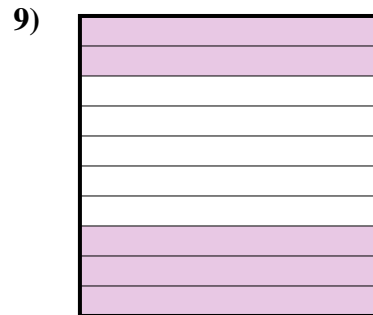
- A. 470,00
B. 0,47
C. 4,7
D. 47



- A. 200,0
B. 200,00
C. 20
D. 0,2



- A. 5,7
B. 0,57
C. 57
D. 0,057




- A. 0,5
B. 500,00
C. 5
D. 0,05

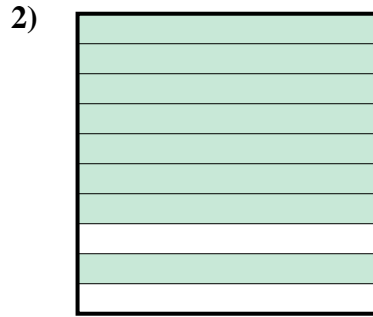
1. _____
2. _____
3. _____
4. _____
5. _____
6. _____
7. _____
8. _____
9. _____



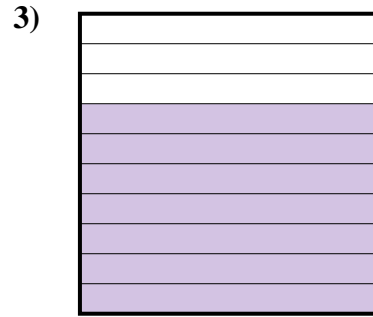
Stelle fest, welcher Buchstabe die schraffierte Fläche in Bezug auf das Ganze richtig darstellt.



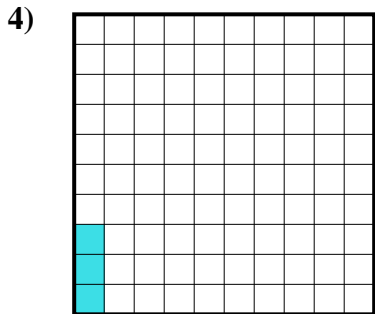
- A. 6
B. 0,6
C. 0,06
D. 600,00



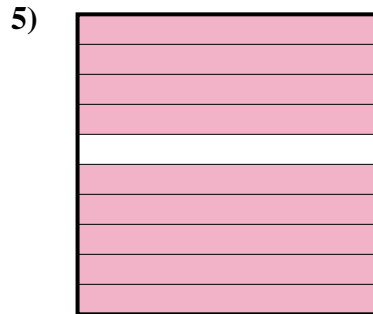
- A. 0,08
B. 8
C. 80
D. 0,8



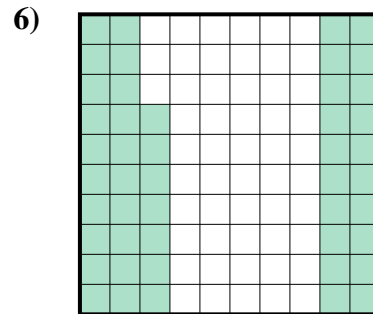
- A. 70
B. 0,07
C. 700,00
D. 0,7



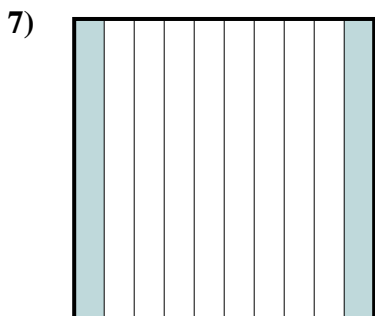
- A. 0,3
B. 0,003
C. 0,03
D. 3



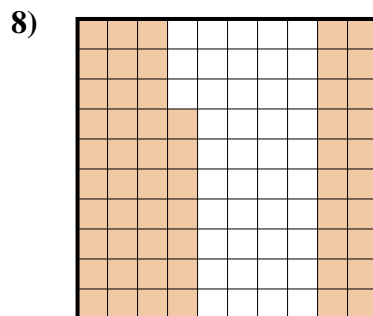
- A. 0,9
B. 90
C. 0,09
D. 900,00




- A. 470,00
B. 0,47
C. 4,7
D. 47



- A. 200,0
B. 200,00
C. 20
D. 0,2



- A. 5,7
B. 0,57
C. 57
D. 0,057



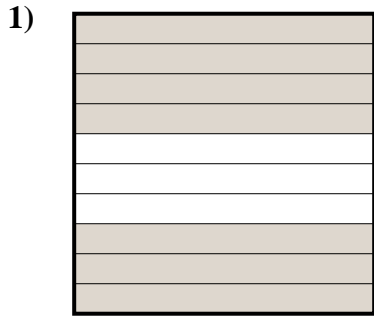
- A. 0,5
B. 500,00
C. 5
D. 0,05

Antworten

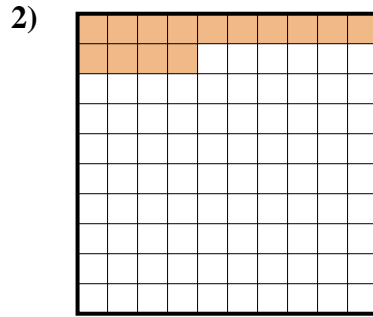
1. **B**
2. **D**
3. **D**
4. **C**
5. **A**
6. **B**
7. **D**
8. **B**
9. **A**



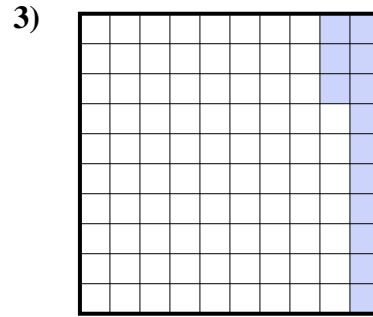
Stelle fest, welcher Buchstabe die schraffierte Fläche in Bezug auf das Ganze richtig darstellt.

Antworten


- A. 0,7
B. 0,07
C. 700,0
D. 7



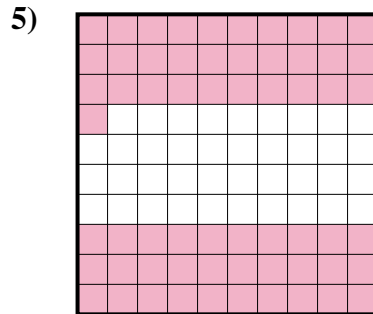
- A. 14
B. 1,4
C. 140,0
D. 0,14



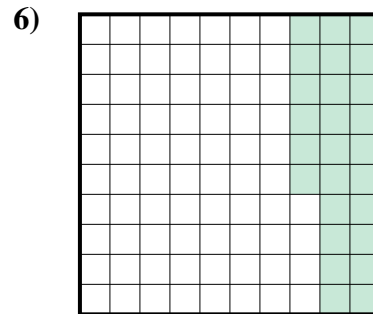
- A. 1,3
B. 13
C. 0,13
D. 0,013




- A. 0,09
B. 90
C. 0,9
D. 900,00



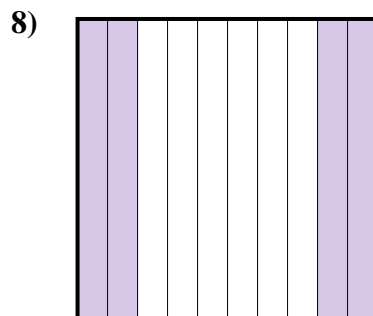
- A. 6,1
B. 0,61
C. 610,0
D. 0,061



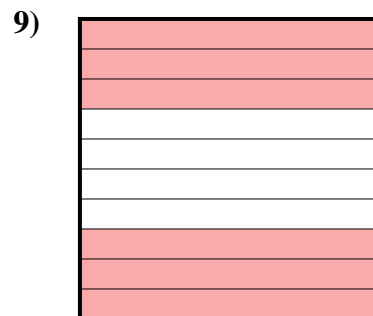
- A. 26
B. 260,0
C. 0,26
D. 0,026



- A. 20,0
B. 0,2
C. 0,02
D. 20,00



- A. 40
B. 400,0
C. 0,4
D. 0,04

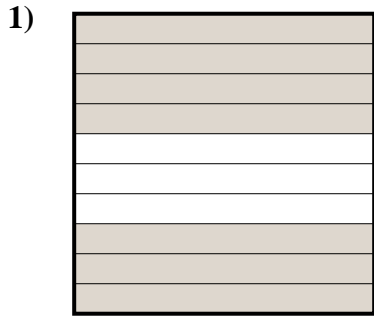


- A. 600,00
B. 60
C. 0,6
D. 0,06

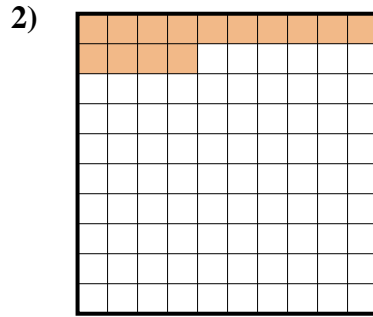
1. _____
2. _____
3. _____
4. _____
5. _____
6. _____
7. _____
8. _____
9. _____



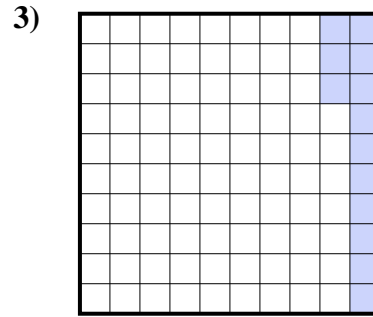
Stelle fest, welcher Buchstabe die schraffierte Fläche in Bezug auf das Ganze richtig darstellt.

Antworten


- A. 0,7
B. 0,07
C. 700,0
D. 7



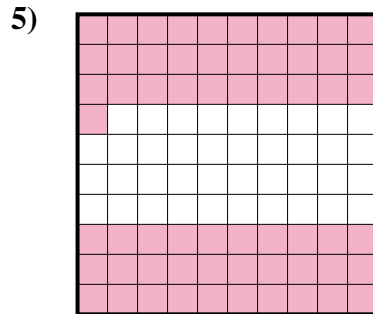
- A. 14
B. 1,4
C. 140,0
D. 0,14



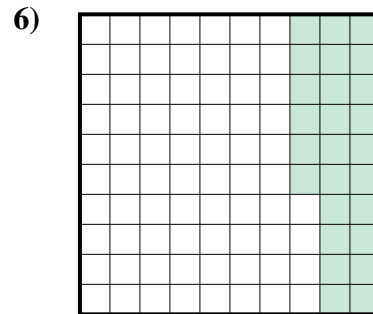
- A. 1,3
B. 13
C. 0,13
D. 0,013




- A. 0,09
B. 90
C. 0,9
D. 900,00



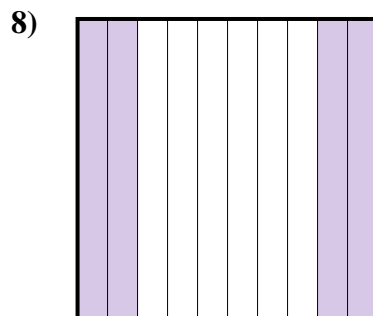
- A. 6,1
B. 0,61
C. 610,0
D. 0,061



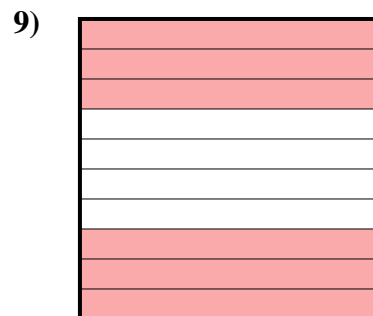
- A. 26
B. 260,0
C. 0,26
D. 0,026



- A. 20,0
B. 0,2
C. 0,02
D. 20,00



- A. 40
B. 400,0
C. 0,4
D. 0,04

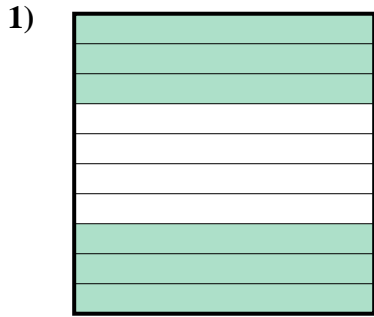


- A. 600,00
B. 60
C. 0,6
D. 0,06

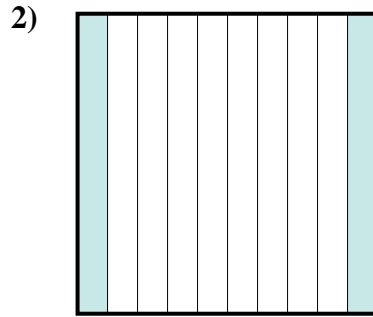
1. **A**
2. **D**
3. **C**
4. **C**
5. **B**
6. **C**
7. **C**
8. **C**
9. **C**



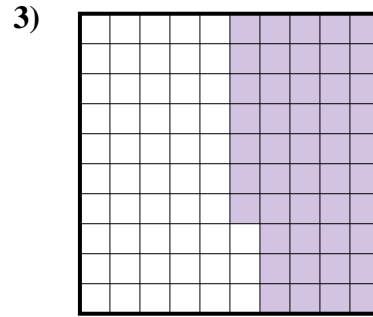
Stelle fest, welcher Buchstabe die schraffierte Fläche in Bezug auf das Ganze richtig darstellt.

Antworten

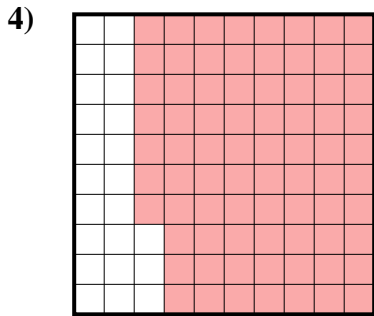
- A. 0,6
B. 600,00
C. 600,0
D. 6



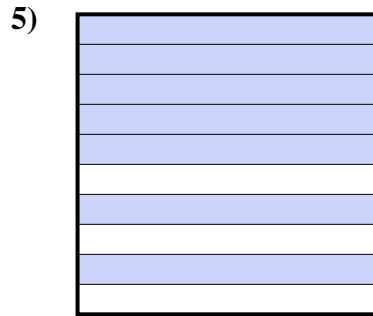
- A. 2
B. 200,00
C. 20
D. 0,2



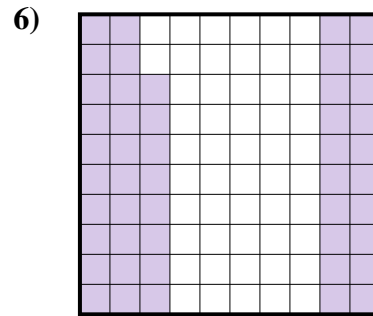
- A. 470,00
B. 0,047
C. 0,47
D. 47



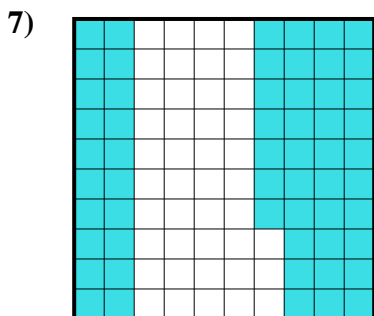
- A. 77
B. 770,00
C. 0,077
D. 0,77



- A. 700,0
B. 70
C. 0,7
D. 0,07



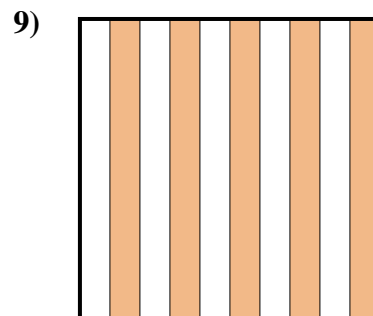
- A. 48
B. 480,00
C. 480,0
D. 0,48



- A. 5,7
B. 570,00
C. 0,57
D. 57



- A. 1
B. 0,1
C. 10
D. 100,0

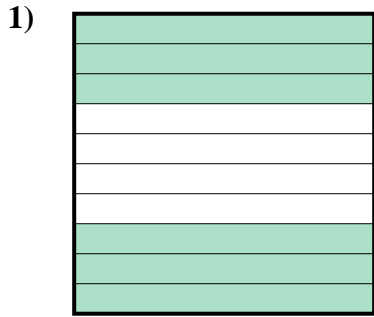


- A. 0,5
B. 50
C. 500,00
D. 5

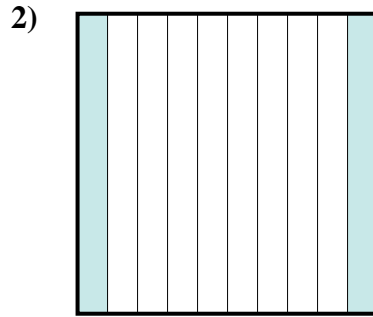
1. _____
2. _____
3. _____
4. _____
5. _____
6. _____
7. _____
8. _____
9. _____



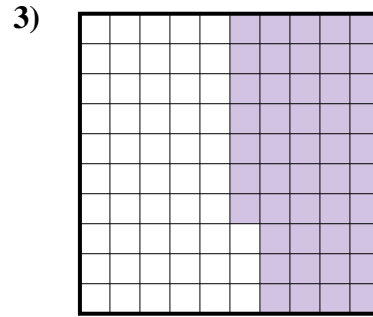
Stelle fest, welcher Buchstabe die schraffierte Fläche in Bezug auf das Ganze richtig darstellt.

Antworten

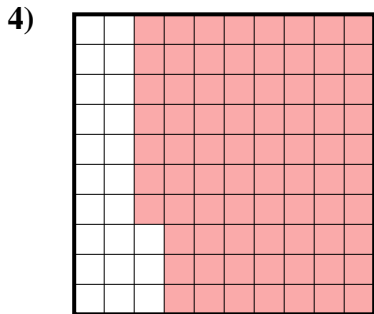
- A. 0,6
B. 600,00
C. 600,0
D. 6




- A. 2
B. 200,00
C. 20
D. 0,2



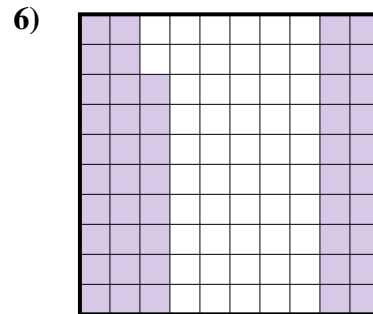
- A. 470,00
B. 0,047
C. 0,47
D. 47



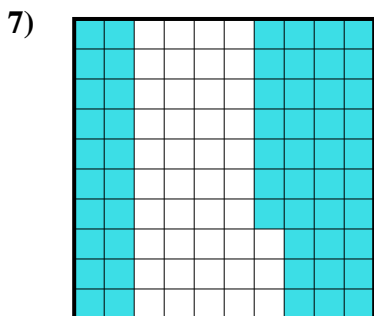
- A. 77
B. 770,00
C. 0,077
D. 0,77



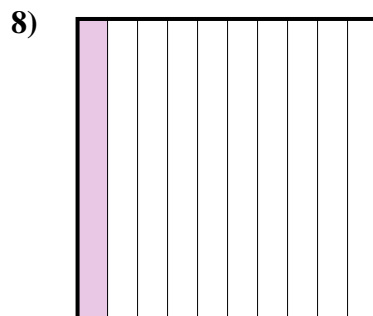
- A. 700,0
B. 70
C. 0,7
D. 0,07



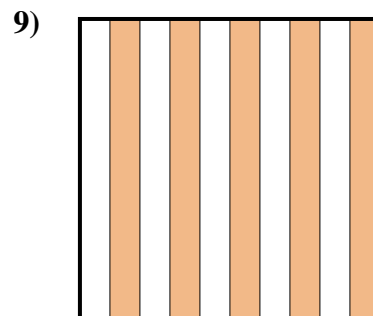
- A. 48
B. 480,00
C. 480,0
D. 0,48



- A. 5,7
B. 570,00
C. 0,57
D. 57



- A. 1
B. 0,1
C. 10
D. 100,0

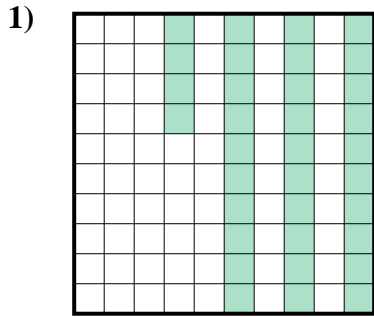


- A. 0,5
B. 50
C. 500,00
D. 5

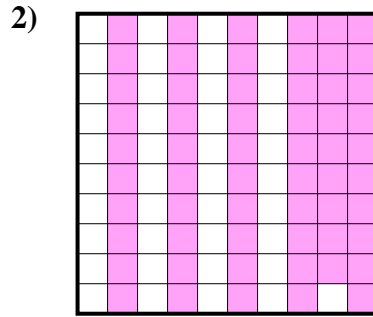
1. **A**
2. **D**
3. **C**
4. **D**
5. **C**
6. **D**
7. **C**
8. **B**
9. **A**



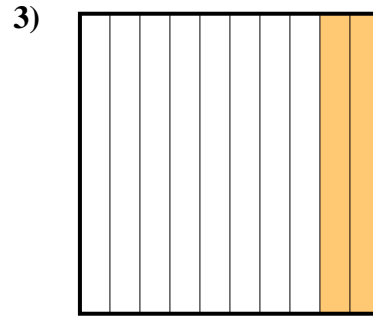
Stelle fest, welcher Buchstabe die schraffierte Fläche in Bezug auf das Ganze richtig darstellt.

Antworten

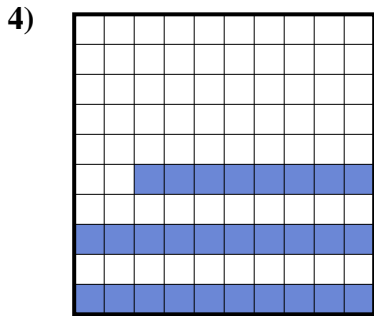
- A. 0,034
B. 3,4
C. 340,00
D. 0,34



- A. 590,00
B. 0,59
C. 0,059
D. 59



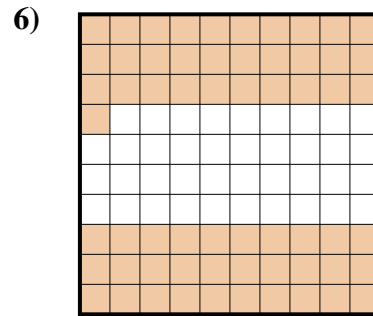
- A. 200,00
B. 20
C. 0,2
D. 0,02



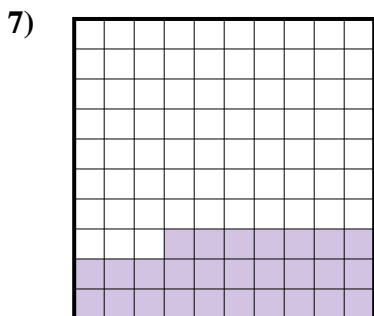
- A. 0,028
B. 280,00
C. 0,28
D. 28




- A. 300,00
B. 0,3
C. 0,03
D. 3



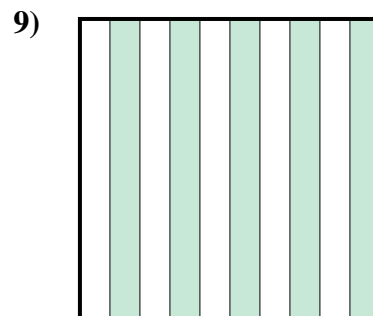
- A. 610,0
B. 0,61
C. 61
D. 6,1



- A. 0,27
B. 27
C. 2,7
D. 270,00



- A. 100,00
B. 0,1
C. 0,01
D. 1

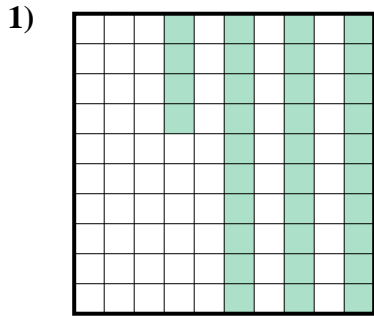


- A. 0,05
B. 500,0
C. 500,00
D. 0,5

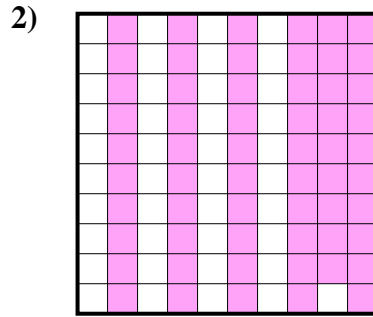
1. _____
2. _____
3. _____
4. _____
5. _____
6. _____
7. _____
8. _____
9. _____



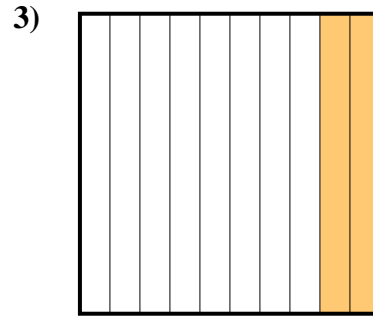
Stelle fest, welcher Buchstabe die schraffierte Fläche in Bezug auf das Ganze richtig darstellt.



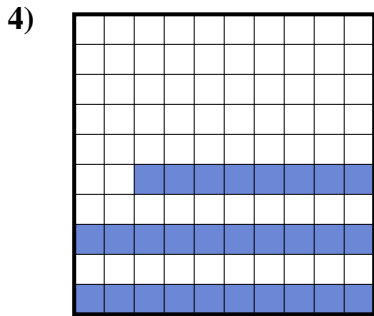
- A. 0,034
B. 3,4
C. 340,00
D. 0,34



- A. 590,00
B. 0,59
C. 0,059
D. 59



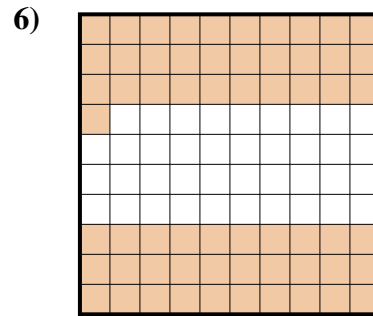
- A. 200,00
B. 20
C. 0,2
D. 0,02



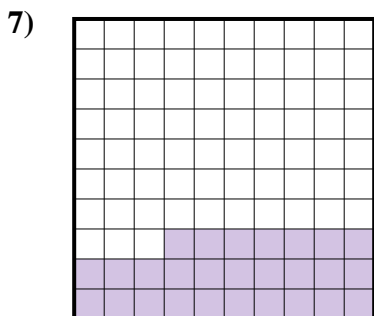
- A. 0,028
B. 280,00
C. 0,28
D. 28




- A. 300,00
B. 0,3
C. 0,03
D. 3



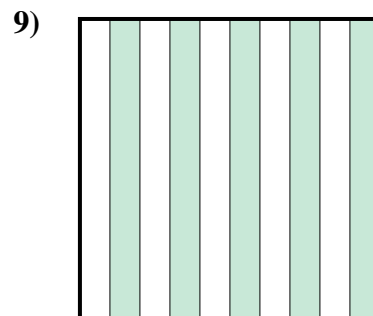
- A. 610,0
B. 0,61
C. 61
D. 6,1



- A. 0,27
B. 27
C. 2,7
D. 270,00



- A. 100,00
B. 0,1
C. 0,01
D. 1



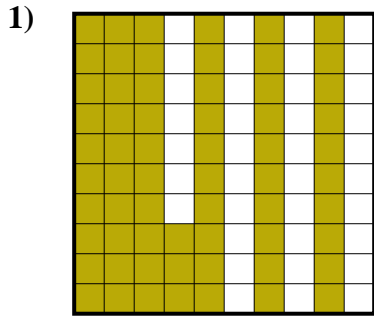
- A. 0,05
B. 500,0
C. 500,00
D. 0,5

Antworten

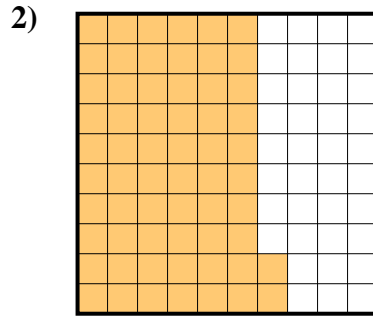
1. **D**
2. **B**
3. **C**
4. **C**
5. **B**
6. **B**
7. **A**
8. **B**
9. **D**



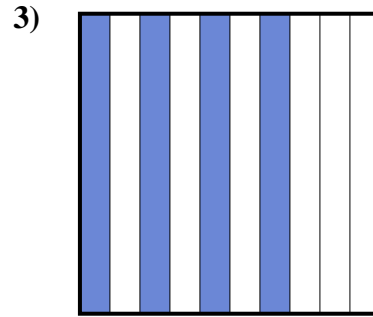
Stelle fest, welcher Buchstabe die schraffierte Fläche in Bezug auf das Ganze richtig darstellt.

Antworten

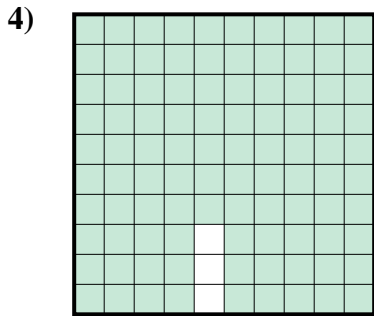
- A. 6,3
B. 0,063
C. 630,00
D. 0,63



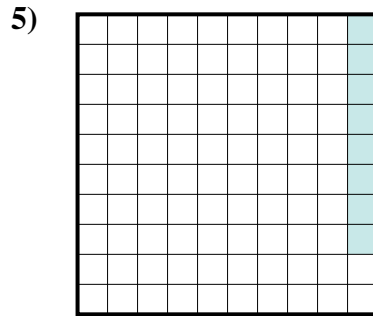
- A. 62
B. 6,2
C. 0,62
D. 620,0



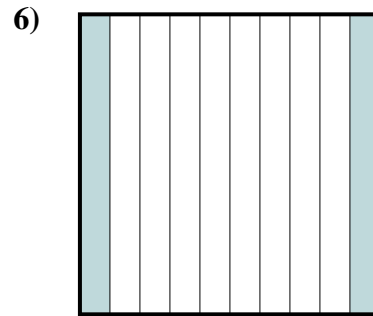
- A. 40
B. 400,0
C. 0,04
D. 0,4



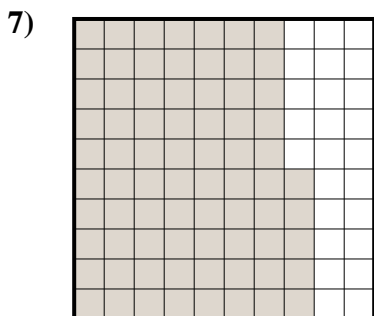
- A. 970,0
B. 0,097
C. 0,97
D. 9,7



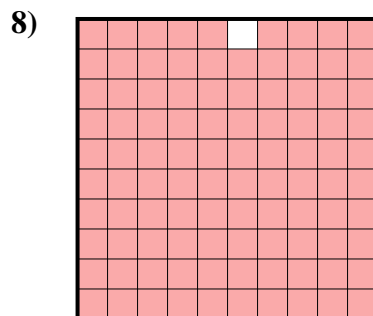
- A. 0,008
B. 0,8
C. 8
D. 0,08




- A. 20
B. 0,02
C. 2
D. 0,2



- A. 0,75
B. 75
C. 7,5
D. 0,075



- A. 0,99
B. 0,099
C. 990,0
D. 9,9

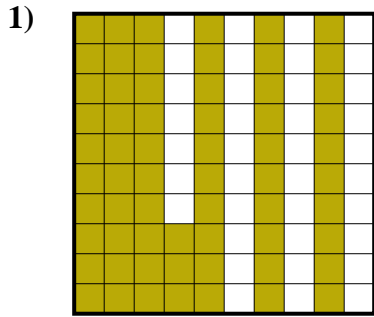


- A. 90
B. 0,09
C. 0,9
D. 9

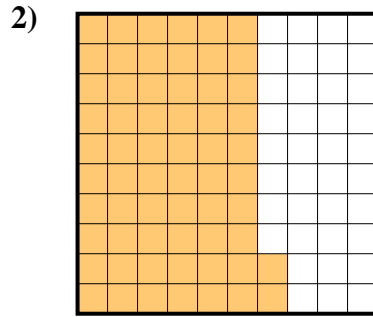
1. _____
2. _____
3. _____
4. _____
5. _____
6. _____
7. _____
8. _____
9. _____



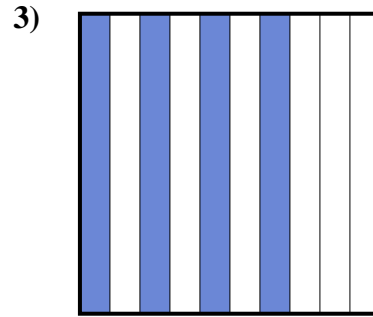
Stelle fest, welcher Buchstabe die schraffierte Fläche in Bezug auf das Ganze richtig darstellt.

Antworten

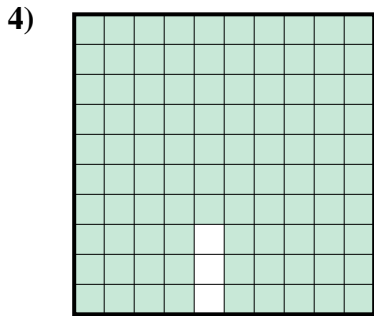
- A. 6,3
B. 0,063
C. 630,00
D. 0,63



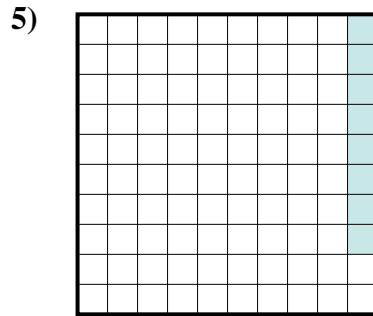
- A. 62
B. 6,2
C. 0,62
D. 620,0



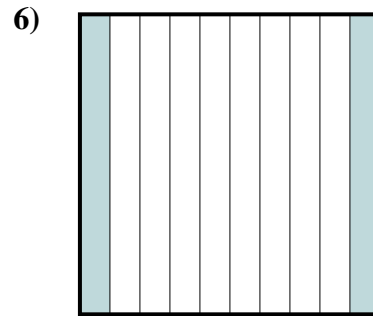
- A. 40
B. 400,0
C. 0,04
D. 0,4



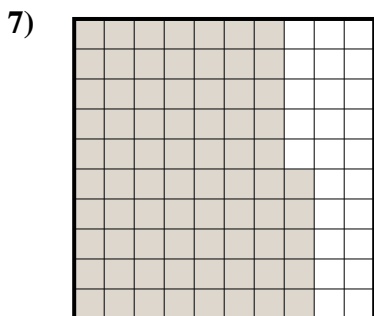
- A. 970,0
B. 0,097
C. 0,97
D. 9,7



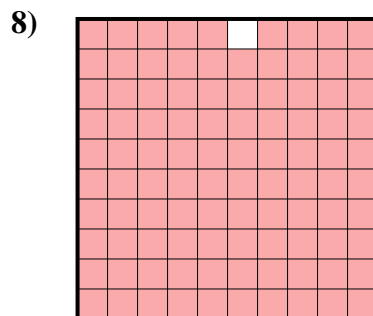
- A. 0,008
B. 0,8
C. 8
D. 0,08




- A. 20
B. 0,02
C. 2
D. 0,2



- A. 0,75
B. 75
C. 7,5
D. 0,075



- A. 0,99
B. 0,099
C. 990,0
D. 9,9



- A. 90
B. 0,09
C. 0,9
D. 9

1. **D**
2. **C**
3. **D**
4. **C**
5. **D**
6. **D**
7. **A**
8. **A**
9. **C**