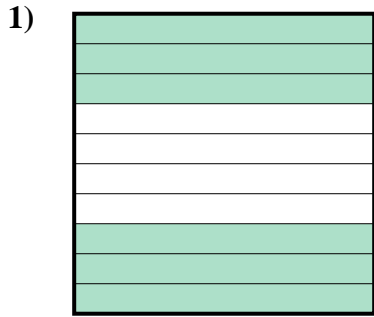
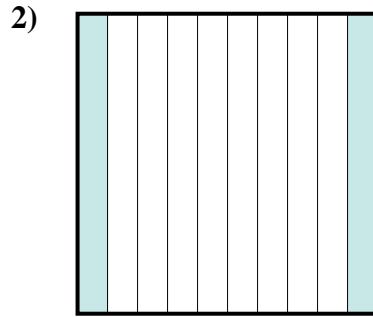




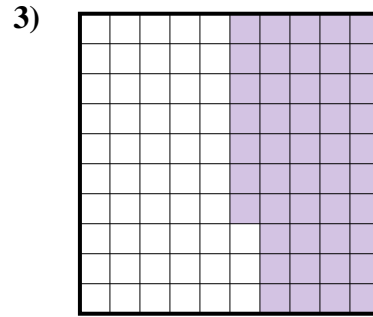
Stelle fest, welcher Buchstabe die schraffierte Fläche in Bezug auf das Ganze richtig darstellt.

Antworten

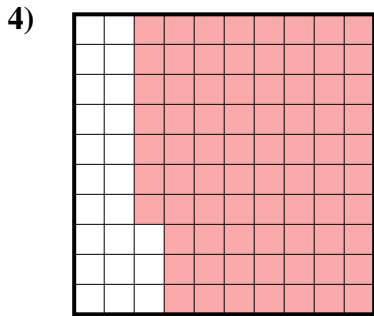
- A. 0,6
B. 600,00
C. 600,0
D. 6



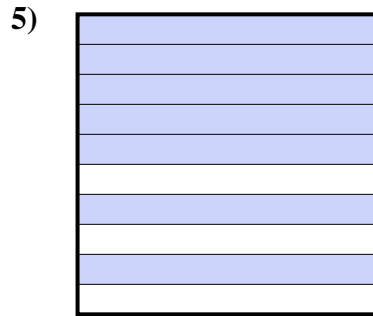
- A. 2
B. 200,00
C. 20
D. 0,2



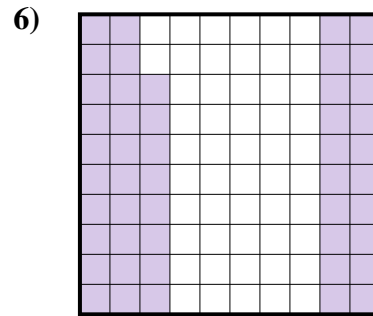
- A. 470,00
B. 0,047
C. 0,47
D. 47



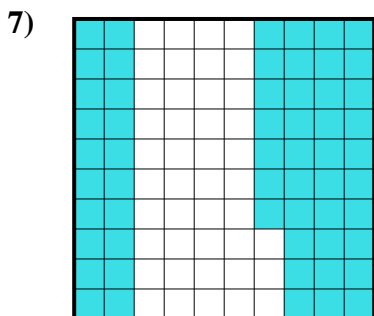
- A. 77
B. 770,00
C. 0,077
D. 0,77



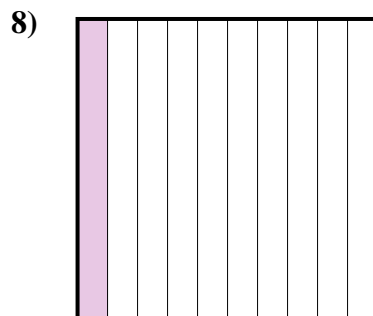
- A. 700,0
B. 70
C. 0,7
D. 0,07



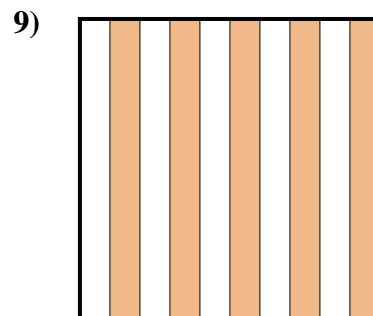
- A. 48
B. 480,00
C. 480,0
D. 0,48



- A. 5,7
B. 570,00
C. 0,57
D. 57



- A. 1
B. 0,1
C. 10
D. 100,0

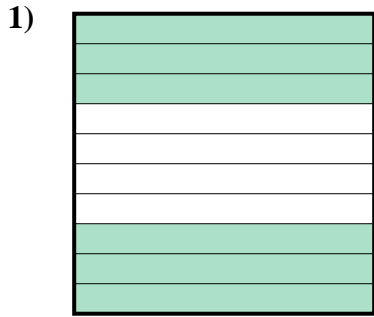


- A. 0,5
B. 50
C. 500,00
D. 5

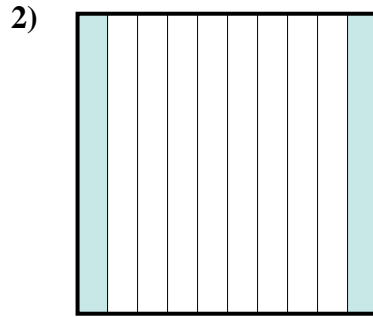
1. _____
2. _____
3. _____
4. _____
5. _____
6. _____
7. _____
8. _____
9. _____



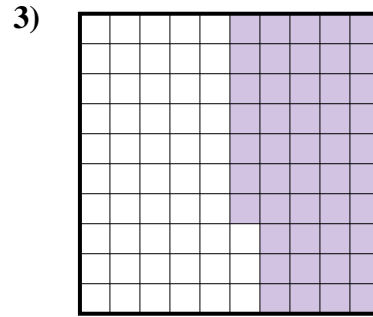
Stelle fest, welcher Buchstabe die schraffierte Fläche in Bezug auf das Ganze richtig darstellt.

Antworten

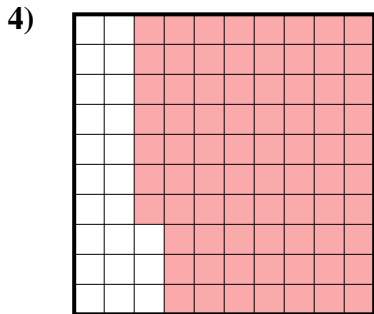
- A. 0,6
B. 600,00
C. 600,0
D. 6




- A. 2
B. 200,00
C. 20
D. 0,2



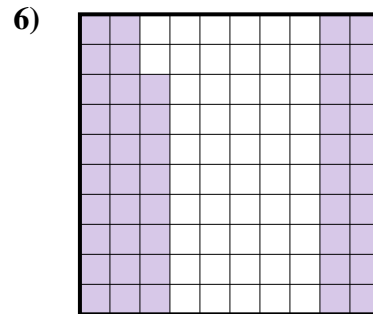
- A. 470,00
B. 0,047
C. 0,47
D. 47



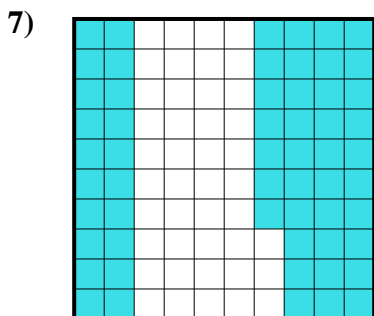
- A. 77
B. 770,00
C. 0,077
D. 0,77



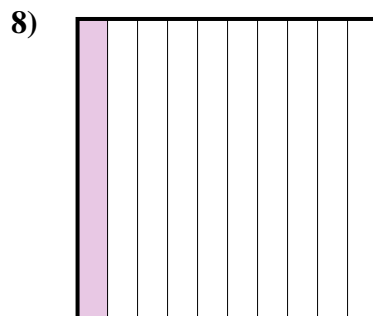
- A. 700,0
B. 70
C. 0,7
D. 0,07



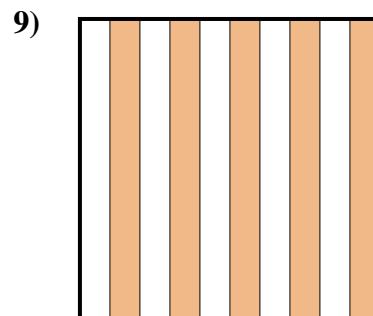
- A. 48
B. 480,00
C. 480,0
D. 0,48



- A. 5,7
B. 570,00
C. 0,57
D. 57



- A. 1
B. 0,1
C. 10
D. 100,0



- A. 0,5
B. 50
C. 500,00
D. 5

1. **A**
2. **D**
3. **C**
4. **D**
5. **C**
6. **D**
7. **C**
8. **B**
9. **A**