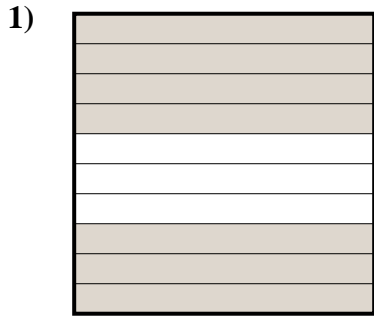
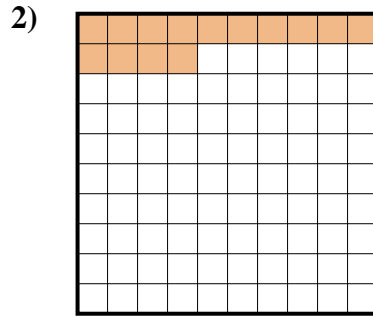




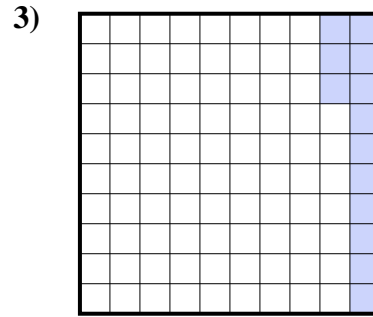
Stelle fest, welcher Buchstabe die schraffierte Fläche in Bezug auf das Ganze richtig darstellt.

Antworten


- A. 0,7
B. 0,07
C. 700,0
D. 7



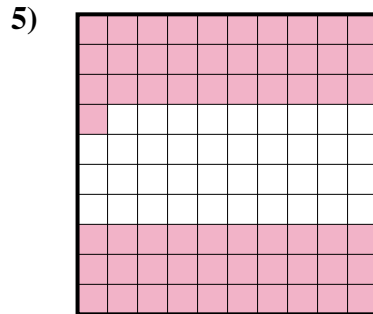
- A. 14
B. 1,4
C. 140,0
D. 0,14



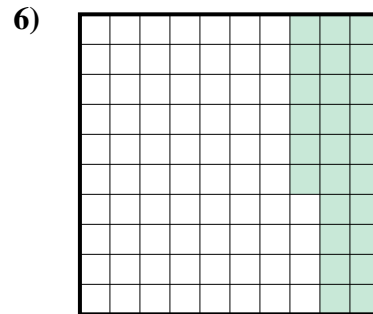
- A. 1,3
B. 13
C. 0,13
D. 0,013




- A. 0,09
B. 90
C. 0,9
D. 900,00



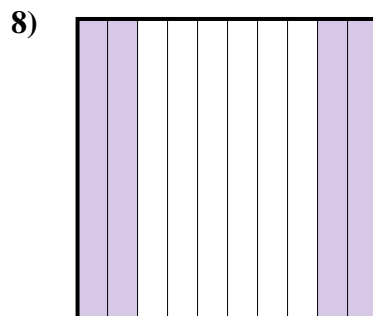
- A. 6,1
B. 0,61
C. 610,0
D. 0,061



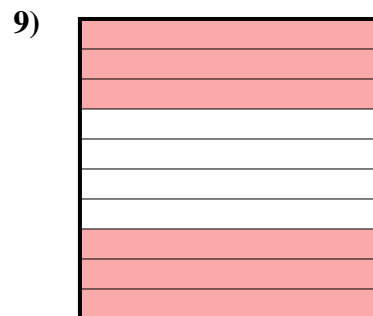
- A. 26
B. 260,0
C. 0,26
D. 0,026



- A. 20,0
B. 0,2
C. 0,02
D. 20,00



- A. 40
B. 400,0
C. 0,4
D. 0,04

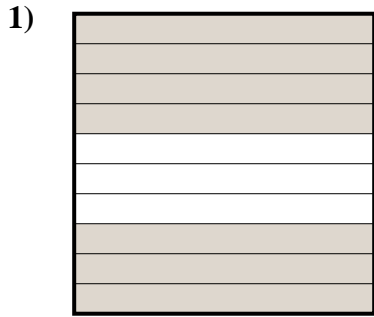


- A. 600,00
B. 60
C. 0,6
D. 0,06

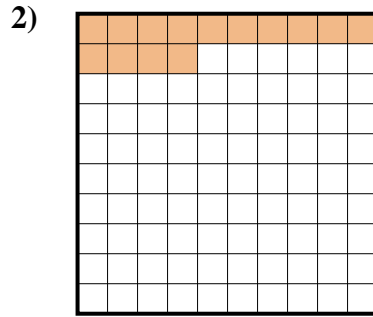
1. _____
2. _____
3. _____
4. _____
5. _____
6. _____
7. _____
8. _____
9. _____



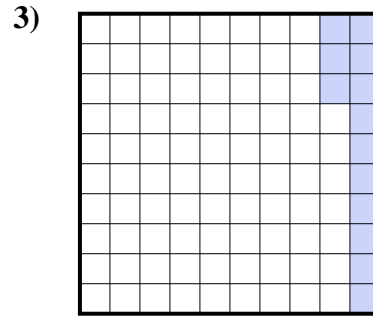
Stelle fest, welcher Buchstabe die schraffierte Fläche in Bezug auf das Ganze richtig darstellt.

Antworten


- A. 0,7
B. 0,07
C. 700,0
D. 7



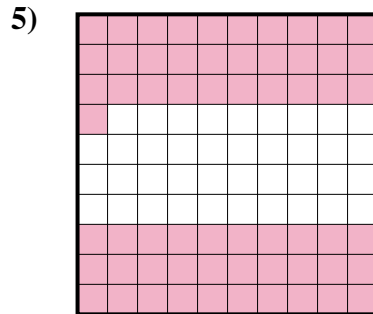
- A. 14
B. 1,4
C. 140,0
D. 0,14



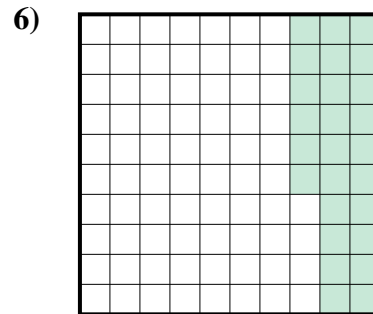
- A. 1,3
B. 13
C. 0,13
D. 0,013




- A. 0,09
B. 90
C. 0,9
D. 900,00



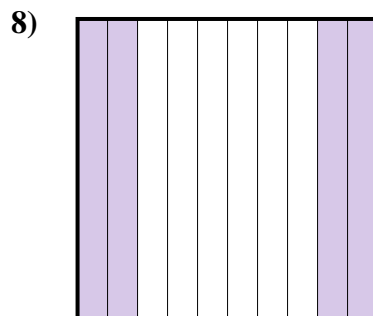
- A. 6,1
B. 0,61
C. 610,0
D. 0,061



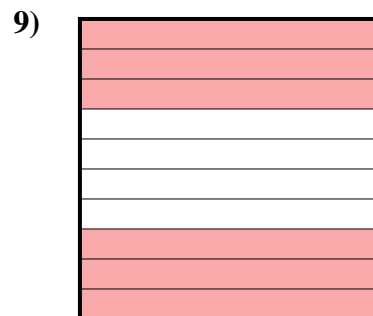
- A. 26
B. 260,0
C. 0,26
D. 0,026



- A. 20,0
B. 0,2
C. 0,02
D. 20,00



- A. 40
B. 400,0
C. 0,4
D. 0,04



- A. 600,00
B. 60
C. 0,6
D. 0,06

1. **A**
2. **D**
3. **C**
4. **C**
5. **B**
6. **C**
7. **C**
8. **C**
9. **C**