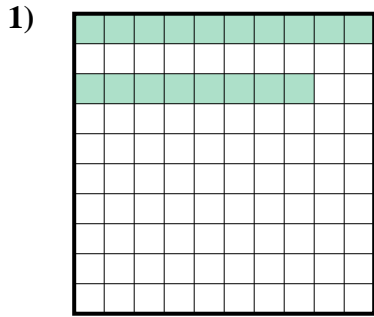
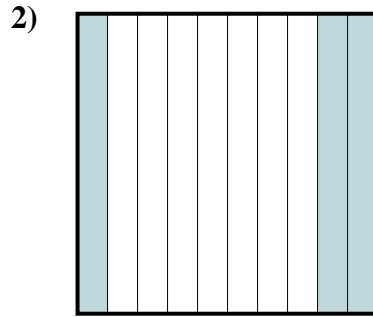




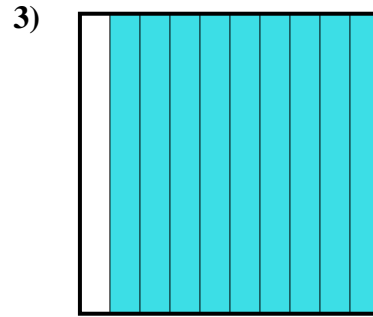
Stelle fest, welcher Buchstabe die schraffierte Fläche in Bezug auf das Ganze richtig darstellt.

Antworten

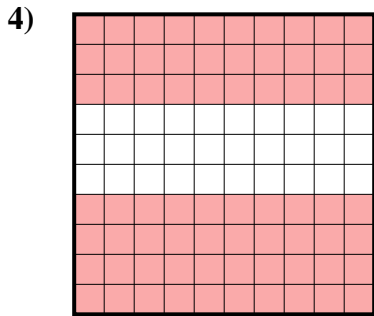
- A. 0,18
B. 180,00
C. 0,018
D. 180,0



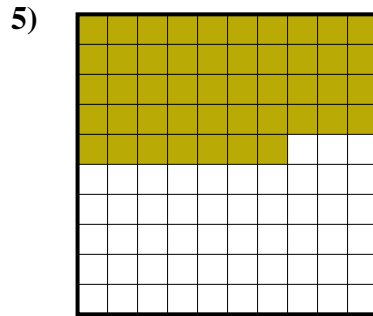
- A. 300,0
B. 30
C. 3
D. 0,3



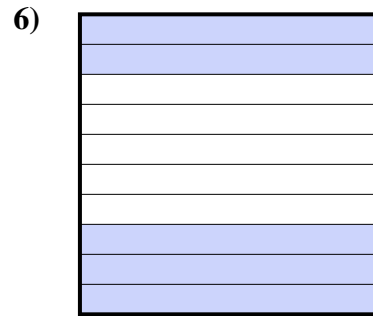
- A. 90
B. 0,09
C. 0,9
D. 900,00



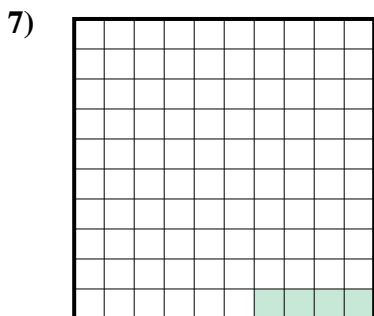
- A. 0,7
B. 700,0
C. 700,00
D. 70



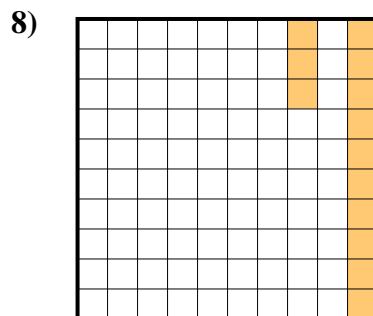
- A. 470,0
B. 0,047
C. 0,47
D. 470,00



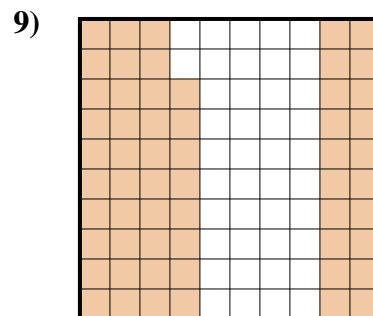
- A. 0,5
B. 50
C. 0,05
D. 5



- A. 0,004
B. 40,0
C. 0,04
D. 0,4



- A. 13
B. 0,13
C. 1,3
D. 130,0

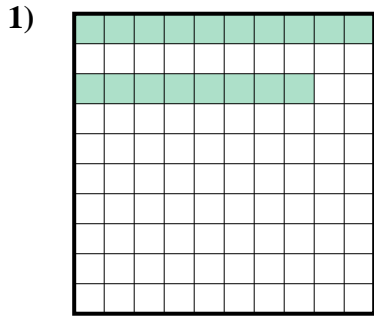


- A. 0,058
B. 580,00
C. 0,58
D. 580,0

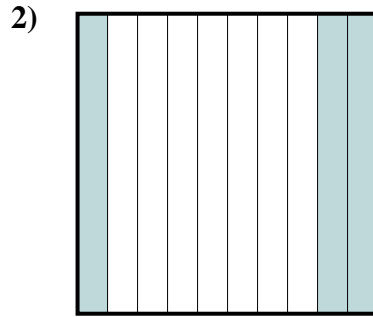
1. _____
2. _____
3. _____
4. _____
5. _____
6. _____
7. _____
8. _____
9. _____



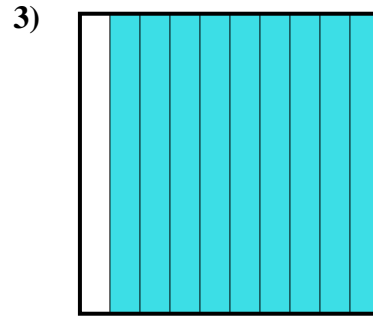
Stelle fest, welcher Buchstabe die schraffierte Fläche in Bezug auf das Ganze richtig darstellt.



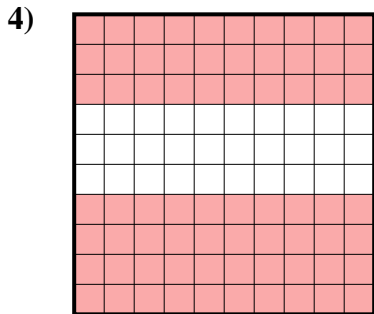
- A. 0,18
B. 180,00
C. 0,018
D. 180,0



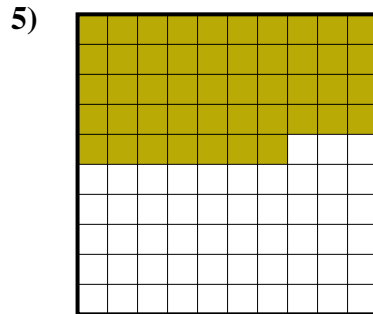
- A. 300,0
B. 30
C. 3
D. 0,3




- A. 90
B. 0,09
C. 0,9
D. 900,00



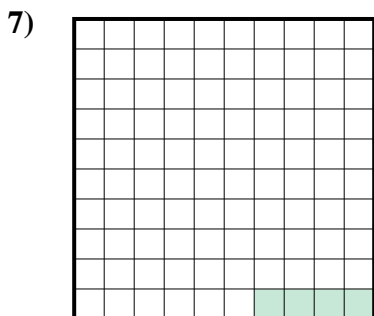
- A. 0,7
B. 700,0
C. 700,00
D. 70



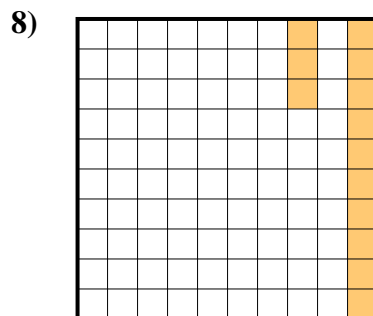
- A. 470,0
B. 0,047
C. 0,47
D. 470,00



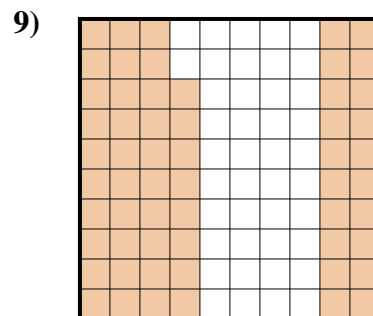
- A. 0,5
B. 50
C. 0,05
D. 5



- A. 0,004
B. 40,0
C. 0,04
D. 0,4



- A. 13
B. 0,13
C. 1,3
D. 130,0



- A. 0,058
B. 580,00
C. 0,58
D. 580,0

Antworten

1. **A**
2. **D**
3. **C**
4. **A**
5. **C**
6. **A**
7. **C**
8. **B**
9. **C**