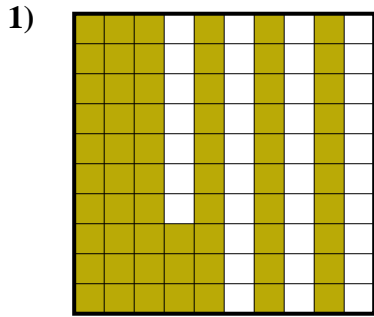
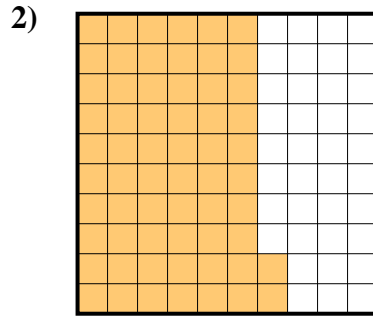




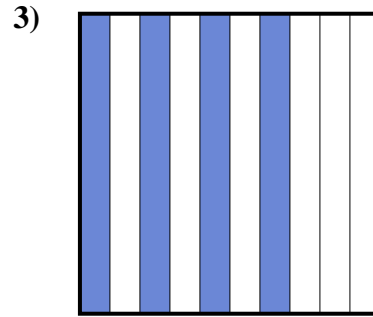
Stelle fest, welcher Buchstabe die schraffierte Fläche in Bezug auf das Ganze richtig darstellt.

**Antworten**

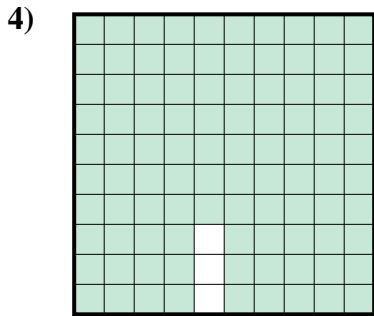
- A. 6,3  
B. 0,063  
C. 630,00  
D. 0,63



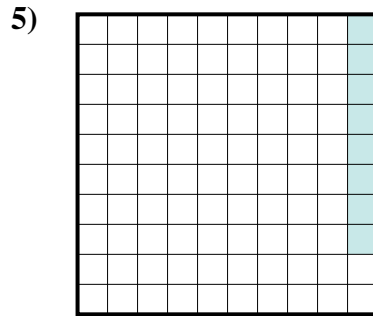
- A. 62  
B. 6,2  
C. 0,62  
D. 620,0



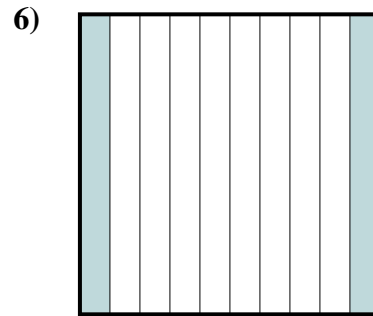
- A. 40  
B. 400,0  
C. 0,04  
D. 0,4



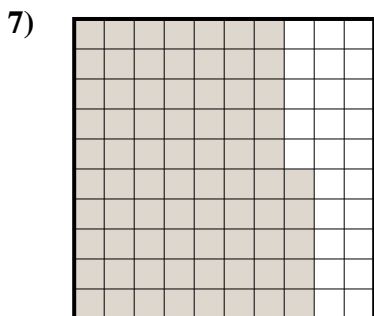
- A. 970,0  
B. 0,097  
C. 0,97  
D. 9,7



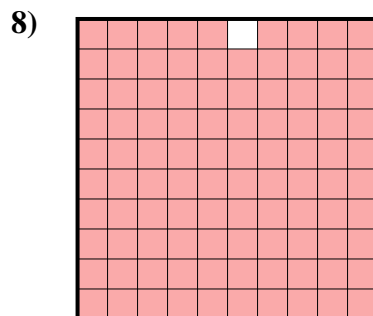
- A. 0,008  
B. 0,8  
C. 8  
D. 0,08




- A. 20  
B. 0,02  
C. 2  
D. 0,2



- A. 0,75  
B. 75  
C. 7,5  
D. 0,075



- A. 0,99  
B. 0,099  
C. 990,0  
D. 9,9

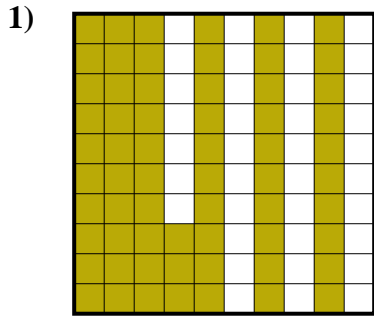


- A. 90  
B. 0,09  
C. 0,9  
D. 9

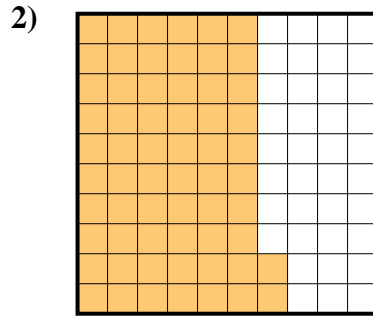
1. \_\_\_\_\_  
2. \_\_\_\_\_  
3. \_\_\_\_\_  
4. \_\_\_\_\_  
5. \_\_\_\_\_  
6. \_\_\_\_\_  
7. \_\_\_\_\_  
8. \_\_\_\_\_  
9. \_\_\_\_\_



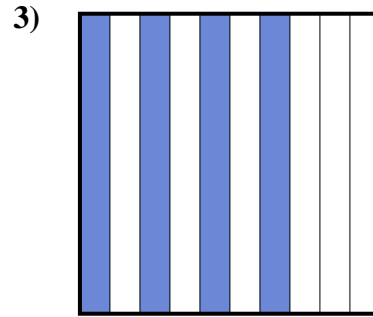
Stelle fest, welcher Buchstabe die schraffierte Fläche in Bezug auf das Ganze richtig darstellt.



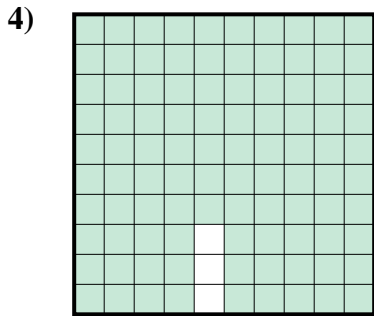
- A. 6,3  
B. 0,063  
C. 630,00  
D. 0,63



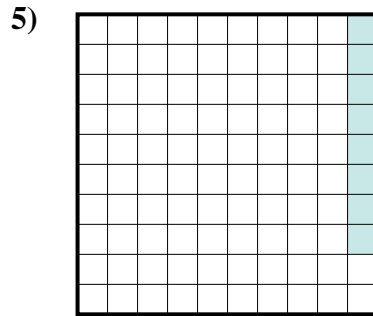
- A. 62  
B. 6,2  
C. 0,62  
D. 620,0



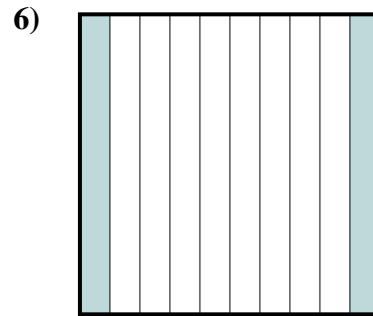
- A. 40  
B. 400,0  
C. 0,04  
D. 0,4



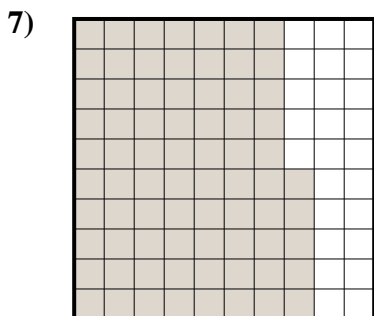
- A. 970,0  
B. 0,097  
C. 0,97  
D. 9,7



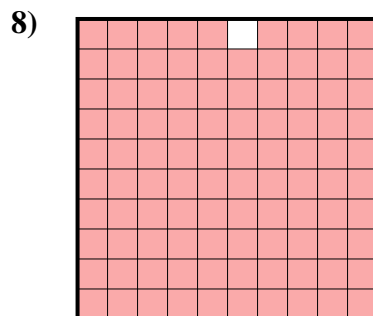
- A. 0,008  
B. 0,8  
C. 8  
D. 0,08




- A. 20  
B. 0,02  
C. 2  
D. 0,2



- A. 0,75  
B. 75  
C. 7,5  
D. 0,075



- A. 0,99  
B. 0,099  
C. 990,0  
D. 9,9



- A. 90  
B. 0,09  
C. 0,9  
D. 9

**Antworten**

1.       **D**        
2.       **C**        
3.       **D**        
4.       **C**        
5.       **D**        
6.       **D**        
7.       **A**        
8.       **A**        
9.       **C**