
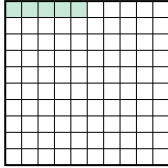
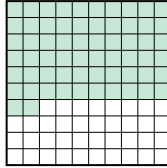
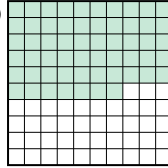


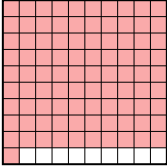

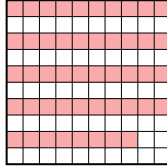



Ordne die folgenden Flächen der Größe nach (von der kleinsten Fläche zur größten) gemäß den Schattierungen.

Antworten

Bsp) A  B  C  D  klein 0.05 - B
0.57 - D
0.62 - C
groß 0.9 - A

Bsp. B,D,C,A

1) A  B  C  D  klein _____

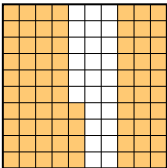
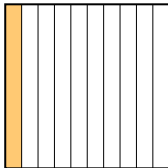
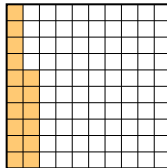
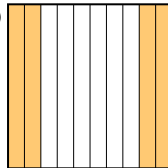
groß _____

1. _____

2. _____

3. _____


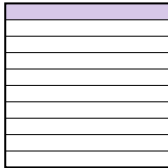
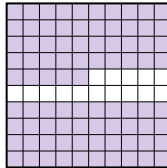
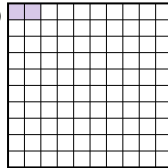
4. _____

2) A  B  C  D  klein _____

groß _____

5. _____

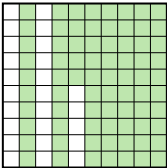
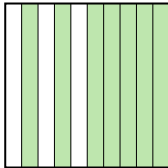

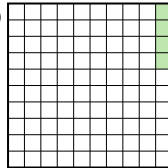
6. _____

3) A  B  C  D  klein _____


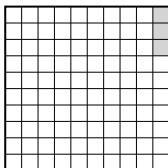
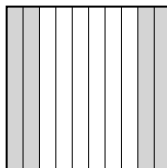

groß _____

7. _____


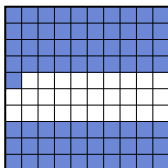


8. _____

4) A  B  C  D  klein _____

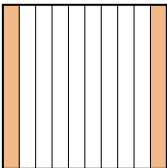
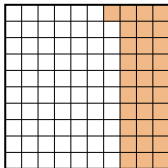
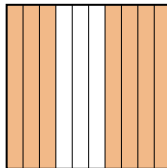
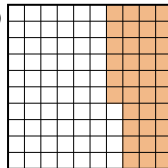
groß _____

5) A  B  C  D  klein _____




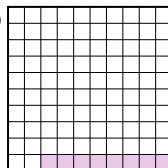
groß _____

6) A  B  C  D  klein _____

groß _____

7) A  B  C  D  klein _____

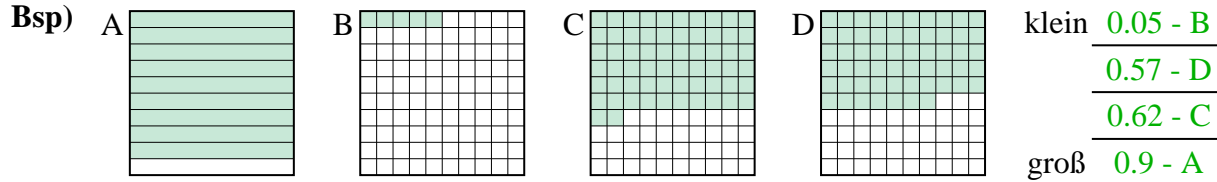
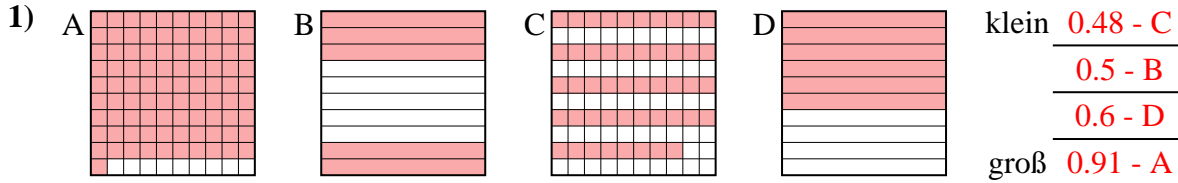
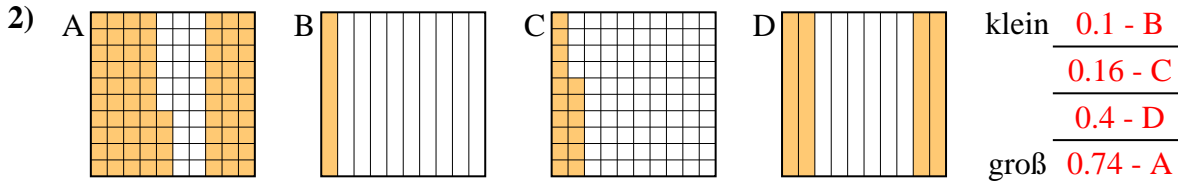
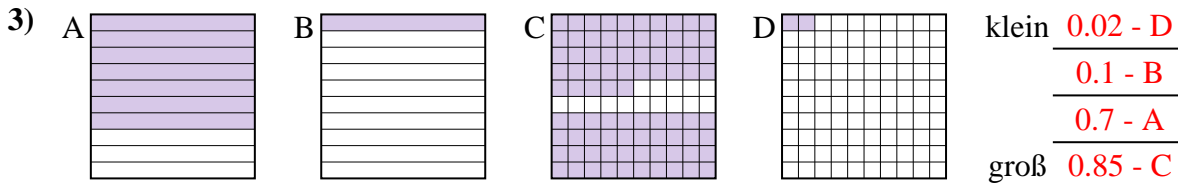
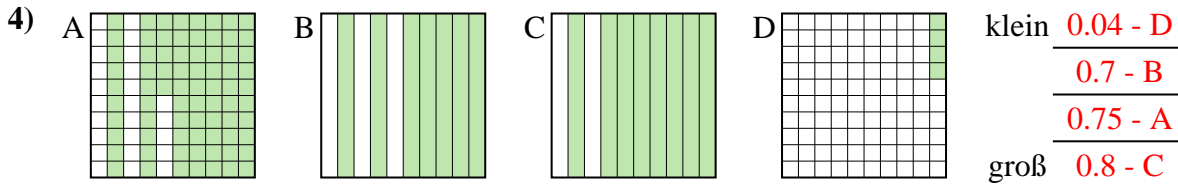
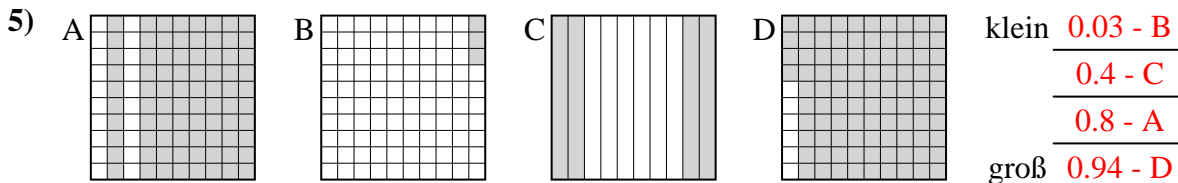
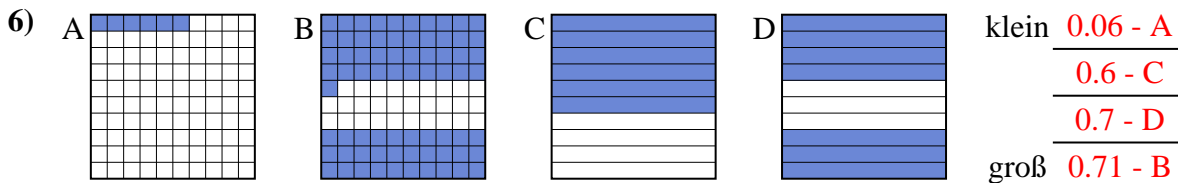
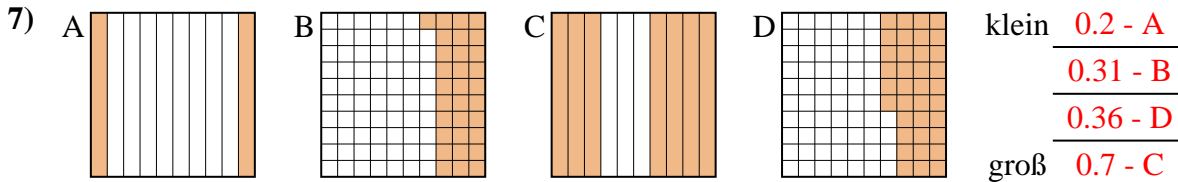
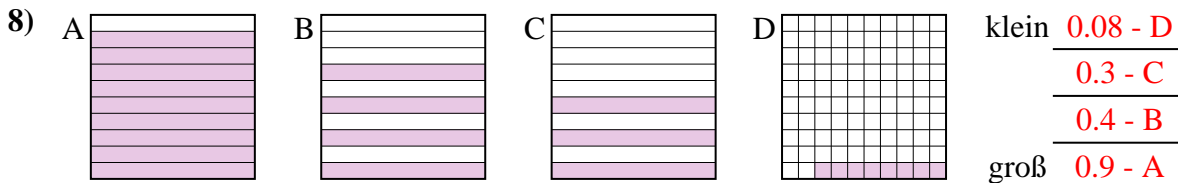
groß _____

8) A  B  C  D  klein _____

groß _____



Ordne die folgenden Flächen der Größe nach (von der kleinsten Fläche zur größten) gemäß den Schattierungen.

Antwortenklein 0.05 - B0.57 - D0.62 - Cgroß 0.9 - ABsp. B,D,C,Aklein 0.48 - C0.5 - B0.6 - Dgroß 0.91 - A1. C,B,D,A2. B,C,D,A3. D,B,A,C4. D,B,A,Cklein 0.1 - B0.16 - C0.4 - Dgroß 0.74 - A5. B,C,A,D6. A,C,D,Bklein 0.02 - D0.1 - B0.7 - Agroß 0.85 - C7. A,B,D,C8. D,C,B,Aklein 0.04 - D0.7 - B0.75 - Agroß 0.8 - Cklein 0.03 - B0.4 - C0.8 - Agroß 0.94 - Dklein 0.06 - A0.6 - C0.7 - Dgroß 0.71 - Bklein 0.2 - A0.31 - B0.36 - Dgroß 0.7 - Cklein 0.08 - D0.3 - C0.4 - Bgroß 0.9 - A