


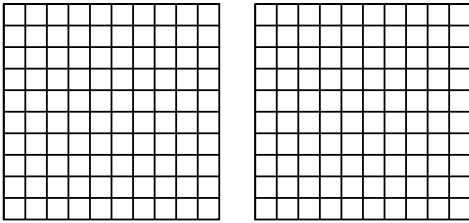


Wende die visuelle Methode an um jede Aufgabe zu lösen.

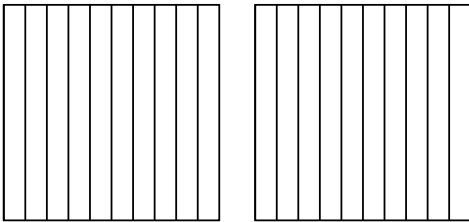
1)  $3 \cdot 0,18 =$



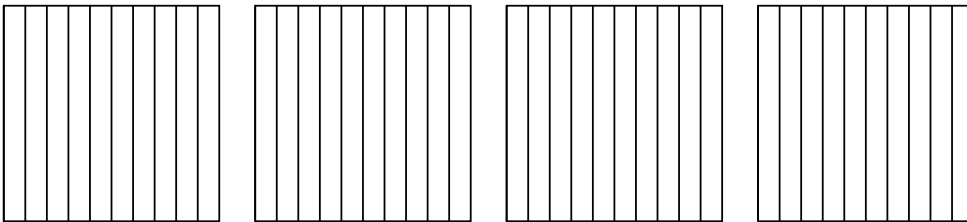
2)  $2 \cdot 0,53 =$



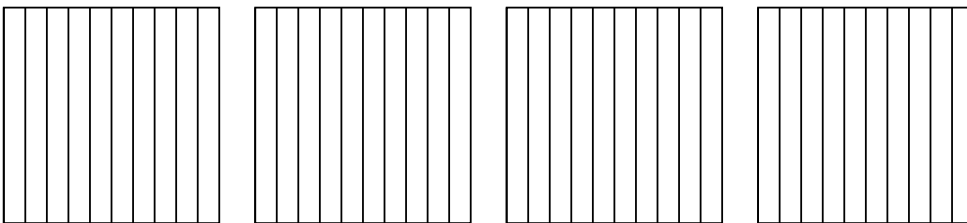
3)  $2 \cdot 0,4 =$



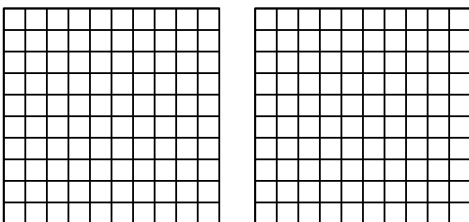
4)  $4 \cdot 0,7 =$



5)  $4 \cdot 0,8 =$



6)  $2 \cdot 0,38 =$



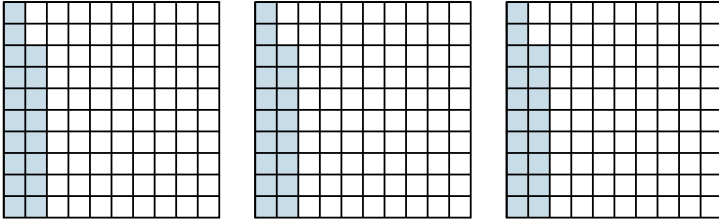
**Antworten**

- 1. \_\_\_\_\_
- 2. \_\_\_\_\_
- 3. \_\_\_\_\_
- 4. \_\_\_\_\_
- 5. \_\_\_\_\_
- 6. \_\_\_\_\_

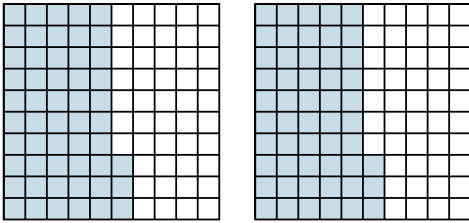


Wende die visuelle Methode an um jede Aufgabe zu lösen.

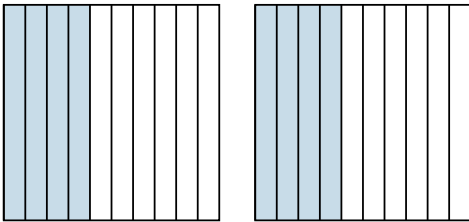
1)  $3 \cdot 0,18 =$



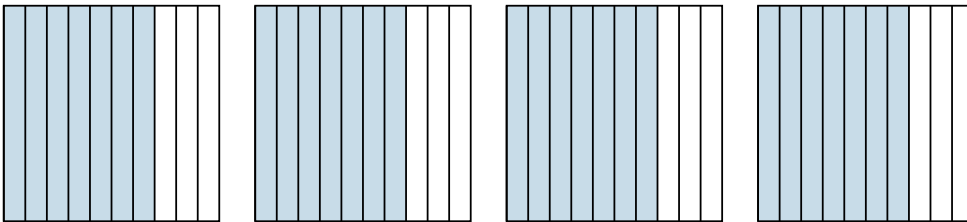
2)  $2 \cdot 0,53 =$



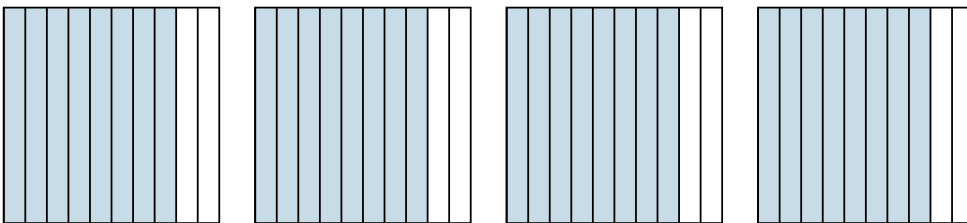
3)  $2 \cdot 0,4 =$



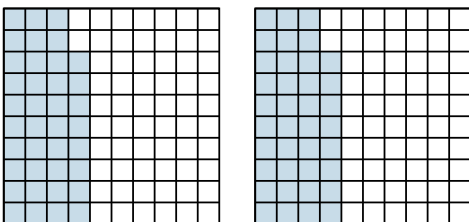
4)  $4 \cdot 0,7 =$



5)  $4 \cdot 0,8 =$



6)  $2 \cdot 0,38 =$

**Antworten**

1.  $\frac{54}{100} = 0,54$

2.  $\frac{106}{100} = 1,06$

3.  $\frac{8}{10} = 0,8$

4.  $\frac{28}{10} = 2,8$

5.  $\frac{32}{10} = 3,2$

6.  $\frac{76}{100} = 0,76$