


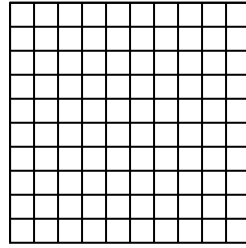


Wende die visuelle Methode an um jede Aufgabe zu lösen.

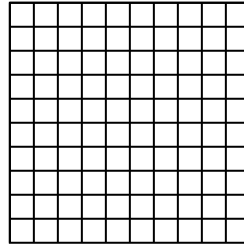
1) $0,1 \cdot 0,7 =$




2) $0,8 \cdot 0,5 =$



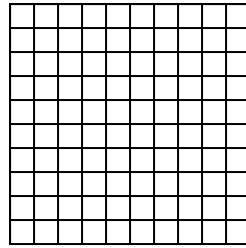
3) $0,6 \cdot 0,2 =$



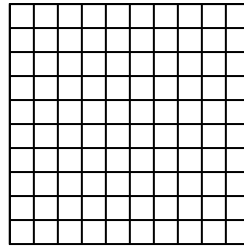
4) $0,8 \cdot 0,1 =$



5) $0,3 \cdot 0,2 =$



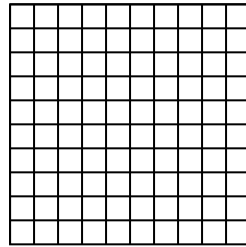
6) $0,9 \cdot 0,7 =$



7) $0,8 \cdot 0,9 =$




8) $0,9 \cdot 0,1 =$



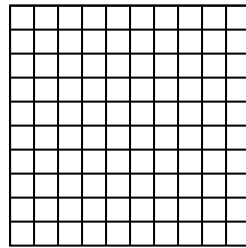
9) $0,1 \cdot 0,3 =$



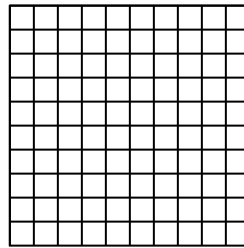
10) $0,5 \cdot 0,2 =$




11) $0,4 \cdot 0,9 =$




12) $0,8 \cdot 0,7 =$




13) $0,9 \cdot 0,4 =$



14) $0,8 \cdot 0,3 =$



15) $0,3 \cdot 0,5 =$



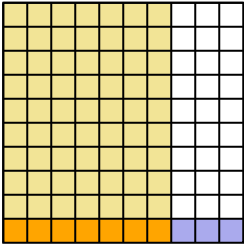
Antworten

- 1. _____
- 2. _____
- 3. _____
- 4. _____
- 5. _____
- 6. _____
- 7. _____
- 8. _____
- 9. _____
- 10. _____
- 11. _____
- 12. _____
- 13. _____
- 14. _____
- 15. _____

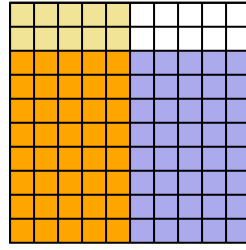


Wende die visuelle Methode an um jede Aufgabe zu lösen.

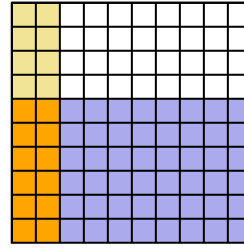
1) $0,1 \cdot 0,7 =$



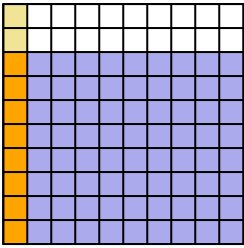
2) $0,8 \cdot 0,5 =$



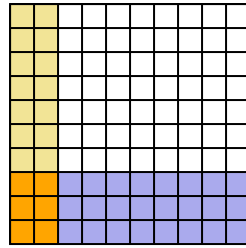
3) $0,6 \cdot 0,2 =$



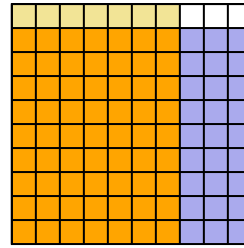
4) $0,8 \cdot 0,1 =$



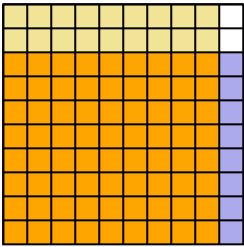
5) $0,3 \cdot 0,2 =$



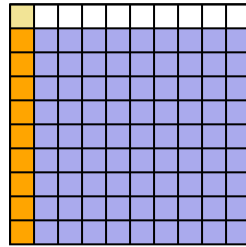
6) $0,9 \cdot 0,7 =$



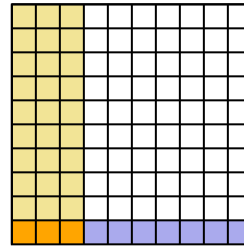
7) $0,8 \cdot 0,9 =$



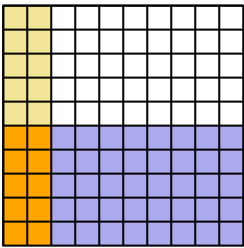
8) $0,9 \cdot 0,1 =$



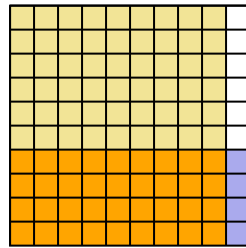
9) $0,1 \cdot 0,3 =$



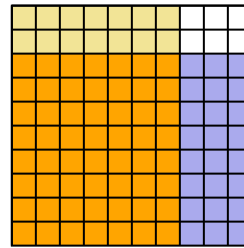
10) $0,5 \cdot 0,2 =$



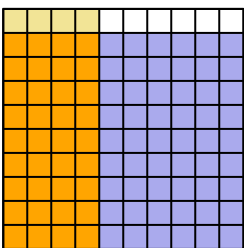
11) $0,4 \cdot 0,9 =$



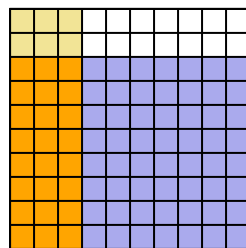
12) $0,8 \cdot 0,7 =$



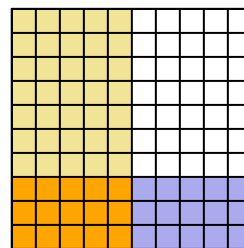
13) $0,9 \cdot 0,4 =$



14) $0,8 \cdot 0,3 =$



15) $0,3 \cdot 0,5 =$

**Antworten**

1. $\frac{7}{100} = 0,07$

2. $\frac{40}{100} = 0,4$

3. $\frac{12}{100} = 0,12$

4. $\frac{8}{100} = 0,08$

5. $\frac{6}{100} = 0,06$

6. $\frac{63}{100} = 0,63$

7. $\frac{72}{100} = 0,72$

8. $\frac{9}{100} = 0,09$

9. $\frac{3}{100} = 0,03$

10. $\frac{10}{100} = 0,1$

11. $\frac{36}{100} = 0,36$

12. $\frac{56}{100} = 0,56$

13. $\frac{36}{100} = 0,36$

14. $\frac{24}{100} = 0,24$

15. $\frac{15}{100} = 0,15$