





Wende die visuelle Methode an um jede Aufgabe zu lösen.

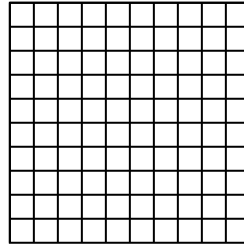
1) $0,2 \cdot 0,8 =$




2) $0,4 \cdot 0,3 =$




3) $0,7 \cdot 0,4 =$



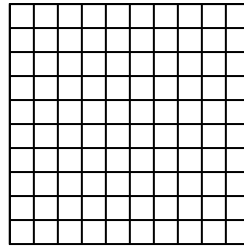
4) $0,1 \cdot 0,9 =$




5) $0,5 \cdot 0,4 =$




6) $0,4 \cdot 0,8 =$



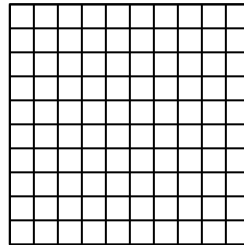
7) $0,1 \cdot 0,7 =$




8) $0,7 \cdot 0,6 =$




9) $0,3 \cdot 0,1 =$




10) $0,3 \cdot 0,9 =$




11) $0,3 \cdot 0,2 =$




12) $0,3 \cdot 0,7 =$




13) $0,8 \cdot 0,9 =$



14) $0,6 \cdot 0,6 =$



15) $0,7 \cdot 0,3 =$



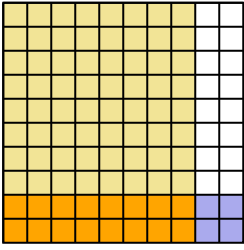
Antworten

1. _____
2. _____
3. _____
4. _____
5. _____
6. _____
7. _____
8. _____
9. _____
10. _____
11. _____
12. _____
13. _____
14. _____
15. _____

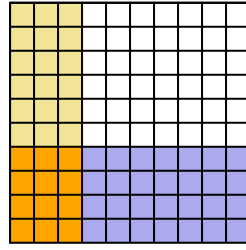


Wende die visuelle Methode an um jede Aufgabe zu lösen.

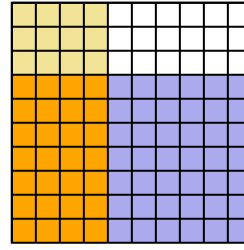
1) $0,2 \cdot 0,8 =$



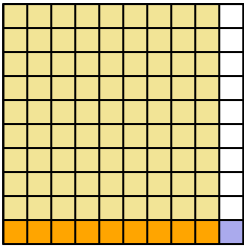
2) $0,4 \cdot 0,3 =$



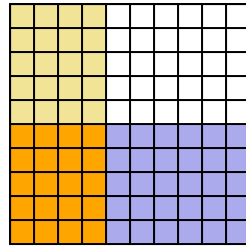
3) $0,7 \cdot 0,4 =$



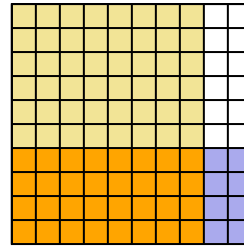
4) $0,1 \cdot 0,9 =$



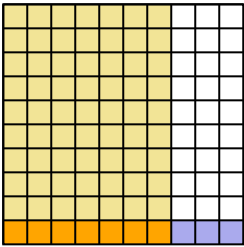
5) $0,5 \cdot 0,4 =$



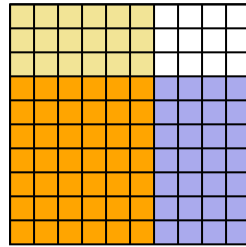
6) $0,4 \cdot 0,8 =$



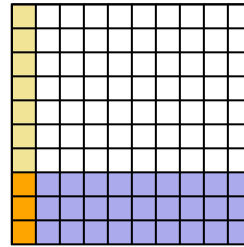
7) $0,1 \cdot 0,7 =$



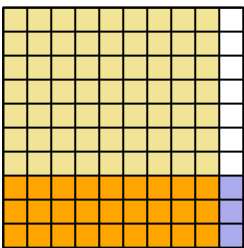
8) $0,7 \cdot 0,6 =$



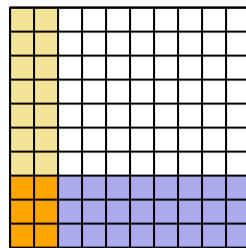
9) $0,3 \cdot 0,1 =$



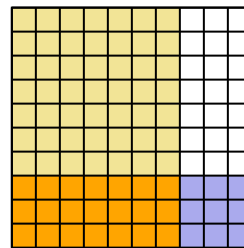
10) $0,3 \cdot 0,9 =$



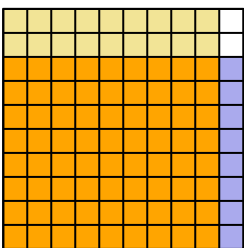
11) $0,3 \cdot 0,2 =$



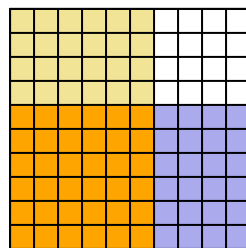
12) $0,3 \cdot 0,7 =$



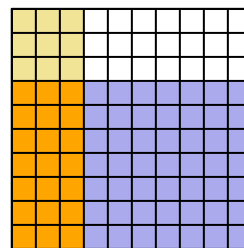
13) $0,8 \cdot 0,9 =$



14) $0,6 \cdot 0,6 =$



15) $0,7 \cdot 0,3 =$

**Antworten**

1. $\frac{16}{100} = 0,16$

2. $\frac{12}{100} = 0,12$

3. $\frac{28}{100} = 0,28$

4. $\frac{9}{100} = 0,09$

5. $\frac{20}{100} = 0,2$

6. $\frac{32}{100} = 0,32$

7. $\frac{7}{100} = 0,07$

8. $\frac{42}{100} = 0,42$

9. $\frac{3}{100} = 0,03$

10. $\frac{27}{100} = 0,27$

11. $\frac{6}{100} = 0,06$

12. $\frac{21}{100} = 0,21$

13. $\frac{72}{100} = 0,72$

14. $\frac{36}{100} = 0,36$

15. $\frac{21}{100} = 0,21$