

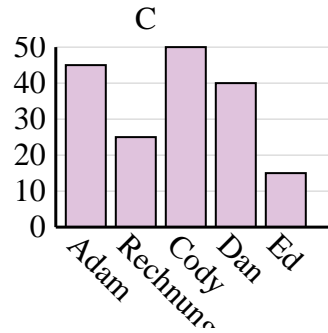
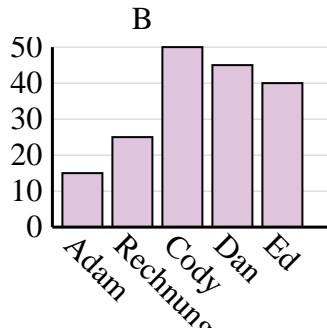
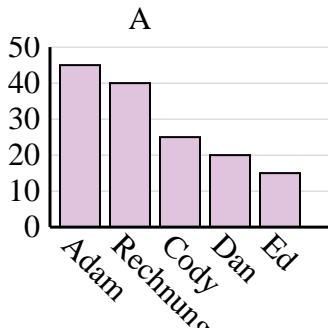


Entscheide, welches Diagramm (A, B oder C) am besten die Information in der Tabelle repräsentiert.

Antworten

1)

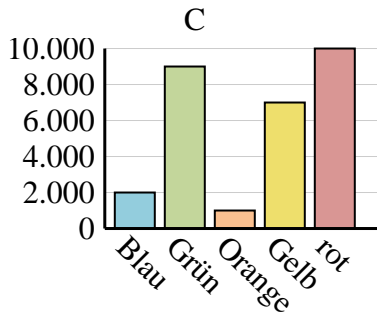
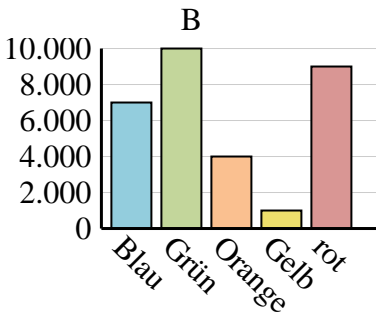
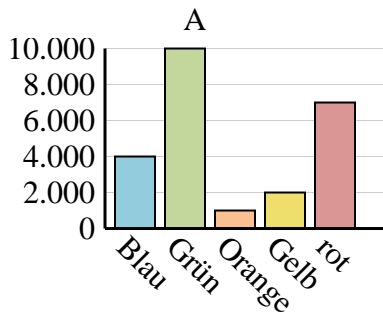
Name	Adam	Rechnung	Cody	Dan	Ed
Punkte	45	40	25	20	15



1. _____
2. _____
3. _____
4. _____

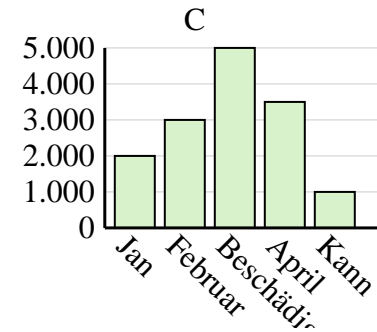
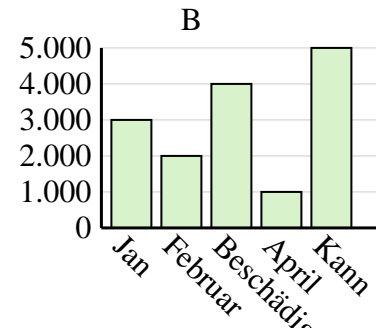
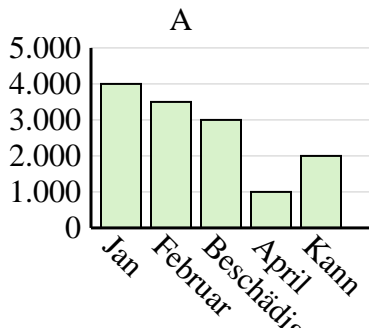
2)

Lieblingsfarbe	Blau	Grün	Orange	Gelb	rot
Personen	4.000	10.000	1.000	2.000	7.000



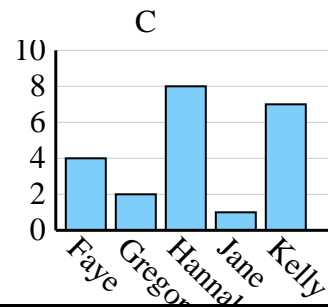
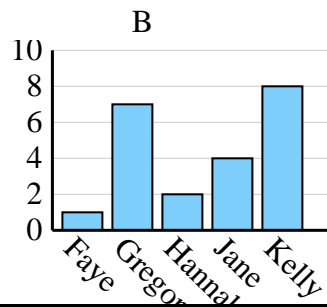
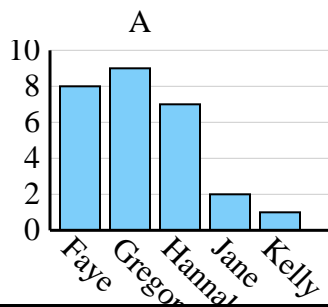
3)

Der Umsatz	Jan	Februar	Beschädigen	April	Kann
Monat	3.000	2.000	4.000	1.000	5.000



4)

Name	Faye	Gregor	Hannah	Jane	Kelly
Staaten, in denen gelebt wurde	4	2	8	1	7

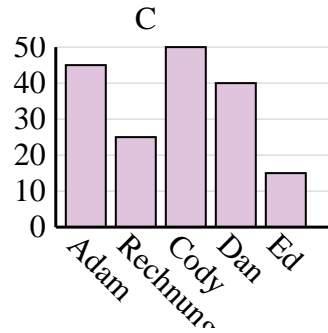
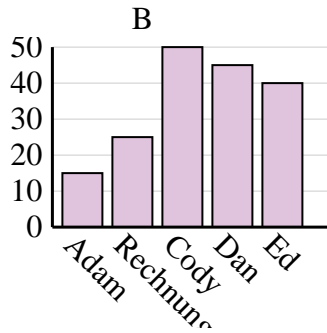
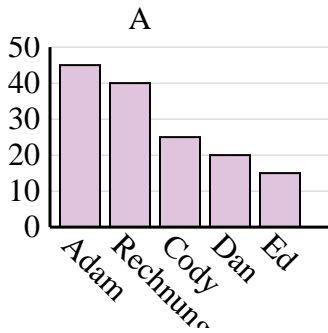




Entscheide, welches Diagramm (A, B oder C) am besten die Information in der Tabelle repräsentiert.

Antworten

Name	Adam	Rechnung	Cody	Dan	Ed
Punkte	45	40	25	20	15



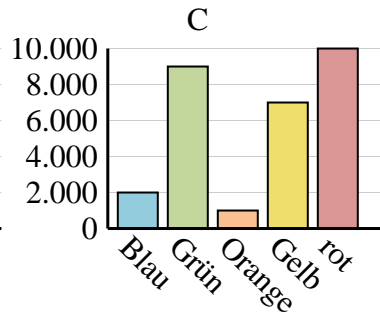
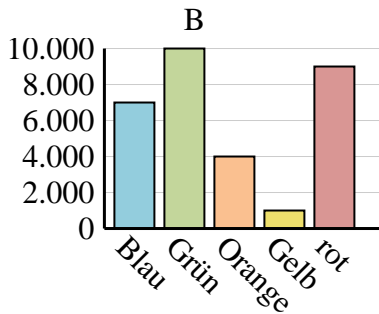
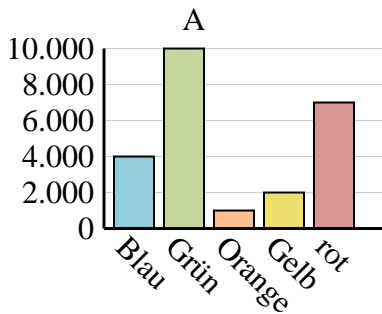
1. **A**

2. **A**

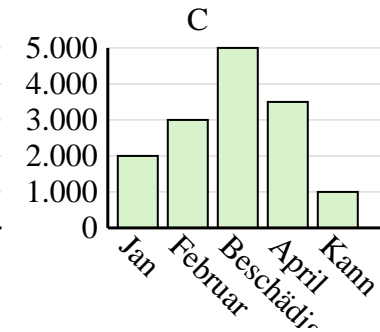
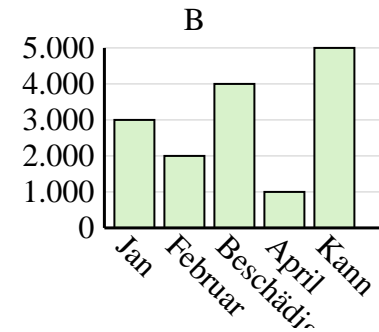
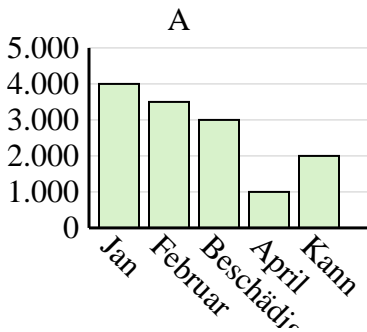
3. **B**

4. **C**

Lieblingsfarbe	Blau	Grün	Orange	Gelb	rot
Personen	4.000	10.000	1.000	2.000	7.000



Der Umsatz	Jan	Februar	Beschädigen	April	Kann
Monat	3.000	2.000	4.000	1.000	5.000



Name	Faye	Gregor	Hannah	Jane	Kelly
Staaten, in denen gelebt wurde	4	2	8	1	7

