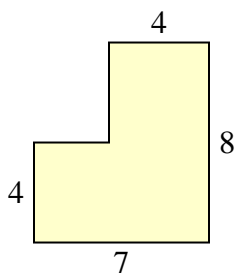




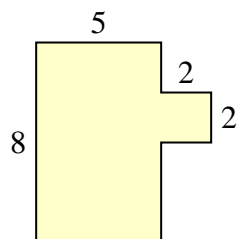
Bestimme die Gesamtfläche von jeder Form. Maßeinheit ist in mm. Abbildung ist nicht maßstäblich.

Antworten

1)



2)



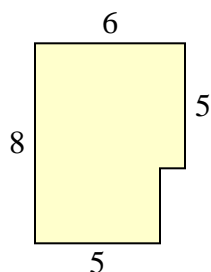
1. _____

2. _____

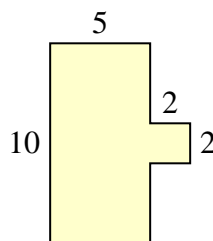
3. _____

4. _____

3)



4)



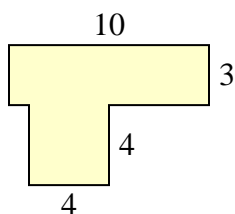
5. _____

6. _____

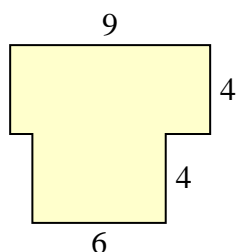
7. _____

8. _____

5)



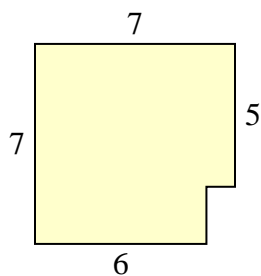
6)



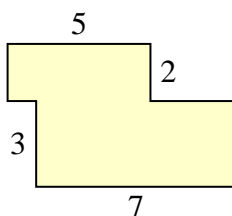
9. _____

10. _____

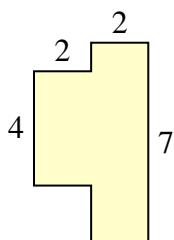
7)



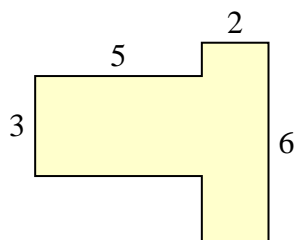
8)



9)



10)

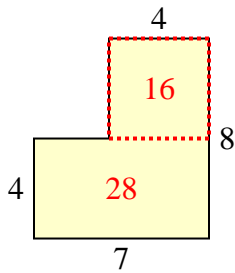




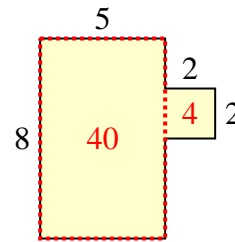
Bestimme die Gesamtfläche von jeder Form. Maßeinheit ist in mm. Abbildung ist nicht maßstäblich.

Antworten

1)



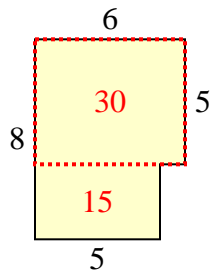
2)



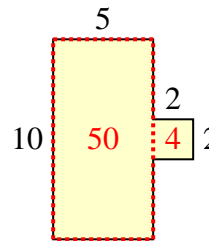
1.

44 mm²

3)



4)



2.

44 mm²

3.

45 mm²

4.

54 mm²

5.

46 mm²

6.

60 mm²

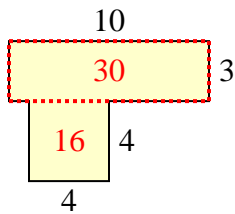
7.

47 mm²

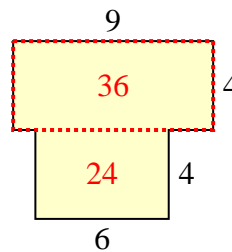
8.

31 mm²

5)



6)



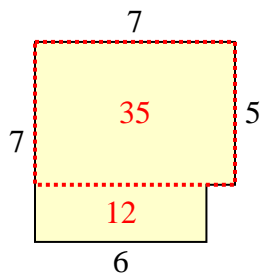
9.

22 mm²

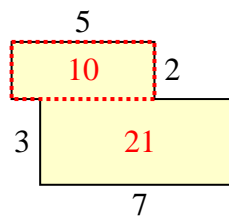
10.

27 mm²

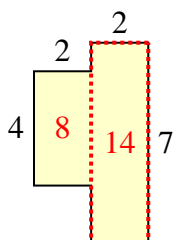
7)



8)



9)



10)

