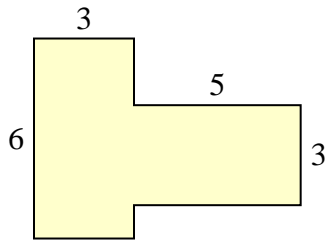




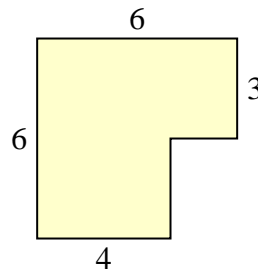
Bestimme die Gesamtfläche von jeder Form. Maßeinheit ist in mm. Abbildung ist nicht maßstäblich.

**Antworten**

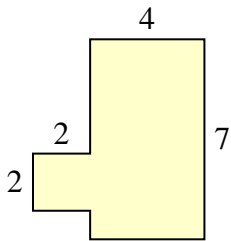
1)



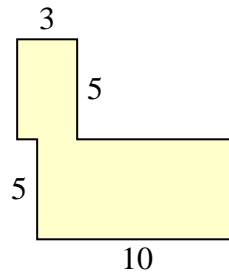
2)



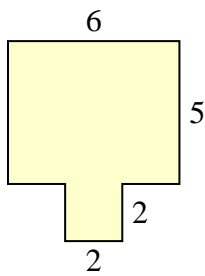
3)



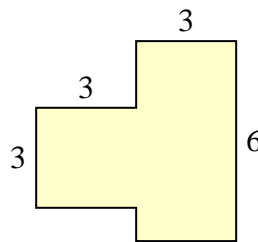
4)



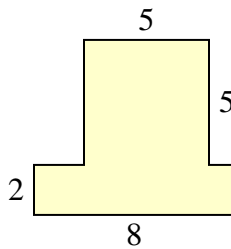
5)



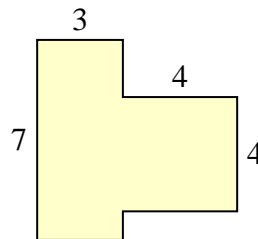
6)



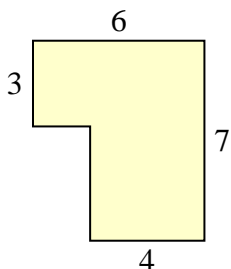
7)



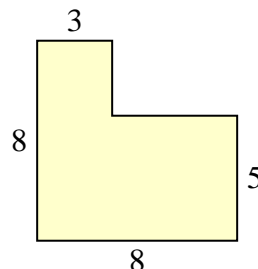
8)



9)



10)

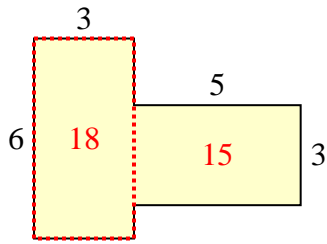


- 1. \_\_\_\_\_
- 2. \_\_\_\_\_
- 3. \_\_\_\_\_
- 4. \_\_\_\_\_
- 5. \_\_\_\_\_
- 6. \_\_\_\_\_
- 7. \_\_\_\_\_
- 8. \_\_\_\_\_
- 9. \_\_\_\_\_
- 10. \_\_\_\_\_

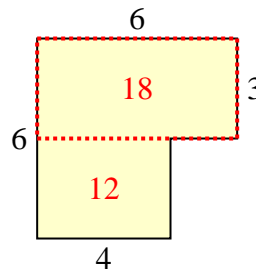


Bestimme die Gesamtfläche von jeder Form. Maßeinheit ist in mm. Abbildung ist nicht maßstäblich.

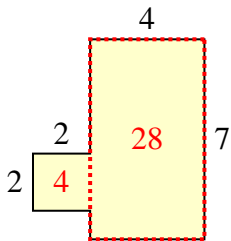
1)



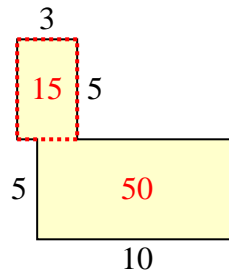
2)



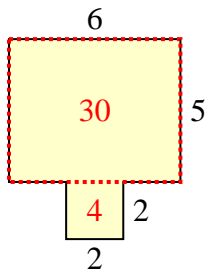
3)



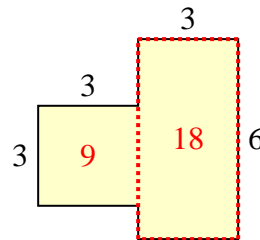
4)



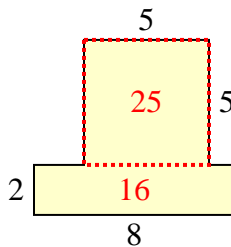
5)



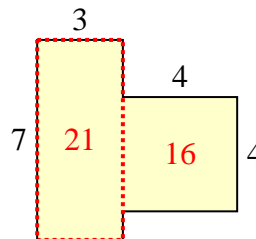
6)



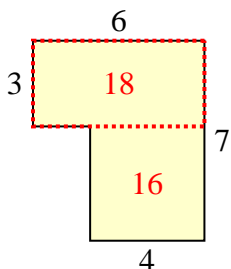
7)



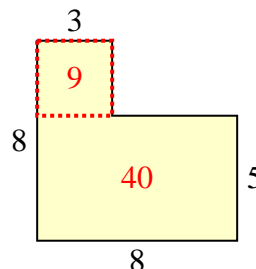
8)



9)



10)

**Antworten**1. **33 mm<sup>2</sup>**2. **30 mm<sup>2</sup>**3. **32 mm<sup>2</sup>**4. **65 mm<sup>2</sup>**5. **34 mm<sup>2</sup>**6. **27 mm<sup>2</sup>**7. **41 mm<sup>2</sup>**8. **37 mm<sup>2</sup>**9. **34 mm<sup>2</sup>**10. **49 mm<sup>2</sup>**