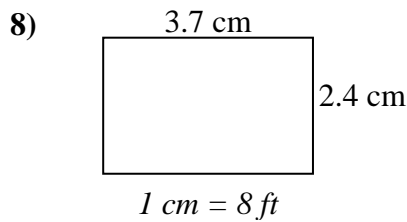
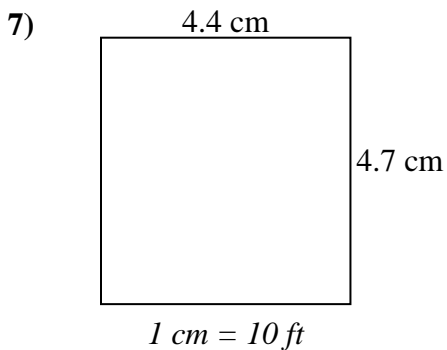
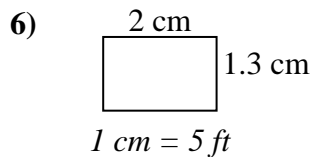
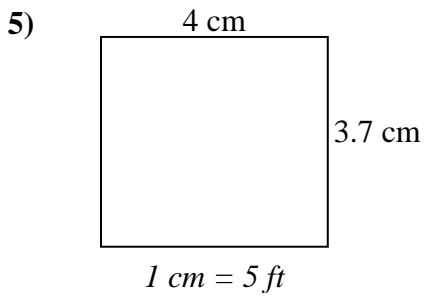
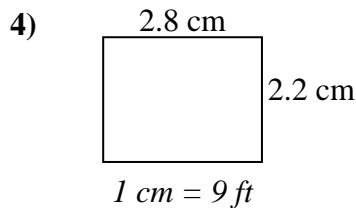
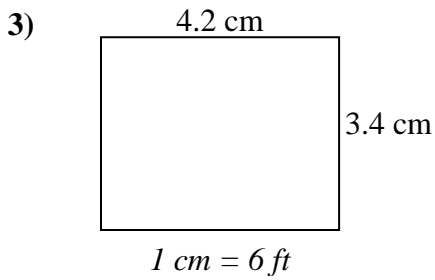
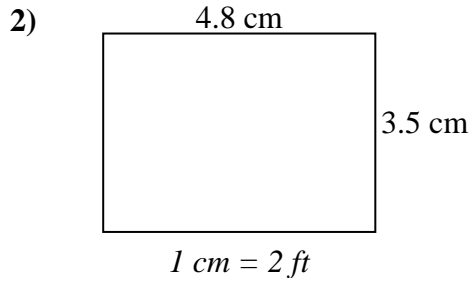
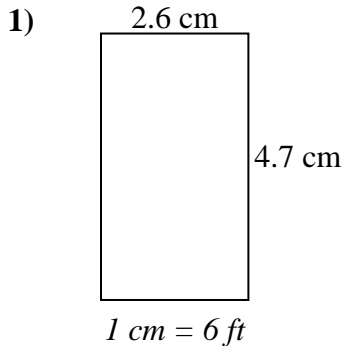




Bestimmen Sie die tatsächliche Breite, Höhe und Fläche jedes Maßstabsrechtecks.
Runden Sie den Bereich auf die nächste ganze Zahl.



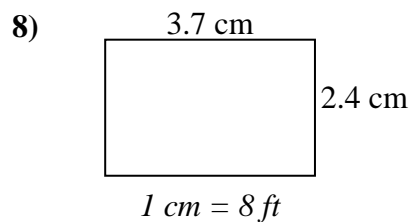
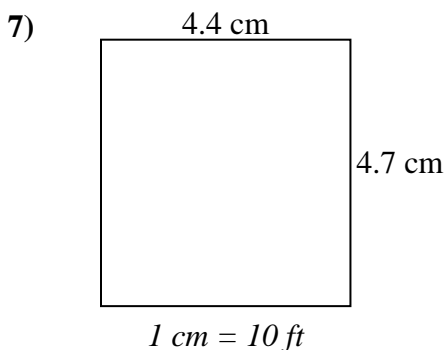
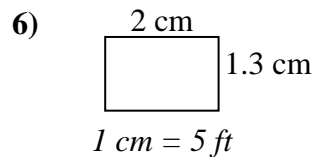
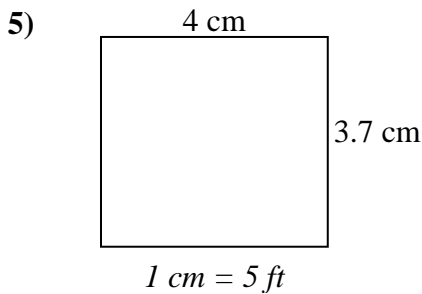
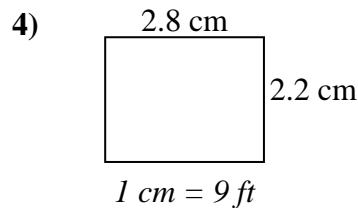
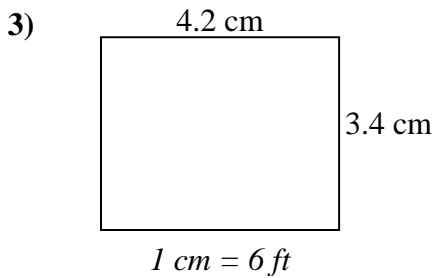
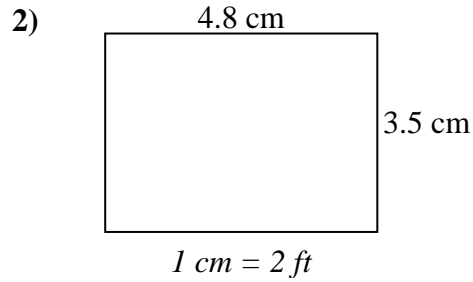
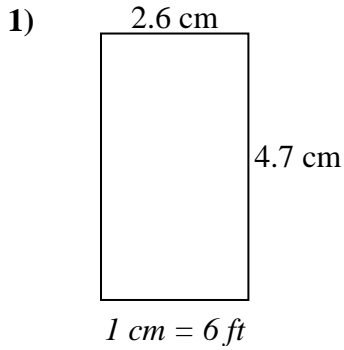
Antworten

1. _____
2. _____
3. _____
4. _____
5. _____
6. _____
7. _____
8. _____



Bestimmen Sie die tatsächliche Breite, Höhe und Fläche jedes Maßstabsrechtecks.

Runden Sie den Bereich auf die nächste ganze Zahl.

**Antworten**

1.	<u>15.6</u>	<u>28.2</u>	<u>440</u>
2.	<u>9.6</u>	<u>7</u>	<u>67</u>
3.	<u>25.2</u>	<u>20.4</u>	<u>514</u>
4.	<u>25.2</u>	<u>19.8</u>	<u>499</u>
5.	<u>20</u>	<u>18.5</u>	<u>370</u>
6.	<u>10</u>	<u>6.5</u>	<u>65</u>
7.	<u>44</u>	<u>47</u>	<u>2.068</u>
8.	<u>29.6</u>	<u>19.2</u>	<u>568</u>