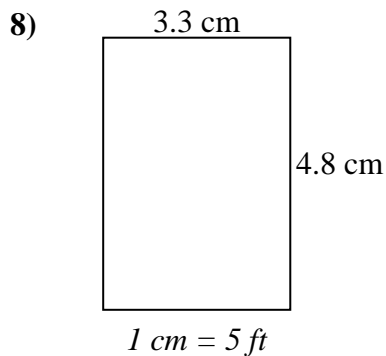
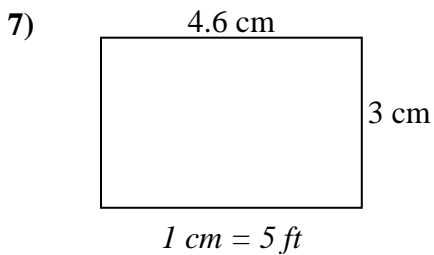
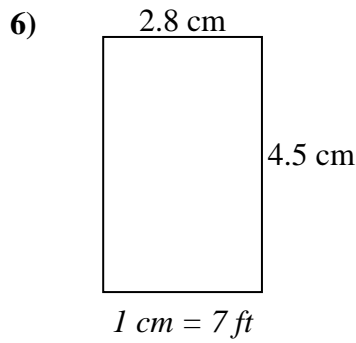
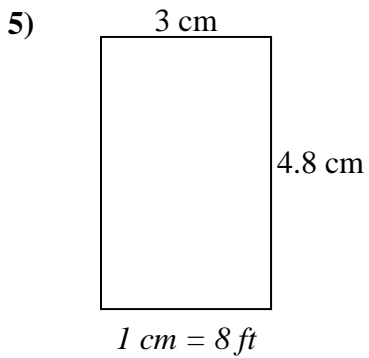
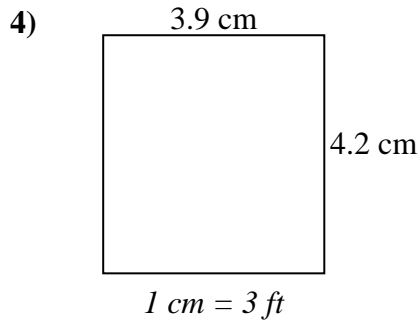
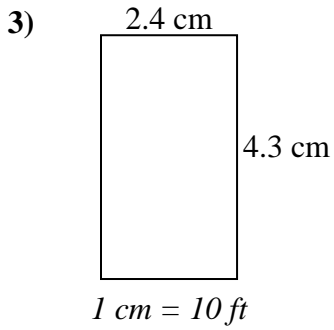
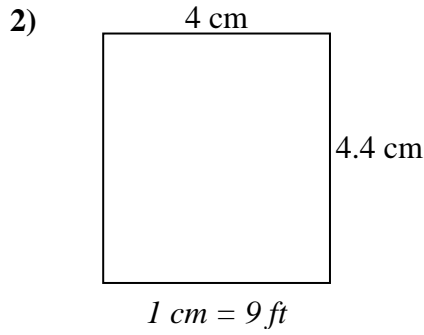
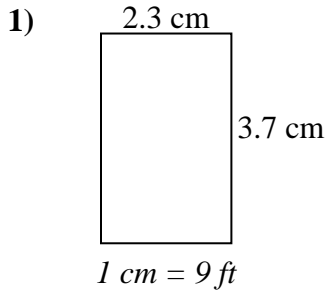




Bestimmen Sie die tatsächliche Breite, Höhe und Fläche jedes Maßstabsrechtecks.
Runden Sie den Bereich auf die nächste ganze Zahl.



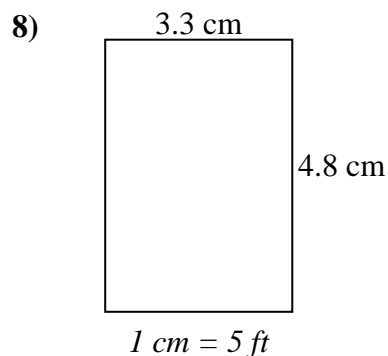
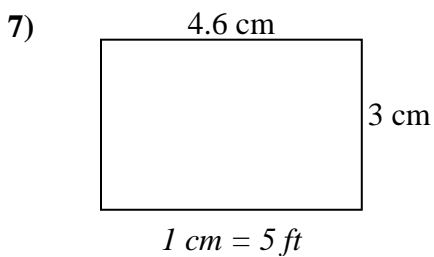
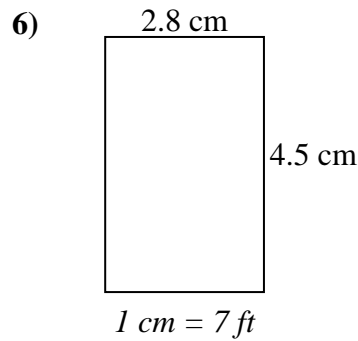
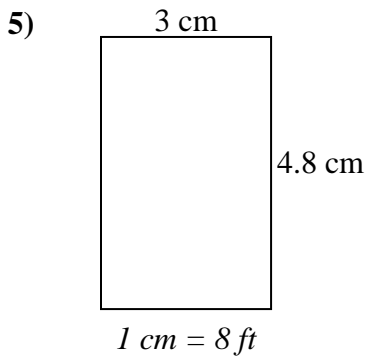
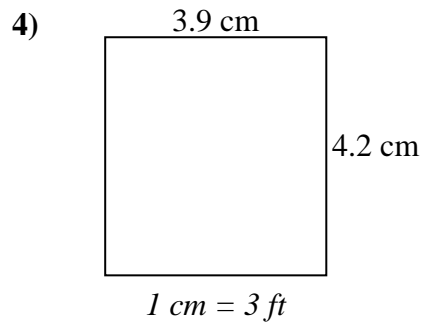
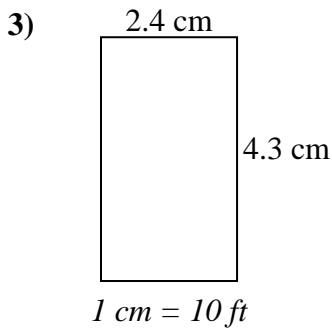
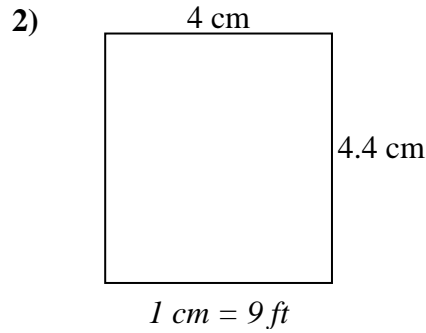
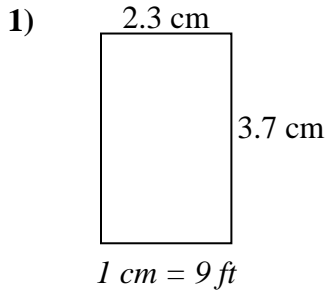
Antworten

1. _____
2. _____
3. _____
4. _____
5. _____
6. _____
7. _____
8. _____



Bestimmen Sie die tatsächliche Breite, Höhe und Fläche jedes Maßstabsrechtecks.

Runden Sie den Bereich auf die nächste ganze Zahl.

**Antworten**

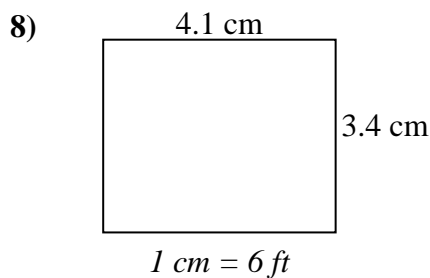
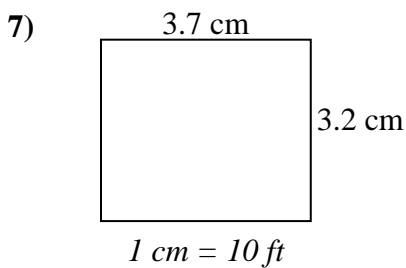
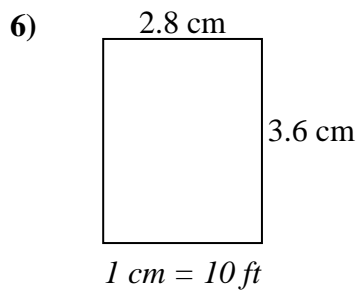
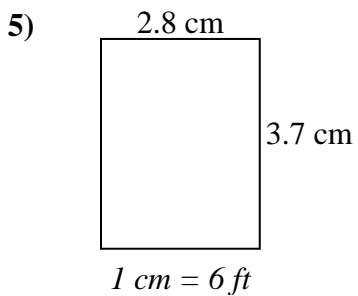
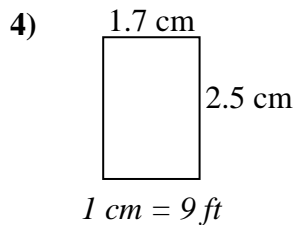
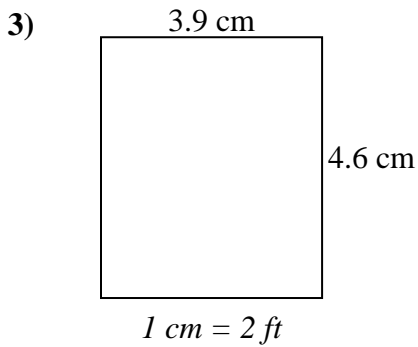
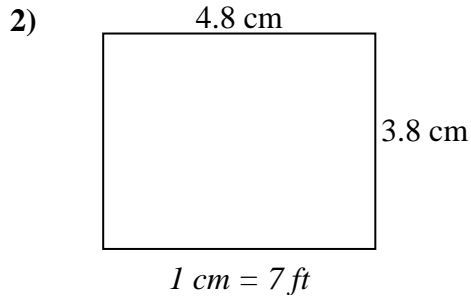
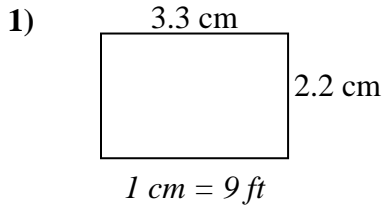
1.	<u>20.7</u>	<u>33.3</u>	<u>689</u>
2.	<u>36</u>	<u>39.6</u>	<u>1.426</u>
3.	<u>24</u>	<u>43</u>	<u>1.032</u>
4.	<u>11.7</u>	<u>12.6</u>	<u>147</u>
5.	<u>24</u>	<u>38.4</u>	<u>922</u>
6.	<u>19.6</u>	<u>31.5</u>	<u>617</u>
7.	<u>23</u>	<u>15</u>	<u>345</u>
8.	<u>16.5</u>	<u>24</u>	<u>396</u>



Bestimmen Sie die tatsächliche Breite, Höhe und Fläche jedes Maßstabsrechtecks.

Runden Sie den Bereich auf die nächste ganze Zahl.

Antworten

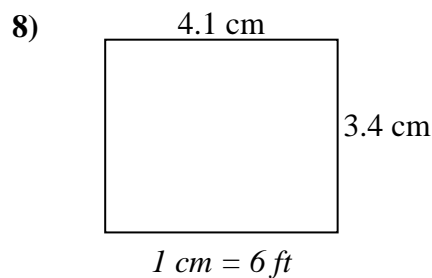
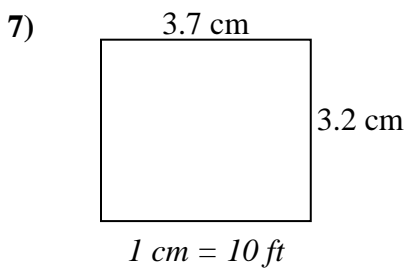
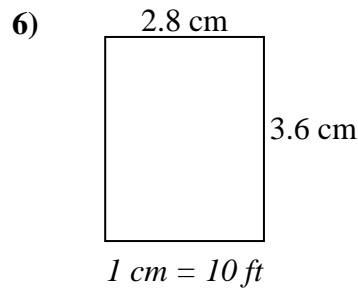
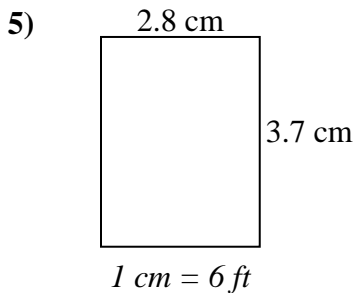
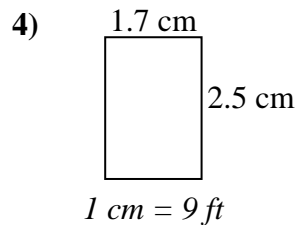
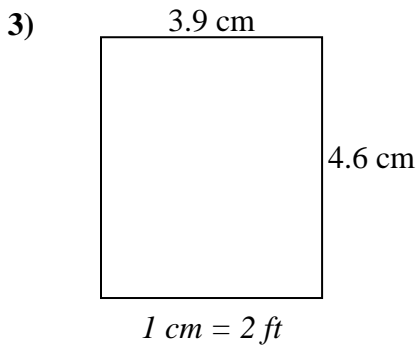
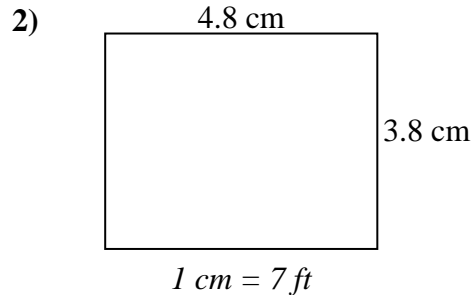
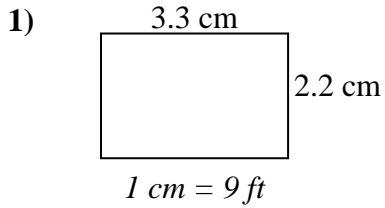


1. _____
2. _____
3. _____
4. _____
5. _____
6. _____
7. _____
8. _____



Bestimmen Sie die tatsächliche Breite, Höhe und Fläche jedes Maßstabsrechtecks.

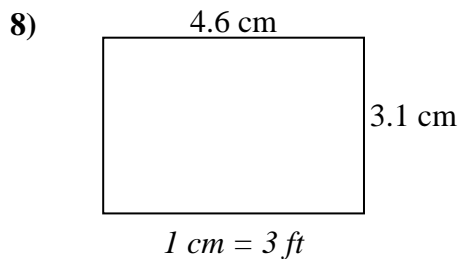
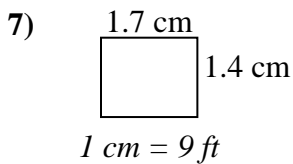
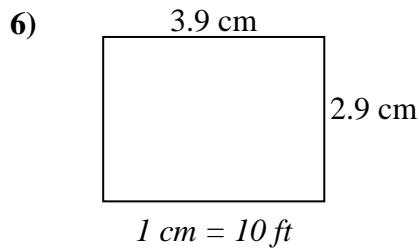
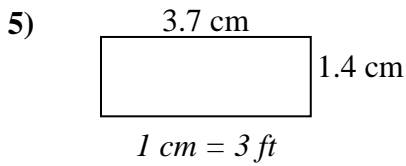
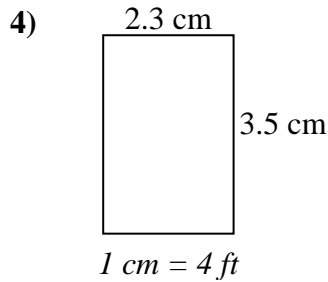
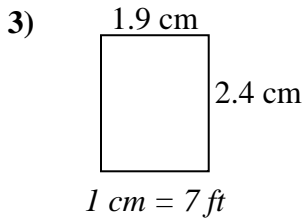
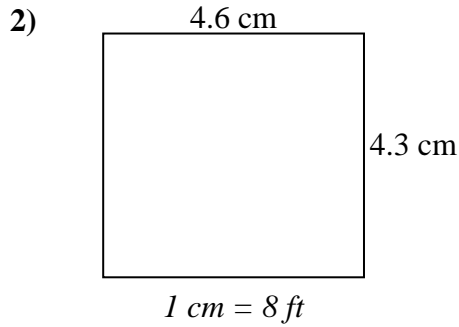
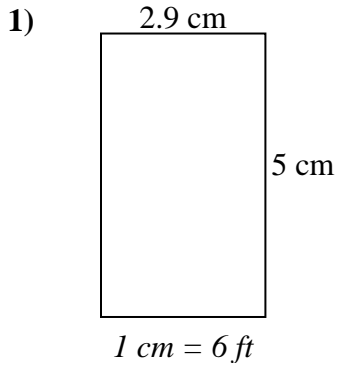
Runden Sie den Bereich auf die nächste ganze Zahl.

**Antworten**

1.	<u>29.7</u>	<u>19.8</u>	<u>588</u>
2.	<u>33.6</u>	<u>26.6</u>	<u>894</u>
3.	<u>7.8</u>	<u>9.2</u>	<u>72</u>
4.	<u>15.3</u>	<u>22.5</u>	<u>344</u>
5.	<u>16.8</u>	<u>22.2</u>	<u>373</u>
6.	<u>28</u>	<u>36</u>	<u>1.008</u>
7.	<u>37</u>	<u>32</u>	<u>1.184</u>
8.	<u>24.6</u>	<u>20.4</u>	<u>502</u>



Bestimmen Sie die tatsächliche Breite, Höhe und Fläche jedes Maßstabsrechtecks.
Runden Sie den Bereich auf die nächste ganze Zahl.



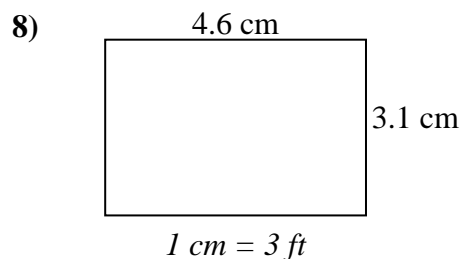
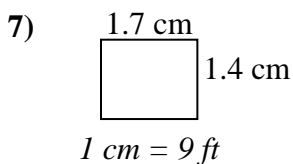
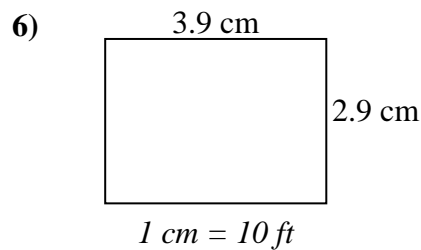
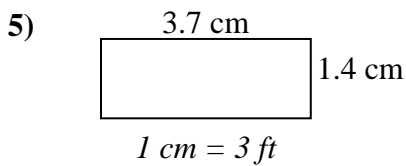
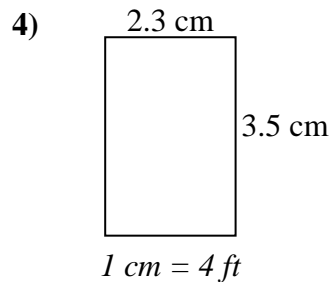
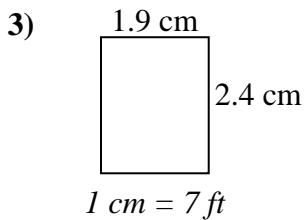
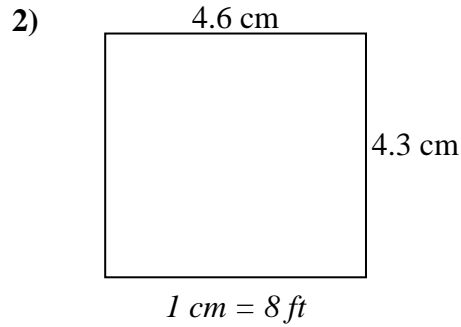
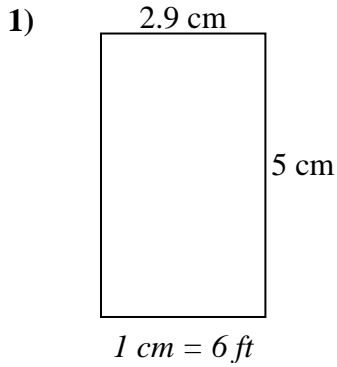
Antworten

1. _____
2. _____
3. _____
4. _____
5. _____
6. _____
7. _____
8. _____



Bestimmen Sie die tatsächliche Breite, Höhe und Fläche jedes Maßstabsrechtecks.

Runden Sie den Bereich auf die nächste ganze Zahl.

**Antworten**

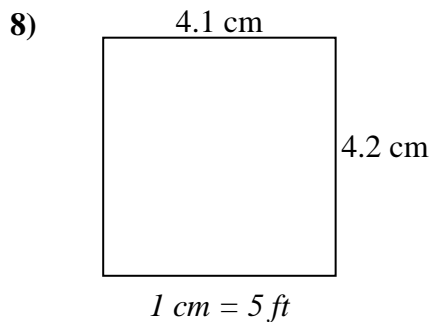
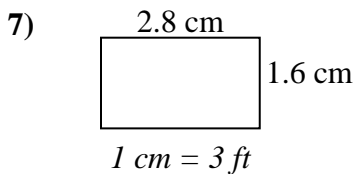
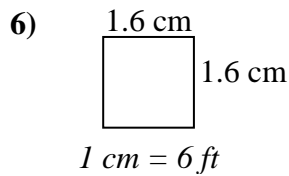
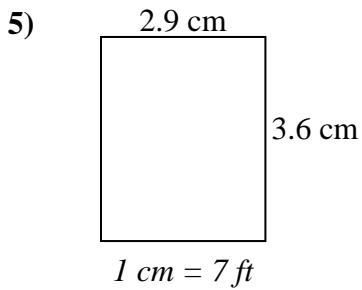
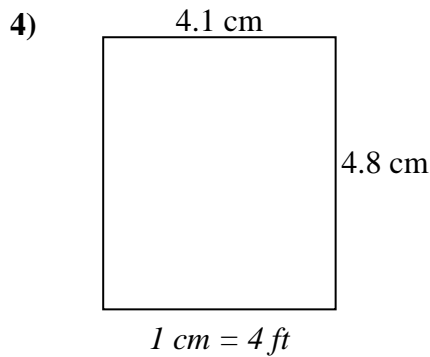
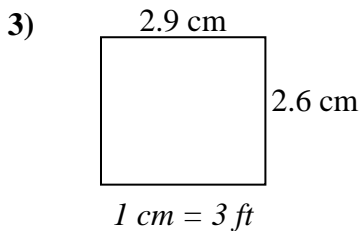
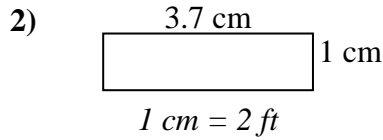
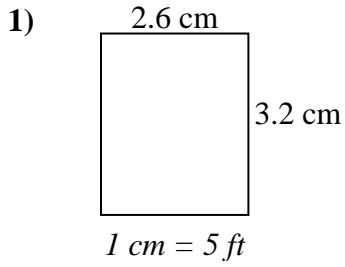
1.	<u>17.4</u>	<u>30</u>	<u>522</u>
2.	<u>36.8</u>	<u>34.4</u>	<u>1.266</u>
3.	<u>13.3</u>	<u>16.8</u>	<u>223</u>
4.	<u>9.2</u>	<u>14</u>	<u>129</u>
5.	<u>11.1</u>	<u>4.2</u>	<u>47</u>
6.	<u>39</u>	<u>29</u>	<u>1.131</u>
7.	<u>15.3</u>	<u>12.6</u>	<u>193</u>
8.	<u>13.8</u>	<u>9.3</u>	<u>128</u>



Bestimmen Sie die tatsächliche Breite, Höhe und Fläche jedes Maßstabsrechtecks.

Runden Sie den Bereich auf die nächste ganze Zahl.

Antworten

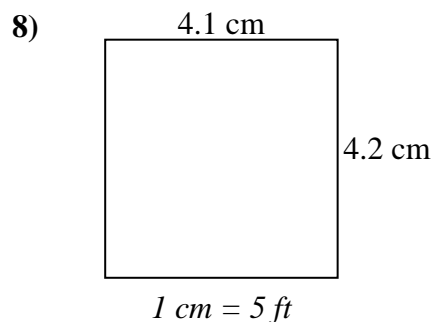
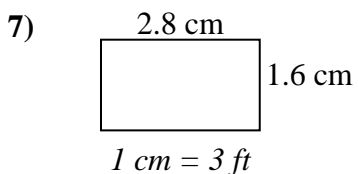
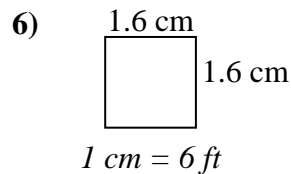
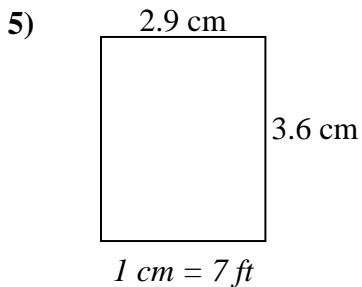
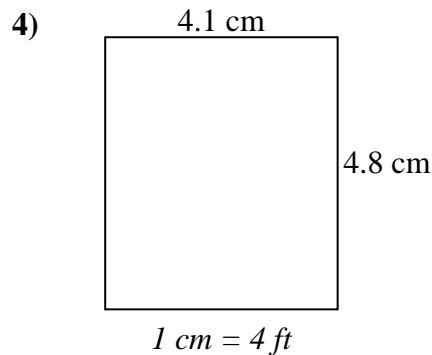
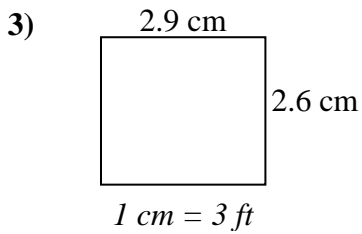
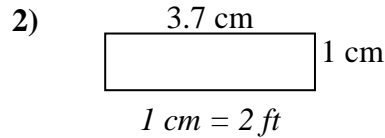
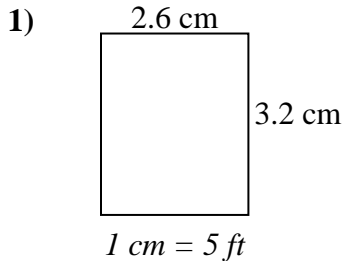


1. _____
2. _____
3. _____
4. _____
5. _____
6. _____
7. _____
8. _____



Bestimmen Sie die tatsächliche Breite, Höhe und Fläche jedes Maßstabsrechtecks.

Runden Sie den Bereich auf die nächste ganze Zahl.

**Antworten**

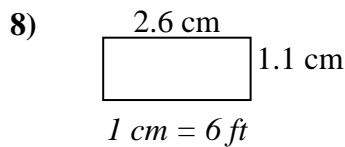
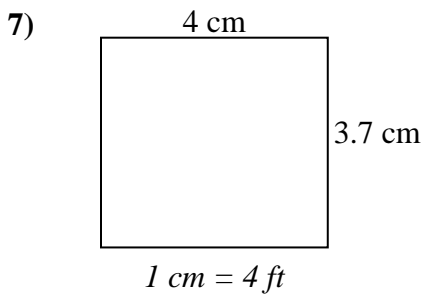
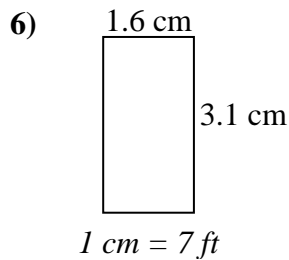
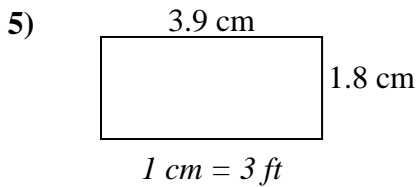
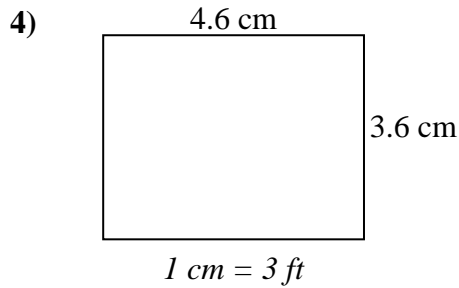
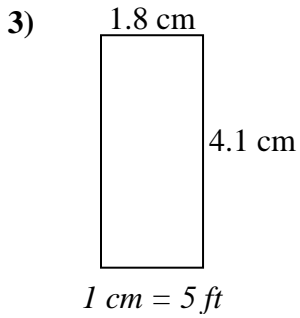
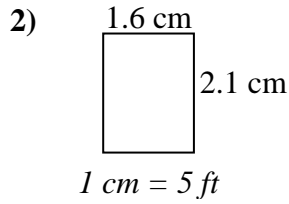
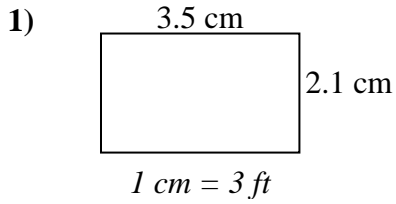
1.	<u>13</u>	<u>16</u>	<u>208</u>
2.	<u>7.4</u>	<u>2</u>	<u>15</u>
3.	<u>8.7</u>	<u>7.8</u>	<u>68</u>
4.	<u>16.4</u>	<u>19.2</u>	<u>315</u>
5.	<u>20.3</u>	<u>25.2</u>	<u>512</u>
6.	<u>9.6</u>	<u>9.6</u>	<u>92</u>
7.	<u>8.4</u>	<u>4.8</u>	<u>40</u>
8.	<u>20.5</u>	<u>21</u>	<u>431</u>



Bestimmen Sie die tatsächliche Breite, Höhe und Fläche jedes Maßstabsrechtecks.

Runden Sie den Bereich auf die nächste ganze Zahl.

Antworten

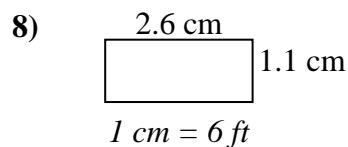
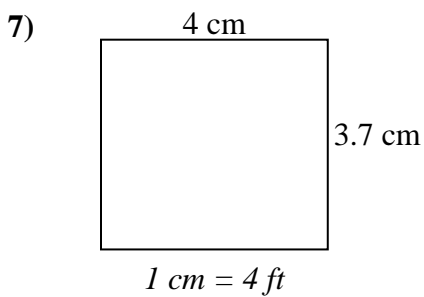
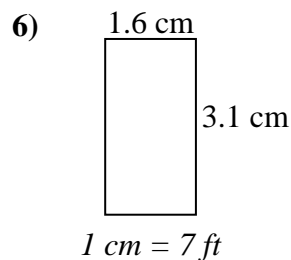
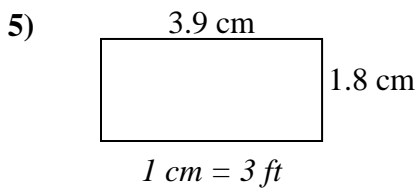
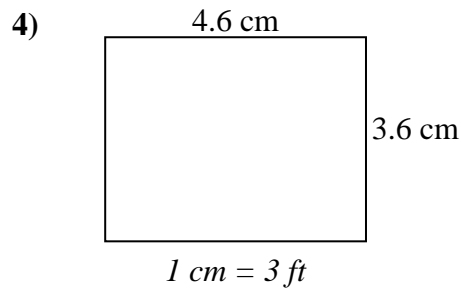
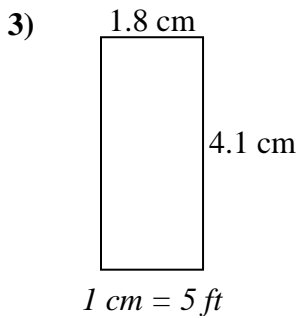
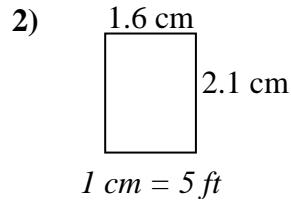
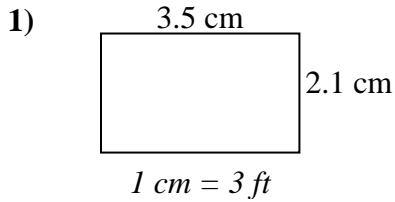


1. _____
2. _____
3. _____
4. _____
5. _____
6. _____
7. _____
8. _____



Bestimmen Sie die tatsächliche Breite, Höhe und Fläche jedes Maßstabsrechtecks.

Runden Sie den Bereich auf die nächste ganze Zahl.

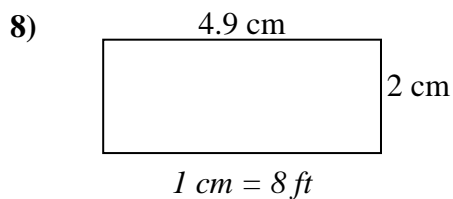
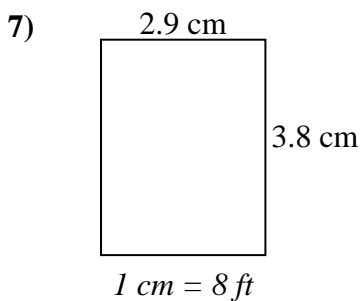
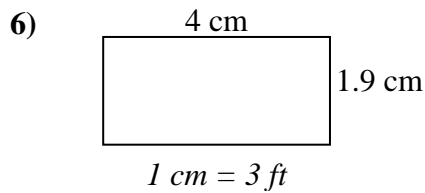
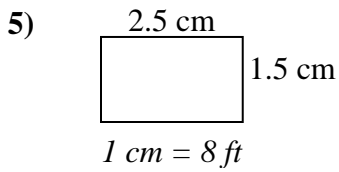
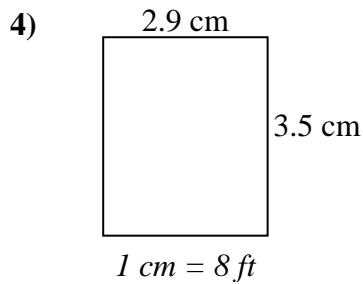
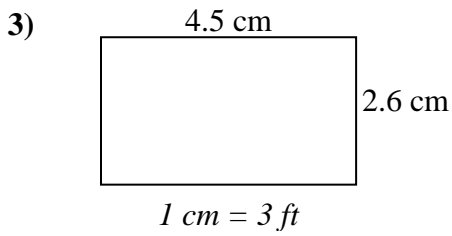
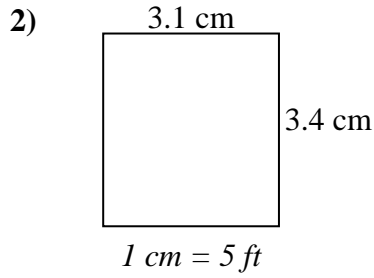
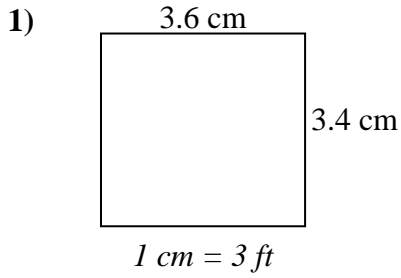
**Antworten**

1.	<u>10.5</u>	<u>6.3</u>	<u>66</u>
2.	<u>8</u>	<u>10.5</u>	<u>84</u>
3.	<u>9</u>	<u>20.5</u>	<u>185</u>
4.	<u>13.8</u>	<u>10.8</u>	<u>149</u>
5.	<u>11.7</u>	<u>5.4</u>	<u>63</u>
6.	<u>11.2</u>	<u>21.7</u>	<u>243</u>
7.	<u>16</u>	<u>14.8</u>	<u>237</u>
8.	<u>15.6</u>	<u>6.6</u>	<u>103</u>



Bestimmen Sie die tatsächliche Breite, Höhe und Fläche jedes Maßstabsrechtecks.
Runden Sie den Bereich auf die nächste ganze Zahl.

Antworten

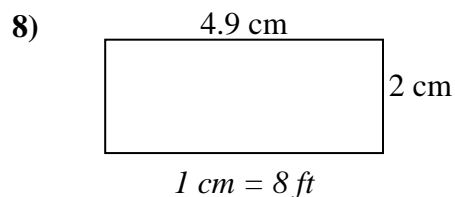
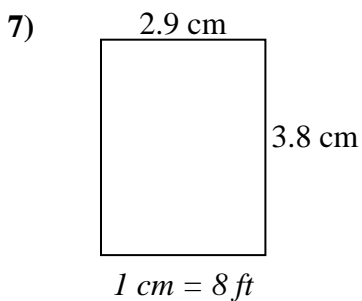
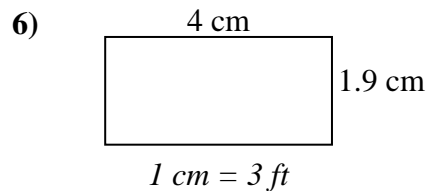
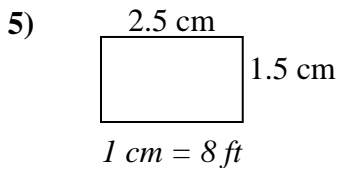
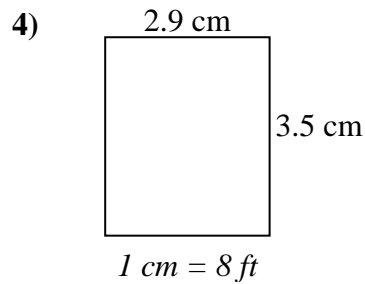
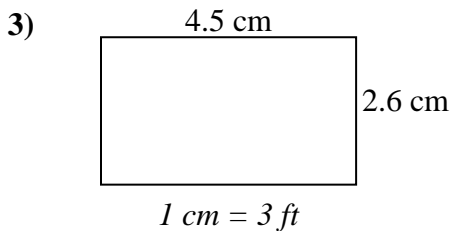
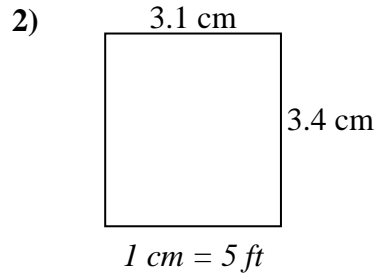
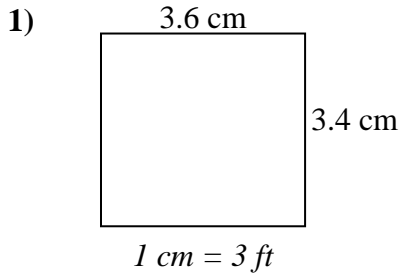


1. _____
2. _____
3. _____
4. _____
5. _____
6. _____
7. _____
8. _____



Bestimmen Sie die tatsächliche Breite, Höhe und Fläche jedes Maßstabsrechtecks.

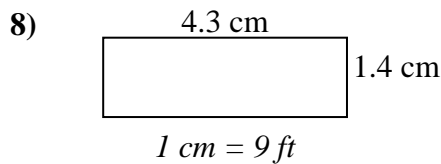
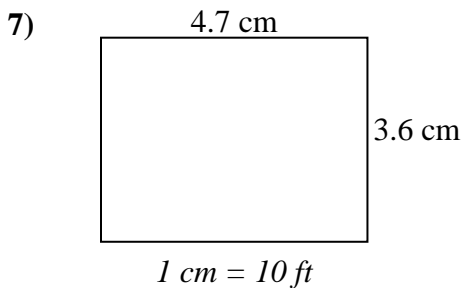
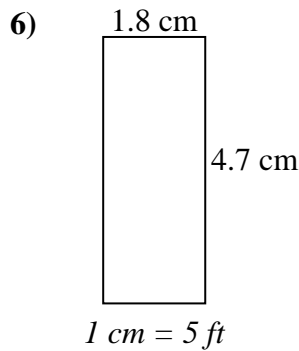
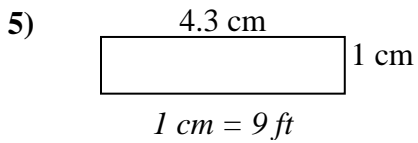
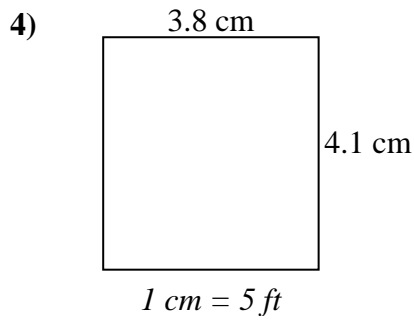
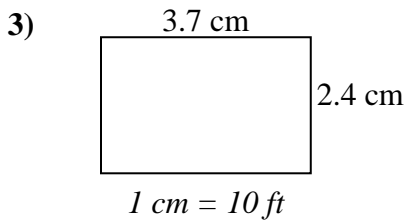
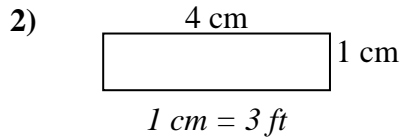
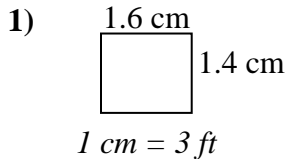
Runden Sie den Bereich auf die nächste ganze Zahl.

**Antworten**

1.	<u>10.8</u>	<u>10.2</u>	<u>110</u>
2.	<u>15.5</u>	<u>17</u>	<u>264</u>
3.	<u>13.5</u>	<u>7.8</u>	<u>105</u>
4.	<u>23.2</u>	<u>28</u>	<u>650</u>
5.	<u>20</u>	<u>12</u>	<u>240</u>
6.	<u>12</u>	<u>5.7</u>	<u>68</u>
7.	<u>23.2</u>	<u>30.4</u>	<u>705</u>
8.	<u>39.2</u>	<u>16</u>	<u>627</u>



**Bestimmen Sie die tatsächliche Breite, Höhe und Fläche jedes Maßstabsrechtecks.
Runden Sie den Bereich auf die nächste ganze Zahl.**



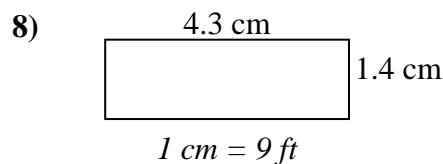
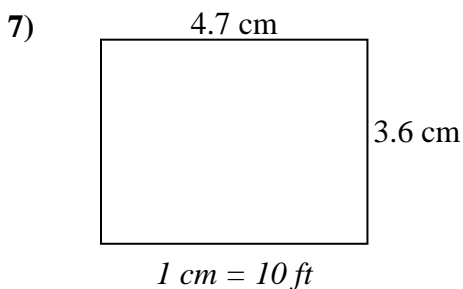
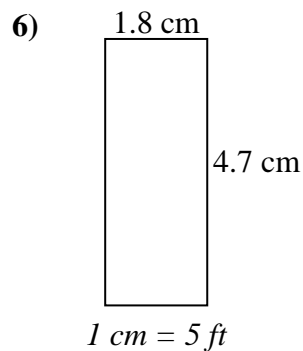
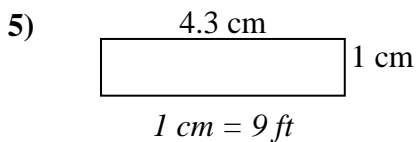
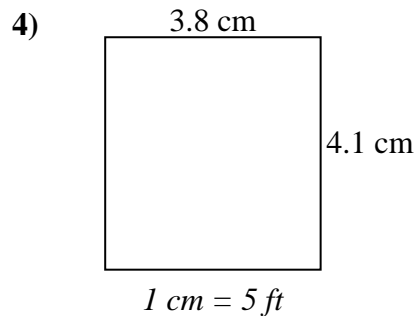
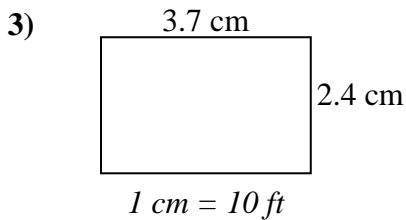
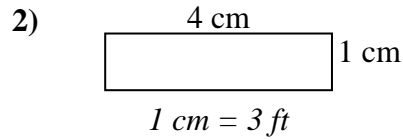
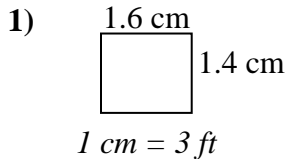
Antworten

1. _____
2. _____
3. _____
4. _____
5. _____
6. _____
7. _____
8. _____



Bestimmen Sie die tatsächliche Breite, Höhe und Fläche jedes Maßstabsrechtecks.

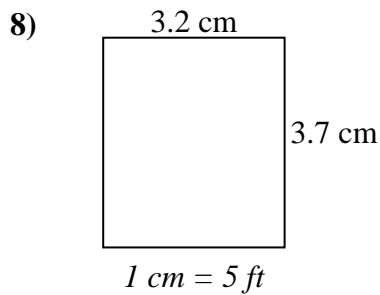
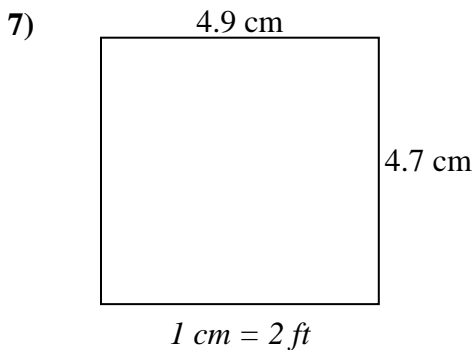
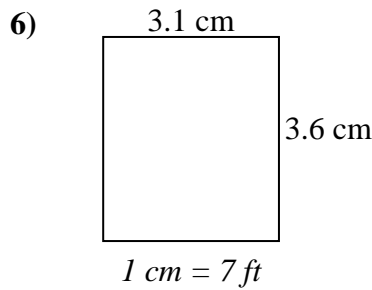
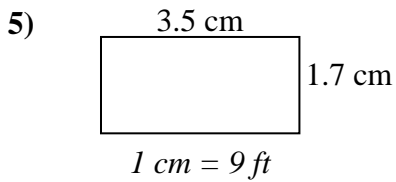
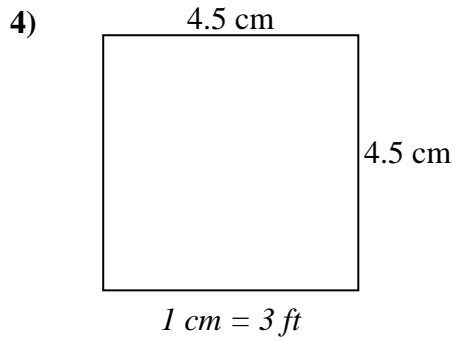
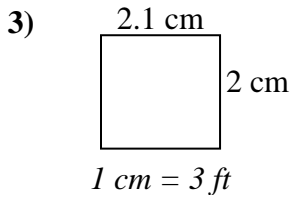
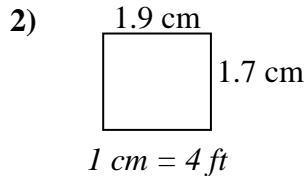
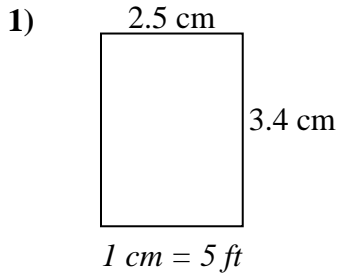
Runden Sie den Bereich auf die nächste ganze Zahl.

**Antworten**

1.	<u>4.8</u>	<u>4.2</u>	<u>20</u>
2.	<u>12</u>	<u>3</u>	<u>36</u>
3.	<u>37</u>	<u>24</u>	<u>888</u>
4.	<u>19</u>	<u>20.5</u>	<u>390</u>
5.	<u>38.7</u>	<u>9</u>	<u>348</u>
6.	<u>9</u>	<u>23.5</u>	<u>212</u>
7.	<u>47</u>	<u>36</u>	<u>1.692</u>
8.	<u>38.7</u>	<u>12.6</u>	<u>488</u>



Bestimmen Sie die tatsächliche Breite, Höhe und Fläche jedes Maßstabsrechtecks.
Runden Sie den Bereich auf die nächste ganze Zahl.



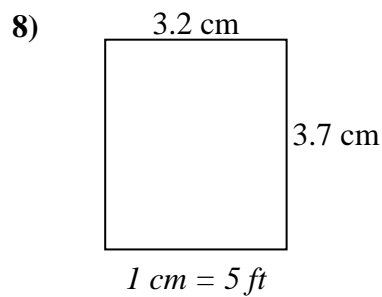
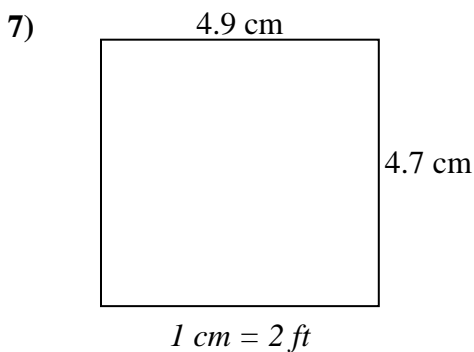
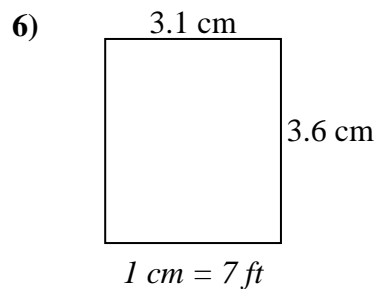
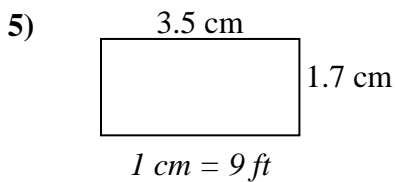
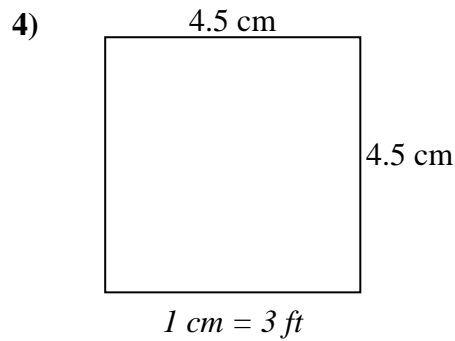
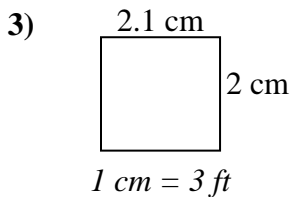
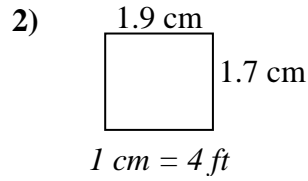
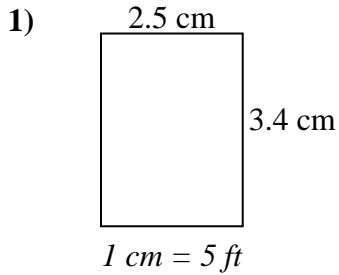
Antworten

1. _____
2. _____
3. _____
4. _____
5. _____
6. _____
7. _____
8. _____



Bestimmen Sie die tatsächliche Breite, Höhe und Fläche jedes Maßstabsrechtecks.

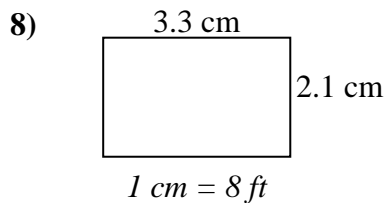
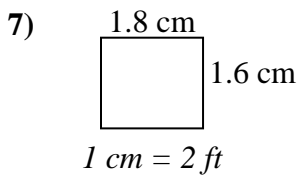
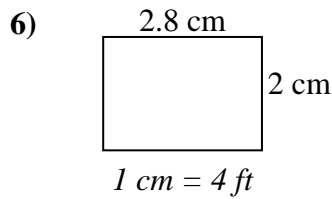
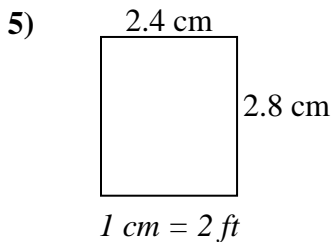
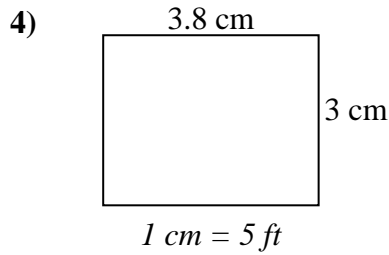
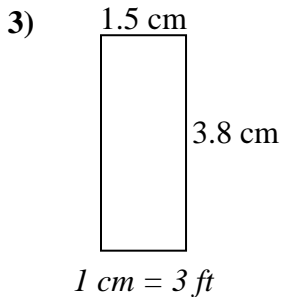
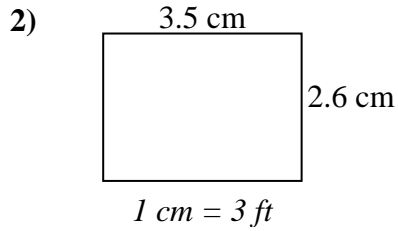
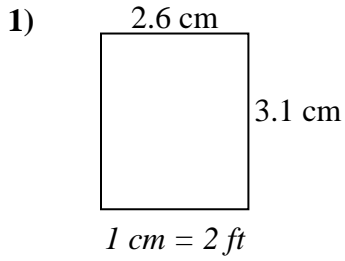
Runden Sie den Bereich auf die nächste ganze Zahl.

**Antworten**

1.	<u>12.5</u>	<u>17</u>	<u>213</u>
2.	<u>7.6</u>	<u>6.8</u>	<u>52</u>
3.	<u>6.3</u>	<u>6</u>	<u>38</u>
4.	<u>13.5</u>	<u>13.5</u>	<u>182</u>
5.	<u>31.5</u>	<u>15.3</u>	<u>482</u>
6.	<u>21.7</u>	<u>25.2</u>	<u>547</u>
7.	<u>9.8</u>	<u>9.4</u>	<u>92</u>
8.	<u>16</u>	<u>18.5</u>	<u>296</u>



**Bestimmen Sie die tatsächliche Breite, Höhe und Fläche jedes Maßstabsrechtecks.
Runden Sie den Bereich auf die nächste ganze Zahl.**



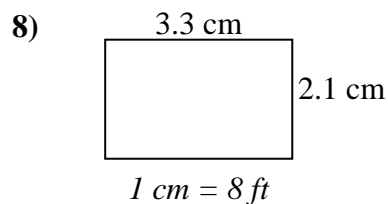
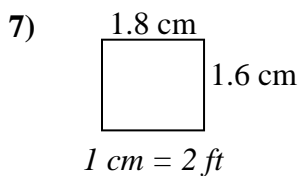
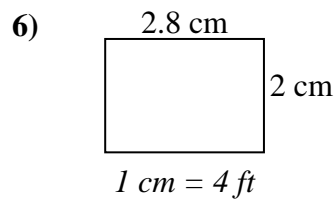
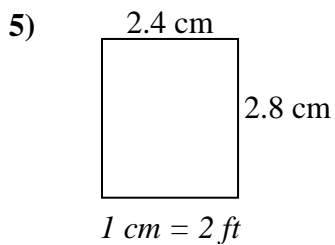
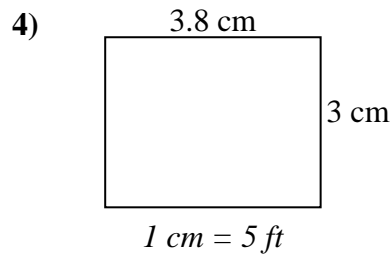
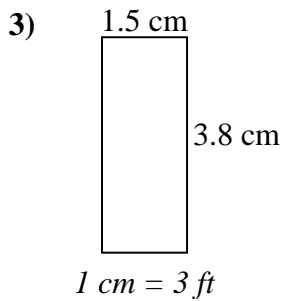
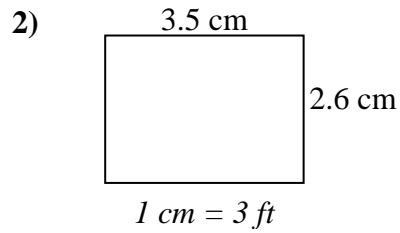
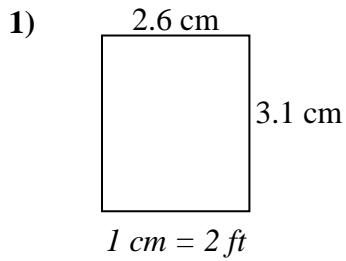
Antworten

1. _____
2. _____
3. _____
4. _____
5. _____
6. _____
7. _____
8. _____



Bestimmen Sie die tatsächliche Breite, Höhe und Fläche jedes Maßstabsrechtecks.

Runden Sie den Bereich auf die nächste ganze Zahl.

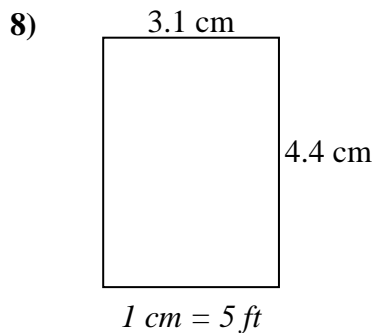
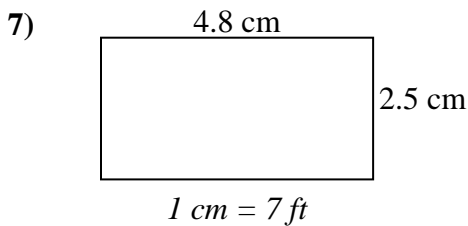
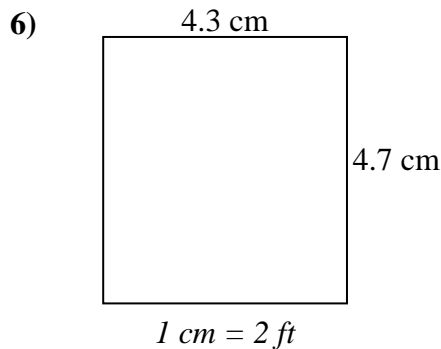
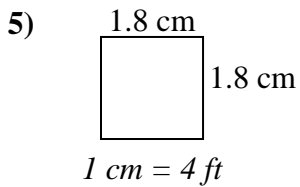
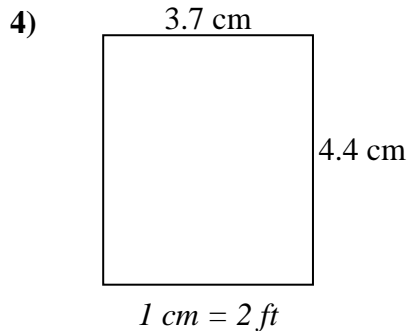
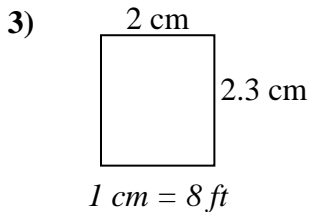
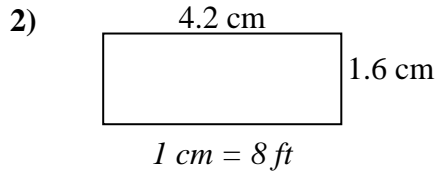
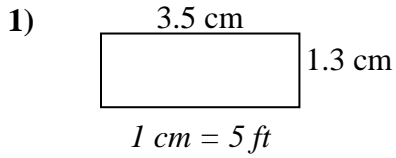
**Antworten**

1.	<u>5.2</u>	<u>6.2</u>	<u>32</u>
2.	<u>10.5</u>	<u>7.8</u>	<u>82</u>
3.	<u>4.5</u>	<u>11.4</u>	<u>51</u>
4.	<u>19</u>	<u>15</u>	<u>285</u>
5.	<u>4.8</u>	<u>5.6</u>	<u>27</u>
6.	<u>11.2</u>	<u>8</u>	<u>90</u>
7.	<u>3.6</u>	<u>3.2</u>	<u>12</u>
8.	<u>26.4</u>	<u>16.8</u>	<u>444</u>



Bestimmen Sie die tatsächliche Breite, Höhe und Fläche jedes Maßstabsrechtecks.

Runden Sie den Bereich auf die nächste ganze Zahl.



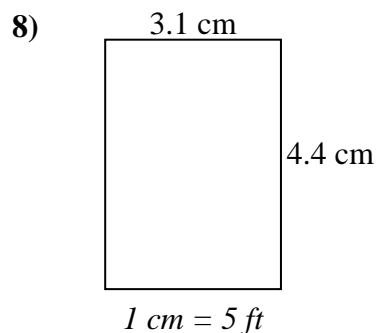
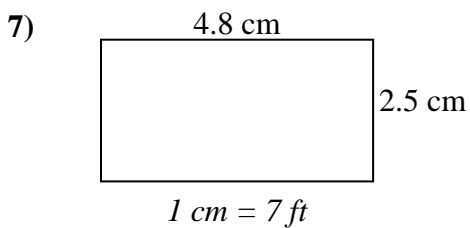
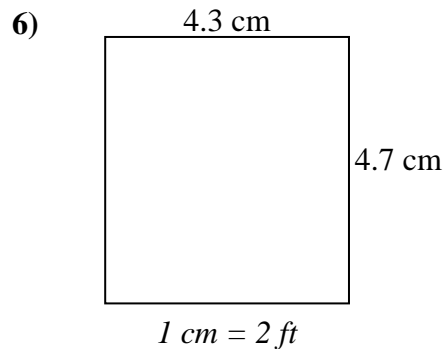
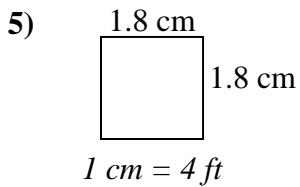
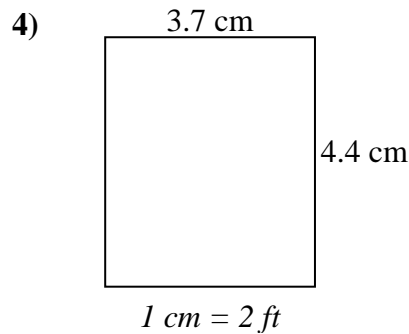
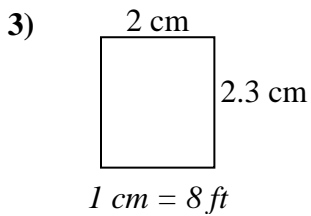
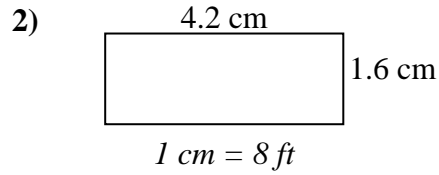
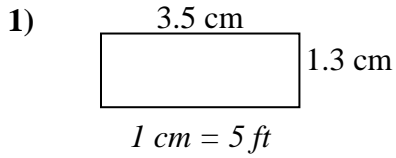
Antworten

1. _____
2. _____
3. _____
4. _____
5. _____
6. _____
7. _____
8. _____



Bestimmen Sie die tatsächliche Breite, Höhe und Fläche jedes Maßstabsrechtecks.

Runden Sie den Bereich auf die nächste ganze Zahl.

**Antworten**

1.	<u>17.5</u>	<u>6.5</u>	<u>114</u>
2.	<u>33.6</u>	<u>12.8</u>	<u>430</u>
3.	<u>16</u>	<u>18.4</u>	<u>294</u>
4.	<u>7.4</u>	<u>8.8</u>	<u>65</u>
5.	<u>7.2</u>	<u>7.2</u>	<u>52</u>
6.	<u>8.6</u>	<u>9.4</u>	<u>81</u>
7.	<u>33.6</u>	<u>17.5</u>	<u>588</u>
8.	<u>15.5</u>	<u>22</u>	<u>341</u>