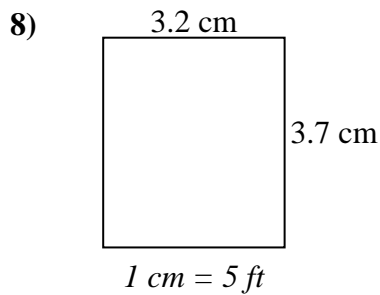
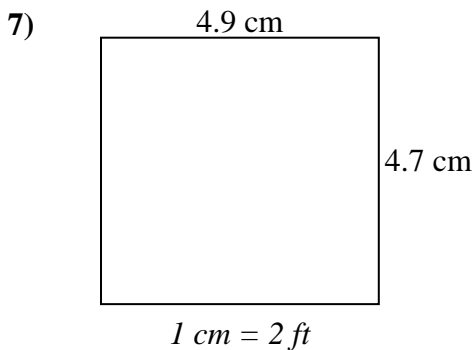
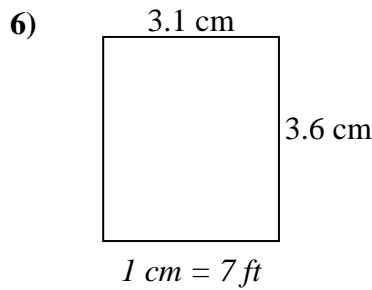
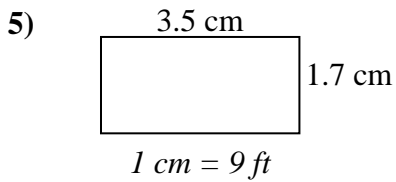
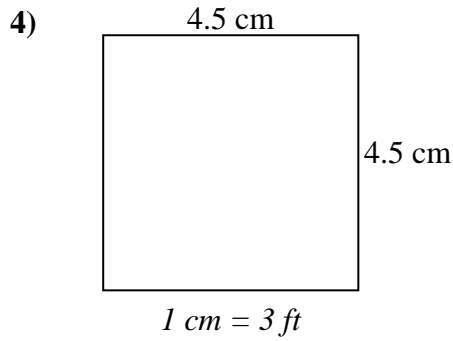
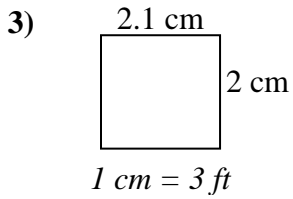
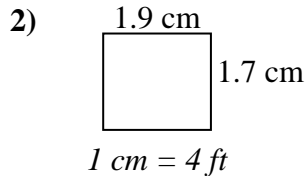
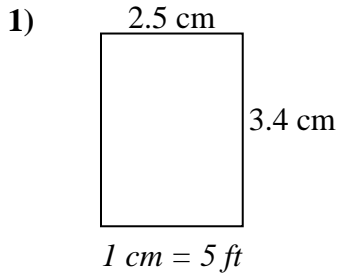




Bestimmen Sie die tatsächliche Breite, Höhe und Fläche jedes Maßstabsrechtecks.

Runden Sie den Bereich auf die nächste ganze Zahl.

Antworten



1. _____

2. _____

3. _____

4. _____

5. _____

6. _____

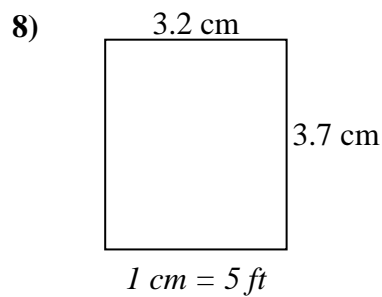
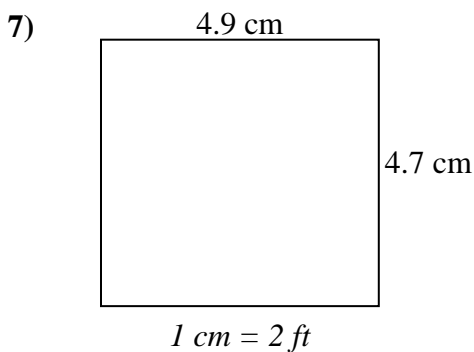
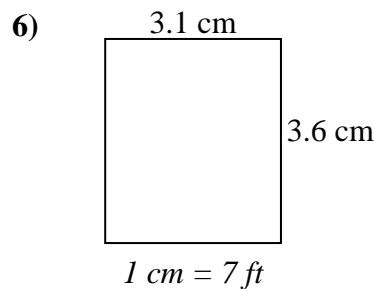
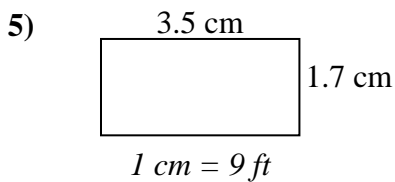
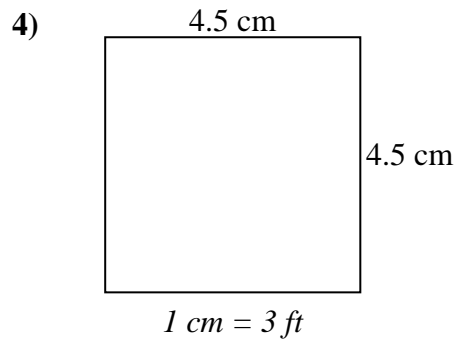
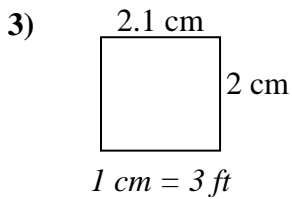
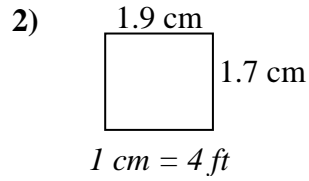
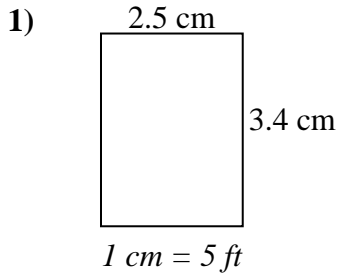
7. _____

8. _____



Bestimmen Sie die tatsächliche Breite, Höhe und Fläche jedes Maßstabsrechtecks.

Runden Sie den Bereich auf die nächste ganze Zahl.

**Antworten**

1.	<u>12.5</u>	<u>17</u>	<u>213</u>
2.	<u>7.6</u>	<u>6.8</u>	<u>52</u>
3.	<u>6.3</u>	<u>6</u>	<u>38</u>
4.	<u>13.5</u>	<u>13.5</u>	<u>182</u>
5.	<u>31.5</u>	<u>15.3</u>	<u>482</u>
6.	<u>21.7</u>	<u>25.2</u>	<u>547</u>
7.	<u>9.8</u>	<u>9.4</u>	<u>92</u>
8.	<u>16</u>	<u>18.5</u>	<u>296</u>