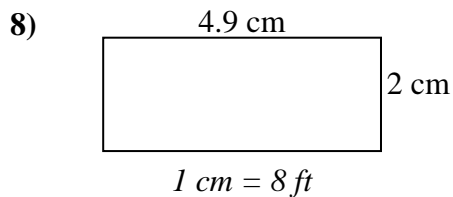
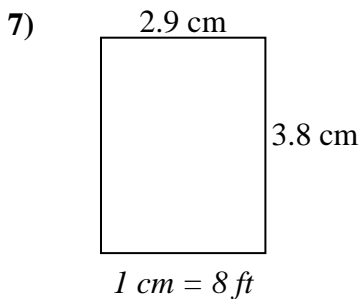
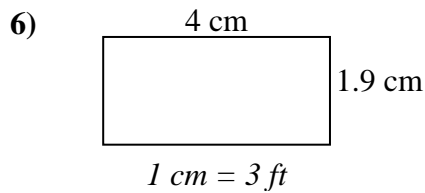
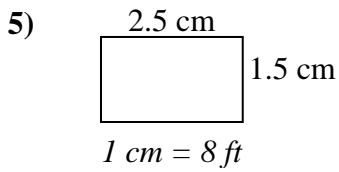
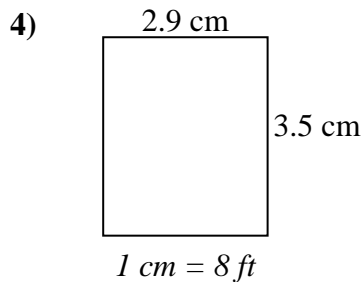
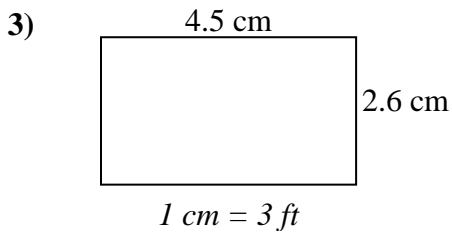
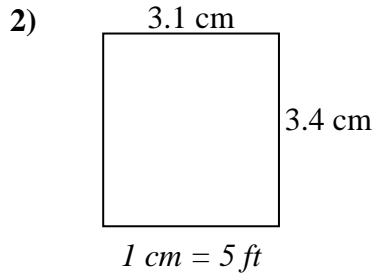
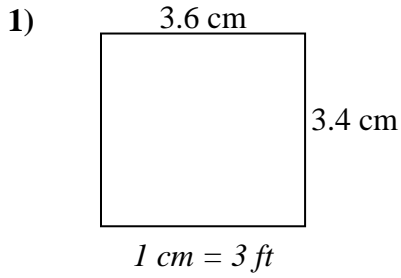




Bestimmen Sie die tatsächliche Breite, Höhe und Fläche jedes Maßstabsrechtecks.

Runden Sie den Bereich auf die nächste ganze Zahl.



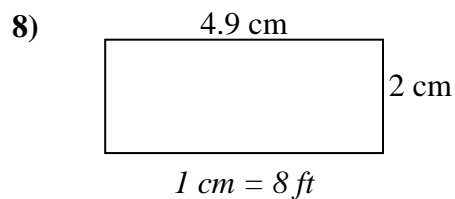
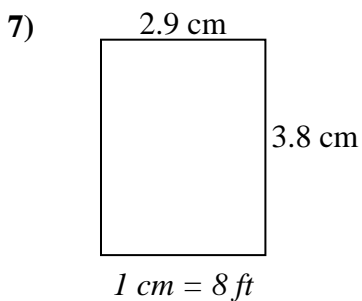
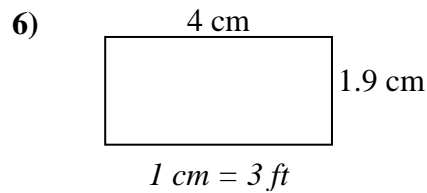
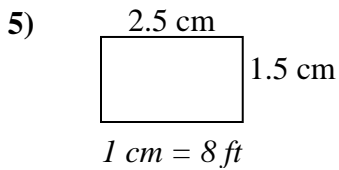
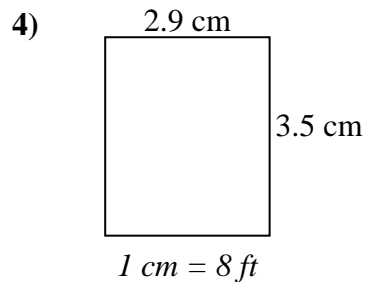
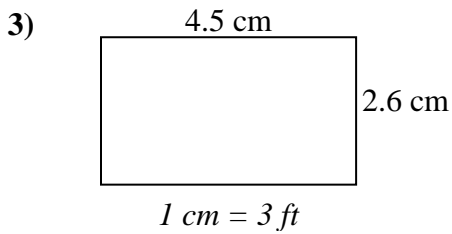
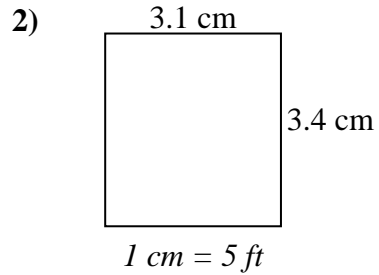
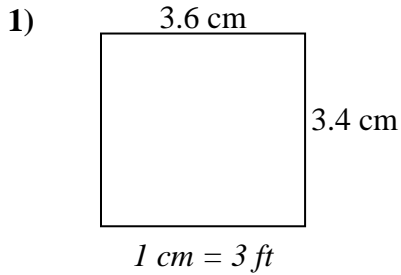
**Antworten**

1. \_\_\_\_\_
2. \_\_\_\_\_
3. \_\_\_\_\_
4. \_\_\_\_\_
5. \_\_\_\_\_
6. \_\_\_\_\_
7. \_\_\_\_\_
8. \_\_\_\_\_



Bestimmen Sie die tatsächliche Breite, Höhe und Fläche jedes Maßstabsrechtecks.

Runden Sie den Bereich auf die nächste ganze Zahl.

**Antworten**

1.	<u>10.8</u>	<u>10.2</u>	<u>110</u>
2.	<u>15.5</u>	<u>17</u>	<u>264</u>
3.	<u>13.5</u>	<u>7.8</u>	<u>105</u>
4.	<u>23.2</u>	<u>28</u>	<u>650</u>
5.	<u>20</u>	<u>12</u>	<u>240</u>
6.	<u>12</u>	<u>5.7</u>	<u>68</u>
7.	<u>23.2</u>	<u>30.4</u>	<u>705</u>
8.	<u>39.2</u>	<u>16</u>	<u>627</u>