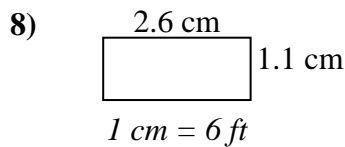
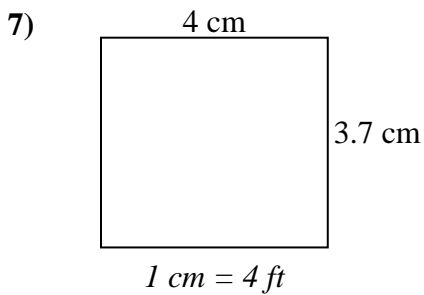
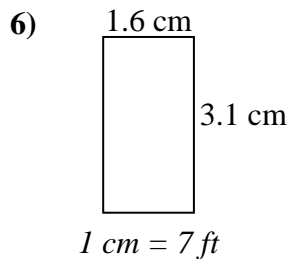
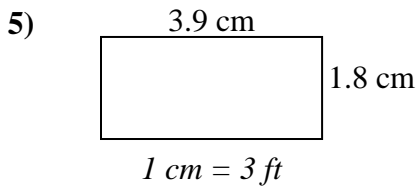
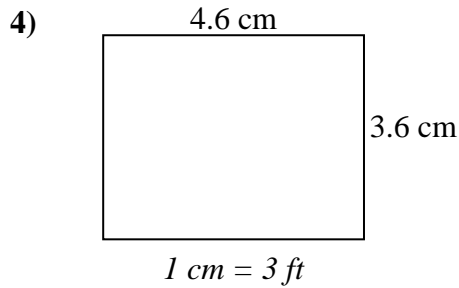
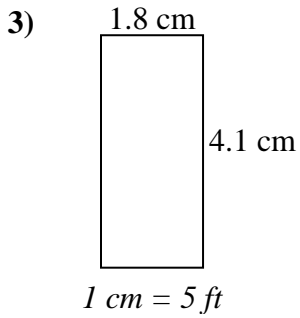
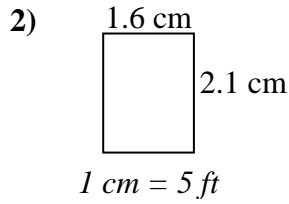
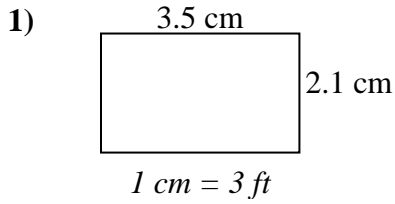




Bestimmen Sie die tatsächliche Breite, Höhe und Fläche jedes Maßstabsrechtecks.

Runden Sie den Bereich auf die nächste ganze Zahl.

**Antworten**

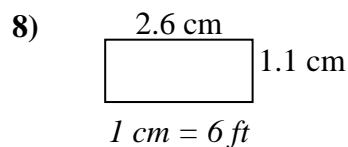
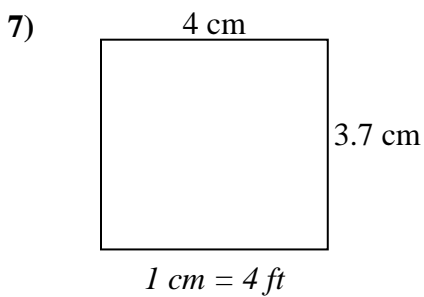
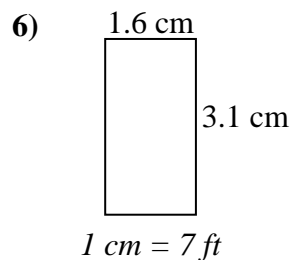
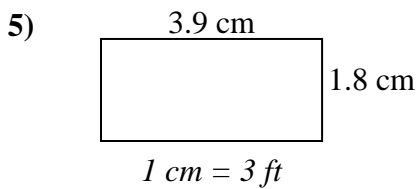
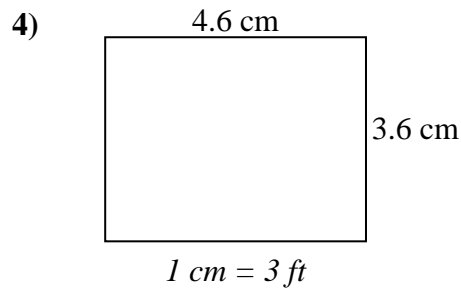
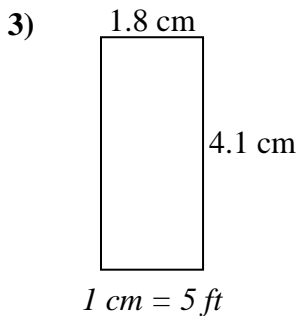
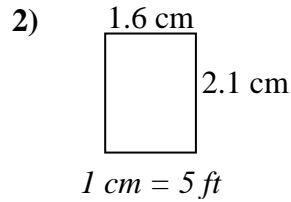
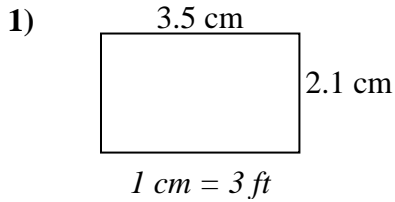


1. \_\_\_\_\_
2. \_\_\_\_\_
3. \_\_\_\_\_
4. \_\_\_\_\_
5. \_\_\_\_\_
6. \_\_\_\_\_
7. \_\_\_\_\_
8. \_\_\_\_\_



Bestimmen Sie die tatsächliche Breite, Höhe und Fläche jedes Maßstabsrechtecks.

Runden Sie den Bereich auf die nächste ganze Zahl.

**Antworten**

1.	<u>10.5</u>	<u>6.3</u>	<u>66</u>
2.	<u>8</u>	<u>10.5</u>	<u>84</u>
3.	<u>9</u>	<u>20.5</u>	<u>185</u>
4.	<u>13.8</u>	<u>10.8</u>	<u>149</u>
5.	<u>11.7</u>	<u>5.4</u>	<u>63</u>
6.	<u>11.2</u>	<u>21.7</u>	<u>243</u>
7.	<u>16</u>	<u>14.8</u>	<u>237</u>
8.	<u>15.6</u>	<u>6.6</u>	<u>103</u>