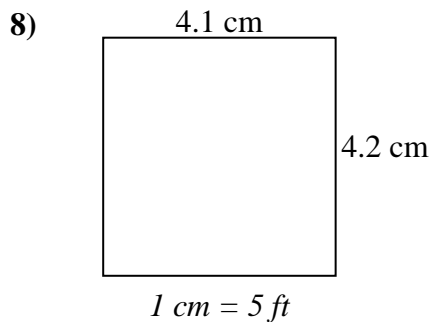
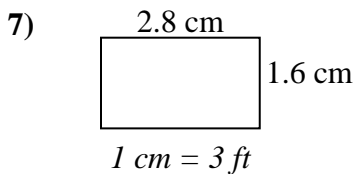
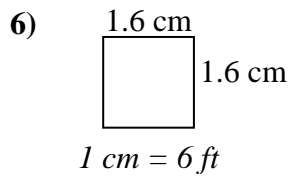
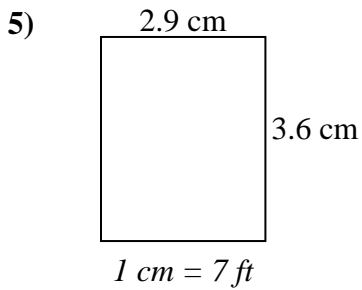
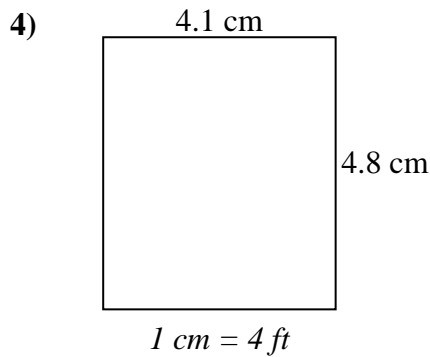
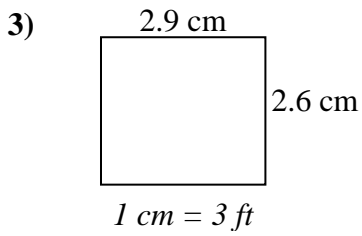
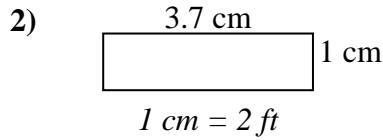
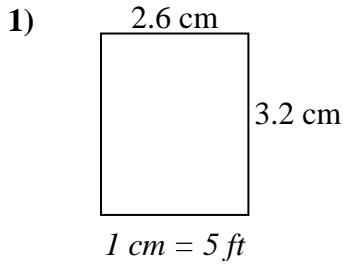




Bestimmen Sie die tatsächliche Breite, Höhe und Fläche jedes Maßstabsrechtecks.

Runden Sie den Bereich auf die nächste ganze Zahl.

Antworten

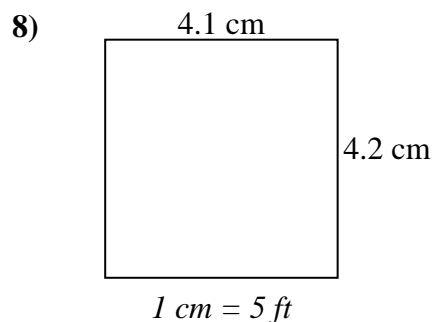
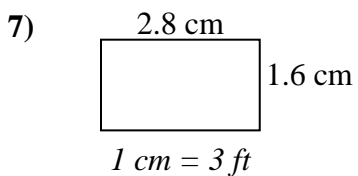
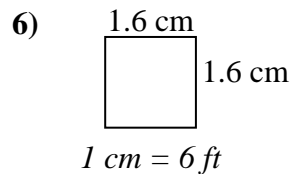
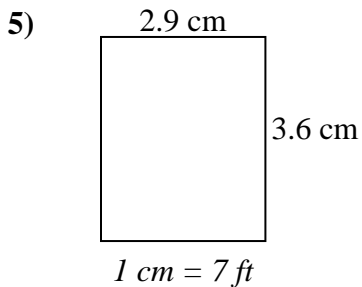
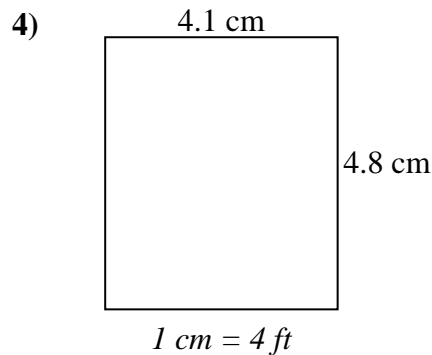
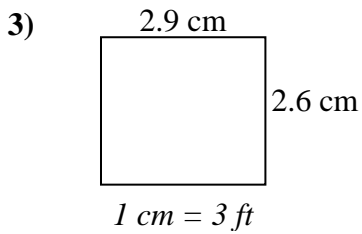
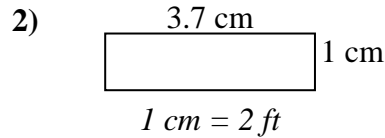
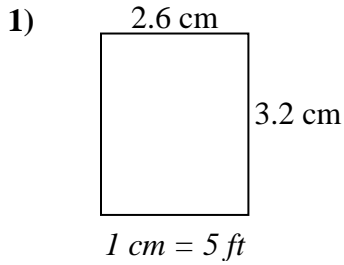


1. _____
2. _____
3. _____
4. _____
5. _____
6. _____
7. _____
8. _____



Bestimmen Sie die tatsächliche Breite, Höhe und Fläche jedes Maßstabsrechtecks.

Runden Sie den Bereich auf die nächste ganze Zahl.

**Antworten**

1. 13 16 208

2. 7.4 2 15

3. 8.7 7.8 68

4. 16.4 19.2 315

5. 20.3 25.2 512

6. 9.6 9.6 92

7. 8.4 4.8 40

8. 20.5 21 431