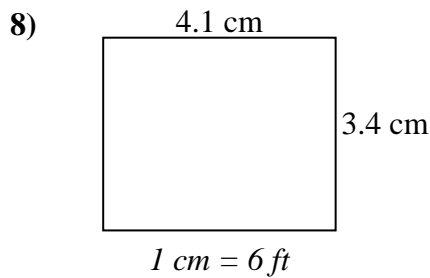
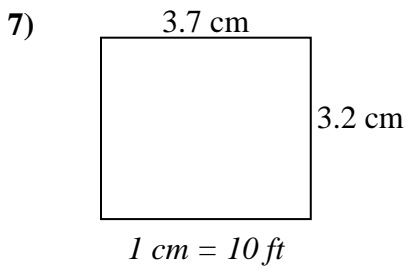
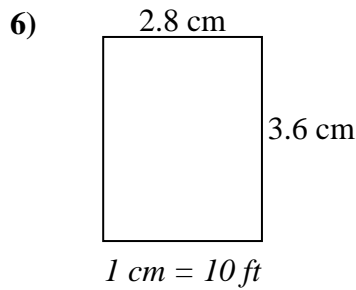
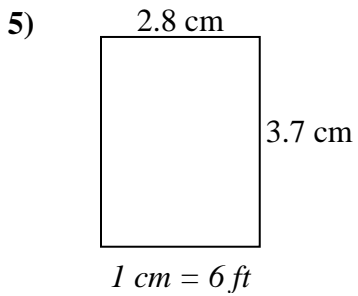
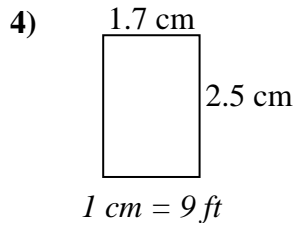
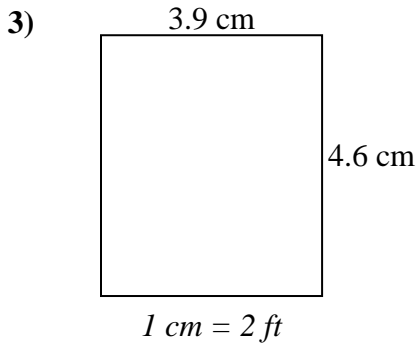
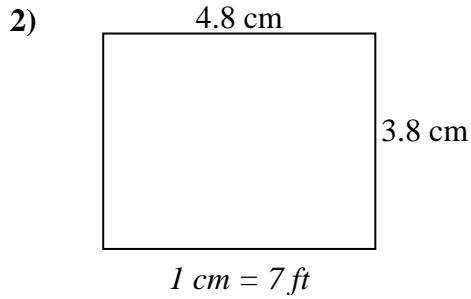
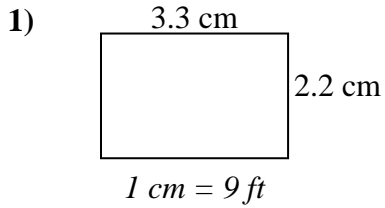




Bestimmen Sie die tatsächliche Breite, Höhe und Fläche jedes Maßstabsrechtecks.
Runden Sie den Bereich auf die nächste ganze Zahl.



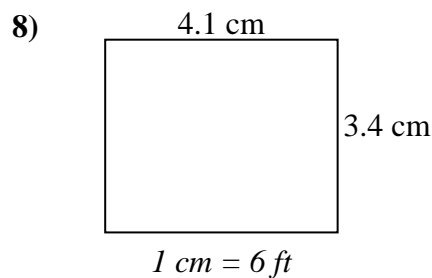
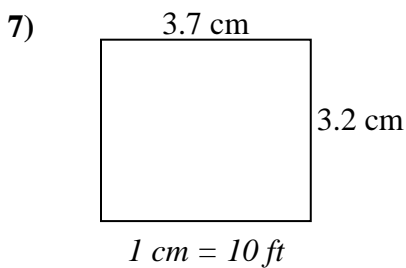
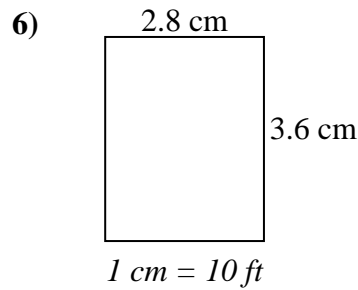
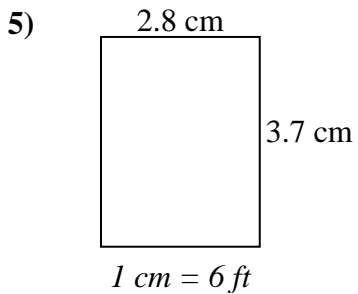
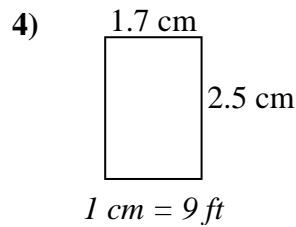
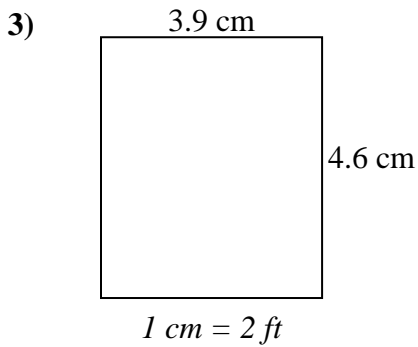
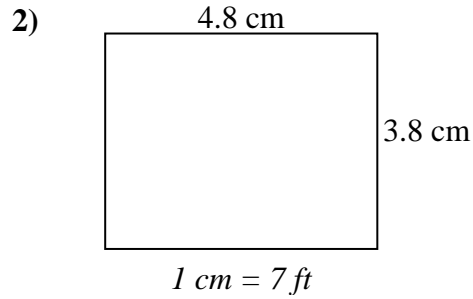
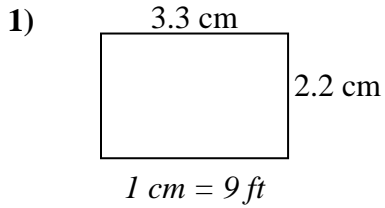
Antworten

1. _____
2. _____
3. _____
4. _____
5. _____
6. _____
7. _____
8. _____



Bestimmen Sie die tatsächliche Breite, Höhe und Fläche jedes Maßstabsrechtecks.

Runden Sie den Bereich auf die nächste ganze Zahl.

**Antworten**1. 29.7 19.8 5882. 33.6 26.6 8943. 7.8 9.2 724. 15.3 22.5 3445. 16.8 22.2 3736. 28 36 1.0087. 37 32 1.1848. 24.6 20.4 502