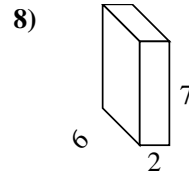
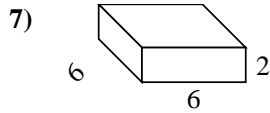
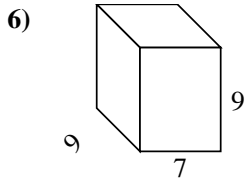
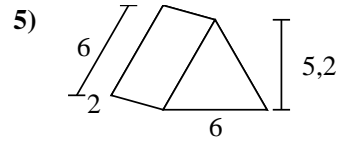
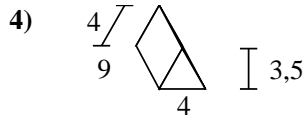
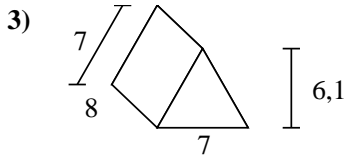
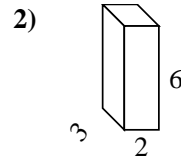
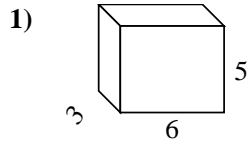
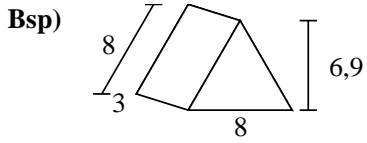




Berechne die Oberfläche jeder Figur.



Antworten

Bsp. **127,2 cm²**

1. _____

2. _____

3. _____

4. _____

5. _____

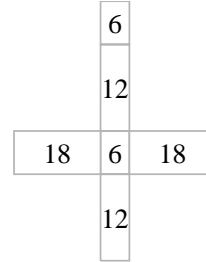
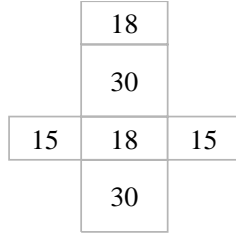
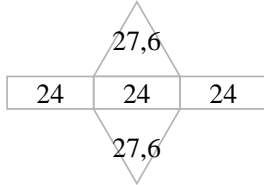
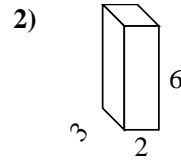
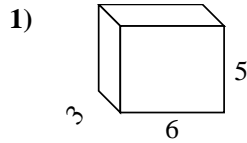
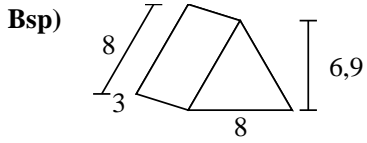
6. _____

7. _____

8. _____



Berechne die Oberfläche jeder Figur.



Antworten

Bsp. 127,2 cm²

1. 126 cm²

2. 72 cm²

3. 210,7 cm²

4. 122 cm²

5. 67,2 cm²

6. 414 cm²

7. 120 cm²

8. 136 cm²

