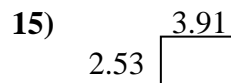
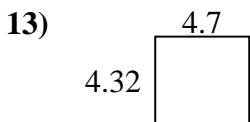
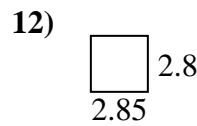
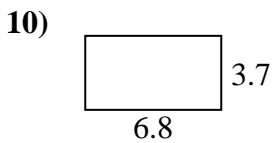
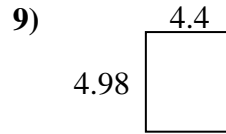
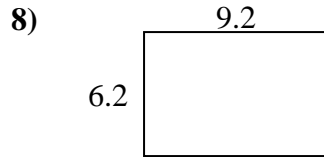
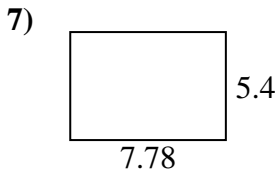
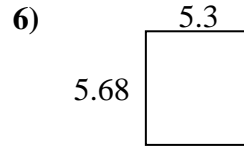
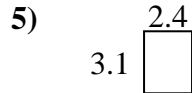
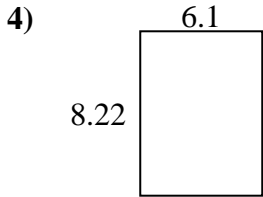
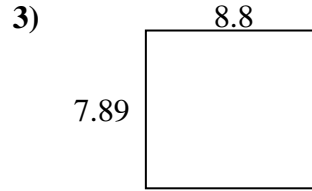
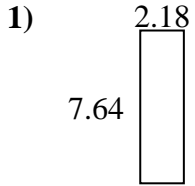




Finden Sie den Umfang und die Fläche jeder Figur. Antworten Sie auf das nächste Zehntel.

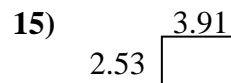
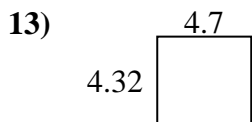
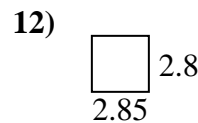
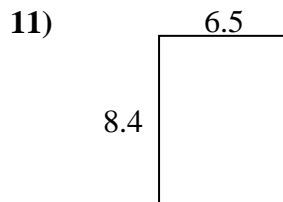
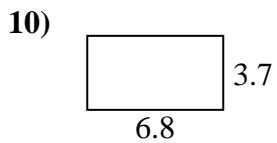
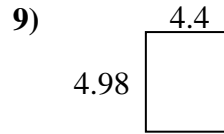
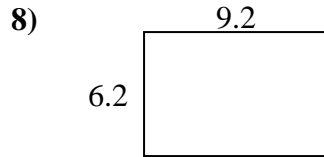
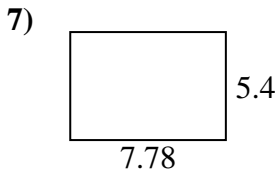
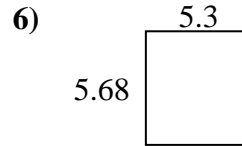
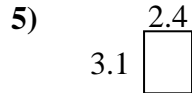
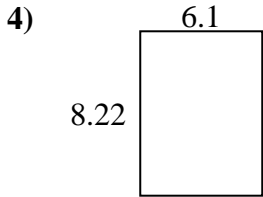
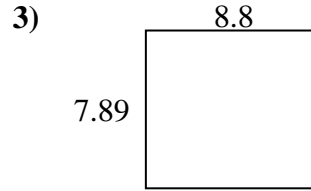
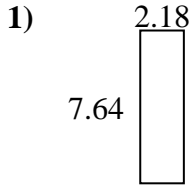


Antworten

1. _____
2. _____
3. _____
4. _____
5. _____
6. _____
7. _____
8. _____
9. _____
10. _____
11. _____
12. _____
13. _____
14. _____
15. _____



Finden Sie den Umfang und die Fläche jeder Figur. Antworten Sie auf das nächste Zehntel.

Antworten

1.	<u>16,7</u>	<u>19,6</u>
2.	<u>18,3</u>	<u>21,6</u>
3.	<u>69,4</u>	<u>33,4</u>
4.	<u>50,1</u>	<u>28,6</u>
5.	<u>7,4</u>	<u>11,0</u>
6.	<u>30,1</u>	<u>22,0</u>
7.	<u>42,0</u>	<u>26,4</u>
8.	<u>57,0</u>	<u>30,8</u>
9.	<u>21,9</u>	<u>18,8</u>
10.	<u>25,2</u>	<u>21,0</u>
11.	<u>54,6</u>	<u>29,8</u>
12.	<u>8,0</u>	<u>11,3</u>
13.	<u>20,3</u>	<u>18,0</u>
14.	<u>12,2</u>	<u>15,2</u>
15.	<u>9,9</u>	<u>12,9</u>