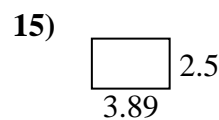
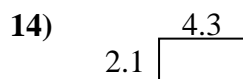
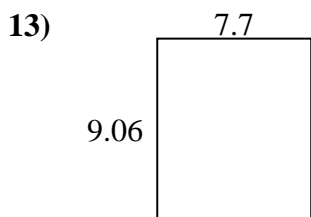
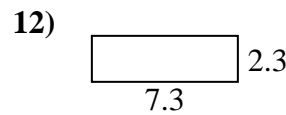
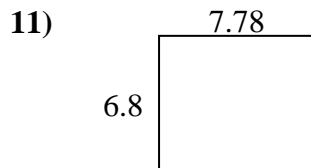
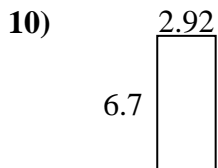
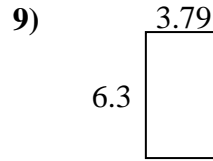
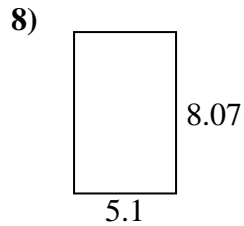
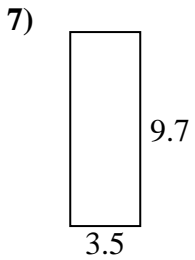
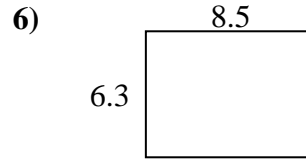
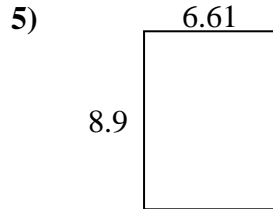
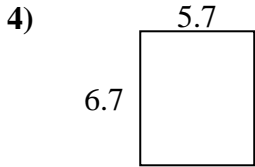
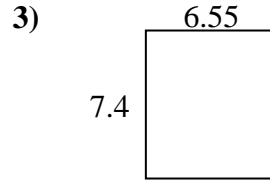
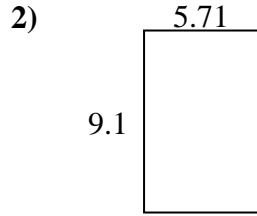
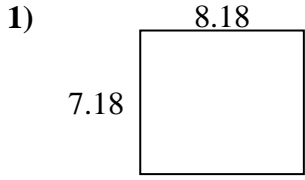




Finden Sie den Umfang und die Fläche jeder Figur. Antworten Sie auf das nächste Zehntel.

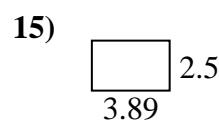
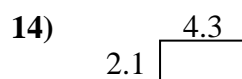
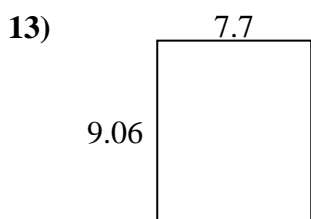
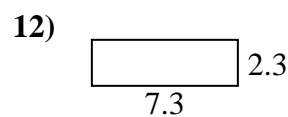
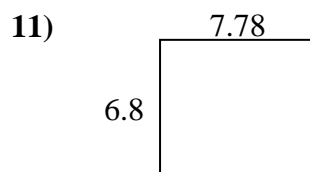
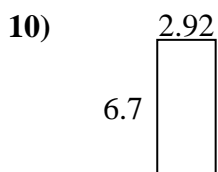
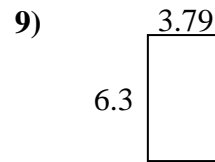
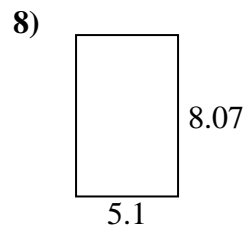
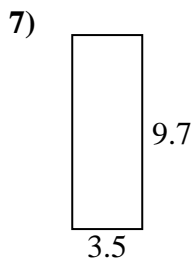
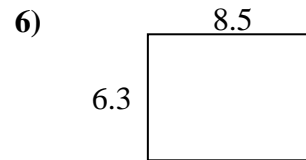
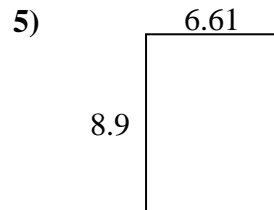
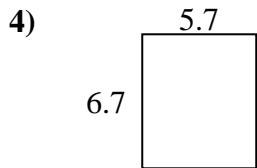
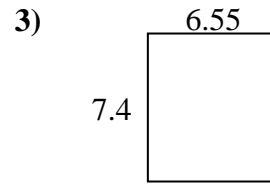
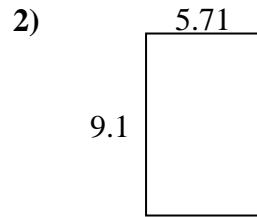
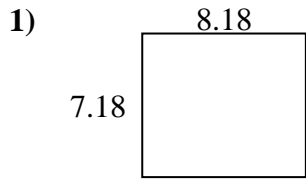


**Antworten**

1. \_\_\_\_\_
2. \_\_\_\_\_
3. \_\_\_\_\_
4. \_\_\_\_\_
5. \_\_\_\_\_
6. \_\_\_\_\_
7. \_\_\_\_\_
8. \_\_\_\_\_
9. \_\_\_\_\_
10. \_\_\_\_\_
11. \_\_\_\_\_
12. \_\_\_\_\_
13. \_\_\_\_\_
14. \_\_\_\_\_
15. \_\_\_\_\_



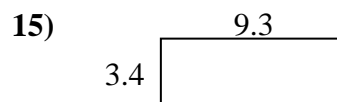
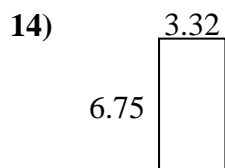
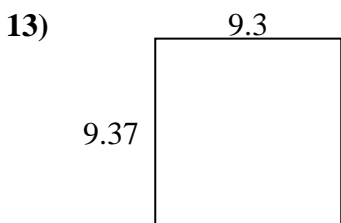
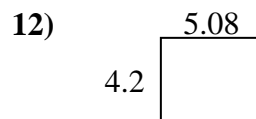
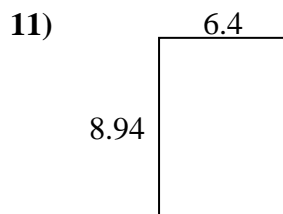
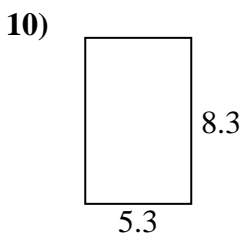
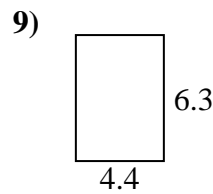
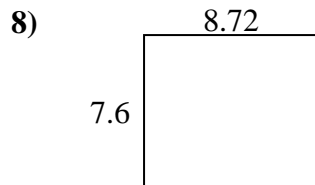
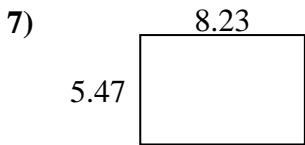
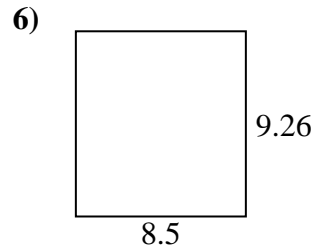
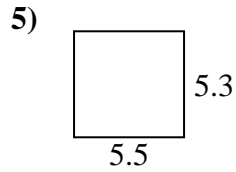
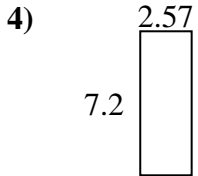
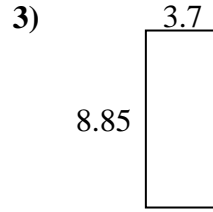
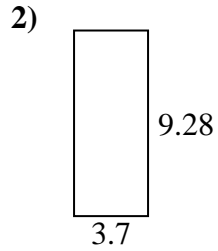
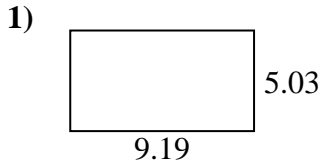
Finden Sie den Umfang und die Fläche jeder Figur. Antworten Sie auf das nächste Zehntel.

**Antworten**

|     |             |             |
|-----|-------------|-------------|
| 1.  | <u>58,7</u> | <u>30,7</u> |
| 2.  | <u>52,0</u> | <u>29,6</u> |
| 3.  | <u>48,5</u> | <u>27,9</u> |
| 4.  | <u>38,2</u> | <u>24,8</u> |
| 5.  | <u>58,8</u> | <u>31,0</u> |
| 6.  | <u>53,6</u> | <u>29,6</u> |
| 7.  | <u>34,0</u> | <u>26,4</u> |
| 8.  | <u>41,2</u> | <u>26,3</u> |
| 9.  | <u>23,9</u> | <u>20,2</u> |
| 10. | <u>19,6</u> | <u>19,2</u> |
| 11. | <u>52,9</u> | <u>29,2</u> |
| 12. | <u>16,8</u> | <u>19,2</u> |
| 13. | <u>69,8</u> | <u>33,5</u> |
| 14. | <u>9,0</u>  | <u>12,8</u> |
| 15. | <u>9,7</u>  | <u>12,8</u> |



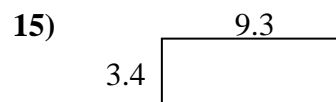
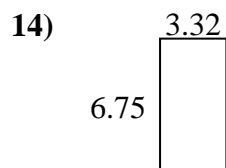
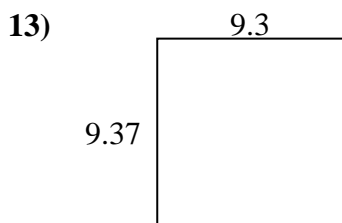
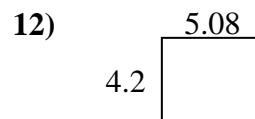
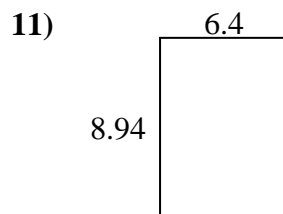
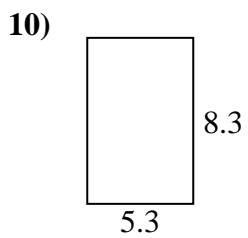
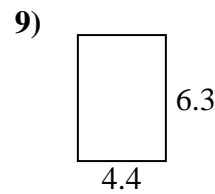
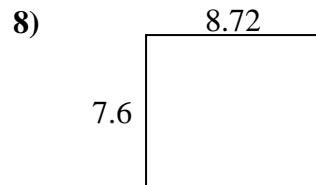
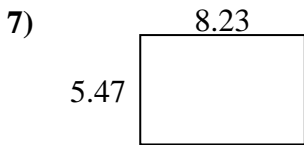
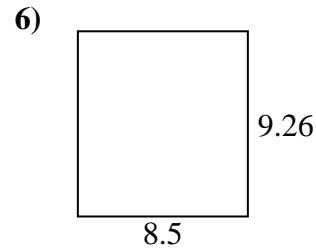
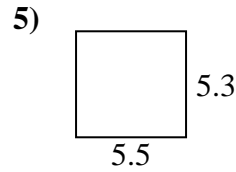
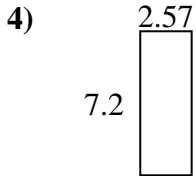
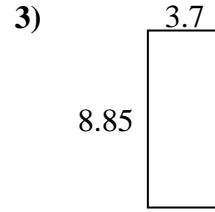
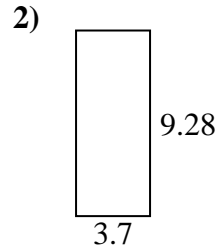
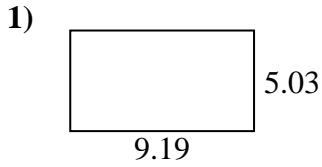
Finden Sie den Umfang und die Fläche jeder Figur. Antworten Sie auf das nächste Zehntel.

**Antworten**

1. \_\_\_\_\_
2. \_\_\_\_\_
3. \_\_\_\_\_
4. \_\_\_\_\_
5. \_\_\_\_\_
6. \_\_\_\_\_
7. \_\_\_\_\_
8. \_\_\_\_\_
9. \_\_\_\_\_
10. \_\_\_\_\_
11. \_\_\_\_\_
12. \_\_\_\_\_
13. \_\_\_\_\_
14. \_\_\_\_\_
15. \_\_\_\_\_



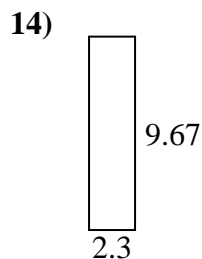
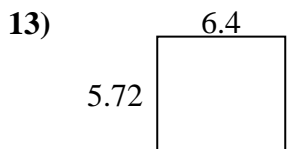
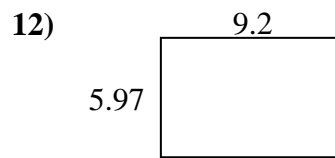
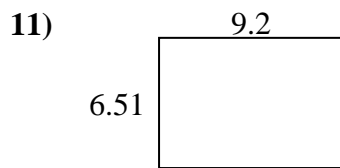
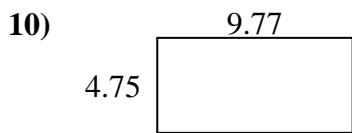
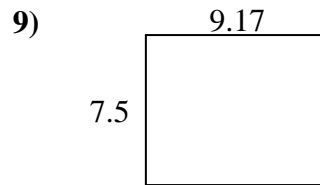
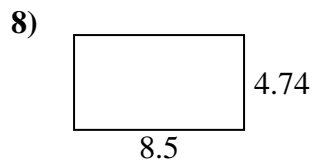
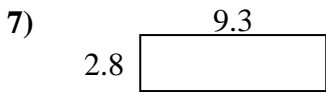
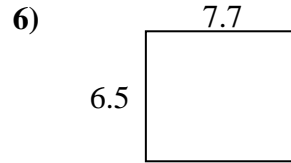
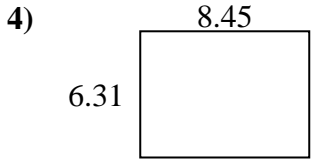
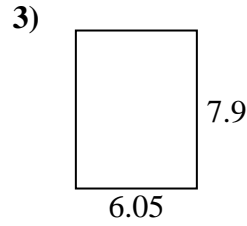
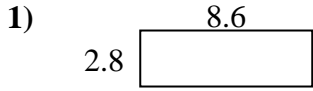
Finden Sie den Umfang und die Fläche jeder Figur. Antworten Sie auf das nächste Zehntel.

**Antworten**

|     |             |             |
|-----|-------------|-------------|
| 1.  | <u>46,2</u> | <u>28,4</u> |
| 2.  | <u>34,3</u> | <u>26,0</u> |
| 3.  | <u>32,7</u> | <u>25,1</u> |
| 4.  | <u>18,5</u> | <u>19,5</u> |
| 5.  | <u>29,2</u> | <u>21,6</u> |
| 6.  | <u>78,7</u> | <u>35,5</u> |
| 7.  | <u>45,0</u> | <u>27,4</u> |
| 8.  | <u>66,3</u> | <u>32,6</u> |
| 9.  | <u>27,7</u> | <u>21,4</u> |
| 10. | <u>44,0</u> | <u>27,2</u> |
| 11. | <u>57,2</u> | <u>30,7</u> |
| 12. | <u>21,3</u> | <u>18,6</u> |
| 13. | <u>87,1</u> | <u>37,3</u> |
| 14. | <u>22,4</u> | <u>20,1</u> |
| 15. | <u>31,6</u> | <u>25,4</u> |



Finden Sie den Umfang und die Fläche jeder Figur. Antworten Sie auf das nächste Zehntel.

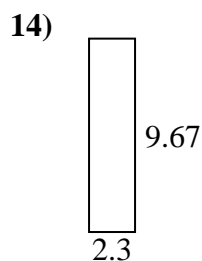
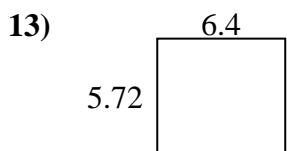
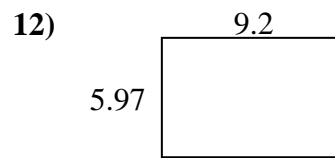
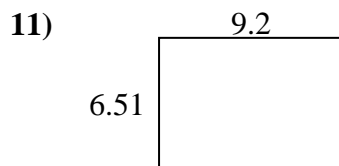
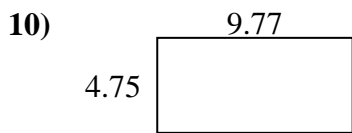
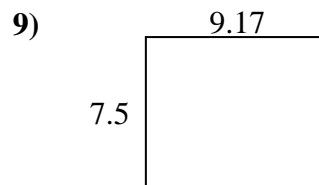
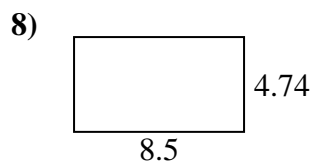
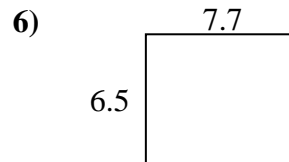
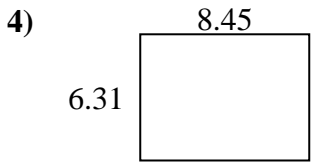
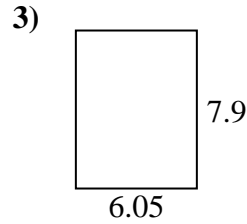
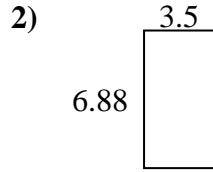
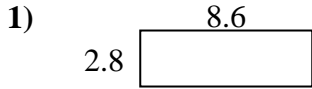


**Antworten**

1. \_\_\_\_\_
2. \_\_\_\_\_
3. \_\_\_\_\_
4. \_\_\_\_\_
5. \_\_\_\_\_
6. \_\_\_\_\_
7. \_\_\_\_\_
8. \_\_\_\_\_
9. \_\_\_\_\_
10. \_\_\_\_\_
11. \_\_\_\_\_
12. \_\_\_\_\_
13. \_\_\_\_\_
14. \_\_\_\_\_
15. \_\_\_\_\_



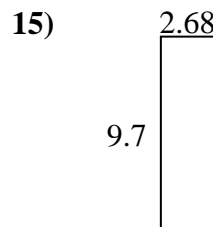
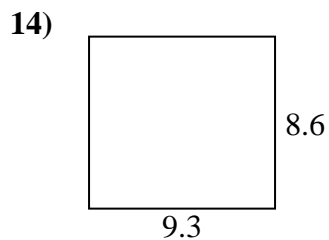
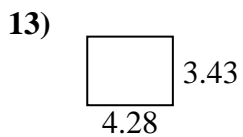
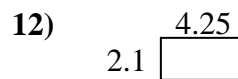
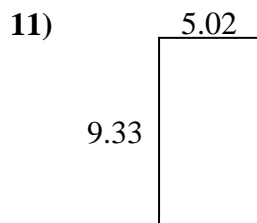
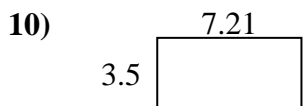
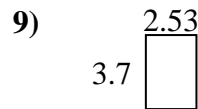
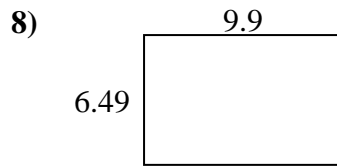
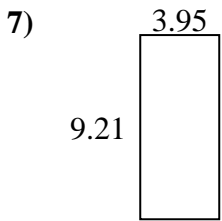
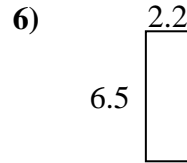
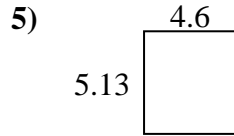
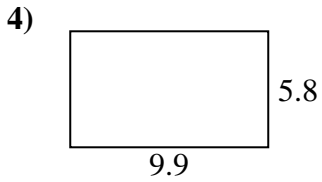
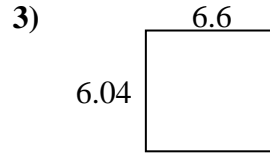
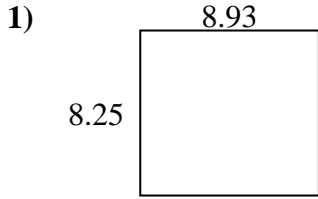
Finden Sie den Umfang und die Fläche jeder Figur. Antworten Sie auf das nächste Zehntel.

**Antworten**

|     |             |             |
|-----|-------------|-------------|
| 1.  | <u>24,1</u> | <u>22,8</u> |
| 2.  | <u>24,1</u> | <u>20,8</u> |
| 3.  | <u>47,8</u> | <u>27,9</u> |
| 4.  | <u>53,3</u> | <u>29,5</u> |
| 5.  | <u>18,0</u> | <u>19,8</u> |
| 6.  | <u>50,1</u> | <u>28,4</u> |
| 7.  | <u>26,0</u> | <u>24,2</u> |
| 8.  | <u>40,3</u> | <u>26,5</u> |
| 9.  | <u>68,8</u> | <u>33,3</u> |
| 10. | <u>46,4</u> | <u>29,0</u> |
| 11. | <u>59,9</u> | <u>31,4</u> |
| 12. | <u>54,9</u> | <u>30,3</u> |
| 13. | <u>36,6</u> | <u>24,2</u> |
| 14. | <u>22,2</u> | <u>23,9</u> |
| 15. | <u>13,8</u> | <u>15,8</u> |



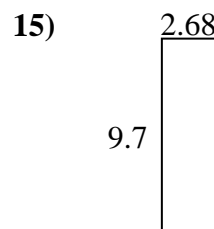
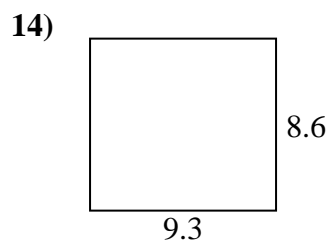
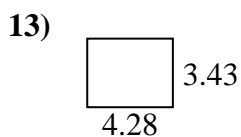
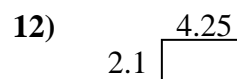
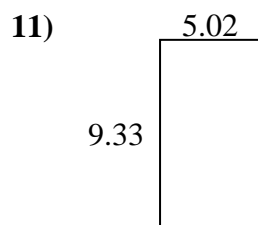
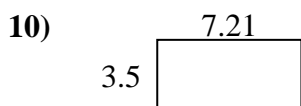
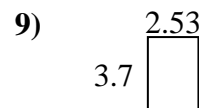
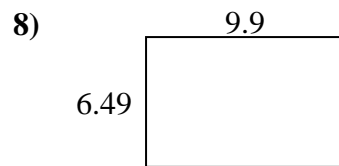
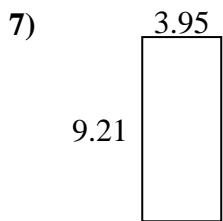
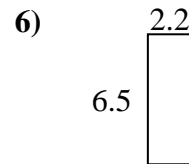
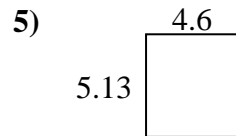
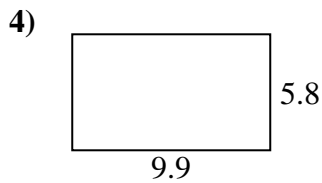
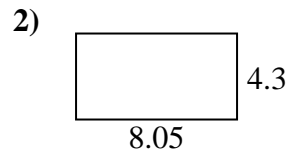
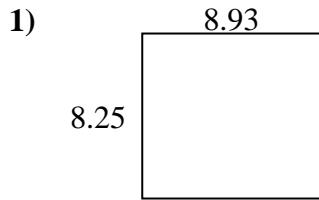
Finden Sie den Umfang und die Fläche jeder Figur. Antworten Sie auf das nächste Zehntel.

**Antworten**

1. \_\_\_\_\_
2. \_\_\_\_\_
3. \_\_\_\_\_
4. \_\_\_\_\_
5. \_\_\_\_\_
6. \_\_\_\_\_
7. \_\_\_\_\_
8. \_\_\_\_\_
9. \_\_\_\_\_
10. \_\_\_\_\_
11. \_\_\_\_\_
12. \_\_\_\_\_
13. \_\_\_\_\_
14. \_\_\_\_\_
15. \_\_\_\_\_



Finden Sie den Umfang und die Fläche jeder Figur. Antworten Sie auf das nächste Zehntel.

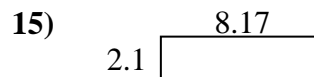

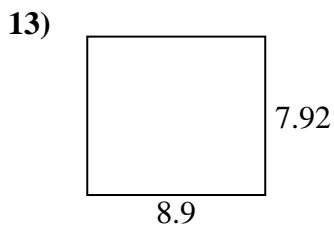
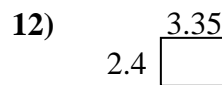
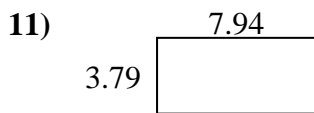
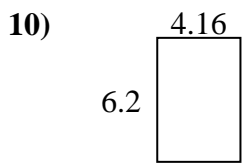
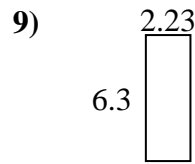
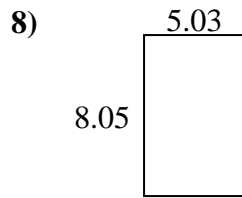
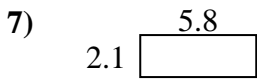
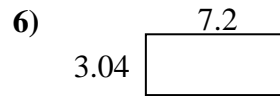
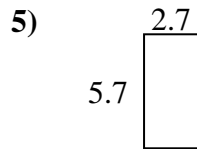
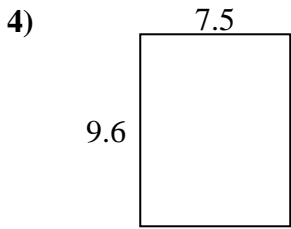
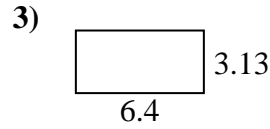
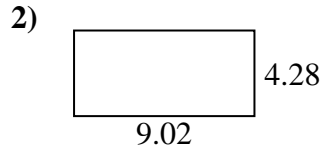
Antworten

|     |             |             |
|-----|-------------|-------------|
| 1.  | <u>73,7</u> | <u>34,4</u> |
| 2.  | <u>34,6</u> | <u>24,7</u> |
| 3.  | <u>39,9</u> | <u>25,3</u> |
| 4.  | <u>57,4</u> | <u>31,4</u> |
| 5.  | <u>23,6</u> | <u>19,5</u> |
| 6.  | <u>14,3</u> | <u>17,4</u> |
| 7.  | <u>36,4</u> | <u>26,3</u> |
| 8.  | <u>64,3</u> | <u>32,8</u> |
| 9.  | <u>9,4</u>  | <u>12,5</u> |
| 10. | <u>25,2</u> | <u>21,4</u> |
| 11. | <u>46,8</u> | <u>28,7</u> |
| 12. | <u>8,9</u>  | <u>12,7</u> |
| 13. | <u>14,7</u> | <u>15,4</u> |
| 14. | <u>80,0</u> | <u>35,8</u> |
| 15. | <u>26,0</u> | <u>24,8</u> |





Finden Sie den Umfang und die Fläche jeder Figur. Antworten Sie auf das nächste Zehntel.

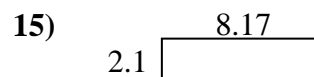
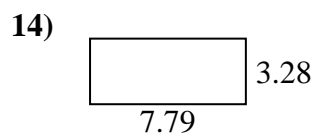
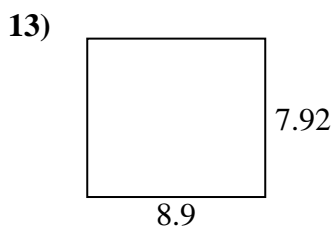
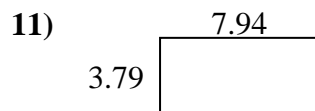
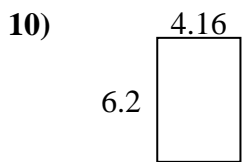
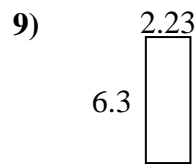
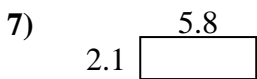
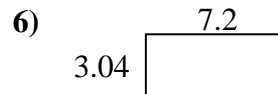
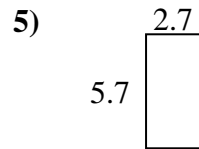
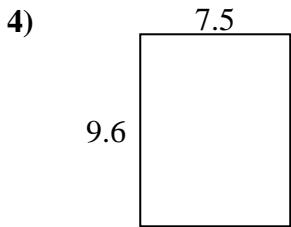
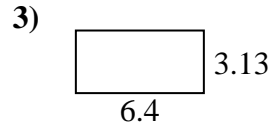



**Antworten**

1. \_\_\_\_\_
2. \_\_\_\_\_
3. \_\_\_\_\_
4. \_\_\_\_\_
5. \_\_\_\_\_
6. \_\_\_\_\_
7. \_\_\_\_\_
8. \_\_\_\_\_
9. \_\_\_\_\_
10. \_\_\_\_\_
11. \_\_\_\_\_
12. \_\_\_\_\_
13. \_\_\_\_\_
14. \_\_\_\_\_
15. \_\_\_\_\_



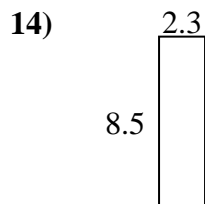
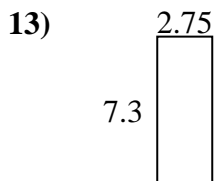
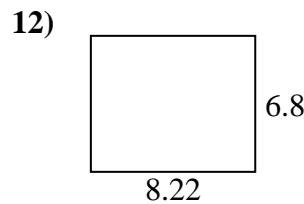
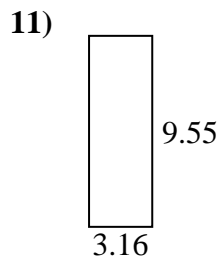
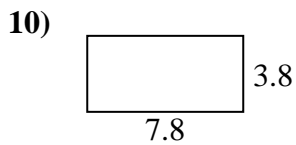
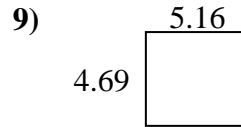
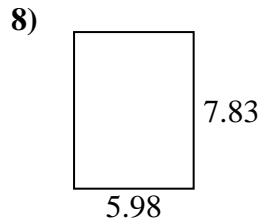
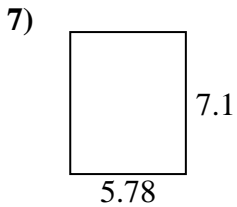
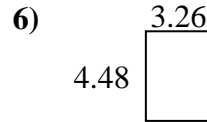
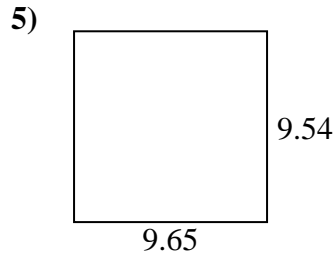
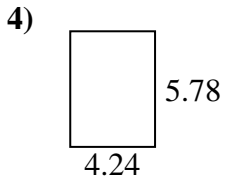
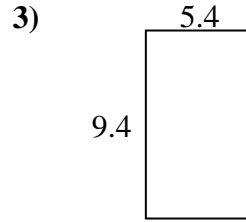
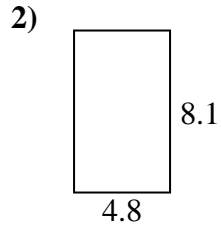
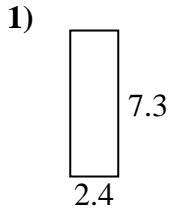
Finden Sie den Umfang und die Fläche jeder Figur. Antworten Sie auf das nächste Zehntel.

**Antworten**

|     |             |             |
|-----|-------------|-------------|
| 1.  | <u>30,7</u> | <u>25,2</u> |
| 2.  | <u>38,6</u> | <u>26,6</u> |
| 3.  | <u>20,0</u> | <u>19,1</u> |
| 4.  | <u>72,0</u> | <u>34,2</u> |
| 5.  | <u>15,4</u> | <u>16,8</u> |
| 6.  | <u>21,9</u> | <u>20,5</u> |
| 7.  | <u>12,2</u> | <u>15,8</u> |
| 8.  | <u>40,5</u> | <u>26,2</u> |
| 9.  | <u>14,0</u> | <u>17,1</u> |
| 10. | <u>25,8</u> | <u>20,7</u> |
| 11. | <u>30,1</u> | <u>23,5</u> |
| 12. | <u>8,0</u>  | <u>11,5</u> |
| 13. | <u>70,5</u> | <u>33,6</u> |
| 14. | <u>25,6</u> | <u>22,1</u> |
| 15. | <u>17,2</u> | <u>20,5</u> |



Finden Sie den Umfang und die Fläche jeder Figur. Antworten Sie auf das nächste Zehntel.

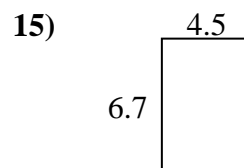
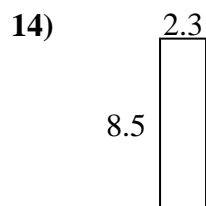
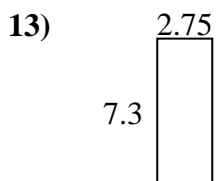
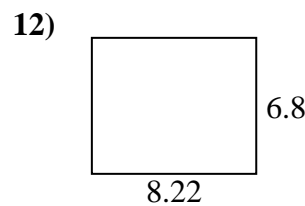
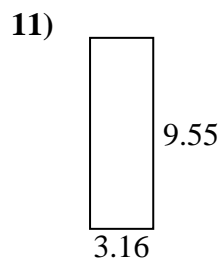
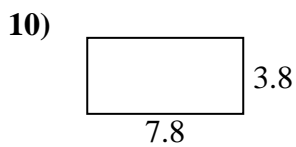
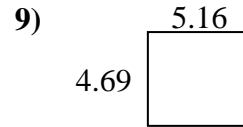
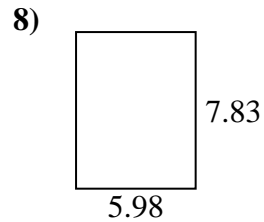
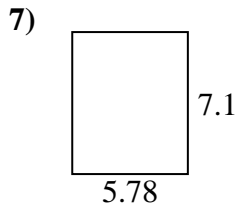
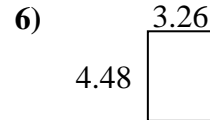
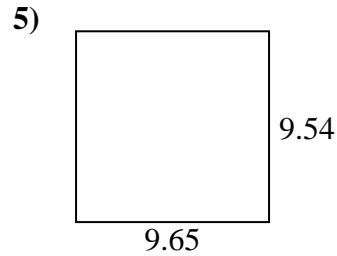
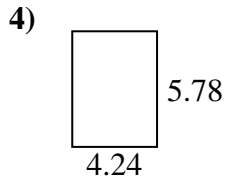
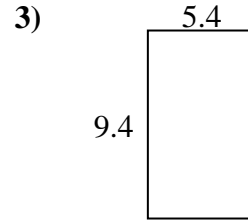
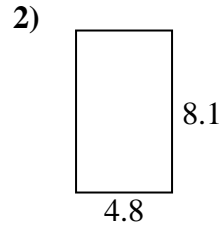
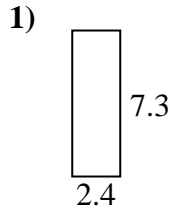


**Antworten**

1. \_\_\_\_\_
2. \_\_\_\_\_
3. \_\_\_\_\_
4. \_\_\_\_\_
5. \_\_\_\_\_
6. \_\_\_\_\_
7. \_\_\_\_\_
8. \_\_\_\_\_
9. \_\_\_\_\_
10. \_\_\_\_\_
11. \_\_\_\_\_
12. \_\_\_\_\_
13. \_\_\_\_\_
14. \_\_\_\_\_
15. \_\_\_\_\_



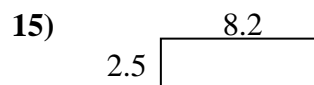
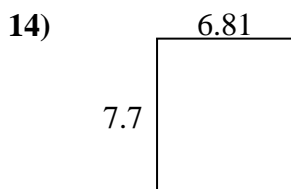
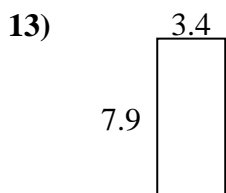
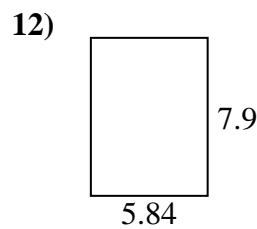
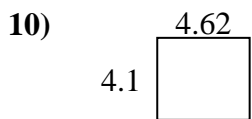
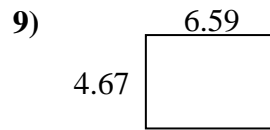
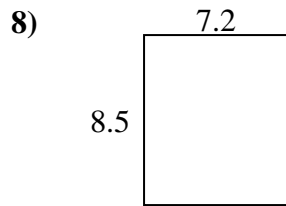
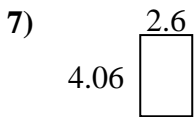
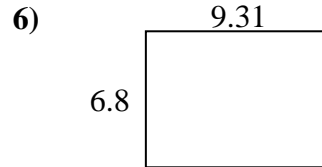
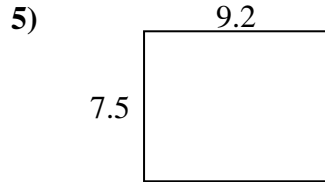
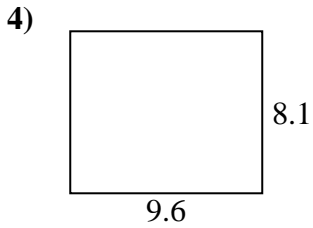
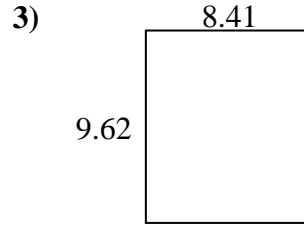
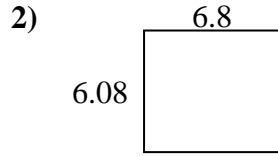
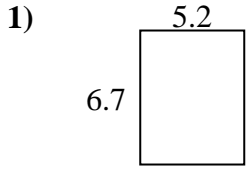
Finden Sie den Umfang und die Fläche jeder Figur. Antworten Sie auf das nächste Zehntel.

Antworten

|     |             |             |
|-----|-------------|-------------|
| 1.  | <u>17,5</u> | <u>19,4</u> |
| 2.  | <u>38,9</u> | <u>25,8</u> |
| 3.  | <u>50,8</u> | <u>29,6</u> |
| 4.  | <u>24,5</u> | <u>20,0</u> |
| 5.  | <u>92,1</u> | <u>38,4</u> |
| 6.  | <u>14,6</u> | <u>15,5</u> |
| 7.  | <u>41,0</u> | <u>25,8</u> |
| 8.  | <u>46,8</u> | <u>27,6</u> |
| 9.  | <u>24,2</u> | <u>19,7</u> |
| 10. | <u>29,6</u> | <u>23,2</u> |
| 11. | <u>30,2</u> | <u>25,4</u> |
| 12. | <u>55,9</u> | <u>30,0</u> |
| 13. | <u>20,1</u> | <u>20,1</u> |
| 14. | <u>19,6</u> | <u>21,6</u> |
| 15. | <u>30,2</u> | <u>22,4</u> |



Finden Sie den Umfang und die Fläche jeder Figur. Antworten Sie auf das nächste Zehntel.

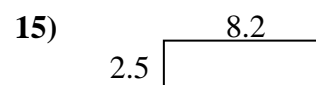
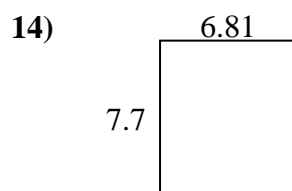
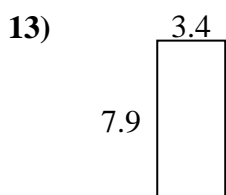
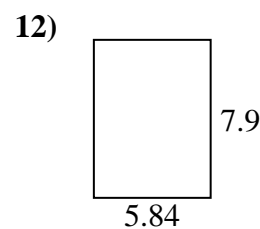
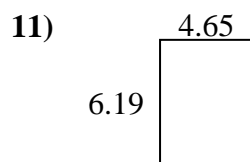
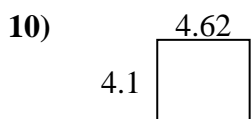
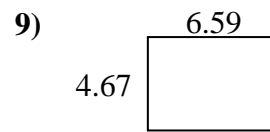
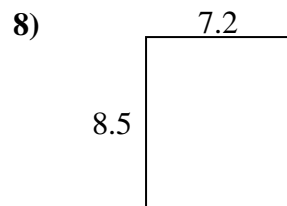
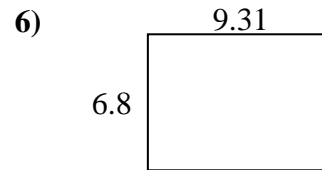
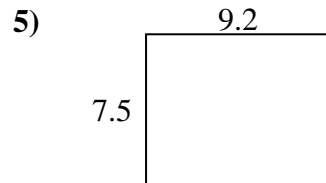
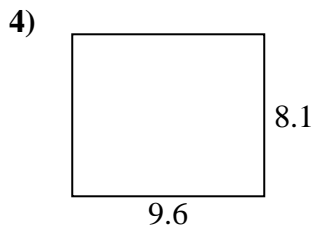
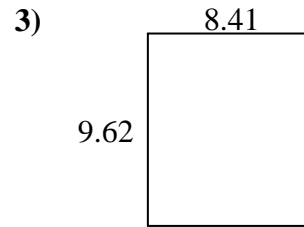
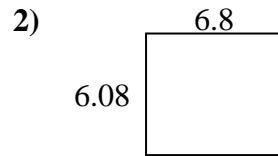
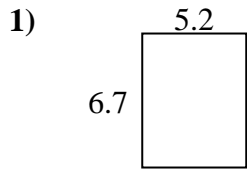


**Antworten**

1. \_\_\_\_\_
2. \_\_\_\_\_
3. \_\_\_\_\_
4. \_\_\_\_\_
5. \_\_\_\_\_
6. \_\_\_\_\_
7. \_\_\_\_\_
8. \_\_\_\_\_
9. \_\_\_\_\_
10. \_\_\_\_\_
11. \_\_\_\_\_
12. \_\_\_\_\_
13. \_\_\_\_\_
14. \_\_\_\_\_
15. \_\_\_\_\_



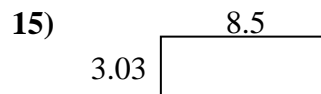
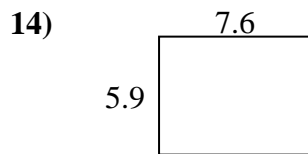
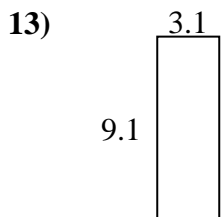
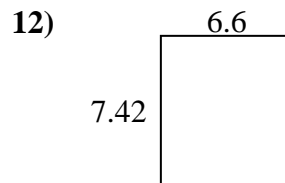
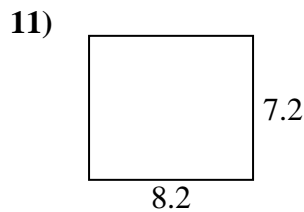
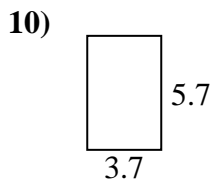
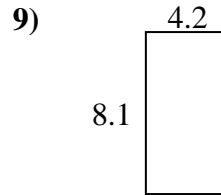
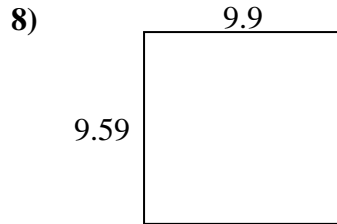
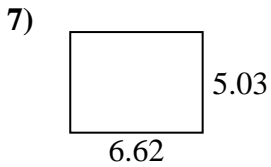
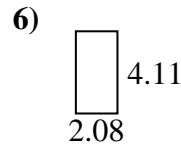
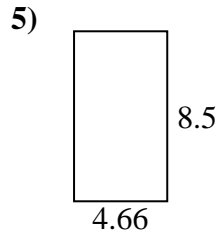
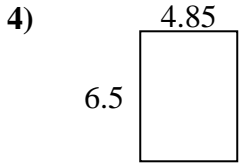
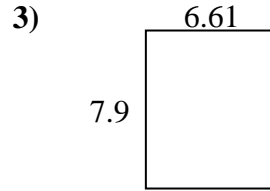
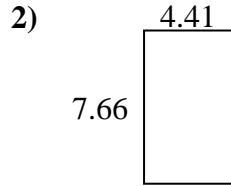
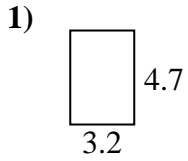
Finden Sie den Umfang und die Fläche jeder Figur. Antworten Sie auf das nächste Zehntel.

Antworten

|     |             |             |
|-----|-------------|-------------|
| 1.  | <u>34,8</u> | <u>23,8</u> |
| 2.  | <u>41,3</u> | <u>25,8</u> |
| 3.  | <u>80,9</u> | <u>36,1</u> |
| 4.  | <u>77,8</u> | <u>35,4</u> |
| 5.  | <u>69,0</u> | <u>33,4</u> |
| 6.  | <u>63,3</u> | <u>32,2</u> |
| 7.  | <u>10,6</u> | <u>13,3</u> |
| 8.  | <u>61,2</u> | <u>31,4</u> |
| 9.  | <u>30,8</u> | <u>22,5</u> |
| 10. | <u>18,9</u> | <u>17,4</u> |
| 11. | <u>28,8</u> | <u>21,7</u> |
| 12. | <u>46,1</u> | <u>27,5</u> |
| 13. | <u>26,9</u> | <u>22,6</u> |
| 14. | <u>52,4</u> | <u>29,0</u> |
| 15. | <u>20,5</u> | <u>21,4</u> |



Finden Sie den Umfang und die Fläche jeder Figur. Antworten Sie auf das nächste Zehntel.

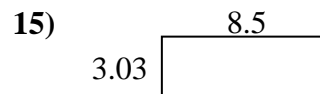
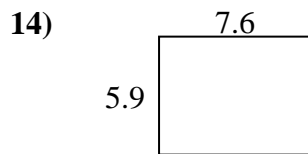
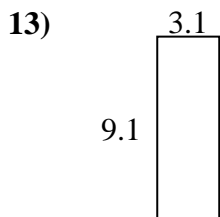
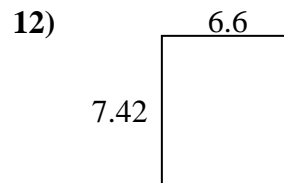
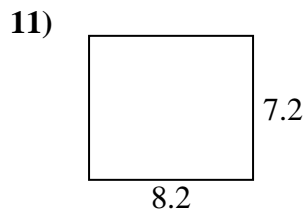
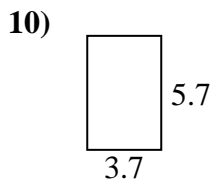
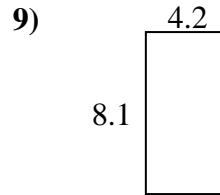
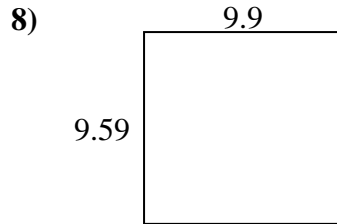
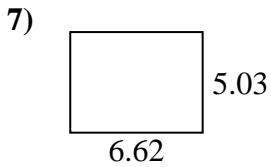
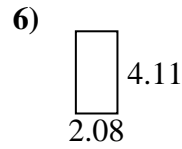
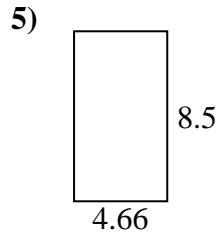
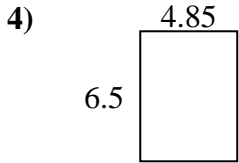
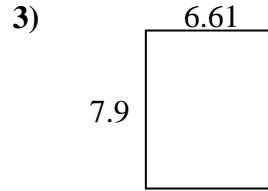
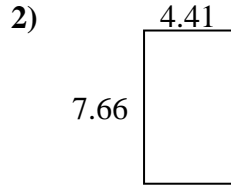
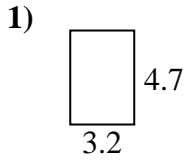


**Antworten**

1. \_\_\_\_\_
2. \_\_\_\_\_
3. \_\_\_\_\_
4. \_\_\_\_\_
5. \_\_\_\_\_
6. \_\_\_\_\_
7. \_\_\_\_\_
8. \_\_\_\_\_
9. \_\_\_\_\_
10. \_\_\_\_\_
11. \_\_\_\_\_
12. \_\_\_\_\_
13. \_\_\_\_\_
14. \_\_\_\_\_
15. \_\_\_\_\_



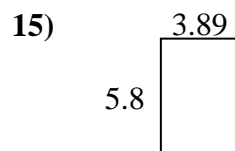
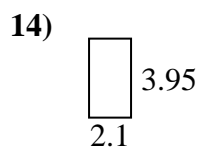
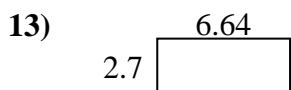
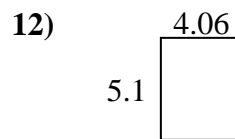
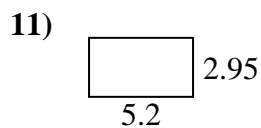
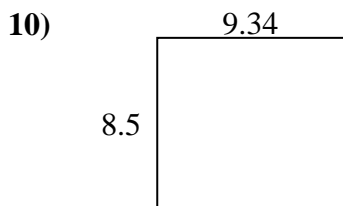
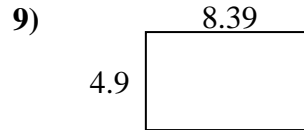
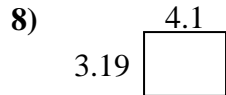
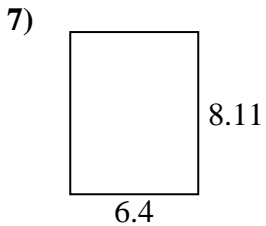
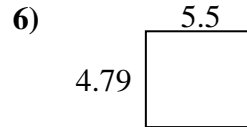
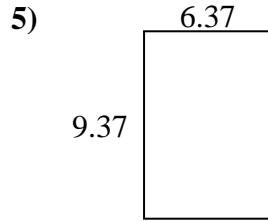
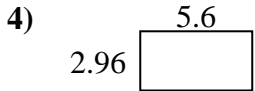
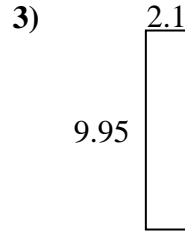
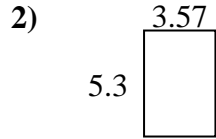
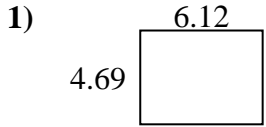
Finden Sie den Umfang und die Fläche jeder Figur. Antworten Sie auf das nächste Zehntel.

**Antworten**1. 15,0 15,82. 33,8 24,13. 52,2 29,04. 31,5 22,75. 39,6 26,36. 8,5 12,47. 33,3 23,38. 94,9 39,09. 34,0 24,610. 21,1 18,811. 59,0 30,812. 49,0 28,013. 28,2 24,414. 44,8 27,015. 25,8 23,1





Finden Sie den Umfang und die Fläche jeder Figur. Antworten Sie auf das nächste Zehntel.

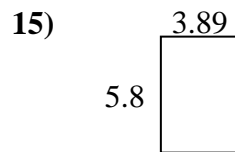
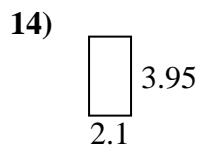
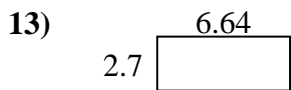
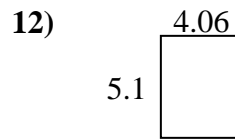
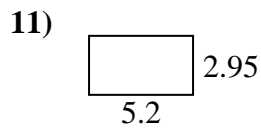
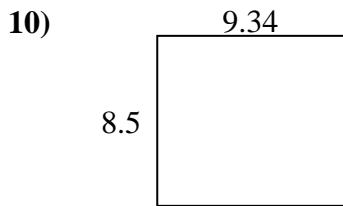
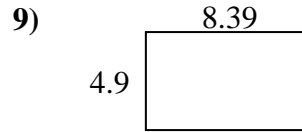
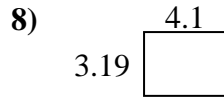
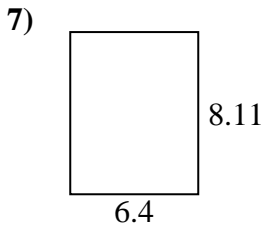
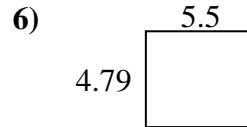
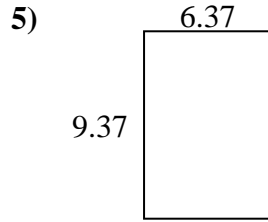
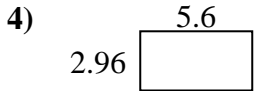
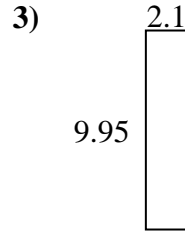
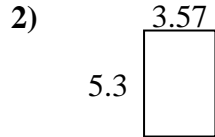
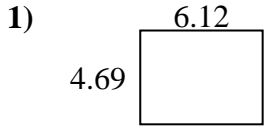


**Antworten**

1. \_\_\_\_\_
2. \_\_\_\_\_
3. \_\_\_\_\_
4. \_\_\_\_\_
5. \_\_\_\_\_
6. \_\_\_\_\_
7. \_\_\_\_\_
8. \_\_\_\_\_
9. \_\_\_\_\_
10. \_\_\_\_\_
11. \_\_\_\_\_
12. \_\_\_\_\_
13. \_\_\_\_\_
14. \_\_\_\_\_
15. \_\_\_\_\_

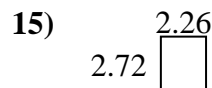
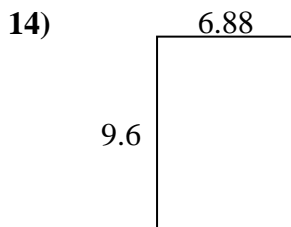

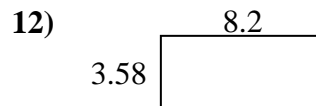
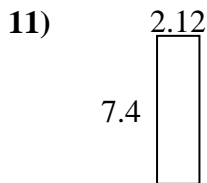
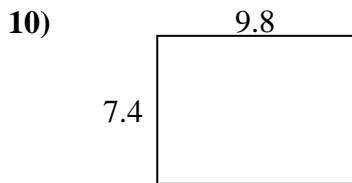
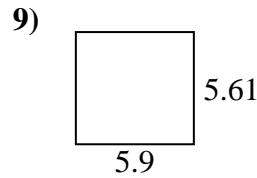
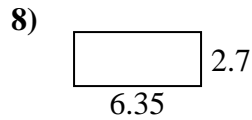
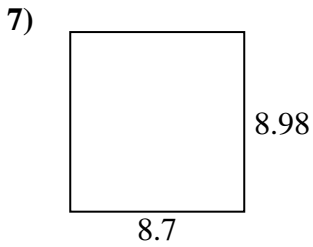
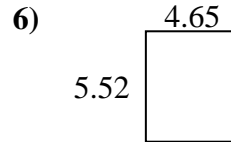
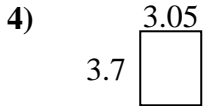
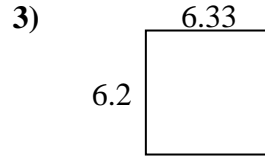
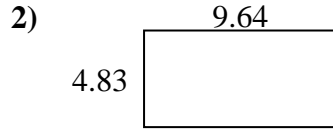
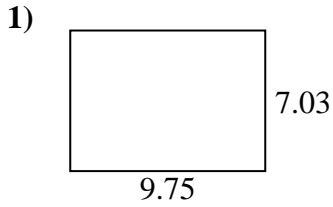


Finden Sie den Umfang und die Fläche jeder Figur. Antworten Sie auf das nächste Zehntel.

**Antworten**1. 28,7 21,62. 18,9 17,73. 20,9 24,14. 16,6 17,15. 59,7 31,56. 26,3 20,67. 51,9 29,08. 13,1 14,69. 41,1 26,610. 79,4 35,711. 15,3 16,312. 20,7 18,313. 17,9 18,714. 8,3 12,115. 22,6 19,4



Finden Sie den Umfang und die Fläche jeder Figur. Antworten Sie auf das nächste Zehntel.

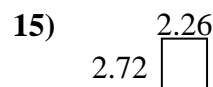
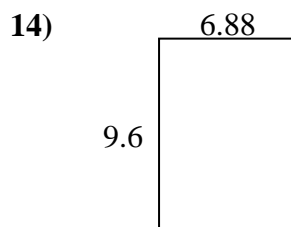

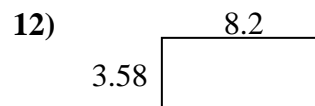
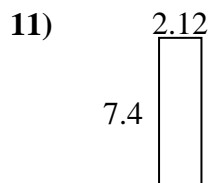
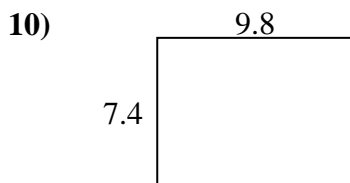
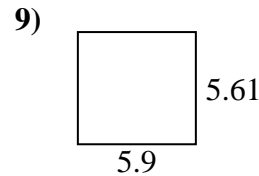
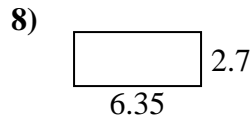
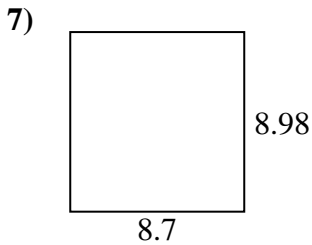
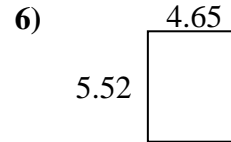
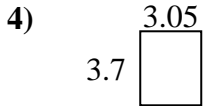
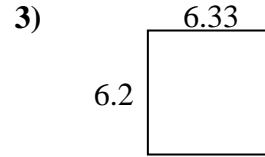
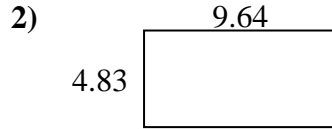
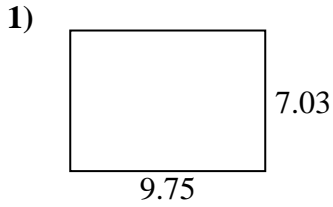


**Antworten**

1. \_\_\_\_\_
2. \_\_\_\_\_
3. \_\_\_\_\_
4. \_\_\_\_\_
5. \_\_\_\_\_
6. \_\_\_\_\_
7. \_\_\_\_\_
8. \_\_\_\_\_
9. \_\_\_\_\_
10. \_\_\_\_\_
11. \_\_\_\_\_
12. \_\_\_\_\_
13. \_\_\_\_\_
14. \_\_\_\_\_
15. \_\_\_\_\_



Finden Sie den Umfang und die Fläche jeder Figur. Antworten Sie auf das nächste Zehntel.

**Antworten**1. 68,5 33,62. 46,6 28,93. 39,2 25,14. 11,3 13,55. 23,8 22,86. 25,7 20,37. 78,1 35,48. 17,1 18,19. 33,1 23,010. 72,5 34,411. 15,7 19,012. 29,4 23,613. 12,0 14,414. 66,0 33,015. 6,1 10,0