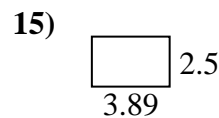
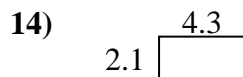
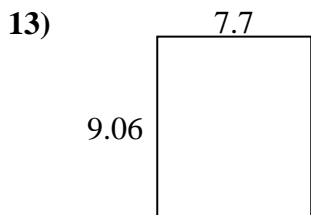
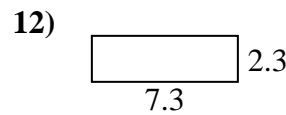
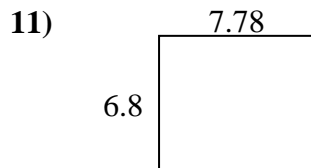
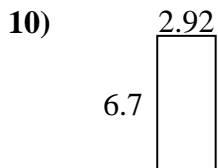
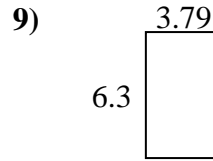
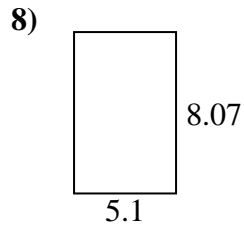
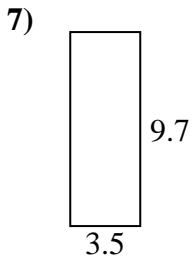
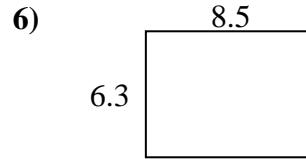
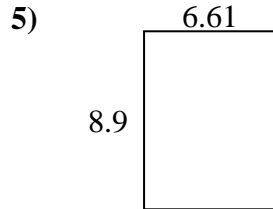
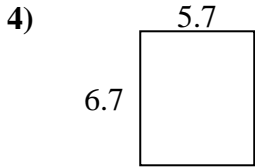
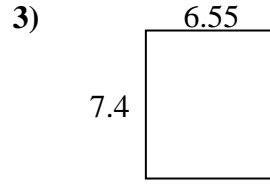
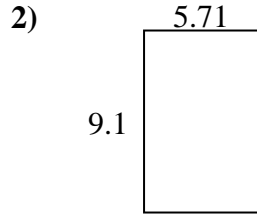
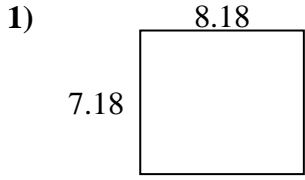




Finden Sie den Umfang und die Fläche jeder Figur. Antworten Sie auf das nächste Zehntel.

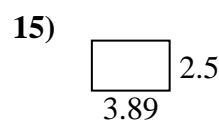
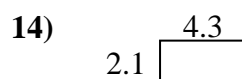
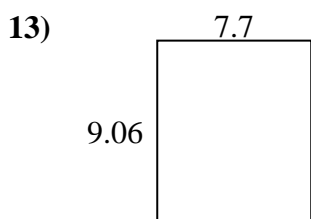
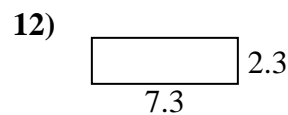
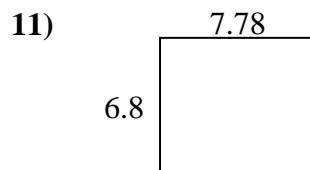
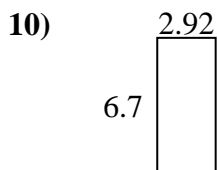
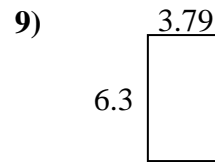
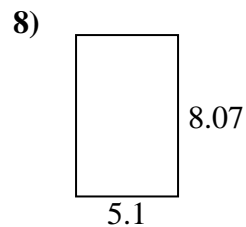
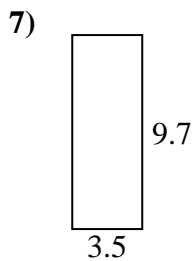
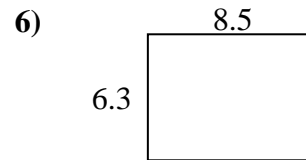
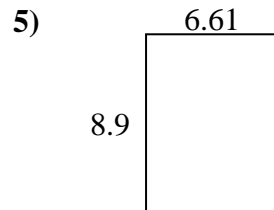
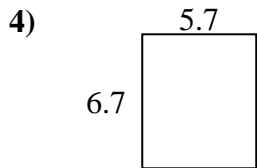
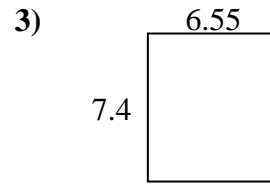
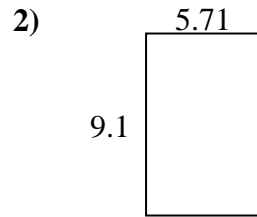
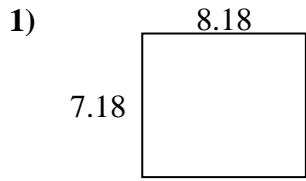


**Antworten**

1. \_\_\_\_\_
2. \_\_\_\_\_
3. \_\_\_\_\_
4. \_\_\_\_\_
5. \_\_\_\_\_
6. \_\_\_\_\_
7. \_\_\_\_\_
8. \_\_\_\_\_
9. \_\_\_\_\_
10. \_\_\_\_\_
11. \_\_\_\_\_
12. \_\_\_\_\_
13. \_\_\_\_\_
14. \_\_\_\_\_
15. \_\_\_\_\_



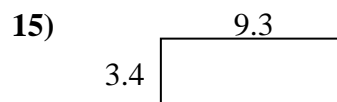
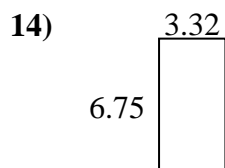
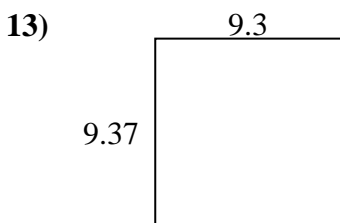
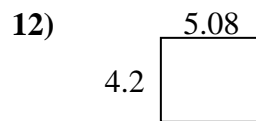
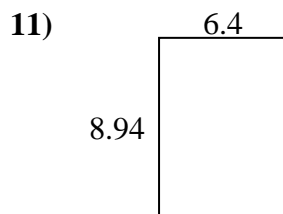
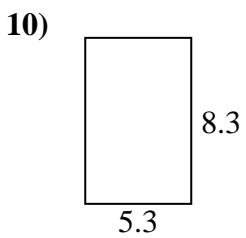
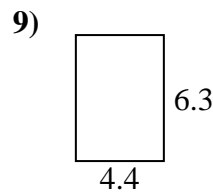
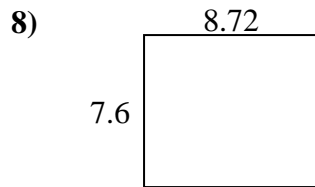
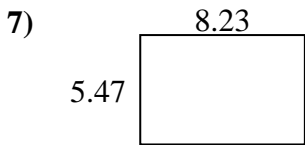
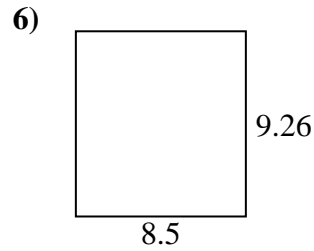
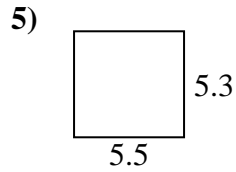
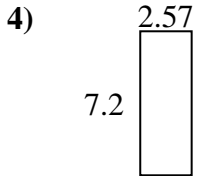
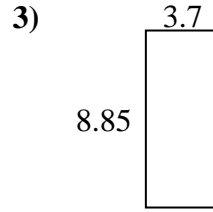
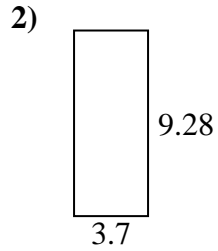
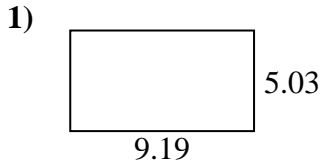
Finden Sie den Umfang und die Fläche jeder Figur. Antworten Sie auf das nächste Zehntel.

**Antworten**

1.	<u>58,7</u>	<u>30,7</u>
2.	<u>52,0</u>	<u>29,6</u>
3.	<u>48,5</u>	<u>27,9</u>
4.	<u>38,2</u>	<u>24,8</u>
5.	<u>58,8</u>	<u>31,0</u>
6.	<u>53,6</u>	<u>29,6</u>
7.	<u>34,0</u>	<u>26,4</u>
8.	<u>41,2</u>	<u>26,3</u>
9.	<u>23,9</u>	<u>20,2</u>
10.	<u>19,6</u>	<u>19,2</u>
11.	<u>52,9</u>	<u>29,2</u>
12.	<u>16,8</u>	<u>19,2</u>
13.	<u>69,8</u>	<u>33,5</u>
14.	<u>9,0</u>	<u>12,8</u>
15.	<u>9,7</u>	<u>12,8</u>



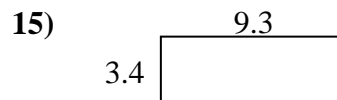
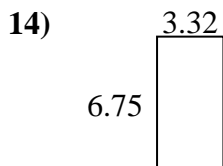
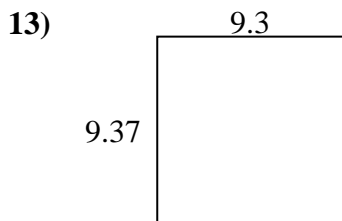
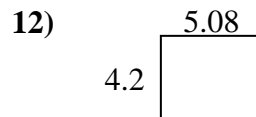
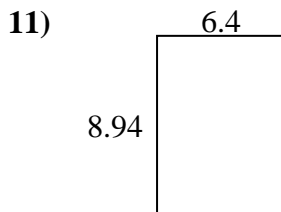
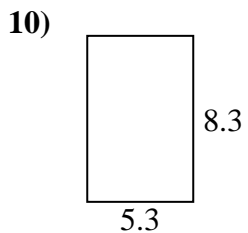
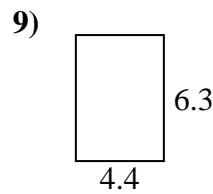
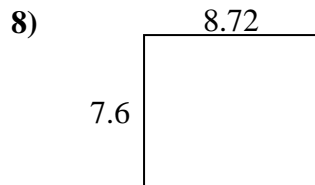
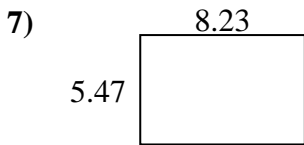
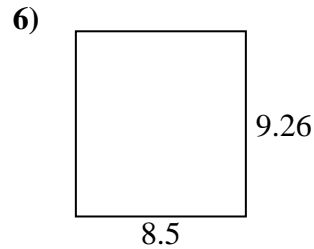
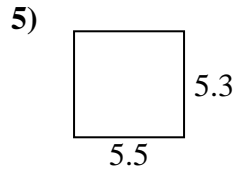
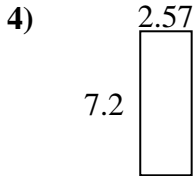
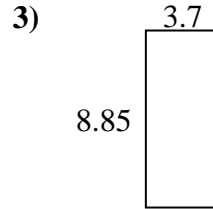
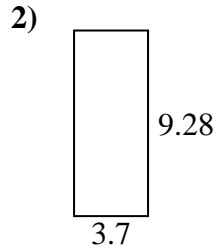
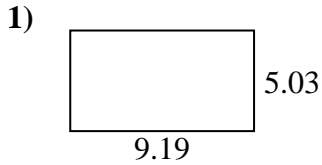
Finden Sie den Umfang und die Fläche jeder Figur. Antworten Sie auf das nächste Zehntel.

**Antworten**

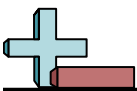
1. \_\_\_\_\_
2. \_\_\_\_\_
3. \_\_\_\_\_
4. \_\_\_\_\_
5. \_\_\_\_\_
6. \_\_\_\_\_
7. \_\_\_\_\_
8. \_\_\_\_\_
9. \_\_\_\_\_
10. \_\_\_\_\_
11. \_\_\_\_\_
12. \_\_\_\_\_
13. \_\_\_\_\_
14. \_\_\_\_\_
15. \_\_\_\_\_



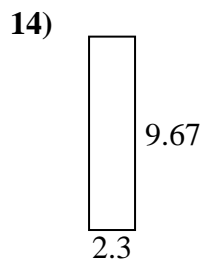
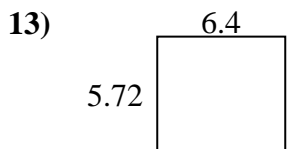
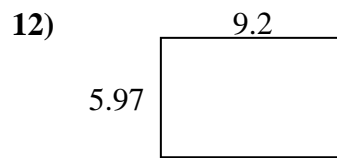
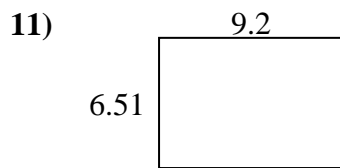
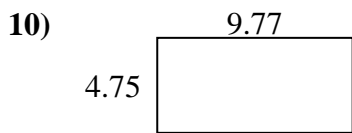
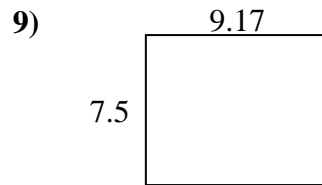
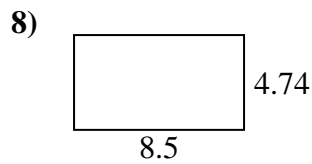
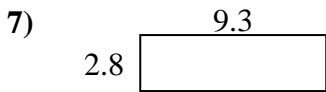
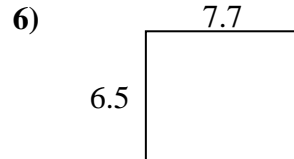

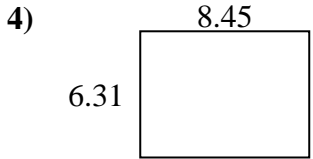
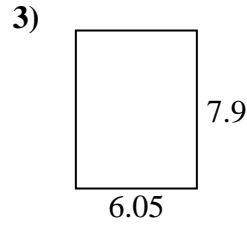
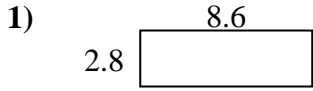
Finden Sie den Umfang und die Fläche jeder Figur. Antworten Sie auf das nächste Zehntel.

Antworten

1.	<u>46,2</u>	<u>28,4</u>
2.	<u>34,3</u>	<u>26,0</u>
3.	<u>32,7</u>	<u>25,1</u>
4.	<u>18,5</u>	<u>19,5</u>
5.	<u>29,2</u>	<u>21,6</u>
6.	<u>78,7</u>	<u>35,5</u>
7.	<u>45,0</u>	<u>27,4</u>
8.	<u>66,3</u>	<u>32,6</u>
9.	<u>27,7</u>	<u>21,4</u>
10.	<u>44,0</u>	<u>27,2</u>
11.	<u>57,2</u>	<u>30,7</u>
12.	<u>21,3</u>	<u>18,6</u>
13.	<u>87,1</u>	<u>37,3</u>
14.	<u>22,4</u>	<u>20,1</u>
15.	<u>31,6</u>	<u>25,4</u>



Finden Sie den Umfang und die Fläche jeder Figur. Antworten Sie auf das nächste Zehntel.

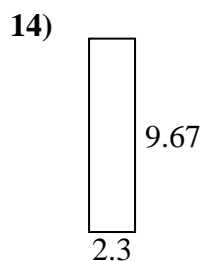
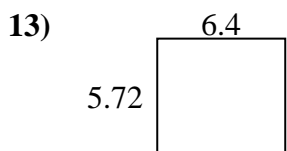
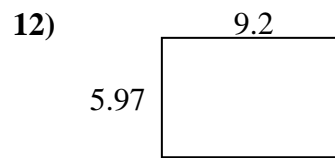
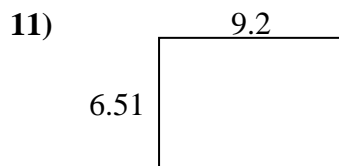
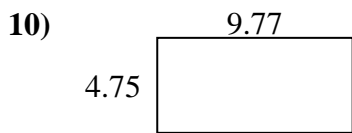
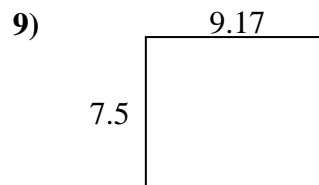
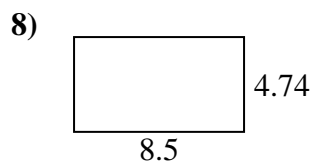
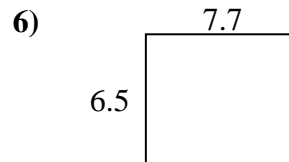

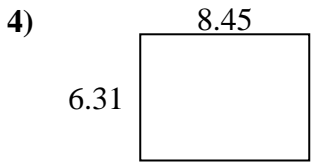
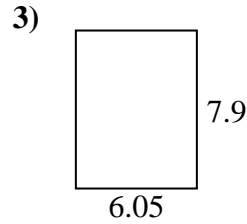
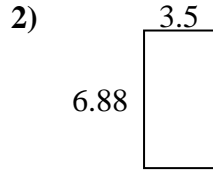
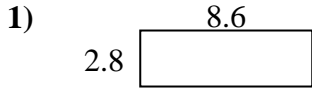


**Antworten**

1. \_\_\_\_\_
2. \_\_\_\_\_
3. \_\_\_\_\_
4. \_\_\_\_\_
5. \_\_\_\_\_
6. \_\_\_\_\_
7. \_\_\_\_\_
8. \_\_\_\_\_
9. \_\_\_\_\_
10. \_\_\_\_\_
11. \_\_\_\_\_
12. \_\_\_\_\_
13. \_\_\_\_\_
14. \_\_\_\_\_
15. \_\_\_\_\_



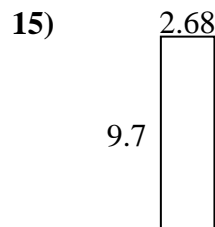
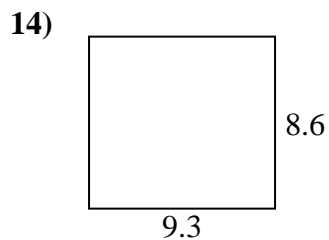
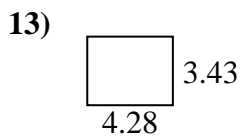
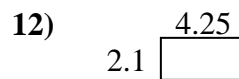
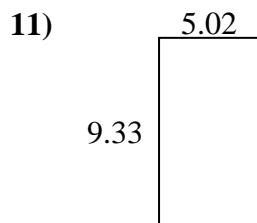
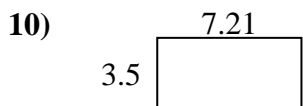
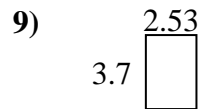
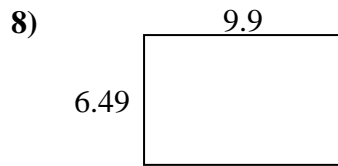
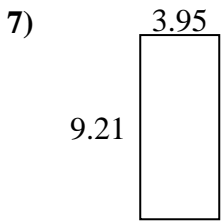
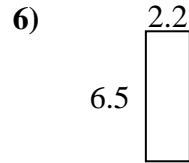
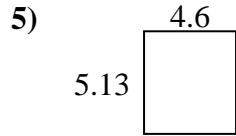
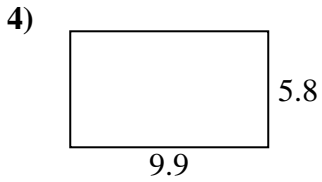
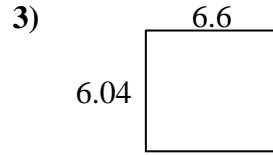
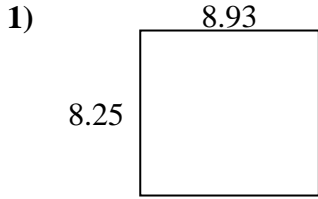
Finden Sie den Umfang und die Fläche jeder Figur. Antworten Sie auf das nächste Zehntel.

Antworten

1.	<u>24,1</u>	<u>22,8</u>
2.	<u>24,1</u>	<u>20,8</u>
3.	<u>47,8</u>	<u>27,9</u>
4.	<u>53,3</u>	<u>29,5</u>
5.	<u>18,0</u>	<u>19,8</u>
6.	<u>50,1</u>	<u>28,4</u>
7.	<u>26,0</u>	<u>24,2</u>
8.	<u>40,3</u>	<u>26,5</u>
9.	<u>68,8</u>	<u>33,3</u>
10.	<u>46,4</u>	<u>29,0</u>
11.	<u>59,9</u>	<u>31,4</u>
12.	<u>54,9</u>	<u>30,3</u>
13.	<u>36,6</u>	<u>24,2</u>
14.	<u>22,2</u>	<u>23,9</u>
15.	<u>13,8</u>	<u>15,8</u>



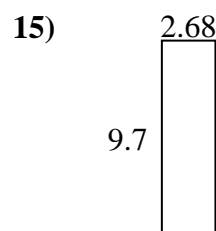
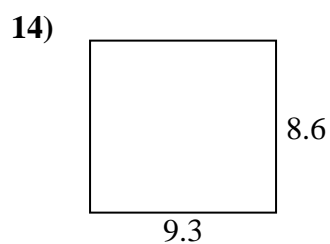
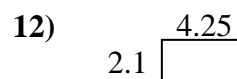
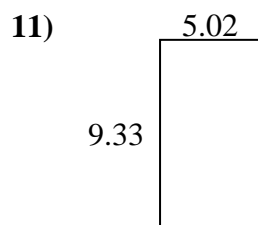
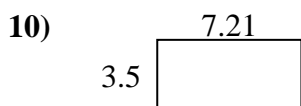
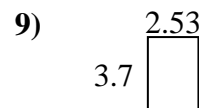
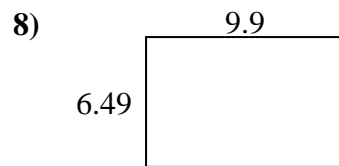
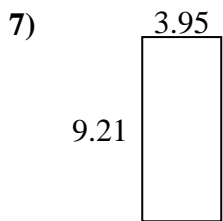
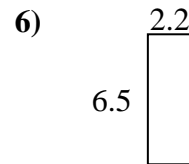
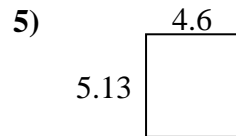
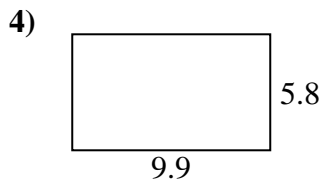
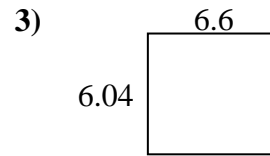
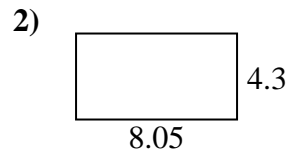
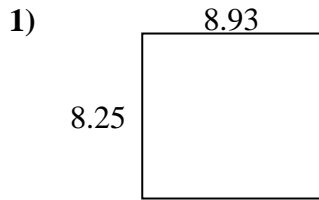
Finden Sie den Umfang und die Fläche jeder Figur. Antworten Sie auf das nächste Zehntel.

**Antworten**

1. \_\_\_\_\_
2. \_\_\_\_\_
3. \_\_\_\_\_
4. \_\_\_\_\_
5. \_\_\_\_\_
6. \_\_\_\_\_
7. \_\_\_\_\_
8. \_\_\_\_\_
9. \_\_\_\_\_
10. \_\_\_\_\_
11. \_\_\_\_\_
12. \_\_\_\_\_
13. \_\_\_\_\_
14. \_\_\_\_\_
15. \_\_\_\_\_



Finden Sie den Umfang und die Fläche jeder Figur. Antworten Sie auf das nächste Zehntel.

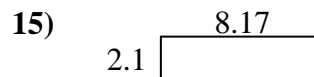
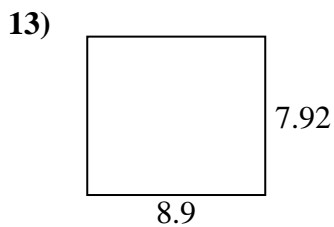
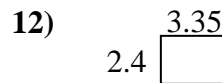
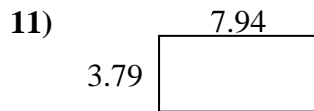
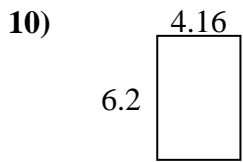
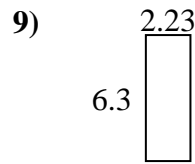
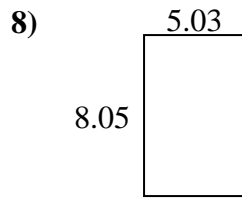
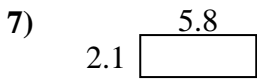
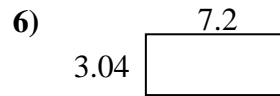
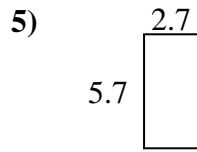
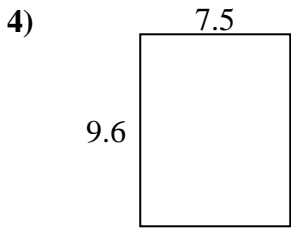
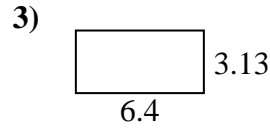
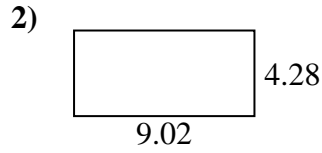
Antworten

1.	<u>73,7</u>	<u>34,4</u>
2.	<u>34,6</u>	<u>24,7</u>
3.	<u>39,9</u>	<u>25,3</u>
4.	<u>57,4</u>	<u>31,4</u>
5.	<u>23,6</u>	<u>19,5</u>
6.	<u>14,3</u>	<u>17,4</u>
7.	<u>36,4</u>	<u>26,3</u>
8.	<u>64,3</u>	<u>32,8</u>
9.	<u>9,4</u>	<u>12,5</u>
10.	<u>25,2</u>	<u>21,4</u>
11.	<u>46,8</u>	<u>28,7</u>
12.	<u>8,9</u>	<u>12,7</u>
13.	<u>14,7</u>	<u>15,4</u>
14.	<u>80,0</u>	<u>35,8</u>
15.	<u>26,0</u>	<u>24,8</u>





Finden Sie den Umfang und die Fläche jeder Figur. Antworten Sie auf das nächste Zehntel.

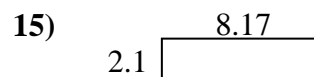
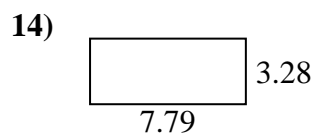
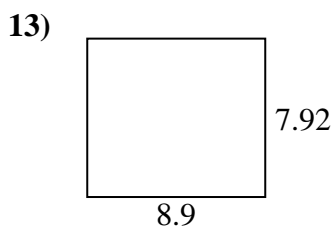
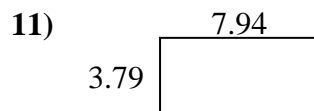
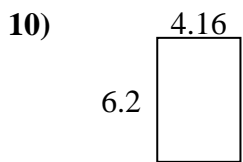
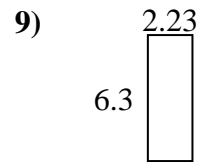
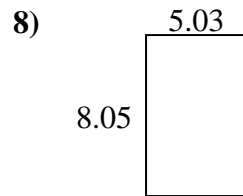
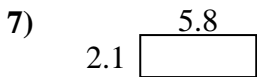
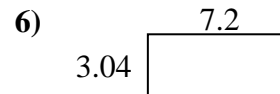
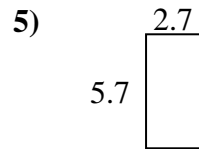
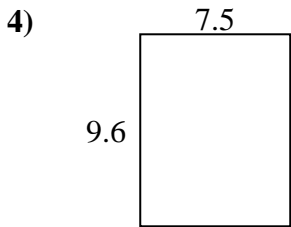
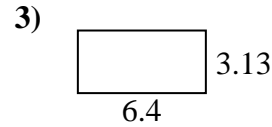



**Antworten**

1. \_\_\_\_\_
2. \_\_\_\_\_
3. \_\_\_\_\_
4. \_\_\_\_\_
5. \_\_\_\_\_
6. \_\_\_\_\_
7. \_\_\_\_\_
8. \_\_\_\_\_
9. \_\_\_\_\_
10. \_\_\_\_\_
11. \_\_\_\_\_
12. \_\_\_\_\_
13. \_\_\_\_\_
14. \_\_\_\_\_
15. \_\_\_\_\_

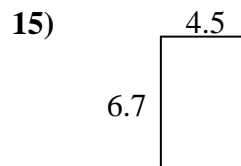
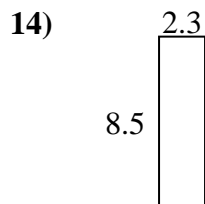
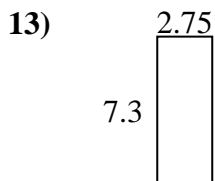
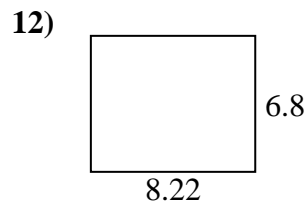
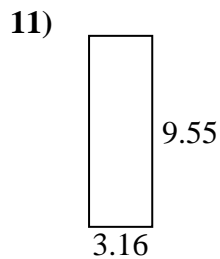
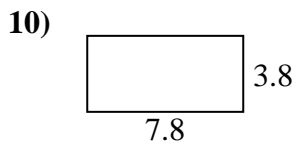
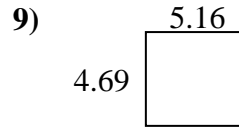
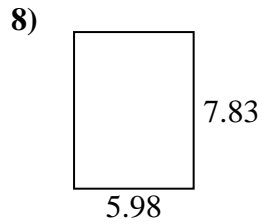
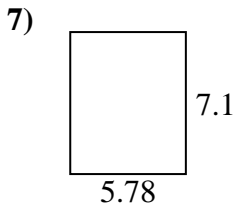
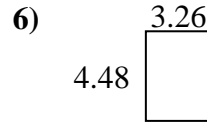
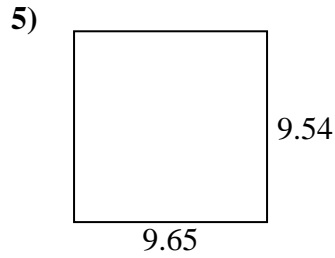
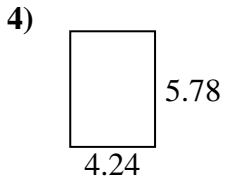
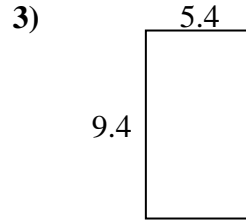
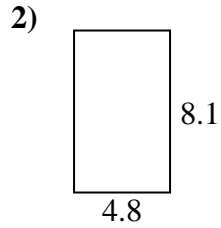
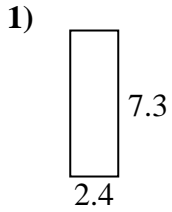


Finden Sie den Umfang und die Fläche jeder Figur. Antworten Sie auf das nächste Zehntel.

Antworten1. 30,7 25,22. 38,6 26,63. 20,0 19,14. 72,0 34,25. 15,4 16,86. 21,9 20,57. 12,2 15,88. 40,5 26,29. 14,0 17,110. 25,8 20,711. 30,1 23,512. 8,0 11,513. 70,5 33,614. 25,6 22,115. 17,2 20,5



Finden Sie den Umfang und die Fläche jeder Figur. Antworten Sie auf das nächste Zehntel.

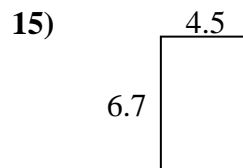
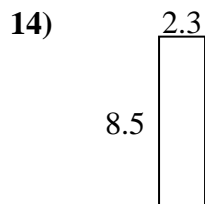
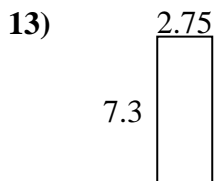
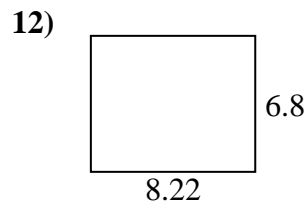
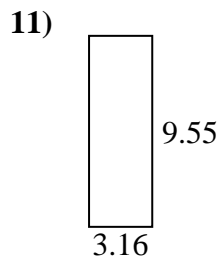
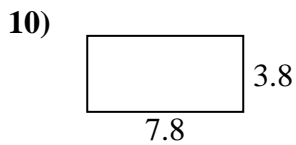
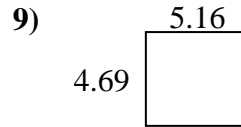
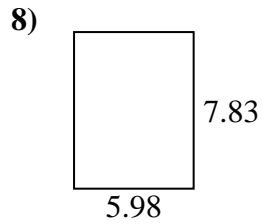
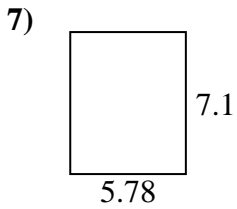
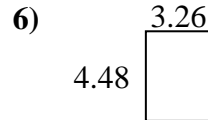
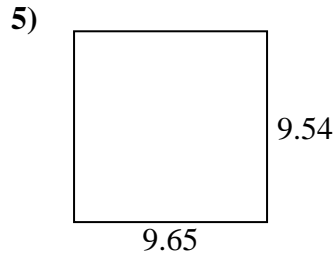
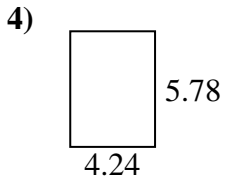
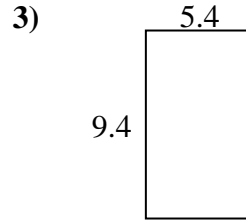
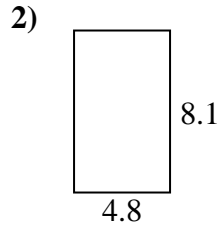
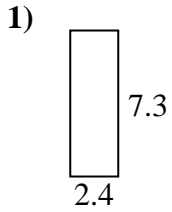


**Antworten**

1. \_\_\_\_\_
2. \_\_\_\_\_
3. \_\_\_\_\_
4. \_\_\_\_\_
5. \_\_\_\_\_
6. \_\_\_\_\_
7. \_\_\_\_\_
8. \_\_\_\_\_
9. \_\_\_\_\_
10. \_\_\_\_\_
11. \_\_\_\_\_
12. \_\_\_\_\_
13. \_\_\_\_\_
14. \_\_\_\_\_
15. \_\_\_\_\_



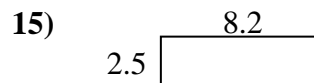
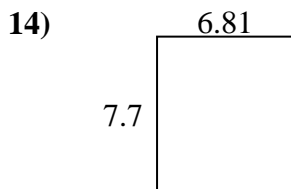
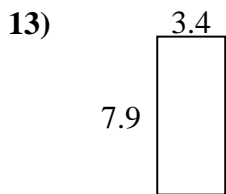
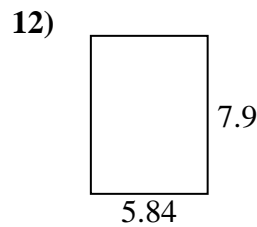
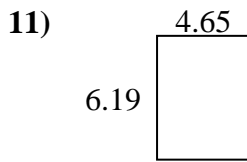
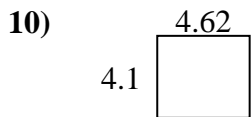
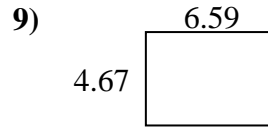
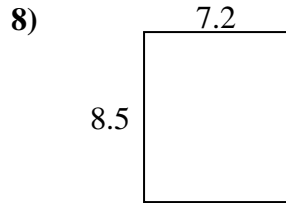
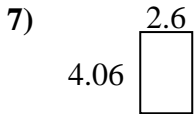
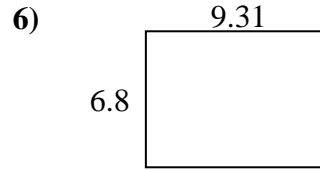
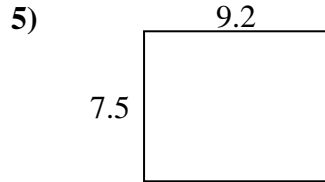
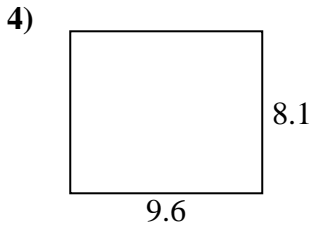
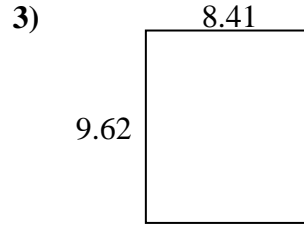
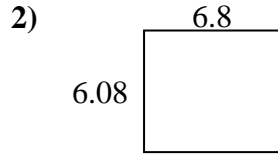
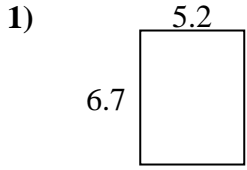
Finden Sie den Umfang und die Fläche jeder Figur. Antworten Sie auf das nächste Zehntel.

Antworten

1.	<u>17,5</u>	<u>19,4</u>
2.	<u>38,9</u>	<u>25,8</u>
3.	<u>50,8</u>	<u>29,6</u>
4.	<u>24,5</u>	<u>20,0</u>
5.	<u>92,1</u>	<u>38,4</u>
6.	<u>14,6</u>	<u>15,5</u>
7.	<u>41,0</u>	<u>25,8</u>
8.	<u>46,8</u>	<u>27,6</u>
9.	<u>24,2</u>	<u>19,7</u>
10.	<u>29,6</u>	<u>23,2</u>
11.	<u>30,2</u>	<u>25,4</u>
12.	<u>55,9</u>	<u>30,0</u>
13.	<u>20,1</u>	<u>20,1</u>
14.	<u>19,6</u>	<u>21,6</u>
15.	<u>30,2</u>	<u>22,4</u>



Finden Sie den Umfang und die Fläche jeder Figur. Antworten Sie auf das nächste Zehntel.

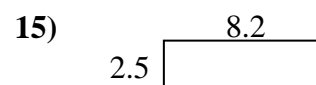
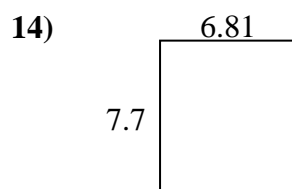
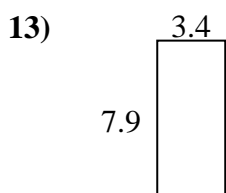
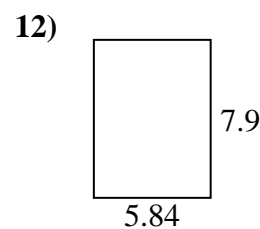
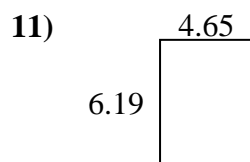
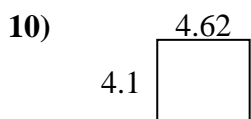
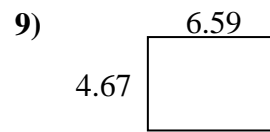
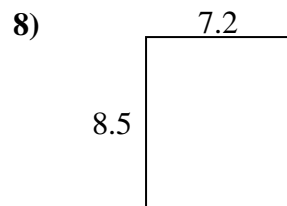
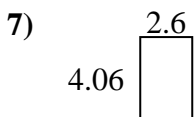
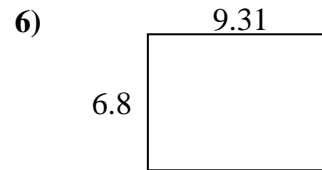
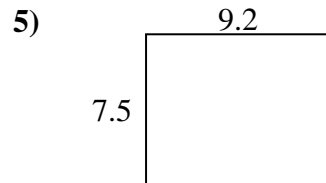
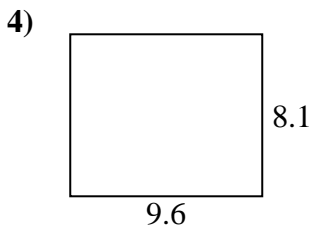
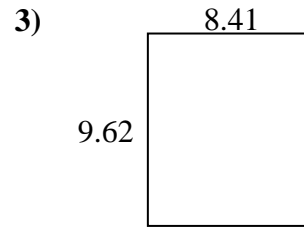
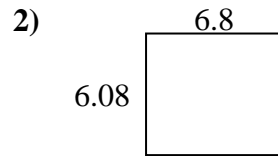
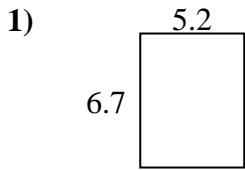


**Antworten**

1. \_\_\_\_\_
2. \_\_\_\_\_
3. \_\_\_\_\_
4. \_\_\_\_\_
5. \_\_\_\_\_
6. \_\_\_\_\_
7. \_\_\_\_\_
8. \_\_\_\_\_
9. \_\_\_\_\_
10. \_\_\_\_\_
11. \_\_\_\_\_
12. \_\_\_\_\_
13. \_\_\_\_\_
14. \_\_\_\_\_
15. \_\_\_\_\_



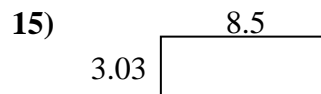
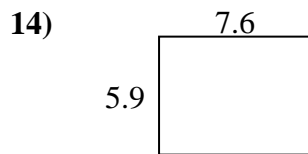
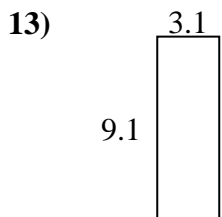
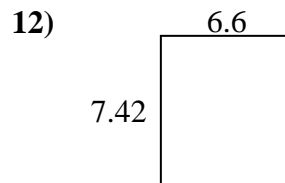
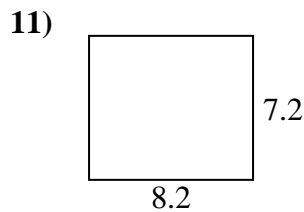
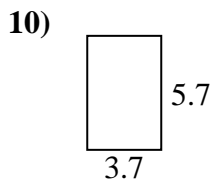
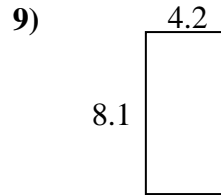
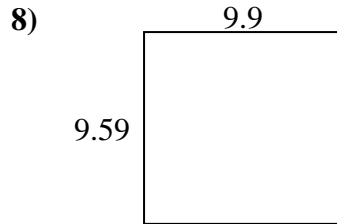
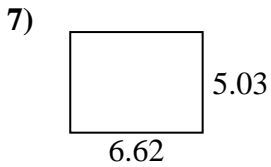
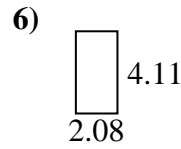
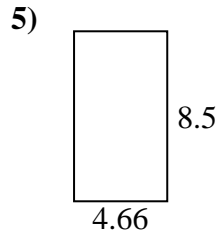
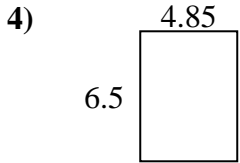
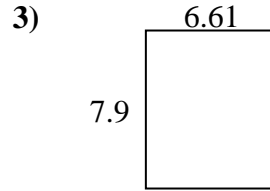
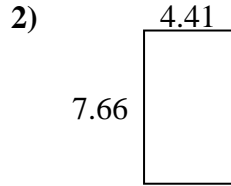
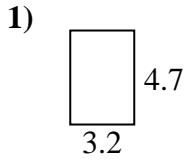
Finden Sie den Umfang und die Fläche jeder Figur. Antworten Sie auf das nächste Zehntel.

**Antworten**

1.	<u>34,8</u>	<u>23,8</u>
2.	<u>41,3</u>	<u>25,8</u>
3.	<u>80,9</u>	<u>36,1</u>
4.	<u>77,8</u>	<u>35,4</u>
5.	<u>69,0</u>	<u>33,4</u>
6.	<u>63,3</u>	<u>32,2</u>
7.	<u>10,6</u>	<u>13,3</u>
8.	<u>61,2</u>	<u>31,4</u>
9.	<u>30,8</u>	<u>22,5</u>
10.	<u>18,9</u>	<u>17,4</u>
11.	<u>28,8</u>	<u>21,7</u>
12.	<u>46,1</u>	<u>27,5</u>
13.	<u>26,9</u>	<u>22,6</u>
14.	<u>52,4</u>	<u>29,0</u>
15.	<u>20,5</u>	<u>21,4</u>



Finden Sie den Umfang und die Fläche jeder Figur. Antworten Sie auf das nächste Zehntel.

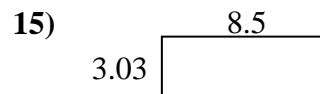
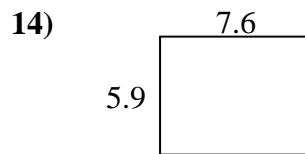
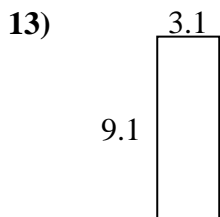
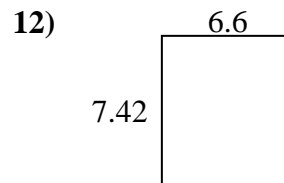
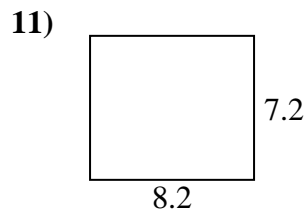
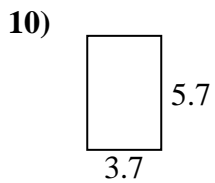
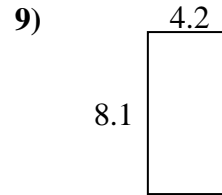
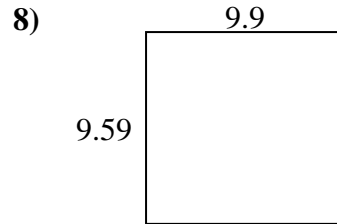
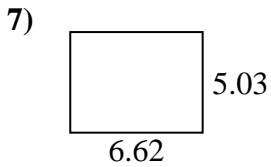
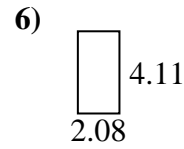
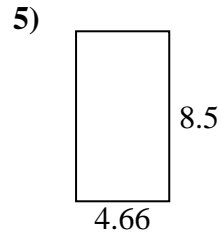
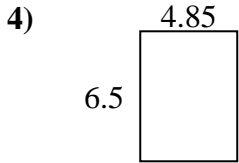
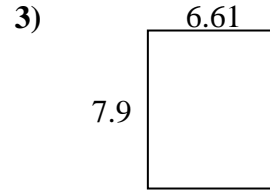
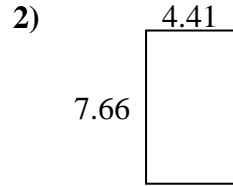
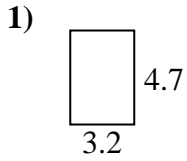


**Antworten**

1. \_\_\_\_\_
2. \_\_\_\_\_
3. \_\_\_\_\_
4. \_\_\_\_\_
5. \_\_\_\_\_
6. \_\_\_\_\_
7. \_\_\_\_\_
8. \_\_\_\_\_
9. \_\_\_\_\_
10. \_\_\_\_\_
11. \_\_\_\_\_
12. \_\_\_\_\_
13. \_\_\_\_\_
14. \_\_\_\_\_
15. \_\_\_\_\_



Finden Sie den Umfang und die Fläche jeder Figur. Antworten Sie auf das nächste Zehntel.

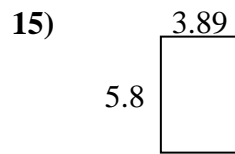
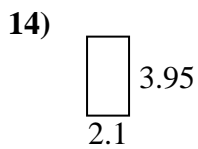
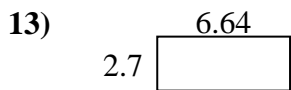
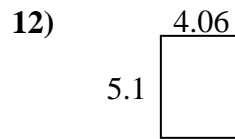
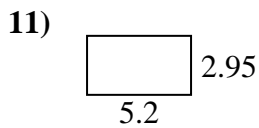
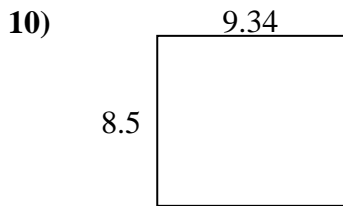
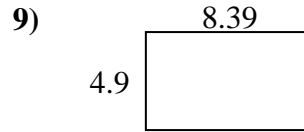
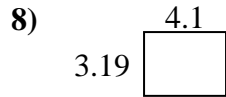
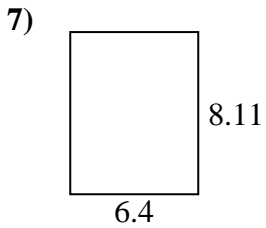
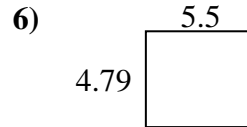
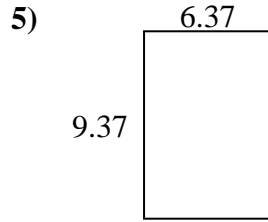
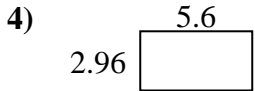
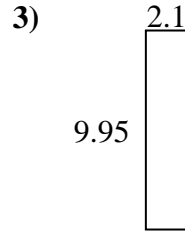
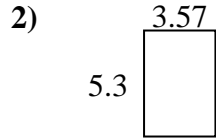
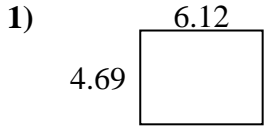
Antworten

1.	<u>15,0</u>	<u>15,8</u>
2.	<u>33,8</u>	<u>24,1</u>
3.	<u>52,2</u>	<u>29,0</u>
4.	<u>31,5</u>	<u>22,7</u>
5.	<u>39,6</u>	<u>26,3</u>
6.	<u>8,5</u>	<u>12,4</u>
7.	<u>33,3</u>	<u>23,3</u>
8.	<u>94,9</u>	<u>39,0</u>
9.	<u>34,0</u>	<u>24,6</u>
10.	<u>21,1</u>	<u>18,8</u>
11.	<u>59,0</u>	<u>30,8</u>
12.	<u>49,0</u>	<u>28,0</u>
13.	<u>28,2</u>	<u>24,4</u>
14.	<u>44,8</u>	<u>27,0</u>
15.	<u>25,8</u>	<u>23,1</u>





Finden Sie den Umfang und die Fläche jeder Figur. Antworten Sie auf das nächste Zehntel.

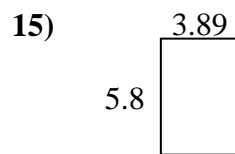
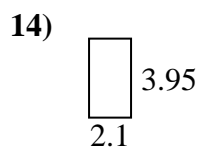
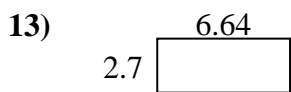
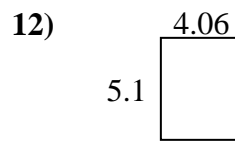
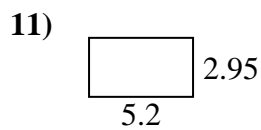
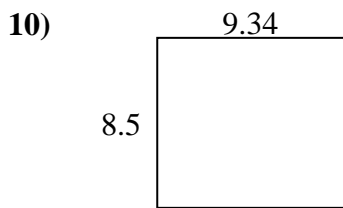
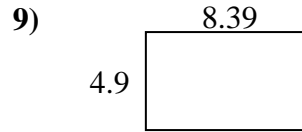
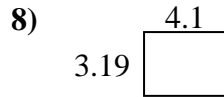
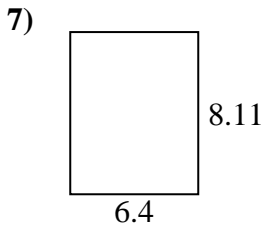
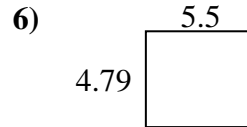
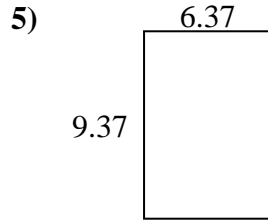
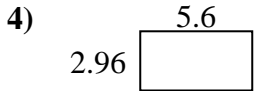
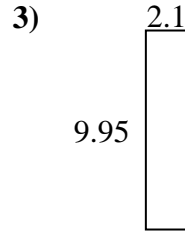
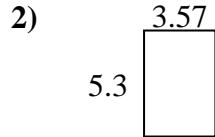
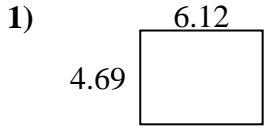


**Antworten**

1. \_\_\_\_\_
2. \_\_\_\_\_
3. \_\_\_\_\_
4. \_\_\_\_\_
5. \_\_\_\_\_
6. \_\_\_\_\_
7. \_\_\_\_\_
8. \_\_\_\_\_
9. \_\_\_\_\_
10. \_\_\_\_\_
11. \_\_\_\_\_
12. \_\_\_\_\_
13. \_\_\_\_\_
14. \_\_\_\_\_
15. \_\_\_\_\_

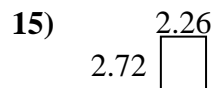
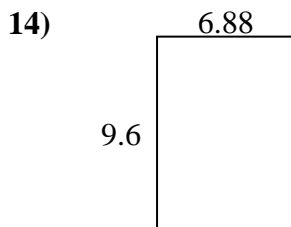

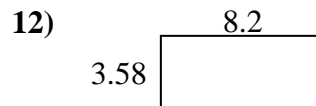
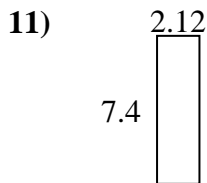
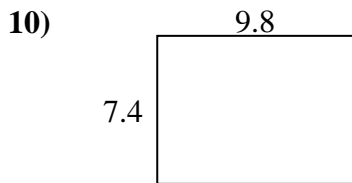
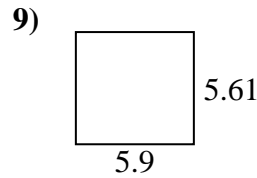
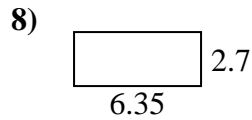
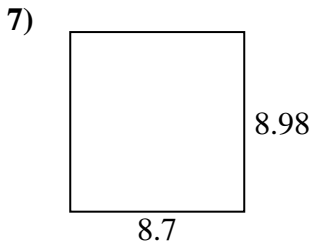
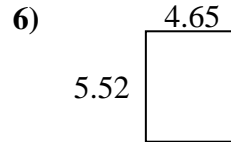
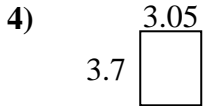
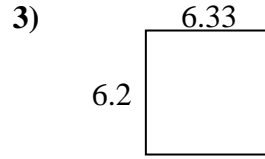
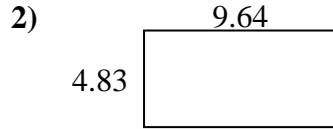
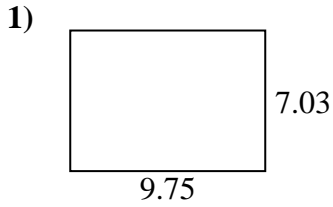


Finden Sie den Umfang und die Fläche jeder Figur. Antworten Sie auf das nächste Zehntel.

**Antworten**1. 28,7 21,62. 18,9 17,73. 20,9 24,14. 16,6 17,15. 59,7 31,56. 26,3 20,67. 51,9 29,08. 13,1 14,69. 41,1 26,610. 79,4 35,711. 15,3 16,312. 20,7 18,313. 17,9 18,714. 8,3 12,115. 22,6 19,4



Finden Sie den Umfang und die Fläche jeder Figur. Antworten Sie auf das nächste Zehntel.

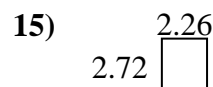
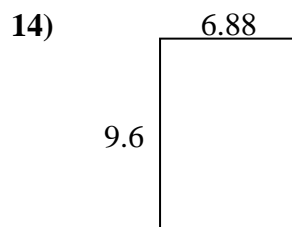
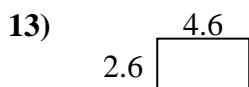
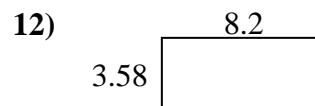
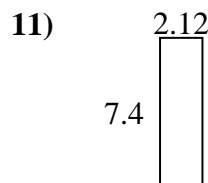
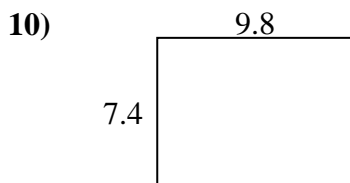
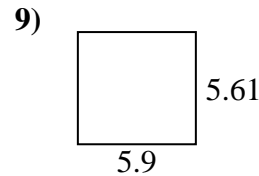
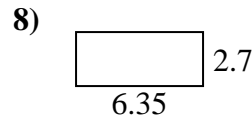
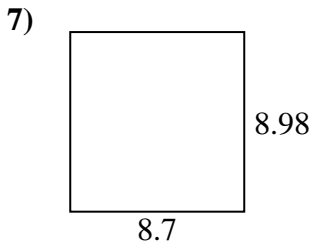
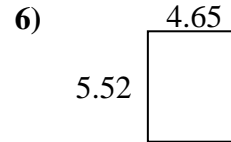
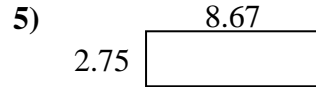
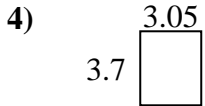
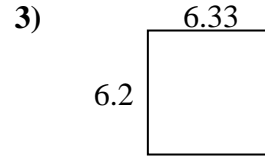
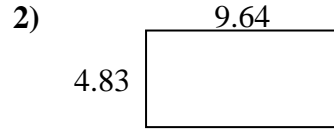
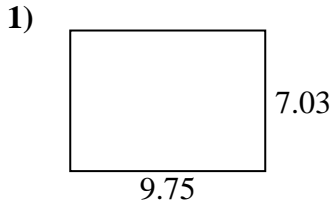


**Antworten**

1. \_\_\_\_\_
2. \_\_\_\_\_
3. \_\_\_\_\_
4. \_\_\_\_\_
5. \_\_\_\_\_
6. \_\_\_\_\_
7. \_\_\_\_\_
8. \_\_\_\_\_
9. \_\_\_\_\_
10. \_\_\_\_\_
11. \_\_\_\_\_
12. \_\_\_\_\_
13. \_\_\_\_\_
14. \_\_\_\_\_
15. \_\_\_\_\_



Finden Sie den Umfang und die Fläche jeder Figur. Antworten Sie auf das nächste Zehntel.

**Antworten**1. 68,5 33,62. 46,6 28,93. 39,2 25,14. 11,3 13,55. 23,8 22,86. 25,7 20,37. 78,1 35,48. 17,1 18,19. 33,1 23,010. 72,5 34,411. 15,7 19,012. 29,4 23,613. 12,0 14,414. 66,0 33,015. 6,1 10,0