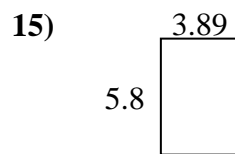
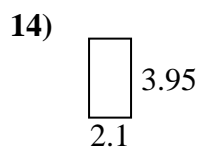
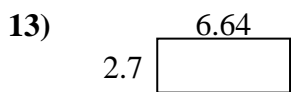
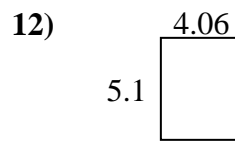
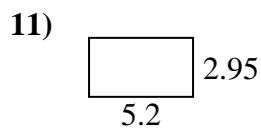
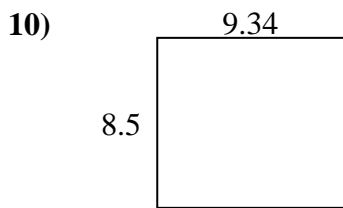
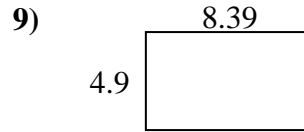
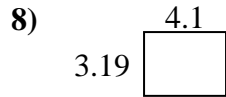
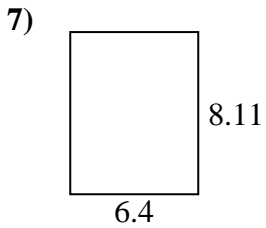
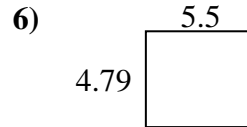
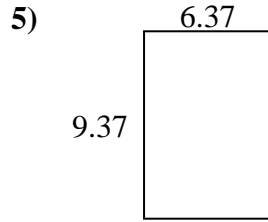
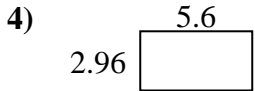
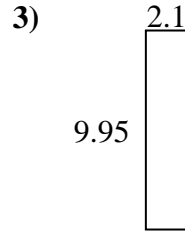
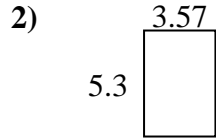
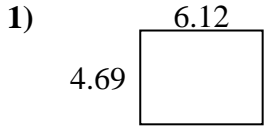




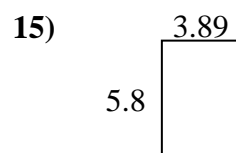
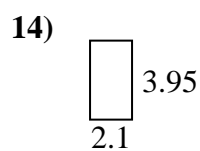
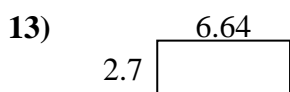
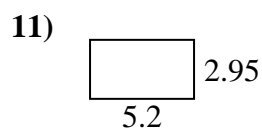
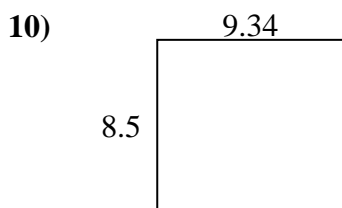
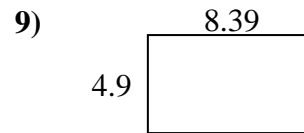
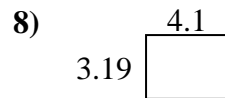
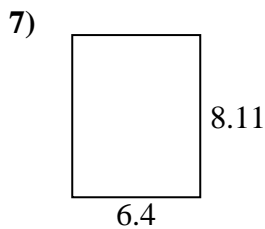
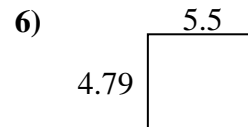
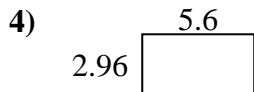
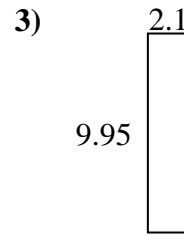
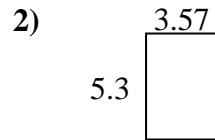
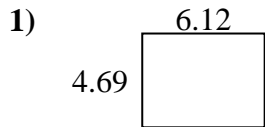
Finden Sie den Umfang und die Fläche jeder Figur. Antworten Sie auf das nächste Zehntel.

**Antworten**

1. \_\_\_\_\_
2. \_\_\_\_\_
3. \_\_\_\_\_
4. \_\_\_\_\_
5. \_\_\_\_\_
6. \_\_\_\_\_
7. \_\_\_\_\_
8. \_\_\_\_\_
9. \_\_\_\_\_
10. \_\_\_\_\_
11. \_\_\_\_\_
12. \_\_\_\_\_
13. \_\_\_\_\_
14. \_\_\_\_\_
15. \_\_\_\_\_



Finden Sie den Umfang und die Fläche jeder Figur. Antworten Sie auf das nächste Zehntel.

**Antworten**1. 28,7 21,62. 18,9 17,73. 20,9 24,14. 16,6 17,15. 59,7 31,56. 26,3 20,67. 51,9 29,08. 13,1 14,69. 41,1 26,610. 79,4 35,711. 15,3 16,312. 20,7 18,313. 17,9 18,714. 8,3 12,115. 22,6 19,4