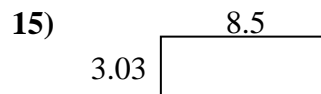
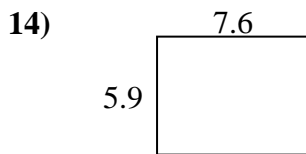
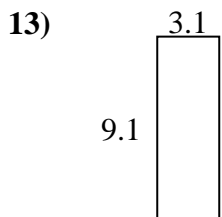
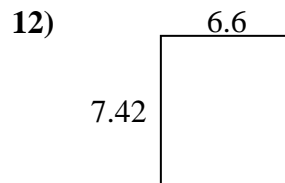
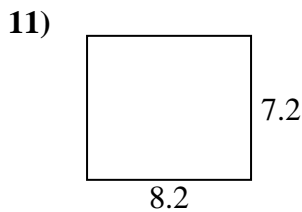
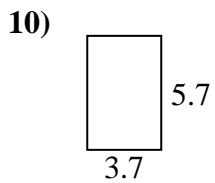
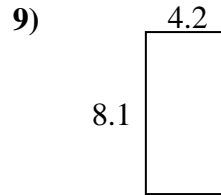
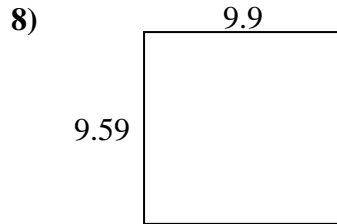
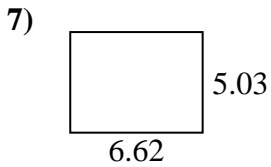
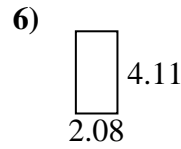
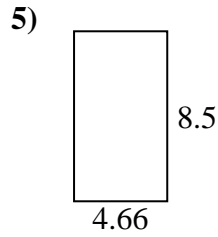
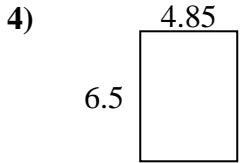
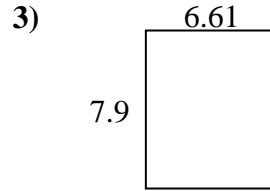
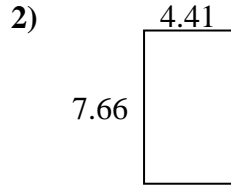
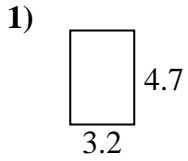




Finden Sie den Umfang und die Fläche jeder Figur. Antworten Sie auf das nächste Zehntel.

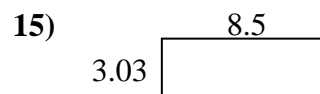
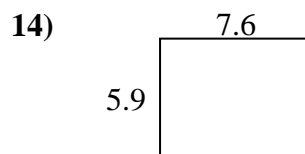
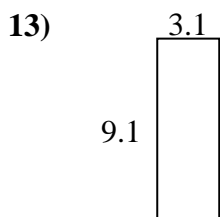
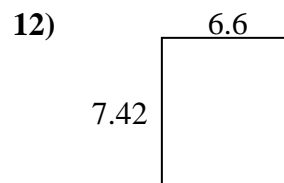
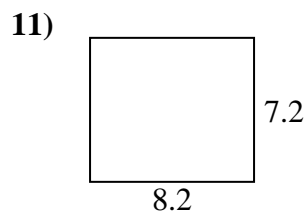
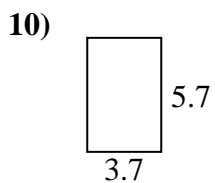
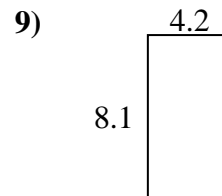
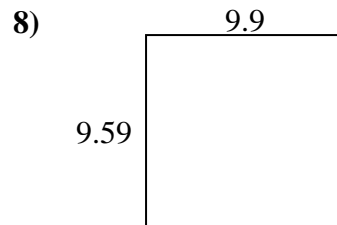
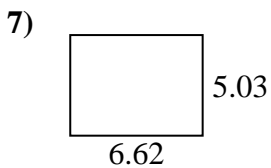
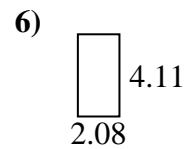
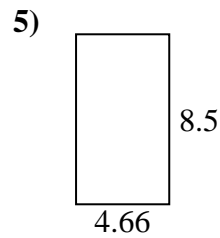
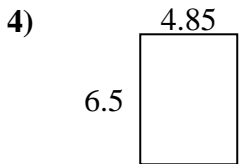
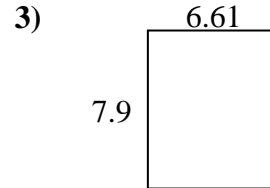
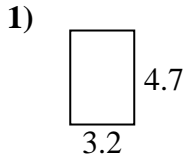


Antworten

1.	_____	_____
2.	_____	_____
3.	_____	_____
4.	_____	_____
5.	_____	_____
6.	_____	_____
7.	_____	_____
8.	_____	_____
9.	_____	_____
10.	_____	_____
11.	_____	_____
12.	_____	_____
13.	_____	_____
14.	_____	_____
15.	_____	_____



Finden Sie den Umfang und die Fläche jeder Figur. Antworten Sie auf das nächste Zehntel.

**Antworten**

1.	<u>15,0</u>	<u>15,8</u>
2.	<u>33,8</u>	<u>24,1</u>
3.	<u>52,2</u>	<u>29,0</u>
4.	<u>31,5</u>	<u>22,7</u>
5.	<u>39,6</u>	<u>26,3</u>
6.	<u>8,5</u>	<u>12,4</u>
7.	<u>33,3</u>	<u>23,3</u>
8.	<u>94,9</u>	<u>39,0</u>
9.	<u>34,0</u>	<u>24,6</u>
10.	<u>21,1</u>	<u>18,8</u>
11.	<u>59,0</u>	<u>30,8</u>
12.	<u>49,0</u>	<u>28,0</u>
13.	<u>28,2</u>	<u>24,4</u>
14.	<u>44,8</u>	<u>27,0</u>
15.	<u>25,8</u>	<u>23,1</u>