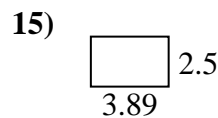
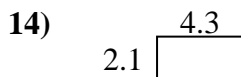
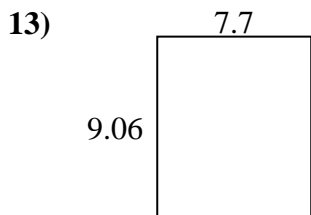
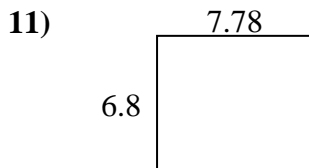
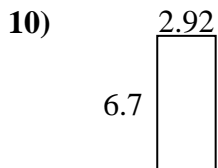
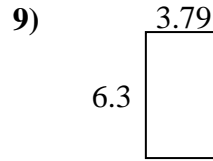
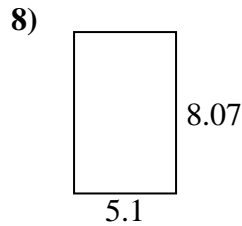
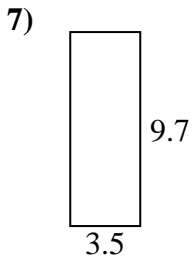
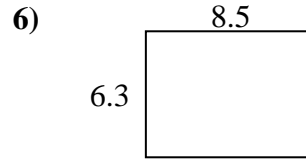
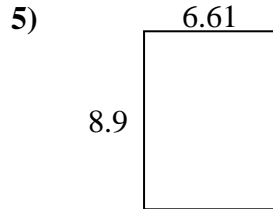
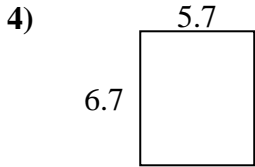
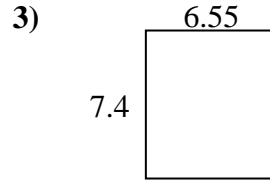
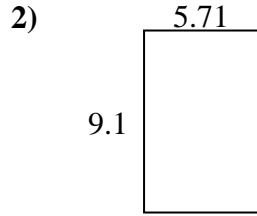
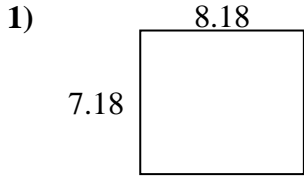




Finden Sie den Umfang und die Fläche jeder Figur. Antworten Sie auf das nächste Zehntel.

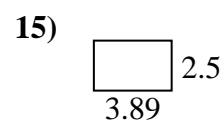
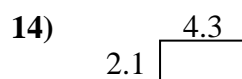
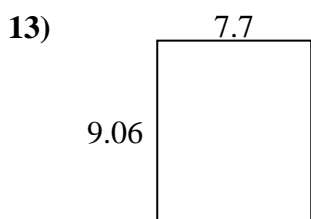
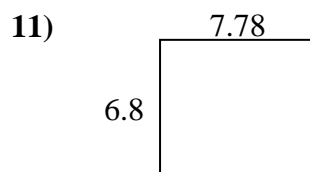
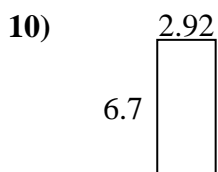
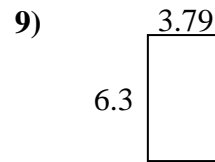
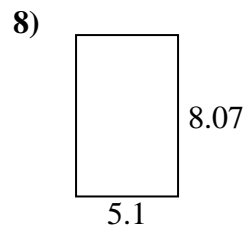
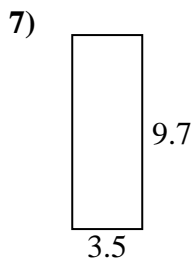
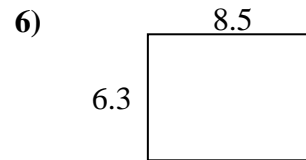
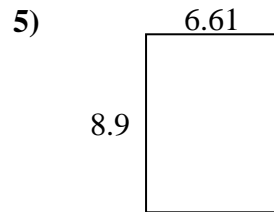
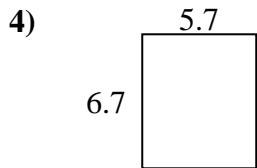
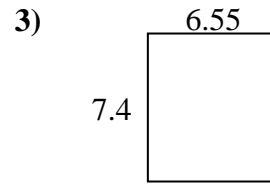
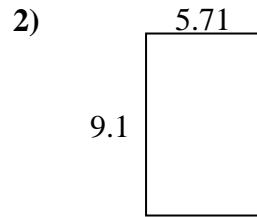
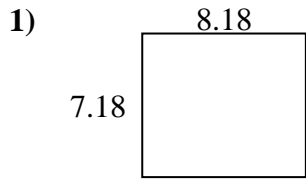


Antworten

1. _____
2. _____
3. _____
4. _____
5. _____
6. _____
7. _____
8. _____
9. _____
10. _____
11. _____
12. _____
13. _____
14. _____
15. _____



Finden Sie den Umfang und die Fläche jeder Figur. Antworten Sie auf das nächste Zehntel.

**Antworten**

1.	<u>58,7</u>	<u>30,7</u>
2.	<u>52,0</u>	<u>29,6</u>
3.	<u>48,5</u>	<u>27,9</u>
4.	<u>38,2</u>	<u>24,8</u>
5.	<u>58,8</u>	<u>31,0</u>
6.	<u>53,6</u>	<u>29,6</u>
7.	<u>34,0</u>	<u>26,4</u>
8.	<u>41,2</u>	<u>26,3</u>
9.	<u>23,9</u>	<u>20,2</u>
10.	<u>19,6</u>	<u>19,2</u>
11.	<u>52,9</u>	<u>29,2</u>
12.	<u>16,8</u>	<u>19,2</u>
13.	<u>69,8</u>	<u>33,5</u>
14.	<u>9,0</u>	<u>12,8</u>
15.	<u>9,7</u>	<u>12,8</u>