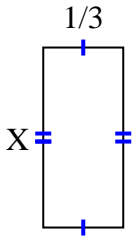




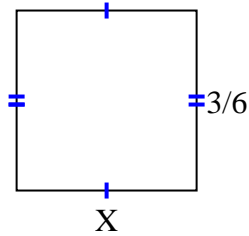
Finden Sie den Wert von X für jede Figur. Jede Zahl ist in Zentimetern (cm) angegeben. Nicht maßstabsgetreu.

Antworten

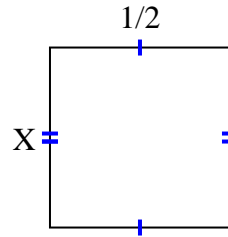
1) area = $\frac{3}{12} \text{ cm}^2$



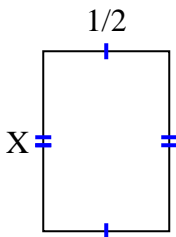
2) area = $\frac{3}{12} \text{ cm}^2$



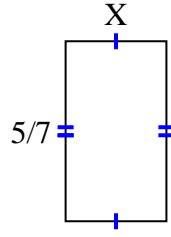
3) area = $\frac{5}{20} \text{ cm}^2$



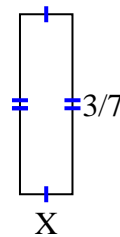
4) area = $\frac{5}{14} \text{ cm}^2$



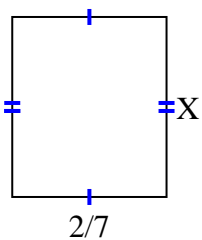
5) area = $\frac{20}{70} \text{ cm}^2$



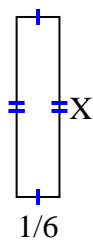
6) area = $\frac{3}{56} \text{ cm}^2$



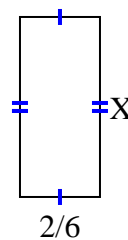
7) area = $\frac{4}{42} \text{ cm}^2$



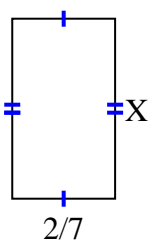
8) area = $\frac{7}{60} \text{ cm}^2$



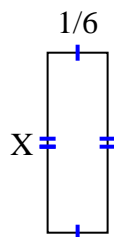
9) area = $\frac{6}{24} \text{ cm}^2$



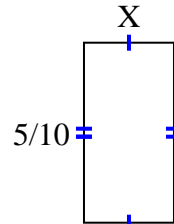
10) area = $\frac{2}{14} \text{ cm}^2$



11) area = $\frac{1}{12} \text{ cm}^2$



12) area = $\frac{5}{40} \text{ cm}^2$



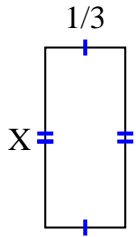
1. _____
2. _____
3. _____
4. _____
5. _____
6. _____
7. _____
8. _____
9. _____
10. _____
11. _____
12. _____



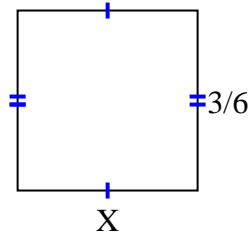
Finden Sie den Wert von X für jede Figur. Jede Zahl ist in Zentimetern (cm) angegeben.

Nicht maßstabsgetreu.

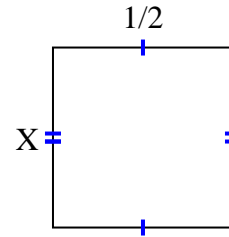
1) area = $\frac{3}{12} \text{ cm}^2$



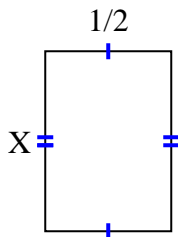
2) area = $\frac{3}{12} \text{ cm}^2$



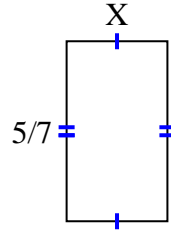
3) area = $\frac{5}{20} \text{ cm}^2$



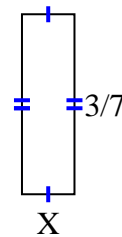
4) area = $\frac{5}{14} \text{ cm}^2$



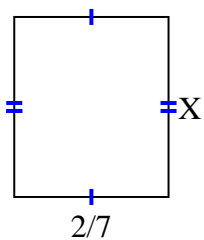
5) area = $\frac{20}{70} \text{ cm}^2$



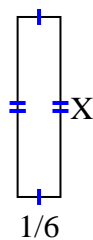
6) area = $\frac{3}{56} \text{ cm}^2$



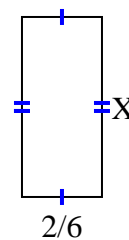
7) area = $\frac{4}{42} \text{ cm}^2$



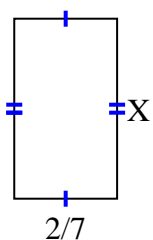
8) area = $\frac{7}{60} \text{ cm}^2$



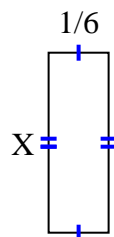
9) area = $\frac{6}{24} \text{ cm}^2$



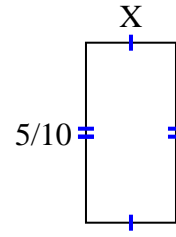
10) area = $\frac{2}{14} \text{ cm}^2$



11) area = $\frac{1}{12} \text{ cm}^2$



12) area = $\frac{5}{40} \text{ cm}^2$

**Antworten**

1. $\frac{3}{4}$

2. $\frac{1}{2}$

3. $\frac{5}{10}$

4. $\frac{5}{7}$

5. $\frac{4}{10}$

6. $\frac{1}{8}$

7. $\frac{2}{6}$

8. $\frac{7}{10}$

9. $\frac{3}{4}$

10. $\frac{1}{2}$

11. $\frac{1}{2}$

12. $\frac{1}{4}$