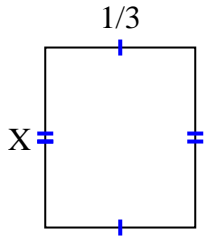




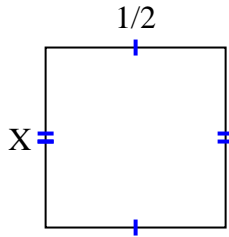
Finden Sie den Wert von X für jede Figur. Jede Zahl ist in Zentimetern (cm) angegeben. Nicht maßstabsgetreu.

Antworten

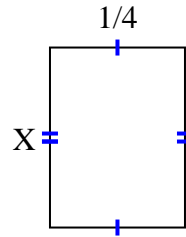
1) area = $\frac{2}{15} \text{ cm}^2$



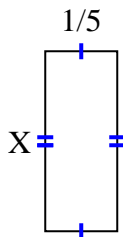
2) area = $\frac{1}{4} \text{ cm}^2$



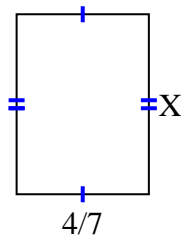
3) area = $\frac{1}{12} \text{ cm}^2$



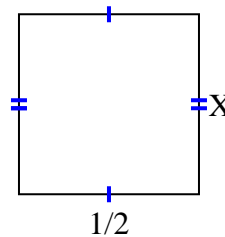
4) area = $\frac{2}{20} \text{ cm}^2$



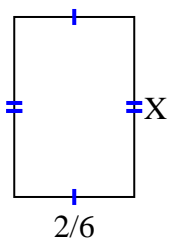
5) area = $\frac{28}{63} \text{ cm}^2$



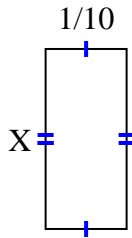
6) area = $\frac{5}{20} \text{ cm}^2$



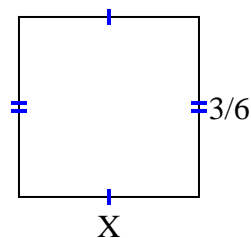
7) area = $\frac{2}{12} \text{ cm}^2$



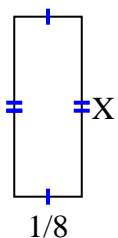
8) area = $\frac{2}{90} \text{ cm}^2$



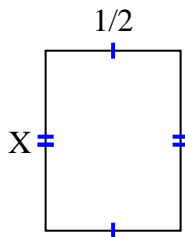
9) area = $\frac{3}{12} \text{ cm}^2$



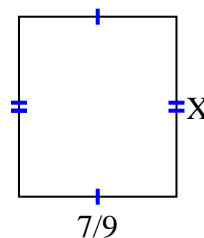
10) area = $\frac{1}{24} \text{ cm}^2$



11) area = $\frac{4}{12} \text{ cm}^2$



12) area = $\frac{56}{81} \text{ cm}^2$



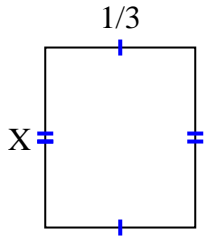
1. _____
2. _____
3. _____
4. _____
5. _____
6. _____
7. _____
8. _____
9. _____
10. _____
11. _____
12. _____



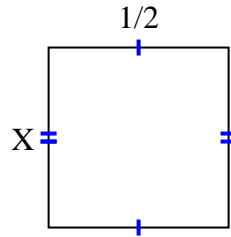
Finden Sie den Wert von X für jede Figur. Jede Zahl ist in Zentimetern (cm) angegeben.

Nicht maßstabsgetreu.

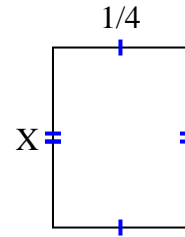
1) $\text{area} = \frac{2}{15} \text{ cm}^2$



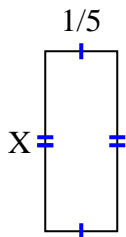
2) $\text{area} = \frac{1}{4} \text{ cm}^2$



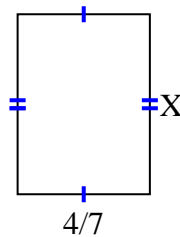
3) $\text{area} = \frac{1}{12} \text{ cm}^2$



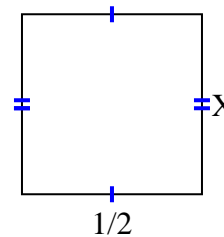
4) $\text{area} = \frac{2}{20} \text{ cm}^2$



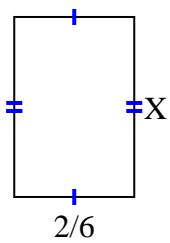
5) $\text{area} = \frac{28}{63} \text{ cm}^2$



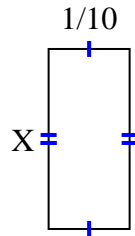
6) $\text{area} = \frac{5}{20} \text{ cm}^2$



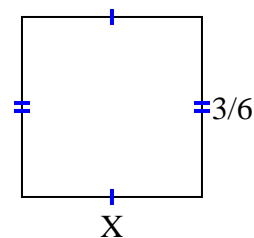
7) $\text{area} = \frac{2}{12} \text{ cm}^2$



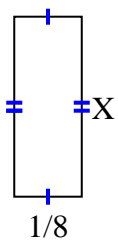
8) $\text{area} = \frac{2}{90} \text{ cm}^2$



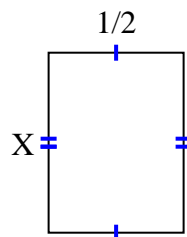
9) $\text{area} = \frac{3}{12} \text{ cm}^2$



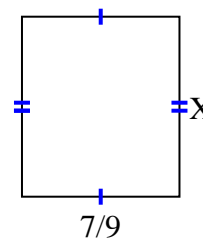
10) $\text{area} = \frac{1}{24} \text{ cm}^2$



11) $\text{area} = \frac{4}{12} \text{ cm}^2$



12) $\text{area} = \frac{56}{81} \text{ cm}^2$

**Antworten**

1. $\frac{2}{5}$

2. $\frac{1}{2}$

3. $\frac{1}{3}$

4. $\frac{2}{4}$

5. $\frac{7}{9}$

6. $\frac{5}{10}$

7. $\frac{1}{2}$

8. $\frac{2}{9}$

9. $\frac{1}{2}$

10. $\frac{1}{3}$

11. $\frac{4}{6}$

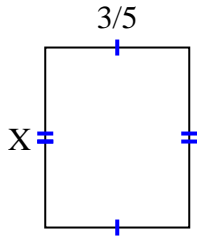
12. $\frac{8}{9}$



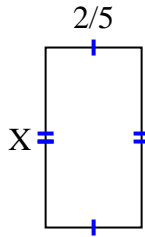
Finden Sie den Wert von X für jede Figur. Jede Zahl ist in Zentimetern (cm) angegeben. Nicht maßstabsgetreu.

Antworten

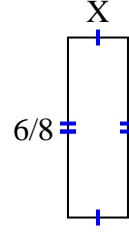
1) area = $\frac{18}{40} \text{ cm}^2$



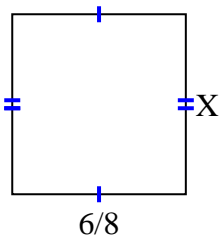
2) area = $\frac{6}{20} \text{ cm}^2$



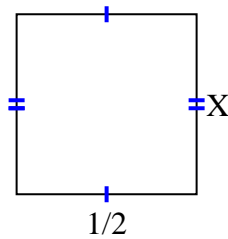
3) area = $\frac{6}{32} \text{ cm}^2$



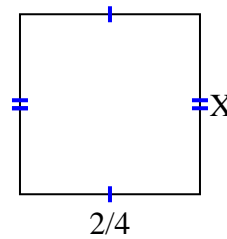
4) area = $\frac{42}{72} \text{ cm}^2$



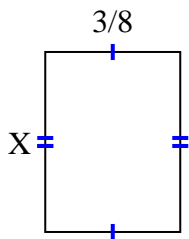
5) area = $\frac{5}{20} \text{ cm}^2$



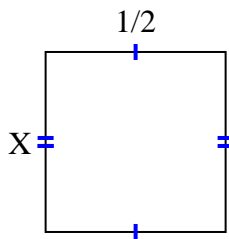
6) area = $\frac{6}{24} \text{ cm}^2$



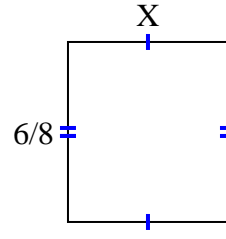
7) area = $\frac{3}{16} \text{ cm}^2$



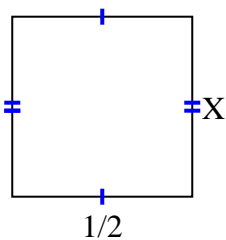
8) area = $\frac{2}{8} \text{ cm}^2$



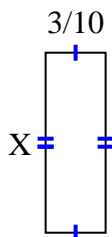
9) area = $\frac{12}{24} \text{ cm}^2$



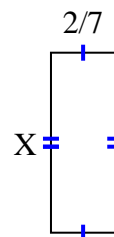
10) area = $\frac{1}{4} \text{ cm}^2$



11) area = $\frac{27}{100} \text{ cm}^2$



12) area = $\frac{16}{70} \text{ cm}^2$



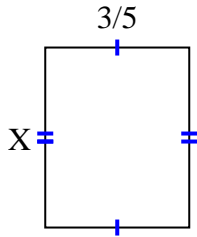
1. _____
2. _____
3. _____
4. _____
5. _____
6. _____
7. _____
8. _____
9. _____
10. _____
11. _____
12. _____



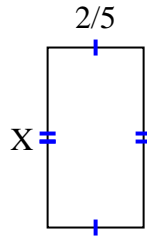
Finden Sie den Wert von X für jede Figur. Jede Zahl ist in Zentimetern (cm) angegeben.

Nicht maßstabsgetreu.

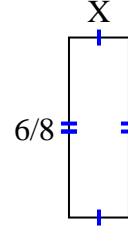
1) area = $\frac{18}{40} \text{ cm}^2$



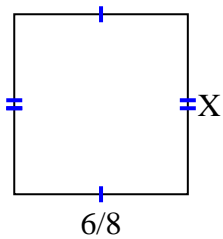
2) area = $\frac{6}{20} \text{ cm}^2$



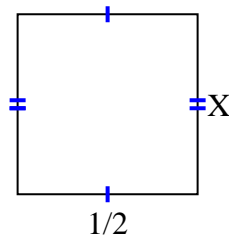
3) area = $\frac{6}{32} \text{ cm}^2$



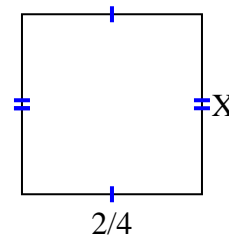
4) area = $\frac{42}{72} \text{ cm}^2$



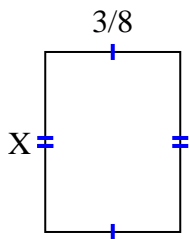
5) area = $\frac{5}{20} \text{ cm}^2$



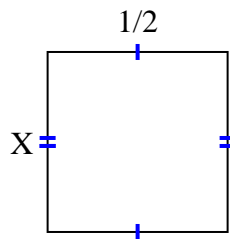
6) area = $\frac{6}{24} \text{ cm}^2$



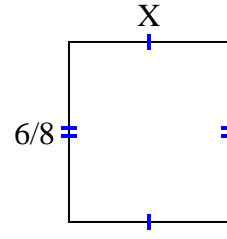
7) area = $\frac{3}{16} \text{ cm}^2$



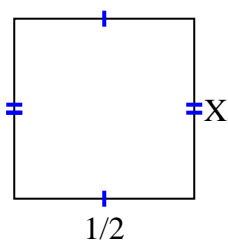
8) area = $\frac{2}{8} \text{ cm}^2$



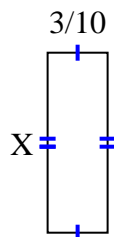
9) area = $\frac{12}{24} \text{ cm}^2$



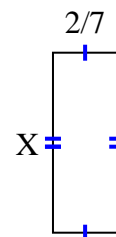
10) area = $\frac{1}{4} \text{ cm}^2$



11) area = $\frac{27}{100} \text{ cm}^2$



12) area = $\frac{16}{70} \text{ cm}^2$

**Antworten**

1. $\frac{6}{8}$

2. $\frac{3}{4}$

3. $\frac{1}{4}$

4. $\frac{7}{9}$

5. $\frac{5}{10}$

6. $\frac{3}{6}$

7. $\frac{1}{2}$

8. $\frac{2}{4}$

9. $\frac{2}{3}$

10. $\frac{1}{2}$

11. $\frac{9}{10}$

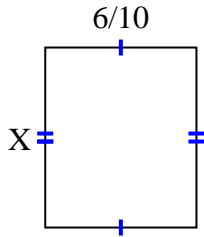
12. $\frac{8}{10}$



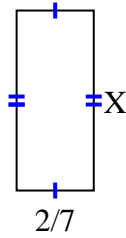
Finden Sie den Wert von X für jede Figur. Jede Zahl ist in Zentimetern (cm) angegeben.
Nicht maßstabsgetreu.

Antworten

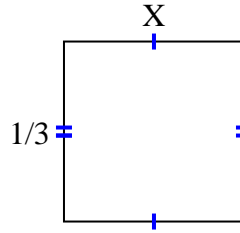
1) area = $\frac{30}{70} \text{ cm}^2$



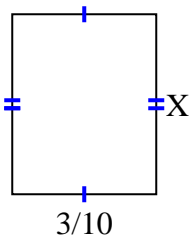
2) area = $\frac{4}{21} \text{ cm}^2$



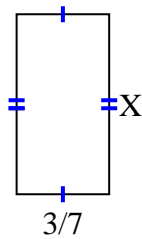
3) area = $\frac{1}{9} \text{ cm}^2$



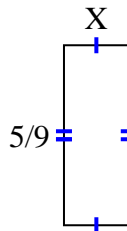
4) area = $\frac{9}{80} \text{ cm}^2$



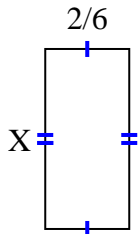
5) area = $\frac{15}{42} \text{ cm}^2$



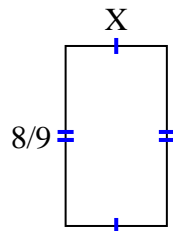
6) area = $\frac{5}{45} \text{ cm}^2$



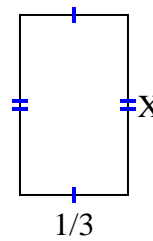
7) area = $\frac{10}{42} \text{ cm}^2$



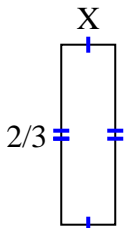
8) area = $\frac{40}{90} \text{ cm}^2$



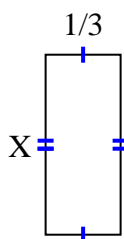
9) area = $\frac{5}{27} \text{ cm}^2$



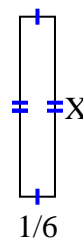
10) area = $\frac{2}{15} \text{ cm}^2$



11) area = $\frac{4}{15} \text{ cm}^2$



12) area = $\frac{6}{42} \text{ cm}^2$



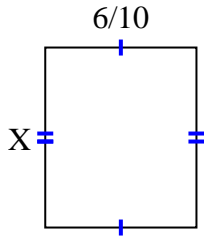
1. _____
2. _____
3. _____
4. _____
5. _____
6. _____
7. _____
8. _____
9. _____
10. _____
11. _____
12. _____



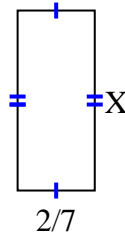
Finden Sie den Wert von X für jede Figur. Jede Zahl ist in Zentimetern (cm) angegeben.

Nicht maßstabsgetreu.

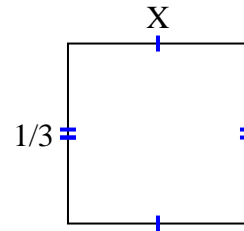
1) area = $\frac{30}{70} \text{ cm}^2$



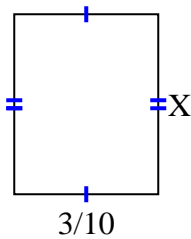
2) area = $\frac{4}{21} \text{ cm}^2$



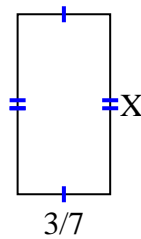
3) area = $\frac{1}{9} \text{ cm}^2$



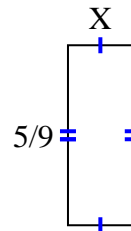
4) area = $\frac{9}{80} \text{ cm}^2$



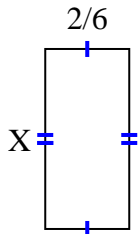
5) area = $\frac{15}{42} \text{ cm}^2$



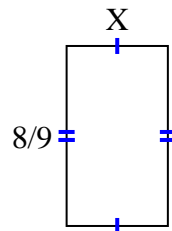
6) area = $\frac{5}{45} \text{ cm}^2$



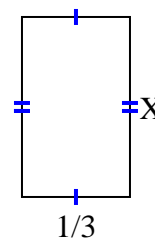
7) area = $\frac{10}{42} \text{ cm}^2$



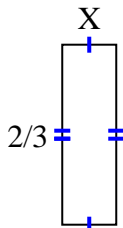
8) area = $\frac{40}{90} \text{ cm}^2$



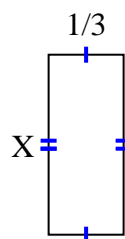
9) area = $\frac{5}{27} \text{ cm}^2$



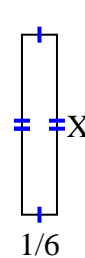
10) area = $\frac{2}{15} \text{ cm}^2$



11) area = $\frac{4}{15} \text{ cm}^2$



12) area = $\frac{6}{42} \text{ cm}^2$

**Antworten**

1. $\frac{5}{7}$

2. $\frac{2}{3}$

3. $\frac{1}{3}$

4. $\frac{3}{8}$

5. $\frac{5}{6}$

6. $\frac{1}{5}$

7. $\frac{5}{7}$

8. $\frac{5}{10}$

9. $\frac{5}{9}$

10. $\frac{1}{5}$

11. $\frac{4}{5}$

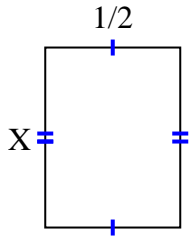
12. $\frac{6}{7}$



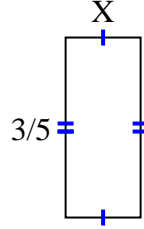
Finden Sie den Wert von X für jede Figur. Jede Zahl ist in Zentimetern (cm) angegeben. Nicht maßstabsgetreu.

Antworten

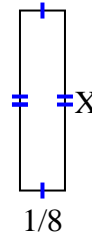
1) area = $\frac{2}{6} \text{ cm}^2$



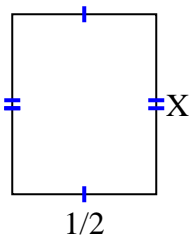
2) area = $\frac{3}{20} \text{ cm}^2$



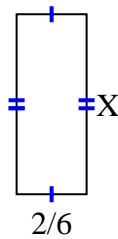
3) area = $\frac{1}{16} \text{ cm}^2$



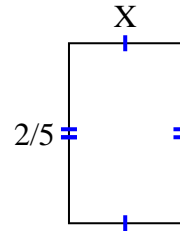
4) area = $\frac{5}{16} \text{ cm}^2$



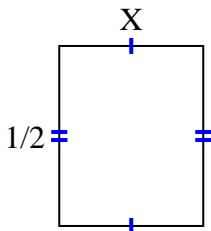
5) area = $\frac{12}{42} \text{ cm}^2$



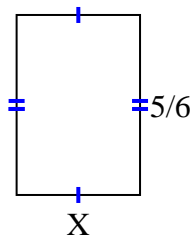
6) area = $\frac{4}{40} \text{ cm}^2$



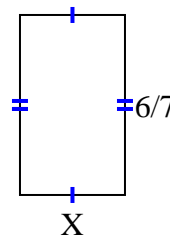
7) area = $\frac{2}{10} \text{ cm}^2$



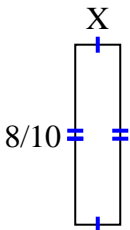
8) area = $\frac{20}{42} \text{ cm}^2$



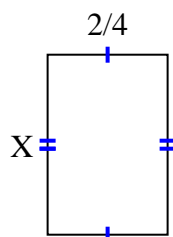
9) area = $\frac{12}{28} \text{ cm}^2$



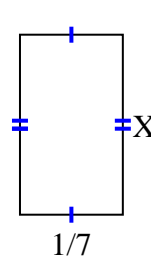
10) area = $\frac{8}{50} \text{ cm}^2$



11) area = $\frac{12}{32} \text{ cm}^2$



12) area = $\frac{1}{28} \text{ cm}^2$



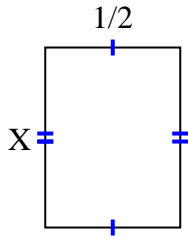
1. _____
2. _____
3. _____
4. _____
5. _____
6. _____
7. _____
8. _____
9. _____
10. _____
11. _____
12. _____



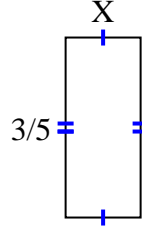
Finden Sie den Wert von X für jede Figur. Jede Zahl ist in Zentimetern (cm) angegeben.

Nicht maßstabsgetreu.

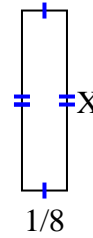
1) $\text{area} = \frac{2}{6} \text{ cm}^2$



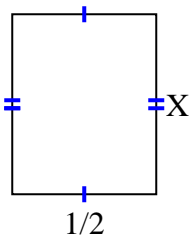
2) $\text{area} = \frac{3}{20} \text{ cm}^2$



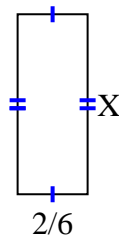
3) $\text{area} = \frac{1}{16} \text{ cm}^2$



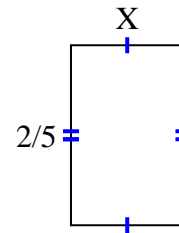
4) $\text{area} = \frac{5}{16} \text{ cm}^2$



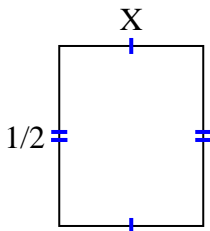
5) $\text{area} = \frac{12}{42} \text{ cm}^2$



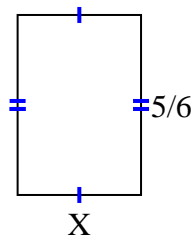
6) $\text{area} = \frac{4}{40} \text{ cm}^2$



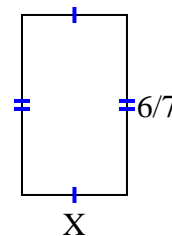
7) $\text{area} = \frac{2}{10} \text{ cm}^2$



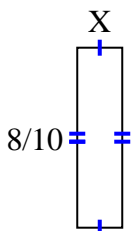
8) $\text{area} = \frac{20}{42} \text{ cm}^2$



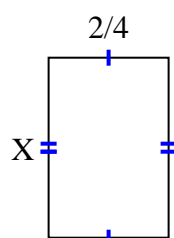
9) $\text{area} = \frac{12}{28} \text{ cm}^2$



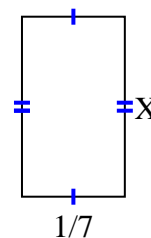
10) $\text{area} = \frac{8}{50} \text{ cm}^2$



11) $\text{area} = \frac{12}{32} \text{ cm}^2$



12) $\text{area} = \frac{1}{28} \text{ cm}^2$

**Antworten**

1. $\frac{2}{3}$

2. $\frac{1}{4}$

3. $\frac{1}{2}$

4. $\frac{5}{8}$

5. $\frac{6}{7}$

6. $\frac{2}{8}$

7. $\frac{2}{5}$

8. $\frac{4}{7}$

9. $\frac{2}{4}$

10. $\frac{1}{5}$

11. $\frac{6}{8}$

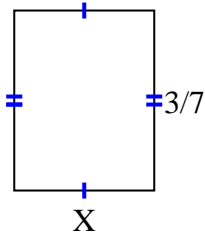
12. $\frac{1}{4}$



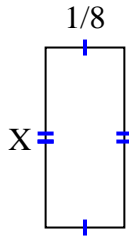
Finden Sie den Wert von X für jede Figur. Jede Zahl ist in Zentimetern (cm) angegeben. Nicht maßstabsgetreu.

Antworten

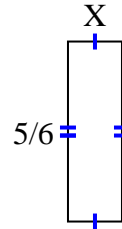
1) area = $\frac{9}{63} \text{ cm}^2$



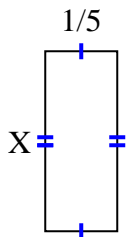
2) area = $\frac{2}{56} \text{ cm}^2$



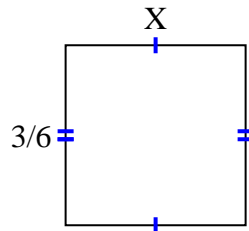
3) area = $\frac{5}{24} \text{ cm}^2$



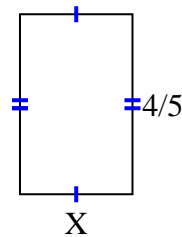
4) area = $\frac{1}{10} \text{ cm}^2$



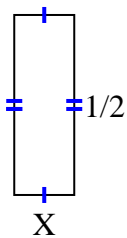
5) area = $\frac{6}{24} \text{ cm}^2$



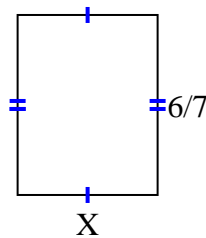
6) area = $\frac{4}{10} \text{ cm}^2$



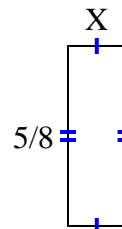
7) area = $\frac{1}{12} \text{ cm}^2$



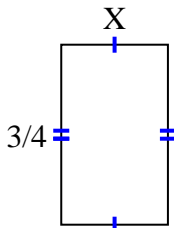
8) area = $\frac{36}{63} \text{ cm}^2$



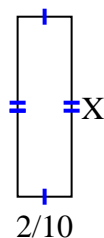
9) area = $\frac{5}{40} \text{ cm}^2$



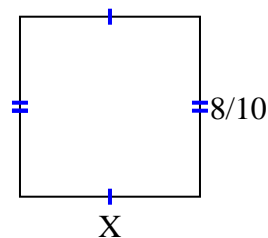
10) area = $\frac{12}{36} \text{ cm}^2$



11) area = $\frac{8}{60} \text{ cm}^2$



12) area = $\frac{64}{100} \text{ cm}^2$



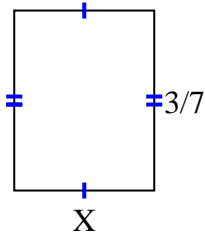
1. _____
2. _____
3. _____
4. _____
5. _____
6. _____
7. _____
8. _____
9. _____
10. _____
11. _____
12. _____



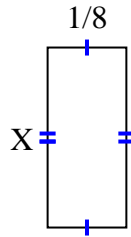
Finden Sie den Wert von X für jede Figur. Jede Zahl ist in Zentimetern (cm) angegeben.

Nicht maßstabsgetreu.

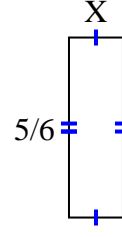
1) $\text{area} = \frac{9}{63} \text{ cm}^2$



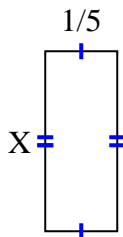
2) $\text{area} = \frac{2}{56} \text{ cm}^2$



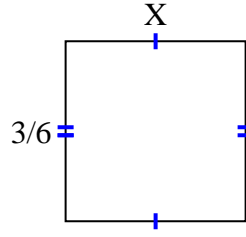
3) $\text{area} = \frac{5}{24} \text{ cm}^2$



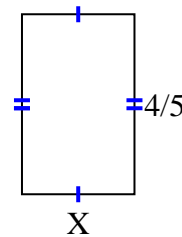
4) $\text{area} = \frac{1}{10} \text{ cm}^2$



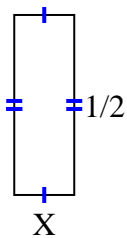
5) $\text{area} = \frac{6}{24} \text{ cm}^2$



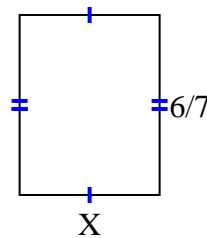
6) $\text{area} = \frac{4}{10} \text{ cm}^2$



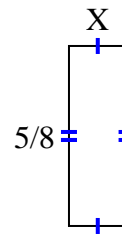
7) $\text{area} = \frac{1}{12} \text{ cm}^2$



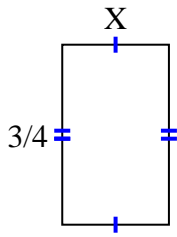
8) $\text{area} = \frac{36}{63} \text{ cm}^2$



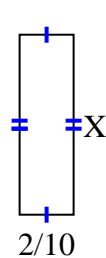
9) $\text{area} = \frac{5}{40} \text{ cm}^2$



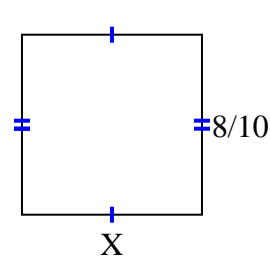
10) $\text{area} = \frac{12}{36} \text{ cm}^2$



11) $\text{area} = \frac{8}{60} \text{ cm}^2$



12) $\text{area} = \frac{64}{100} \text{ cm}^2$

**Antworten**

1. $\frac{3}{9}$

2. $\frac{2}{7}$

3. $\frac{1}{4}$

4. $\frac{1}{2}$

5. $\frac{2}{4}$

6. $\frac{1}{2}$

7. $\frac{1}{6}$

8. $\frac{6}{9}$

9. $\frac{1}{5}$

10. $\frac{4}{9}$

11. $\frac{4}{6}$

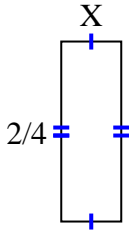
12. $\frac{8}{10}$



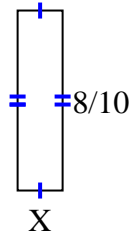
Finden Sie den Wert von X für jede Figur. Jede Zahl ist in Zentimetern (cm) angegeben. Nicht maßstabsgetreu.

Antworten

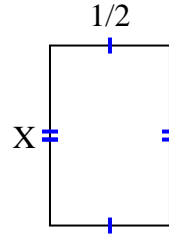
1) area = $\frac{2}{24} \text{ cm}^2$



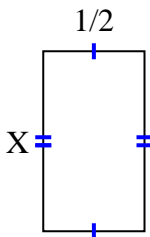
2) area = $\frac{8}{50} \text{ cm}^2$



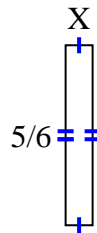
3) area = $\frac{6}{16} \text{ cm}^2$



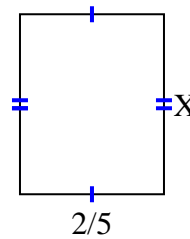
4) area = $\frac{8}{18} \text{ cm}^2$



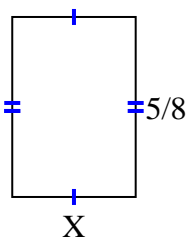
5) area = $\frac{5}{48} \text{ cm}^2$



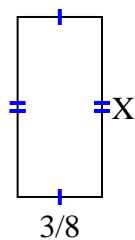
6) area = $\frac{2}{10} \text{ cm}^2$



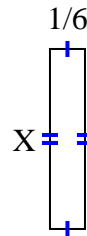
7) area = $\frac{15}{56} \text{ cm}^2$



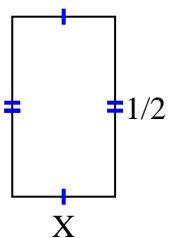
8) area = $\frac{24}{80} \text{ cm}^2$



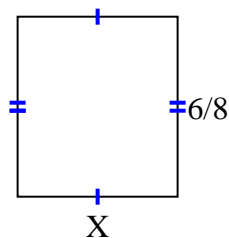
9) area = $\frac{6}{42} \text{ cm}^2$



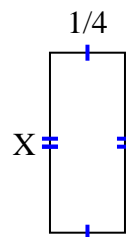
10) area = $\frac{2}{14} \text{ cm}^2$



11) area = $\frac{24}{48} \text{ cm}^2$



12) area = $\frac{3}{20} \text{ cm}^2$



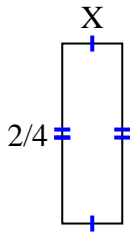
1. _____
2. _____
3. _____
4. _____
5. _____
6. _____
7. _____
8. _____
9. _____
10. _____
11. _____
12. _____



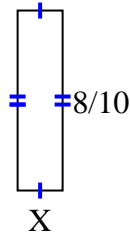
Finden Sie den Wert von X für jede Figur. Jede Zahl ist in Zentimetern (cm) angegeben.

Nicht maßstabsgetreu.

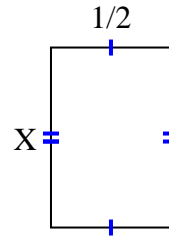
1) area = $\frac{2}{24} \text{ cm}^2$



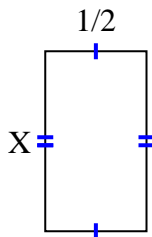
2) area = $\frac{8}{50} \text{ cm}^2$



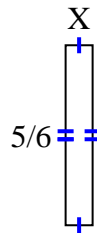
3) area = $\frac{6}{16} \text{ cm}^2$



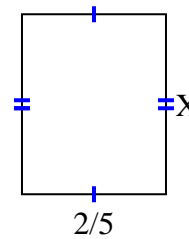
4) area = $\frac{8}{18} \text{ cm}^2$



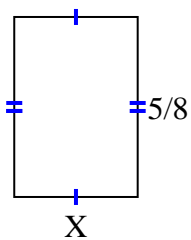
5) area = $\frac{5}{48} \text{ cm}^2$



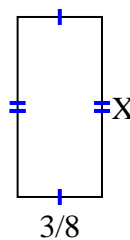
6) area = $\frac{2}{10} \text{ cm}^2$



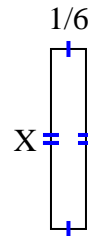
7) area = $\frac{15}{56} \text{ cm}^2$



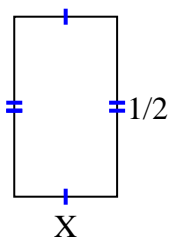
8) area = $\frac{24}{80} \text{ cm}^2$



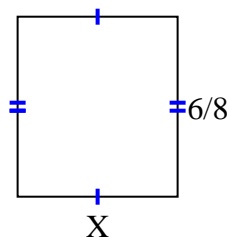
9) area = $\frac{6}{42} \text{ cm}^2$



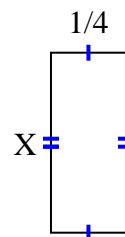
10) area = $\frac{2}{14} \text{ cm}^2$



11) area = $\frac{24}{48} \text{ cm}^2$



12) area = $\frac{3}{20} \text{ cm}^2$

**Antworten**

1. $\frac{1}{6}$

2. $\frac{1}{5}$

3. $\frac{6}{8}$

4. $\frac{8}{9}$

5. $\frac{1}{8}$

6. $\frac{1}{2}$

7. $\frac{3}{7}$

8. $\frac{8}{10}$

9. $\frac{6}{7}$

10. $\frac{2}{7}$

11. $\frac{4}{6}$

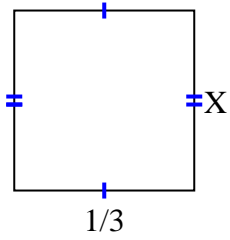
12. $\frac{3}{5}$



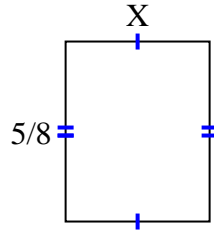
Finden Sie den Wert von X für jede Figur. Jede Zahl ist in Zentimetern (cm) angegeben. Nicht maßstabsgetreu.

Antworten

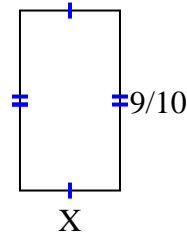
1) area = $\frac{2}{18} \text{ cm}^2$



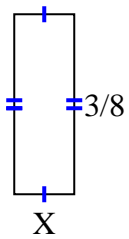
2) area = $\frac{10}{32} \text{ cm}^2$



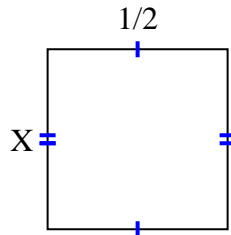
3) area = $\frac{9}{20} \text{ cm}^2$



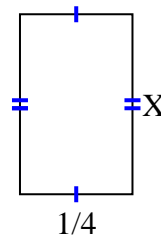
4) area = $\frac{3}{64} \text{ cm}^2$



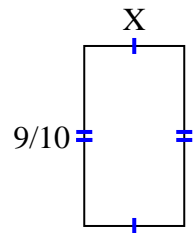
5) area = $\frac{2}{8} \text{ cm}^2$



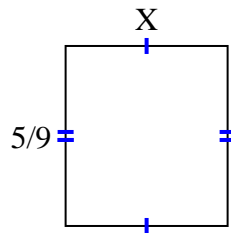
6) area = $\frac{4}{40} \text{ cm}^2$



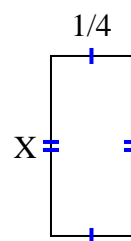
7) area = $\frac{36}{80} \text{ cm}^2$



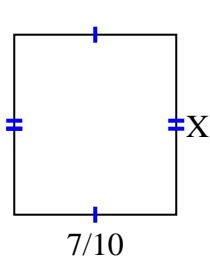
8) area = $\frac{5}{18} \text{ cm}^2$



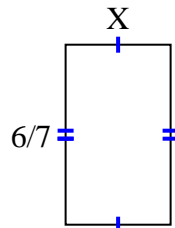
9) area = $\frac{5}{36} \text{ cm}^2$



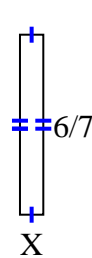
10) area = $\frac{49}{90} \text{ cm}^2$



11) area = $\frac{12}{28} \text{ cm}^2$



12) area = $\frac{6}{63} \text{ cm}^2$



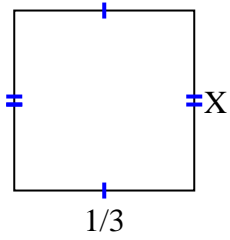
1. _____
2. _____
3. _____
4. _____
5. _____
6. _____
7. _____
8. _____
9. _____
10. _____
11. _____
12. _____



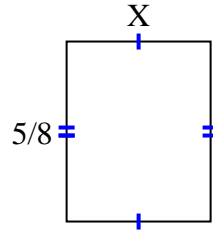
Finden Sie den Wert von X für jede Figur. Jede Zahl ist in Zentimetern (cm) angegeben.

Nicht maßstabsgetreu.

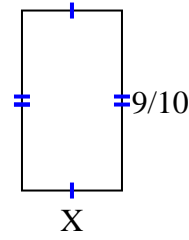
1) area = $\frac{2}{18} \text{ cm}^2$



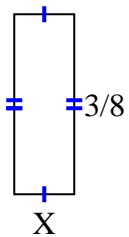
2) area = $\frac{10}{32} \text{ cm}^2$



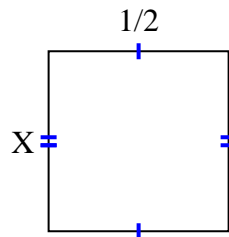
3) area = $\frac{9}{20} \text{ cm}^2$



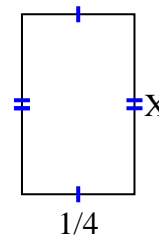
4) area = $\frac{3}{64} \text{ cm}^2$



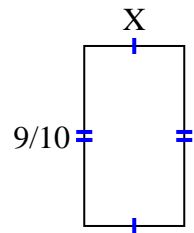
5) area = $\frac{2}{8} \text{ cm}^2$



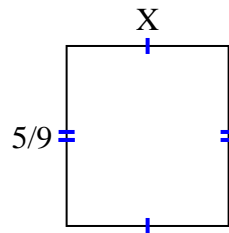
6) area = $\frac{4}{40} \text{ cm}^2$



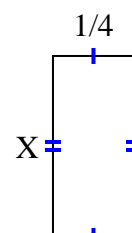
7) area = $\frac{36}{80} \text{ cm}^2$



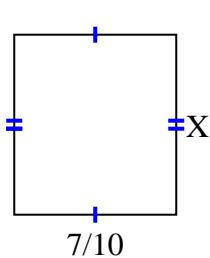
8) area = $\frac{5}{18} \text{ cm}^2$



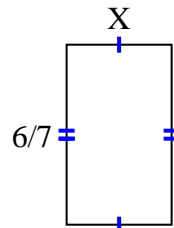
9) area = $\frac{5}{36} \text{ cm}^2$



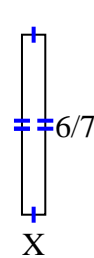
10) area = $\frac{49}{90} \text{ cm}^2$



11) area = $\frac{12}{28} \text{ cm}^2$



12) area = $\frac{6}{63} \text{ cm}^2$

**Antworten**

1. $\frac{2}{6}$

2. $\frac{2}{4}$

3. $\frac{1}{2}$

4. $\frac{1}{8}$

5. $\frac{2}{4}$

6. $\frac{4}{10}$

7. $\frac{4}{8}$

8. $\frac{1}{2}$

9. $\frac{5}{9}$

10. $\frac{7}{9}$

11. $\frac{2}{4}$

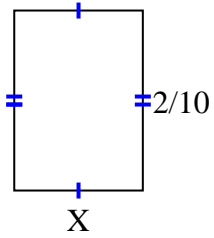
12. $\frac{1}{9}$



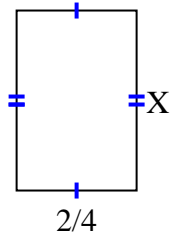
Finden Sie den Wert von X für jede Figur. Jede Zahl ist in Zentimetern (cm) angegeben. Nicht maßstabsgetreu.

Antworten

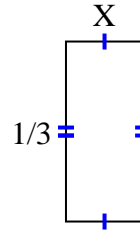
1) area = $\frac{2}{70} \text{ cm}^2$



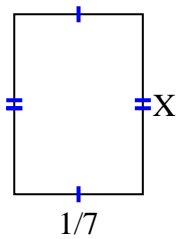
2) area = $\frac{12}{32} \text{ cm}^2$



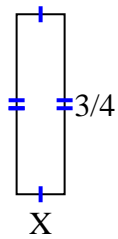
3) area = $\frac{1}{21} \text{ cm}^2$



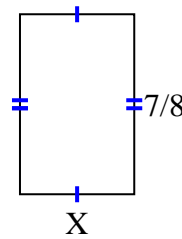
4) area = $\frac{2}{70} \text{ cm}^2$



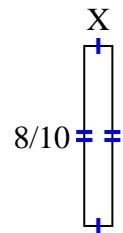
5) area = $\frac{3}{20} \text{ cm}^2$



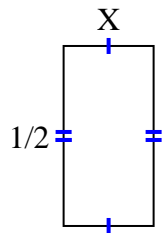
6) area = $\frac{35}{72} \text{ cm}^2$



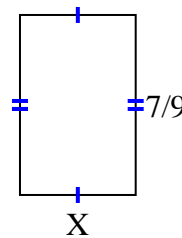
7) area = $\frac{8}{80} \text{ cm}^2$



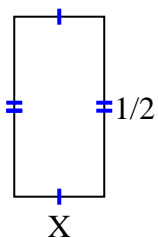
8) area = $\frac{2}{16} \text{ cm}^2$



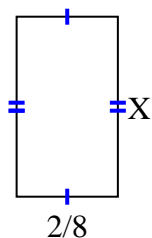
9) area = $\frac{14}{36} \text{ cm}^2$



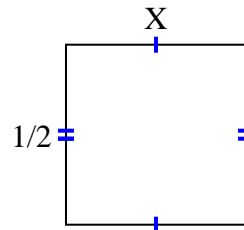
10) area = $\frac{1}{8} \text{ cm}^2$



11) area = $\frac{8}{72} \text{ cm}^2$



12) area = $\frac{1}{4} \text{ cm}^2$



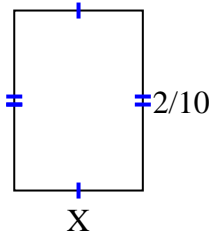
1. _____
2. _____
3. _____
4. _____
5. _____
6. _____
7. _____
8. _____
9. _____
10. _____
11. _____
12. _____



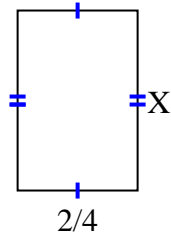
Finden Sie den Wert von X für jede Figur. Jede Zahl ist in Zentimetern (cm) angegeben.

Nicht maßstabsgetreu.

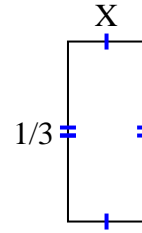
1) $\text{area} = \frac{2}{70} \text{ cm}^2$



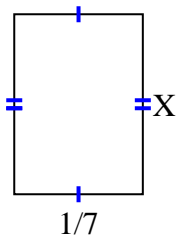
2) $\text{area} = \frac{12}{32} \text{ cm}^2$



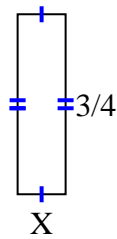
3) $\text{area} = \frac{1}{21} \text{ cm}^2$



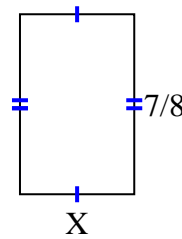
4) $\text{area} = \frac{2}{70} \text{ cm}^2$



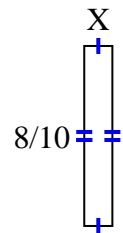
5) $\text{area} = \frac{3}{20} \text{ cm}^2$



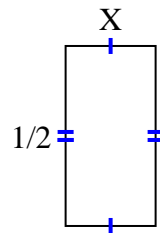
6) $\text{area} = \frac{35}{72} \text{ cm}^2$



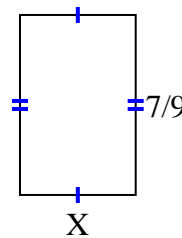
7) $\text{area} = \frac{8}{80} \text{ cm}^2$



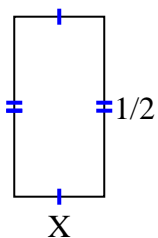
8) $\text{area} = \frac{2}{16} \text{ cm}^2$



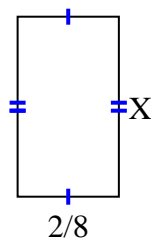
9) $\text{area} = \frac{14}{36} \text{ cm}^2$



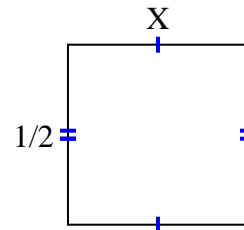
10) $\text{area} = \frac{1}{8} \text{ cm}^2$



11) $\text{area} = \frac{8}{72} \text{ cm}^2$



12) $\text{area} = \frac{1}{4} \text{ cm}^2$

**Antworten**

1. $\frac{1}{7}$

2. $\frac{6}{8}$

3. $\frac{1}{7}$

4. $\frac{2}{10}$

5. $\frac{1}{5}$

6. $\frac{5}{9}$

7. $\frac{1}{8}$

8. $\frac{2}{8}$

9. $\frac{2}{4}$

10. $\frac{1}{4}$

11. $\frac{4}{9}$

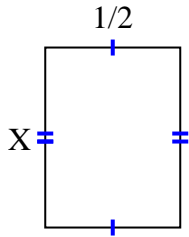
12. $\frac{1}{2}$



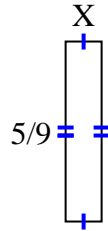
Finden Sie den Wert von X für jede Figur. Jede Zahl ist in Zentimetern (cm) angegeben. Nicht maßstabsgetreu.

Antworten

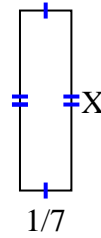
1) area = $\frac{2}{6} \text{ cm}^2$



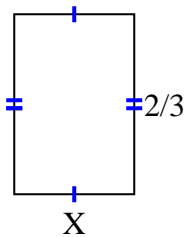
2) area = $\frac{5}{81} \text{ cm}^2$



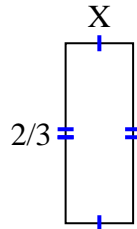
3) area = $\frac{1}{14} \text{ cm}^2$



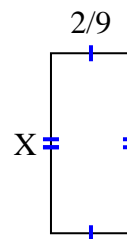
4) area = $\frac{8}{27} \text{ cm}^2$



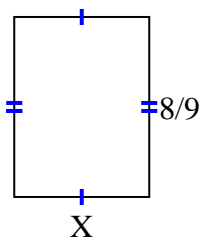
5) area = $\frac{2}{12} \text{ cm}^2$



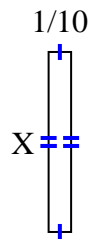
6) area = $\frac{10}{90} \text{ cm}^2$



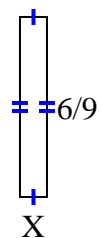
7) area = $\frac{48}{81} \text{ cm}^2$



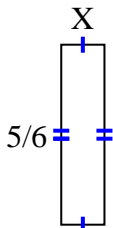
8) area = $\frac{4}{50} \text{ cm}^2$



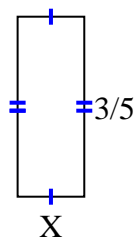
9) area = $\frac{6}{90} \text{ cm}^2$



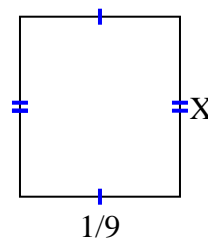
10) area = $\frac{5}{30} \text{ cm}^2$



11) area = $\frac{6}{45} \text{ cm}^2$



12) area = $\frac{1}{72} \text{ cm}^2$



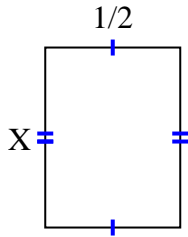
1. _____
2. _____
3. _____
4. _____
5. _____
6. _____
7. _____
8. _____
9. _____
10. _____
11. _____
12. _____



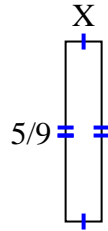
Finden Sie den Wert von X für jede Figur. Jede Zahl ist in Zentimetern (cm) angegeben.

Nicht maßstabsgetreu.

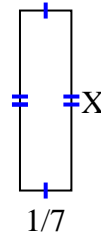
1) area = $\frac{2}{6} \text{ cm}^2$



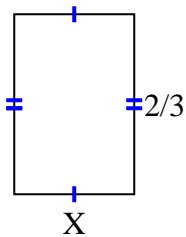
2) area = $\frac{5}{81} \text{ cm}^2$



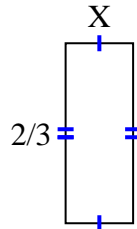
3) area = $\frac{1}{14} \text{ cm}^2$



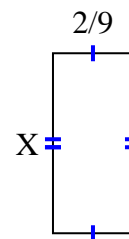
4) area = $\frac{8}{27} \text{ cm}^2$



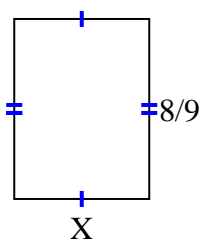
5) area = $\frac{2}{12} \text{ cm}^2$



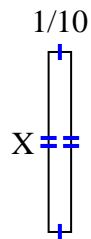
6) area = $\frac{10}{90} \text{ cm}^2$



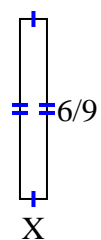
7) area = $\frac{48}{81} \text{ cm}^2$



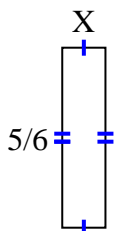
8) area = $\frac{4}{50} \text{ cm}^2$



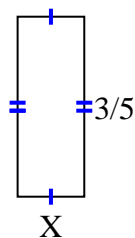
9) area = $\frac{6}{90} \text{ cm}^2$



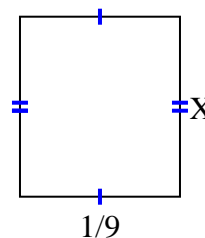
10) area = $\frac{5}{30} \text{ cm}^2$



11) area = $\frac{6}{45} \text{ cm}^2$



12) area = $\frac{1}{72} \text{ cm}^2$

**Antworten**

1. $\frac{2}{3}$

2. $\frac{1}{9}$

3. $\frac{1}{2}$

4. $\frac{4}{9}$

5. $\frac{1}{4}$

6. $\frac{5}{10}$

7. $\frac{6}{9}$

8. $\frac{4}{5}$

9. $\frac{1}{10}$

10. $\frac{1}{5}$

11. $\frac{2}{9}$

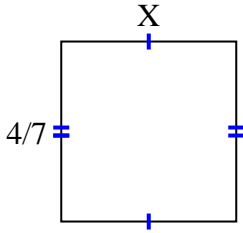
12. $\frac{1}{8}$



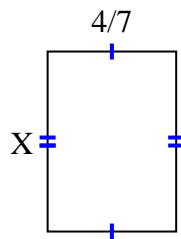
Finden Sie den Wert von X für jede Figur. Jede Zahl ist in Zentimetern (cm) angegeben. Nicht maßstabsgetreu.

Antworten

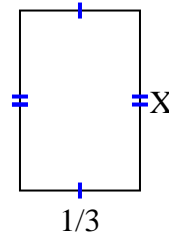
1) area = $\frac{20}{63} \text{ cm}^2$



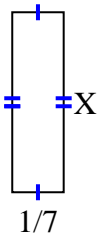
2) area = $\frac{16}{35} \text{ cm}^2$



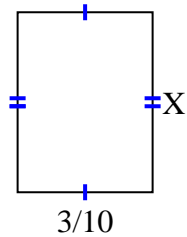
3) area = $\frac{1}{6} \text{ cm}^2$



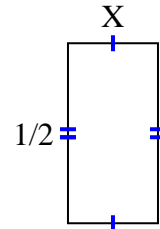
4) area = $\frac{2}{28} \text{ cm}^2$



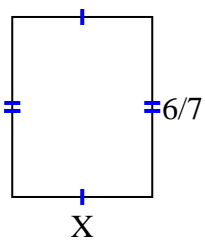
5) area = $\frac{12}{100} \text{ cm}^2$



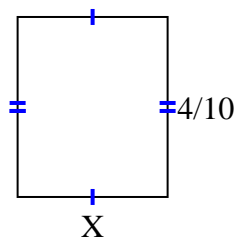
6) area = $\frac{1}{8} \text{ cm}^2$



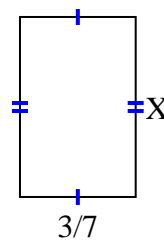
7) area = $\frac{36}{63} \text{ cm}^2$



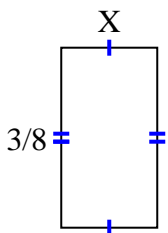
8) area = $\frac{4}{30} \text{ cm}^2$



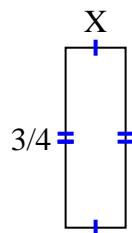
9) area = $\frac{12}{42} \text{ cm}^2$



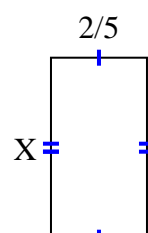
10) area = $\frac{3}{40} \text{ cm}^2$



11) area = $\frac{6}{32} \text{ cm}^2$



12) area = $\frac{12}{40} \text{ cm}^2$



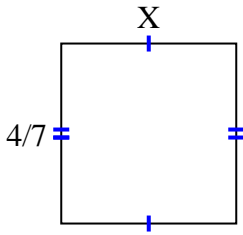
1. _____
2. _____
3. _____
4. _____
5. _____
6. _____
7. _____
8. _____
9. _____
10. _____
11. _____
12. _____



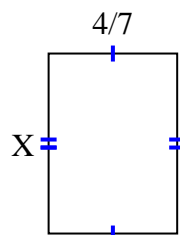
Finden Sie den Wert von X für jede Figur. Jede Zahl ist in Zentimetern (cm) angegeben.

Nicht maßstabsgetreu.

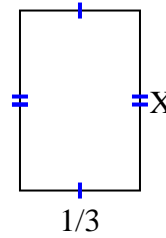
1) $\text{area} = \frac{20}{63} \text{ cm}^2$



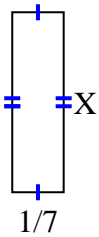
2) $\text{area} = \frac{16}{35} \text{ cm}^2$



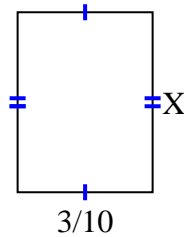
3) $\text{area} = \frac{1}{6} \text{ cm}^2$



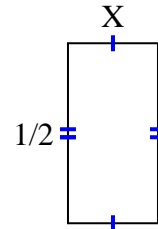
4) $\text{area} = \frac{2}{28} \text{ cm}^2$



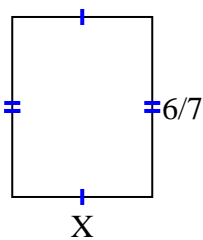
5) $\text{area} = \frac{12}{100} \text{ cm}^2$



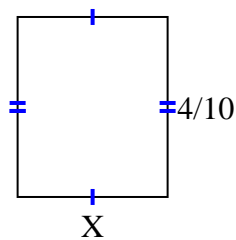
6) $\text{area} = \frac{1}{8} \text{ cm}^2$



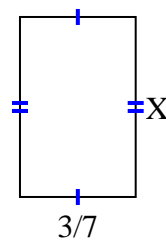
7) $\text{area} = \frac{36}{63} \text{ cm}^2$



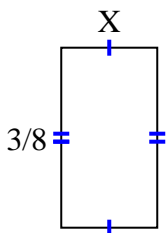
8) $\text{area} = \frac{4}{30} \text{ cm}^2$



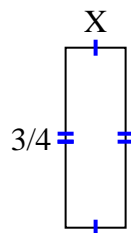
9) $\text{area} = \frac{12}{42} \text{ cm}^2$



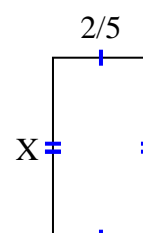
10) $\text{area} = \frac{3}{40} \text{ cm}^2$



11) $\text{area} = \frac{6}{32} \text{ cm}^2$



12) $\text{area} = \frac{12}{40} \text{ cm}^2$

**Antworten**

1. $\frac{5}{9}$

2. $\frac{4}{5}$

3. $\frac{1}{2}$

4. $\frac{2}{4}$

5. $\frac{4}{10}$

6. $\frac{1}{4}$

7. $\frac{6}{9}$

8. $\frac{1}{3}$

9. $\frac{4}{6}$

10. $\frac{1}{5}$

11. $\frac{2}{8}$

12. $\frac{6}{8}$