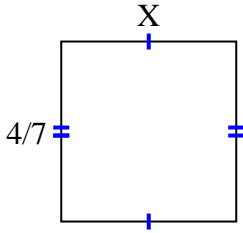




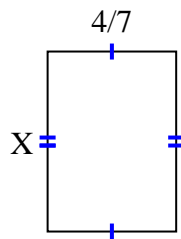
Finden Sie den Wert von X für jede Figur. Jede Zahl ist in Zentimetern (cm) angegeben. Nicht maßstabsgetreu.

Antworten

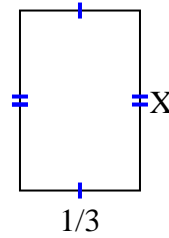
1) area = $\frac{20}{63} \text{ cm}^2$



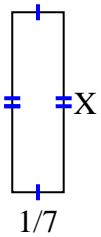
2) area = $\frac{16}{35} \text{ cm}^2$



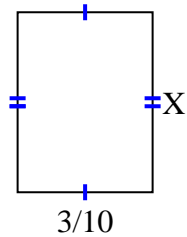
3) area = $\frac{1}{6} \text{ cm}^2$



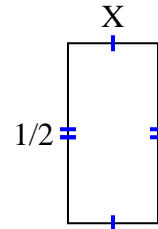
4) area = $\frac{2}{28} \text{ cm}^2$



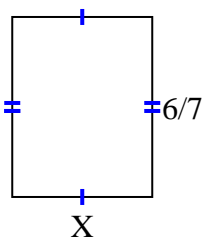
5) area = $\frac{12}{100} \text{ cm}^2$



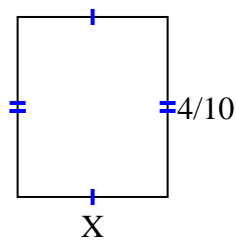
6) area = $\frac{1}{8} \text{ cm}^2$



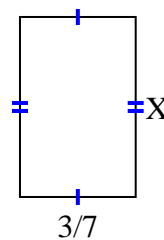
7) area = $\frac{36}{63} \text{ cm}^2$



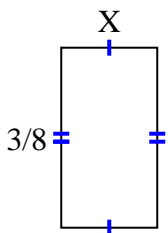
8) area = $\frac{4}{30} \text{ cm}^2$



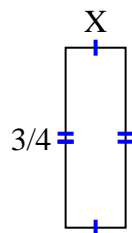
9) area = $\frac{12}{42} \text{ cm}^2$



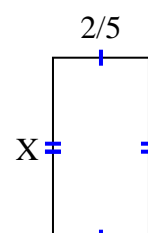
10) area = $\frac{3}{40} \text{ cm}^2$



11) area = $\frac{6}{32} \text{ cm}^2$



12) area = $\frac{12}{40} \text{ cm}^2$



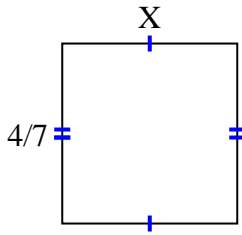
1. _____
2. _____
3. _____
4. _____
5. _____
6. _____
7. _____
8. _____
9. _____
10. _____
11. _____
12. _____



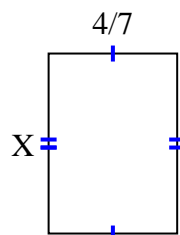
Finden Sie den Wert von X für jede Figur. Jede Zahl ist in Zentimetern (cm) angegeben.

Nicht maßstabsgetreu.

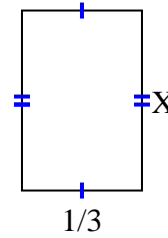
1) $\text{area} = \frac{20}{63} \text{ cm}^2$



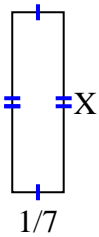
2) $\text{area} = \frac{16}{35} \text{ cm}^2$



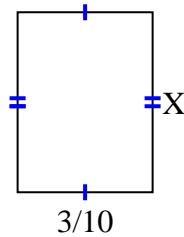
3) $\text{area} = \frac{1}{6} \text{ cm}^2$



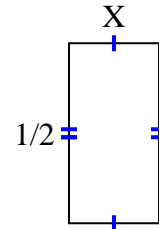
4) $\text{area} = \frac{2}{28} \text{ cm}^2$



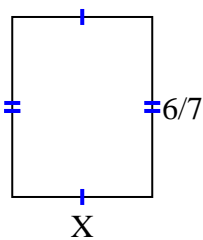
5) $\text{area} = \frac{12}{100} \text{ cm}^2$



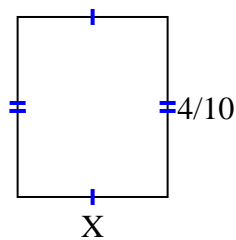
6) $\text{area} = \frac{1}{8} \text{ cm}^2$



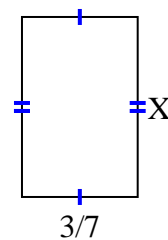
7) $\text{area} = \frac{36}{63} \text{ cm}^2$



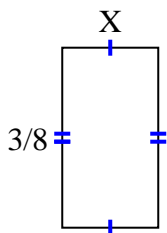
8) $\text{area} = \frac{4}{30} \text{ cm}^2$



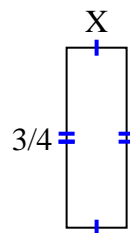
9) $\text{area} = \frac{12}{42} \text{ cm}^2$



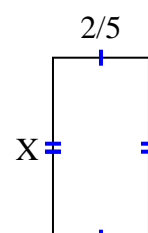
10) $\text{area} = \frac{3}{40} \text{ cm}^2$



11) $\text{area} = \frac{6}{32} \text{ cm}^2$



12) $\text{area} = \frac{12}{40} \text{ cm}^2$

**Antworten**

1. $\frac{5}{9}$

2. $\frac{4}{5}$

3. $\frac{1}{2}$

4. $\frac{2}{4}$

5. $\frac{4}{10}$

6. $\frac{1}{4}$

7. $\frac{6}{9}$

8. $\frac{1}{3}$

9. $\frac{4}{6}$

10. $\frac{1}{5}$

11. $\frac{2}{8}$

12. $\frac{6}{8}$