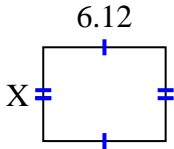




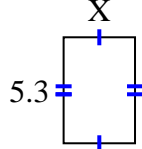
**Finden Sie den Wert von X für jede Figur. Jede Zahl ist in Zentimetern (cm) angegeben. Nicht maßstabsgetreu.**

**Antworten**

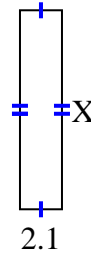
1) area =  $28,7028 \text{ cm}^2$



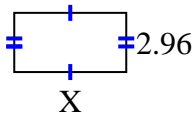
2) area =  $18,921 \text{ cm}^2$



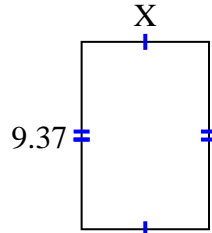
3) area =  $20,895 \text{ cm}^2$



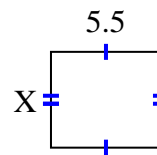
4) area =  $16,576 \text{ cm}^2$



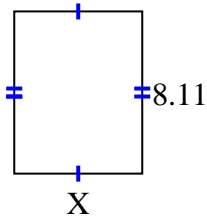
5) area =  $59,6869 \text{ cm}^2$



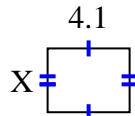
6) area =  $26,345 \text{ cm}^2$



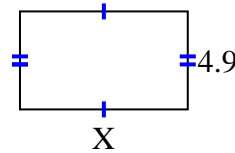
7) area =  $51,904 \text{ cm}^2$



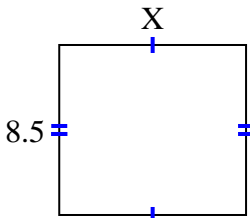
8) area =  $13,079 \text{ cm}^2$



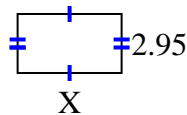
9) area =  $41,111 \text{ cm}^2$



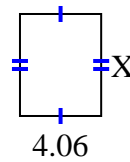
10) area =  $79,39 \text{ cm}^2$



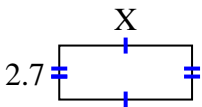
11) area =  $15,34 \text{ cm}^2$



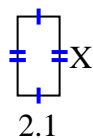
12) area =  $20,706 \text{ cm}^2$



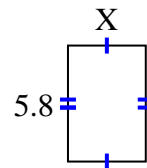
13) area =  $17,928 \text{ cm}^2$



14) area =  $8,295 \text{ cm}^2$



15) area =  $22,562 \text{ cm}^2$



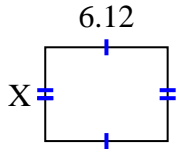
1. \_\_\_\_\_
2. \_\_\_\_\_
3. \_\_\_\_\_
4. \_\_\_\_\_
5. \_\_\_\_\_
6. \_\_\_\_\_
7. \_\_\_\_\_
8. \_\_\_\_\_
9. \_\_\_\_\_
10. \_\_\_\_\_
11. \_\_\_\_\_
12. \_\_\_\_\_
13. \_\_\_\_\_
14. \_\_\_\_\_
15. \_\_\_\_\_



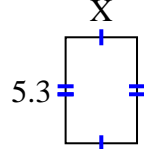
Finden Sie den Wert von X für jede Figur. Jede Zahl ist in Zentimetern (cm) angegeben.

Nicht maßstabsgetreu.

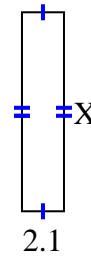
1) area =  $28,7028 \text{ cm}^2$



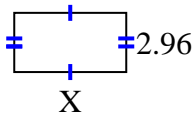
2) area =  $18,921 \text{ cm}^2$



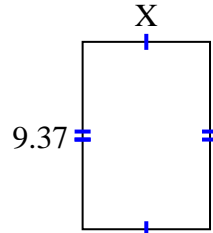
3) area =  $20,895 \text{ cm}^2$



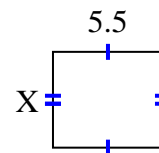
4) area =  $16,576 \text{ cm}^2$



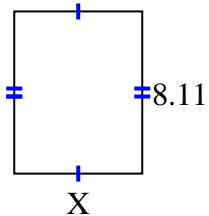
5) area =  $59,6869 \text{ cm}^2$



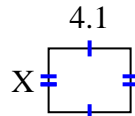
6) area =  $26,345 \text{ cm}^2$



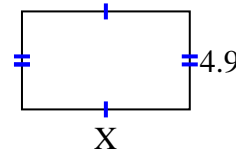
7) area =  $51,904 \text{ cm}^2$



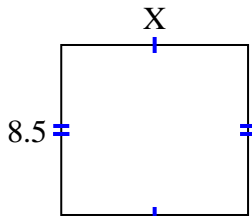
8) area =  $13,079 \text{ cm}^2$



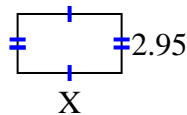
9) area =  $41,111 \text{ cm}^2$



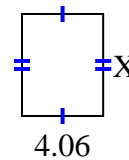
10) area =  $79,39 \text{ cm}^2$



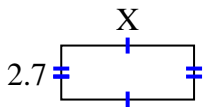
11) area =  $15,34 \text{ cm}^2$



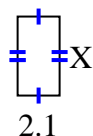
12) area =  $20,706 \text{ cm}^2$



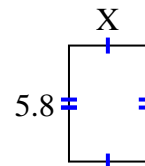
13) area =  $17,928 \text{ cm}^2$



14) area =  $8,295 \text{ cm}^2$



15) area =  $22,562 \text{ cm}^2$

**Antworten**1. 4.692. 3.573. 9.954. 5.65. 6.376. 4.797. 6.48. 3.199. 8.3910. 9.3411. 5.212. 5.113. 6.6414. 3.9515. 3.89