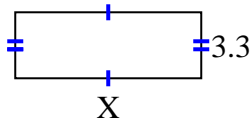




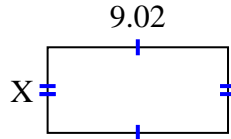
**Finden Sie den Wert von X für jede Figur. Jede Zahl ist in Zentimetern (cm) angegeben.**

**Nicht maßstabsgetreu.**

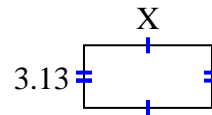
1) area =  $30,69 \text{ cm}^2$



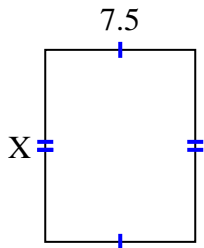
2) area =  $38,6056 \text{ cm}^2$



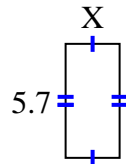
3) area =  $20,032 \text{ cm}^2$



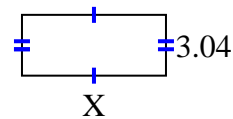
4) area =  $72 \text{ cm}^2$



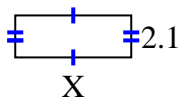
5) area =  $15,39 \text{ cm}^2$



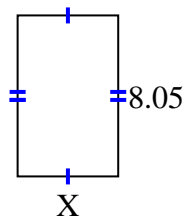
6) area =  $21,888 \text{ cm}^2$



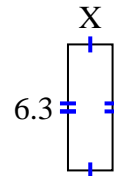
7) area =  $12,18 \text{ cm}^2$



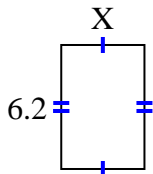
8) area =  $40,4915 \text{ cm}^2$



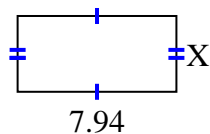
9) area =  $14,049 \text{ cm}^2$



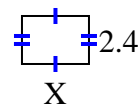
10) area =  $25,792 \text{ cm}^2$



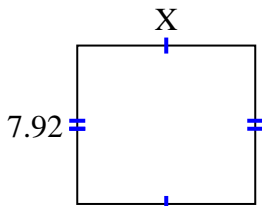
11) area =  $30,0926 \text{ cm}^2$



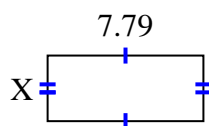
12) area =  $8,04 \text{ cm}^2$



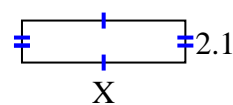
13) area =  $70,488 \text{ cm}^2$



14) area =  $25,5512 \text{ cm}^2$



15) area =  $17,157 \text{ cm}^2$



**Antworten**

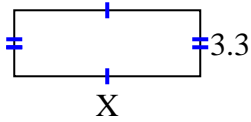
1. \_\_\_\_\_
2. \_\_\_\_\_
3. \_\_\_\_\_
4. \_\_\_\_\_
5. \_\_\_\_\_
6. \_\_\_\_\_
7. \_\_\_\_\_
8. \_\_\_\_\_
9. \_\_\_\_\_
10. \_\_\_\_\_
11. \_\_\_\_\_
12. \_\_\_\_\_
13. \_\_\_\_\_
14. \_\_\_\_\_
15. \_\_\_\_\_



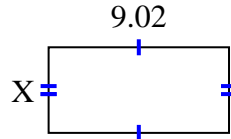
Finden Sie den Wert von X für jede Figur. Jede Zahl ist in Zentimetern (cm) angegeben.

Nicht maßstabsgetreu.

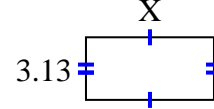
1) area =  $30,69 \text{ cm}^2$



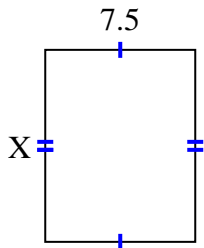
2) area =  $38,6056 \text{ cm}^2$



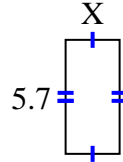
3) area =  $20,032 \text{ cm}^2$



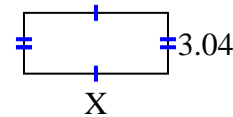
4) area =  $72 \text{ cm}^2$



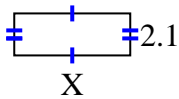
5) area =  $15,39 \text{ cm}^2$



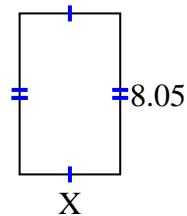
6) area =  $21,888 \text{ cm}^2$



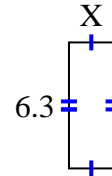
7) area =  $12,18 \text{ cm}^2$



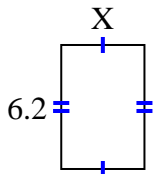
8) area =  $40,4915 \text{ cm}^2$



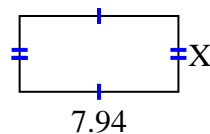
9) area =  $14,049 \text{ cm}^2$



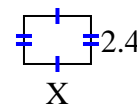
10) area =  $25,792 \text{ cm}^2$



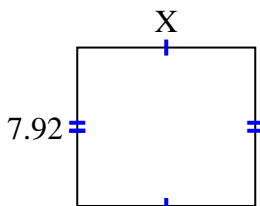
11) area =  $30,0926 \text{ cm}^2$



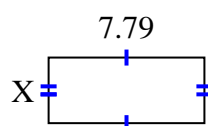
12) area =  $8,04 \text{ cm}^2$



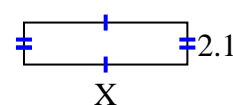
13) area =  $70,488 \text{ cm}^2$



14) area =  $25,5512 \text{ cm}^2$



15) area =  $17,157 \text{ cm}^2$

**Antworten**1. 9.32. 4.283. 6.44. 9.65. 2.76. 7.27. 5.88. 5.039. 2.2310. 4.1611. 3.7912. 3.3513. 8.914. 3.2815. 8.17