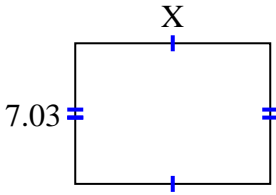




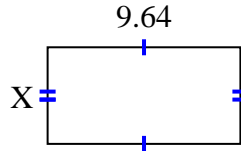
**Finden Sie den Wert von X für jede Figur. Jede Zahl ist in Zentimetern (cm) angegeben. Nicht maßstabsgetreu.**

**Antworten**

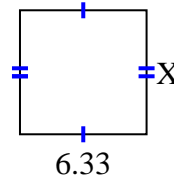
1) area =  $68,5425 \text{ cm}^2$



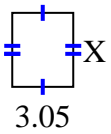
2) area =  $46,5612 \text{ cm}^2$




3) area =  $39,246 \text{ cm}^2$



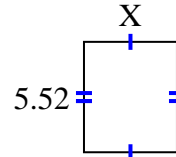
4) area =  $11,285 \text{ cm}^2$



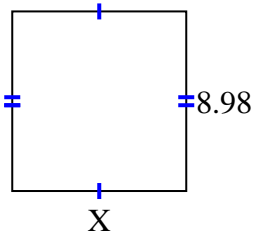
5) area =  $23,8425 \text{ cm}^2$



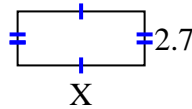
6) area =  $25,668 \text{ cm}^2$



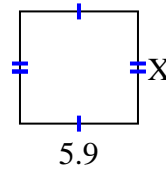
7) area =  $78,126 \text{ cm}^2$



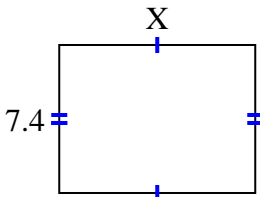
8) area =  $17,145 \text{ cm}^2$



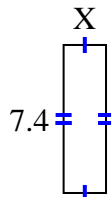
9) area =  $33,099 \text{ cm}^2$



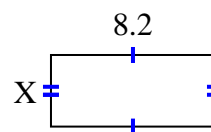
10) area =  $72,52 \text{ cm}^2$



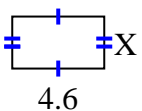
11) area =  $15,688 \text{ cm}^2$



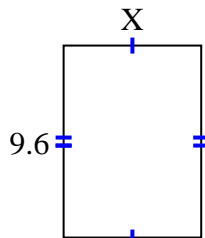
12) area =  $29,356 \text{ cm}^2$



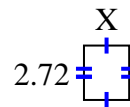
13) area =  $11,96 \text{ cm}^2$



14) area =  $66,048 \text{ cm}^2$



15) area =  $6,1472 \text{ cm}^2$



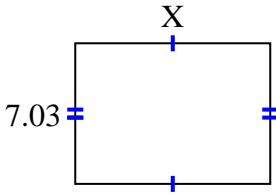
1. \_\_\_\_\_
2. \_\_\_\_\_
3. \_\_\_\_\_
4. \_\_\_\_\_
5. \_\_\_\_\_
6. \_\_\_\_\_
7. \_\_\_\_\_
8. \_\_\_\_\_
9. \_\_\_\_\_
10. \_\_\_\_\_
11. \_\_\_\_\_
12. \_\_\_\_\_
13. \_\_\_\_\_
14. \_\_\_\_\_
15. \_\_\_\_\_



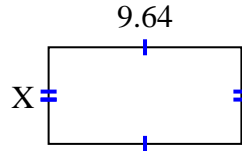
Finden Sie den Wert von X für jede Figur. Jede Zahl ist in Zentimetern (cm) angegeben.

Nicht maßstabsgetreu.

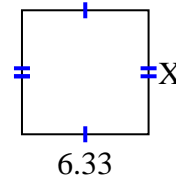
1) area =  $68,5425 \text{ cm}^2$



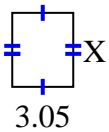
2) area =  $46,5612 \text{ cm}^2$




3) area =  $39,246 \text{ cm}^2$



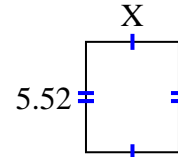
4) area =  $11,285 \text{ cm}^2$



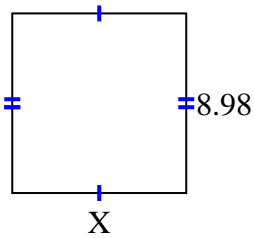
5) area =  $23,8425 \text{ cm}^2$



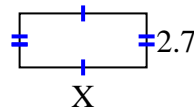
6) area =  $25,668 \text{ cm}^2$



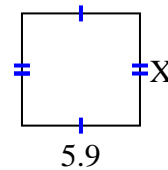
7) area =  $78,126 \text{ cm}^2$



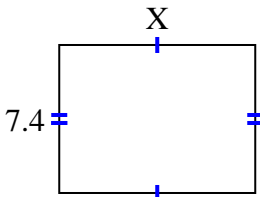
8) area =  $17,145 \text{ cm}^2$



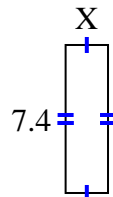
9) area =  $33,099 \text{ cm}^2$



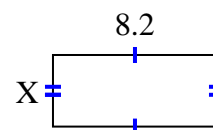
10) area =  $72,52 \text{ cm}^2$



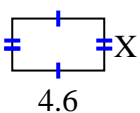
11) area =  $15,688 \text{ cm}^2$



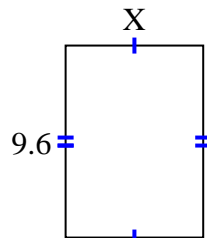
12) area =  $29,356 \text{ cm}^2$



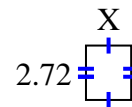
13) area =  $11,96 \text{ cm}^2$



14) area =  $66,048 \text{ cm}^2$



15) area =  $6,1472 \text{ cm}^2$

**Antworten**1. 9.752. 4.833. 6.24. 3.75. 2.756. 4.657. 8.78. 6.359. 5.6110. 9.811. 2.1212. 3.5813. 2.614. 6.8815. 2.26