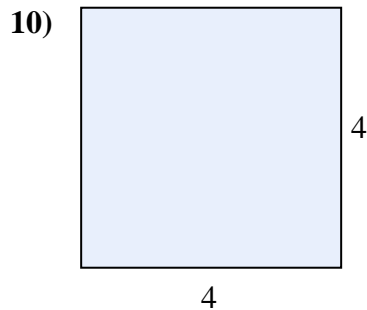
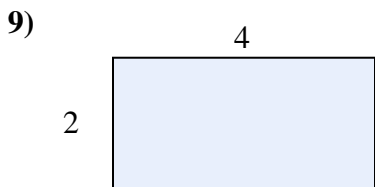
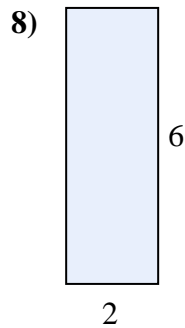
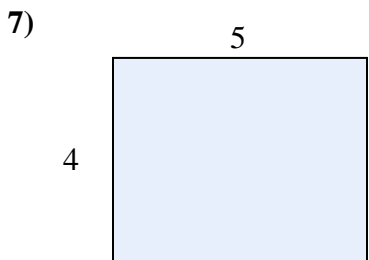
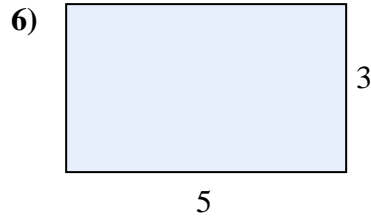
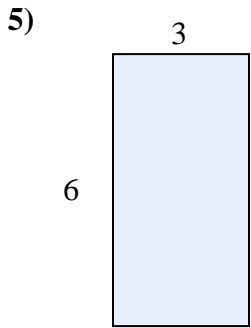
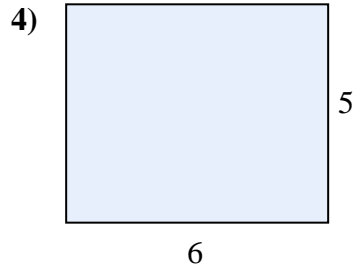
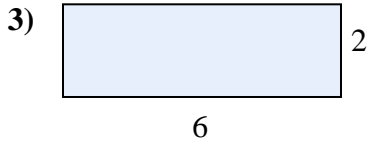
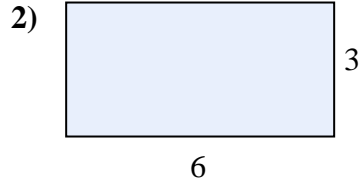
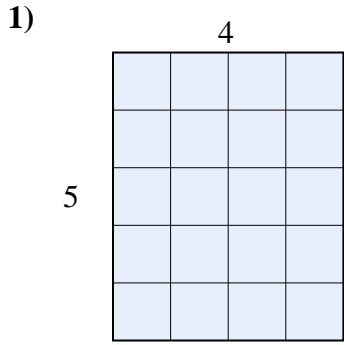




Berechne die Flächen, indem du die Rechtecke in Fliesen aufteilst. Die erste Aufgabe zeigt, wie es gemacht wird.

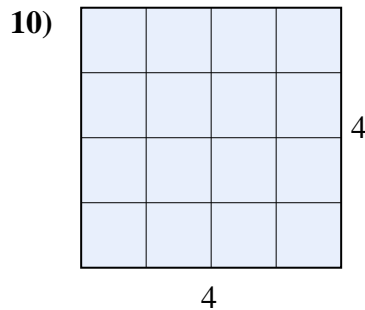
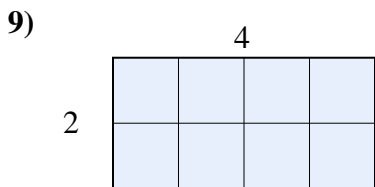
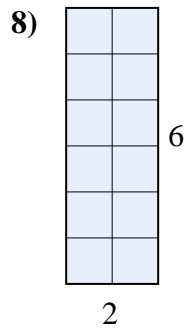
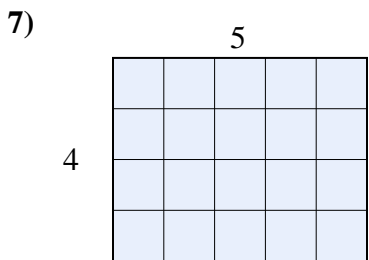
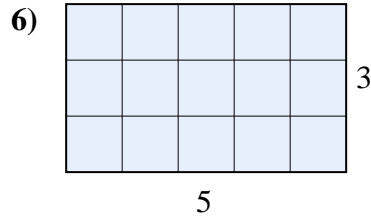
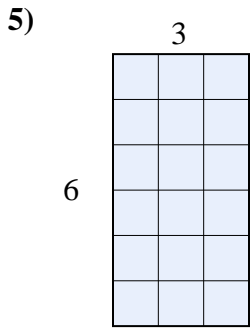
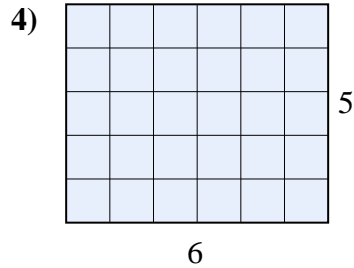
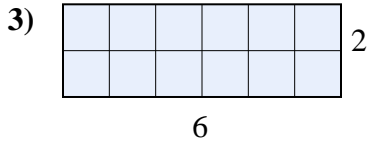
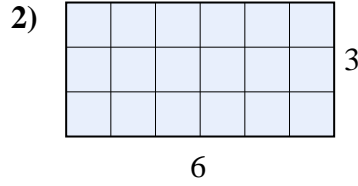
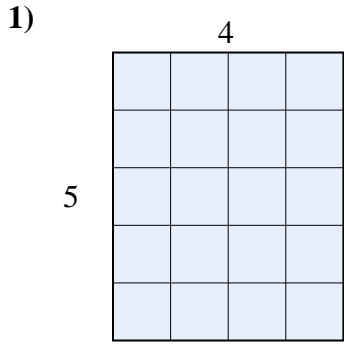
**Antworten**



- 1. \_\_\_\_\_
- 2. \_\_\_\_\_
- 3. \_\_\_\_\_
- 4. \_\_\_\_\_
- 5. \_\_\_\_\_
- 6. \_\_\_\_\_
- 7. \_\_\_\_\_
- 8. \_\_\_\_\_
- 9. \_\_\_\_\_
- 10. \_\_\_\_\_



Berechne die Flächen, indem du die Rechtecke in Fliesen aufteilst. Die erste Aufgabe zeigt, wie es gemacht wird.



**Antworten**

1. 20

2. 18

3. 12

4. 30

5. 18

6. 15

7. 20

8. 12

9. 8

10. 16