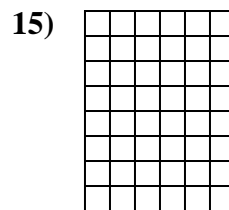
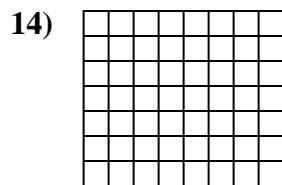
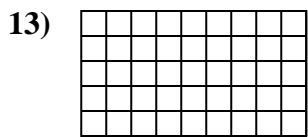
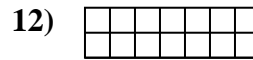
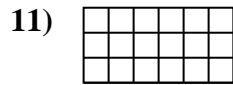
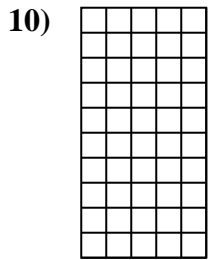
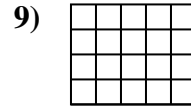
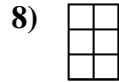
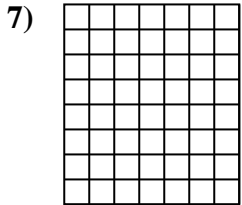
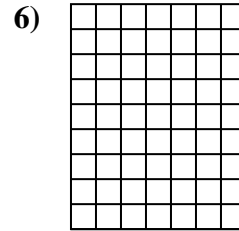
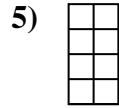
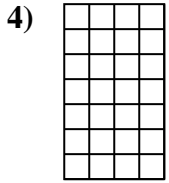
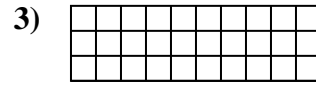
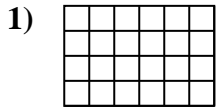




Berechne die Fläche. Jeder Block entspricht 1 Einheit ( $u^2$ ).



**Antworten**

1. \_\_\_\_\_

2. \_\_\_\_\_

3. \_\_\_\_\_

4. \_\_\_\_\_

5. \_\_\_\_\_

6. \_\_\_\_\_

7. \_\_\_\_\_

8. \_\_\_\_\_

9. \_\_\_\_\_

10. \_\_\_\_\_

11. \_\_\_\_\_

12. \_\_\_\_\_

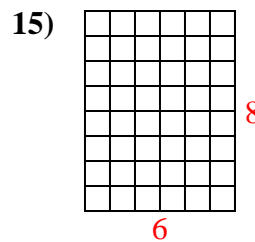
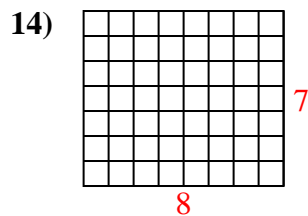
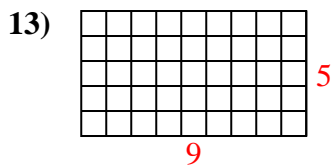
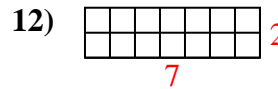
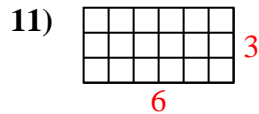
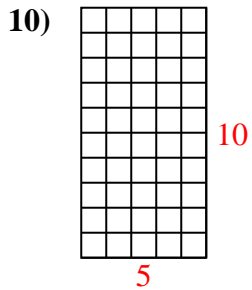
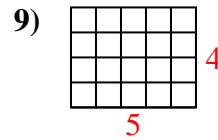
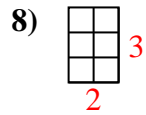
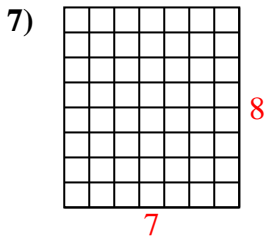
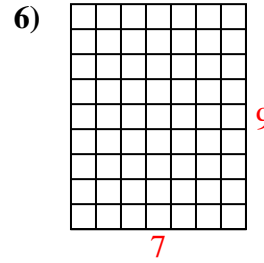
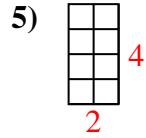
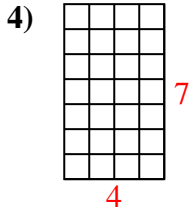
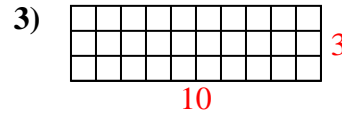
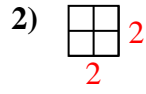
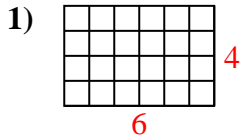
13. \_\_\_\_\_

14. \_\_\_\_\_

15. \_\_\_\_\_



Berechne die Fläche. Jeder Block entspricht 1 Einheit ( $u^2$ ).



**Antworten**

1. 24  $u^2$

2. 4  $u^2$

3. 30  $u^2$

4. 28  $u^2$

5. 8  $u^2$

6. 63  $u^2$

7. 56  $u^2$

8. 6  $u^2$

9. 20  $u^2$

10. 50  $u^2$

11. 18  $u^2$

12. 14  $u^2$

13. 45  $u^2$

14. 56  $u^2$

15. 48  $u^2$