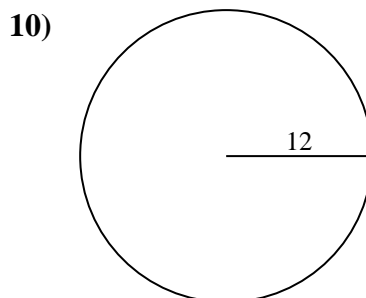
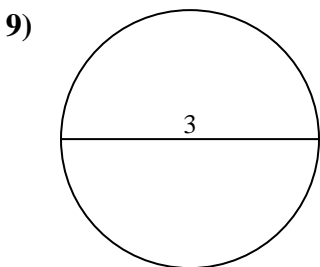
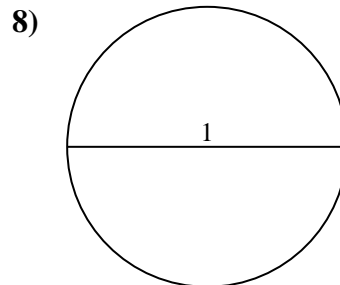
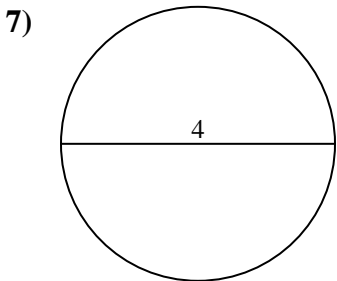
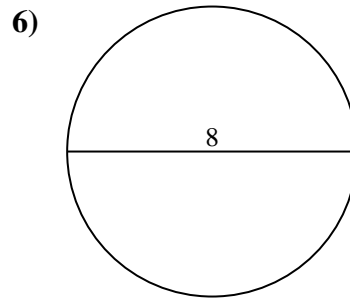
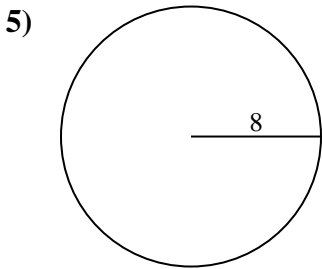
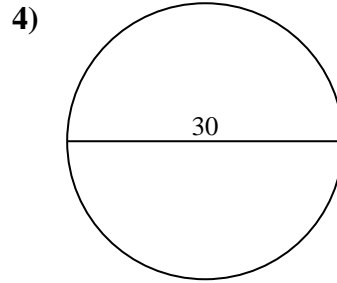
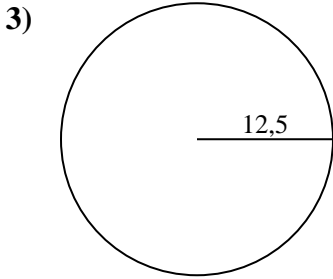
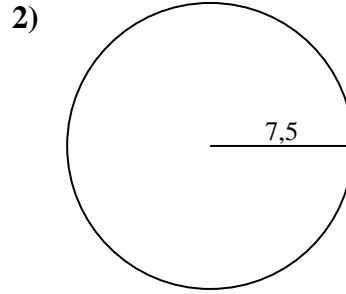
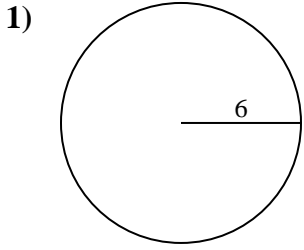




Berechne jeden Kreisumfang. Die Kreise sind nicht maßstäblich.

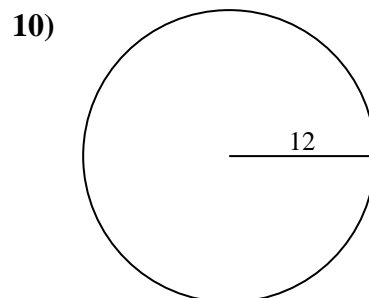
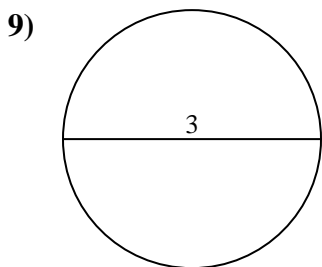
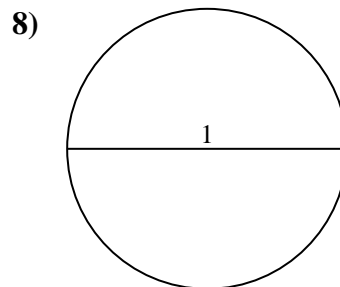
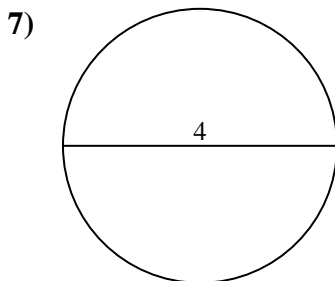
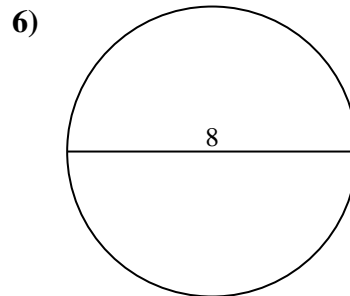
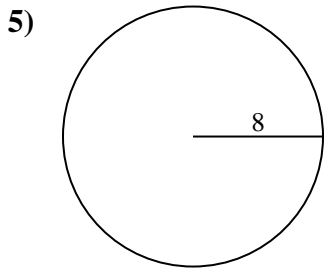
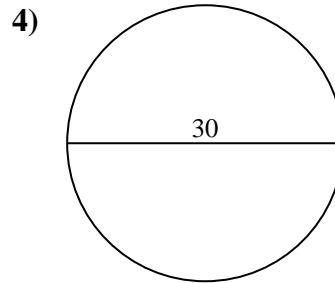
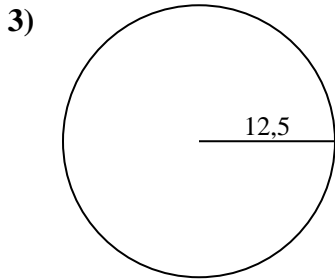
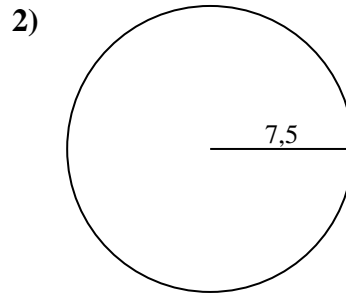
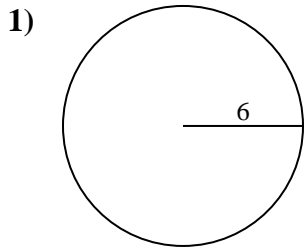


**Antworten**

- 1. \_\_\_\_\_
- 2. \_\_\_\_\_
- 3. \_\_\_\_\_
- 4. \_\_\_\_\_
- 5. \_\_\_\_\_
- 6. \_\_\_\_\_
- 7. \_\_\_\_\_
- 8. \_\_\_\_\_
- 9. \_\_\_\_\_
- 10. \_\_\_\_\_



Berechne jeden Kreisumfang. Die Kreise sind nicht maßstäblich.

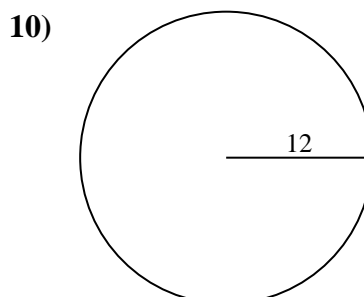
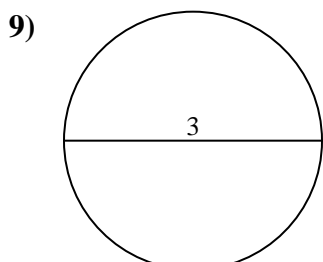
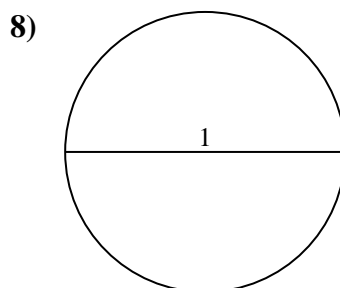
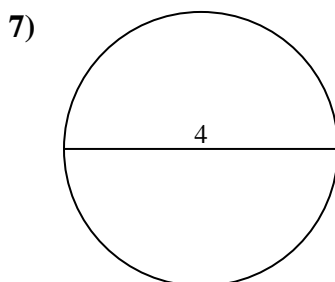
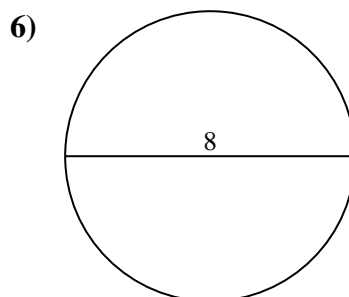
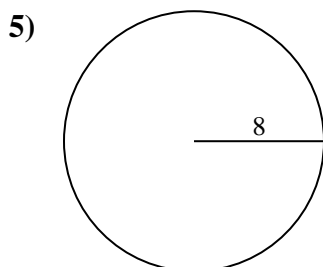
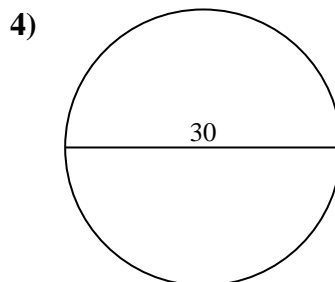
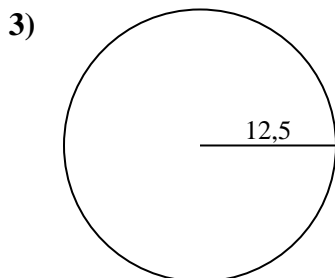
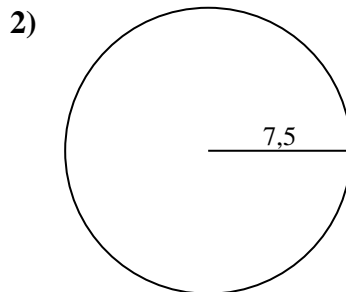
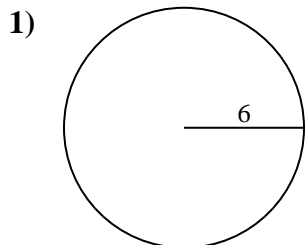
**Antworten**1. 37,7 cm2. 47,12 cm3. 78,54 cm4. 94,25 cm5. 50,27 cm6. 25,13 cm7. 12,57 cm8. 3,14 cm9. 9,42 cm10. 75,4 cm



Berechne jeden Kreisumfang. Die Kreise sind nicht maßstäblich.

12,57 cm	75,4 cm	25,13 cm	94,25 cm	50,27 cm
9,42 cm	78,54 cm	37,7 cm	47,12 cm	3,14 cm

**Antworten**



- 1. \_\_\_\_\_
- 2. \_\_\_\_\_
- 3. \_\_\_\_\_
- 4. \_\_\_\_\_
- 5. \_\_\_\_\_
- 6. \_\_\_\_\_
- 7. \_\_\_\_\_
- 8. \_\_\_\_\_
- 9. \_\_\_\_\_
- 10. \_\_\_\_\_