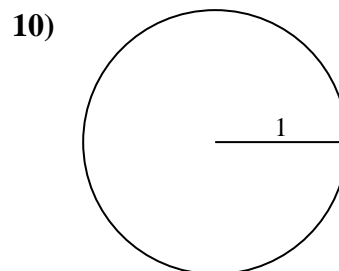
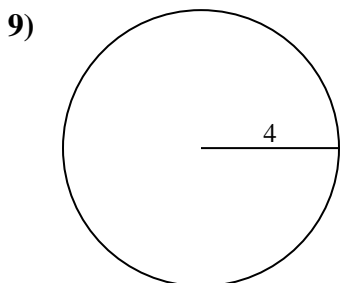
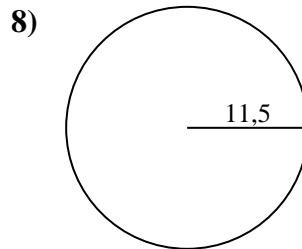
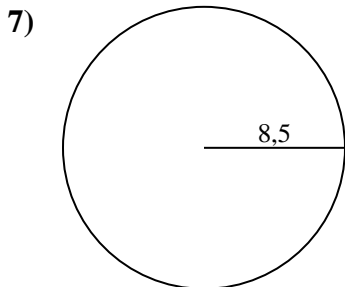
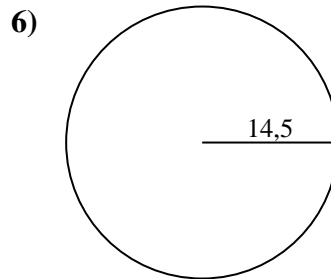
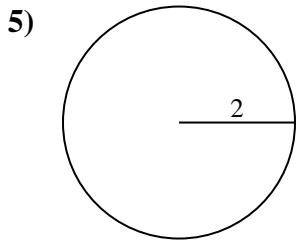
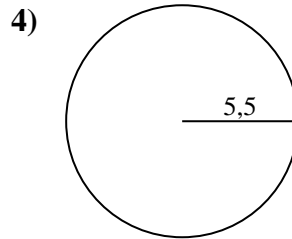
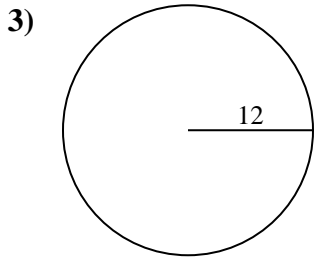
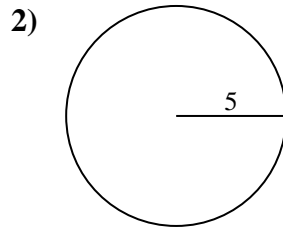
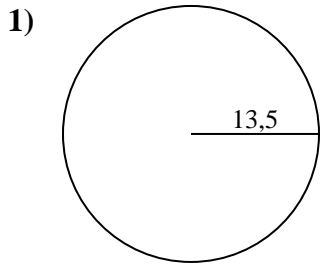




Berechne jeden Kreisumfang. Die Kreise sind nicht maßstäblich.

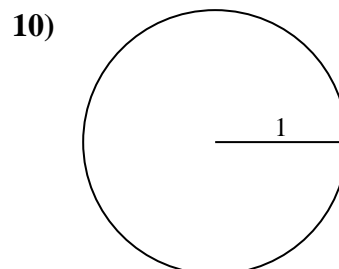
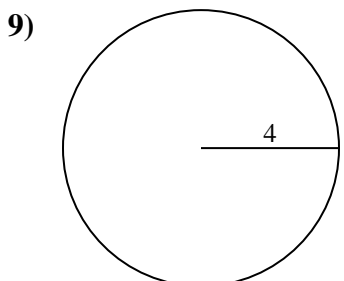
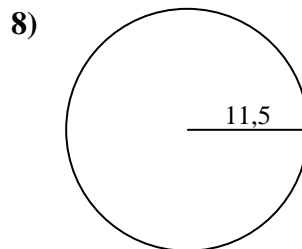
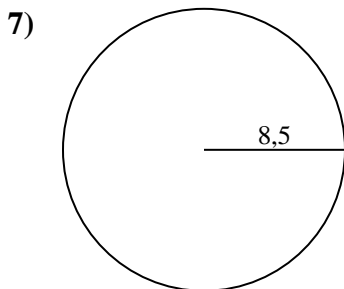
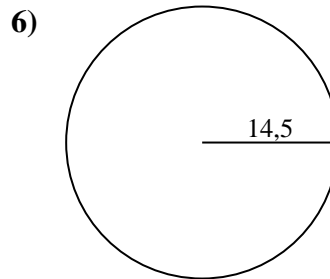
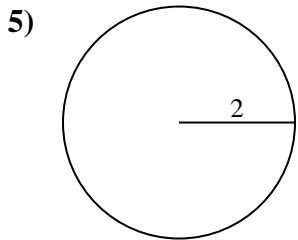
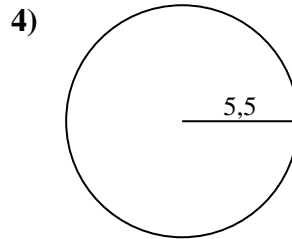
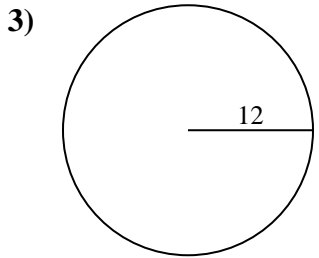
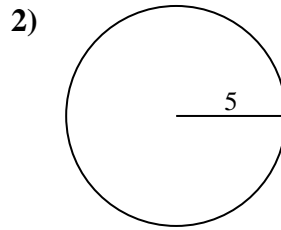
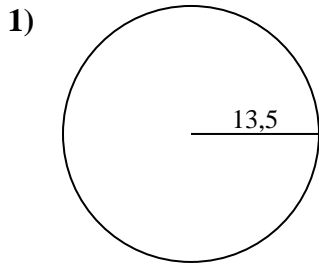


Antworten

- 1. _____
- 2. _____
- 3. _____
- 4. _____
- 5. _____
- 6. _____
- 7. _____
- 8. _____
- 9. _____
- 10. _____



Berechne jeden Kreisumfang. Die Kreise sind nicht maßstäblich.

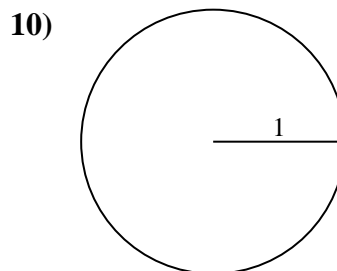
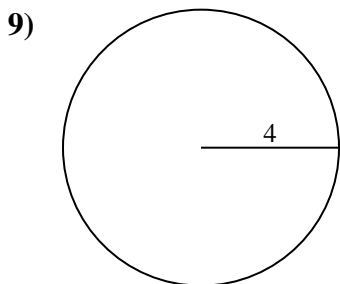
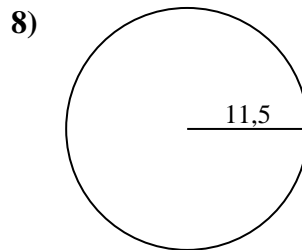
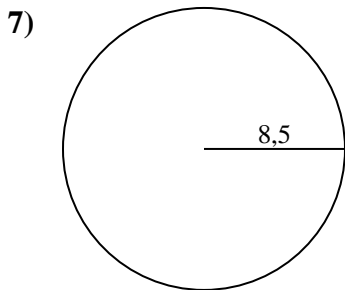
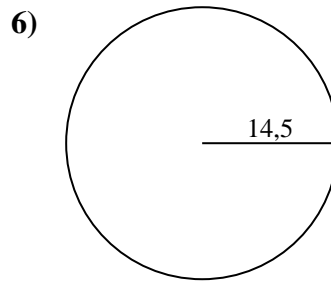
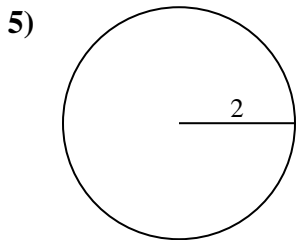
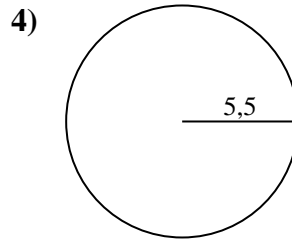
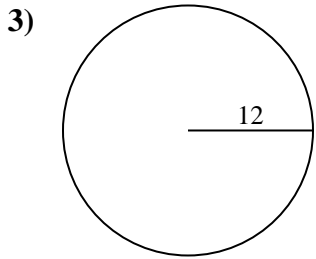
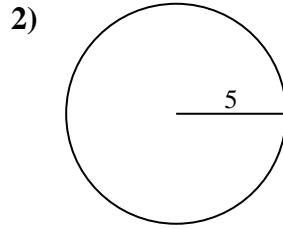
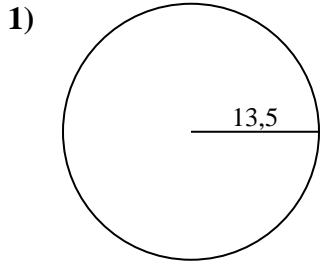
**Antworten**1. 84,82 cm2. 31,42 cm3. 75,4 cm4. 34,56 cm5. 12,57 cm6. 91,11 cm7. 53,41 cm8. 72,26 cm9. 25,13 cm10. 6,28 cm



Berechne jeden Kreisumfang. Die Kreise sind nicht maßstäblich.

Antworten

53,41 cm	84,82 cm	31,42 cm	72,26 cm	34,56 cm
12,57 cm	75,4 cm	91,11 cm	6,28 cm	25,13 cm



- 1. _____
- 2. _____
- 3. _____
- 4. _____
- 5. _____
- 6. _____
- 7. _____
- 8. _____
- 9. _____
- 10. _____