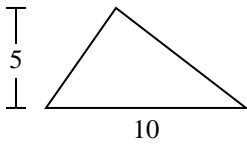


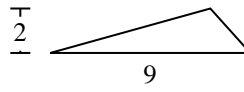


Berechne die Fläche jedes Dreiecks. Die Einheiten sind nicht maßstäblich.

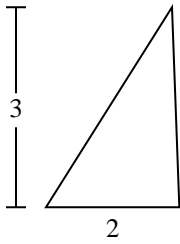
1)



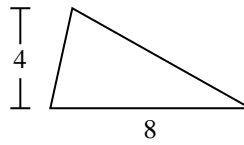
2)



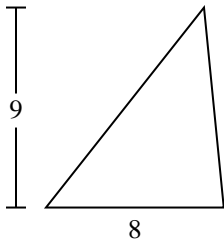
3)



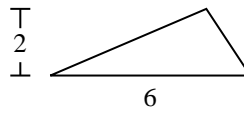
4)



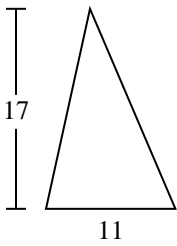
5)



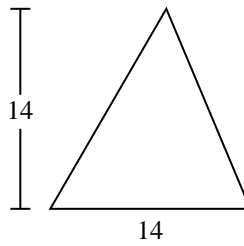
6)



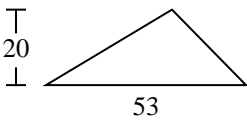
7)



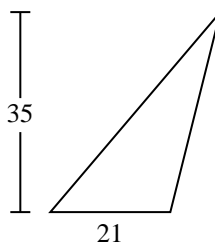
8)



9)



10)



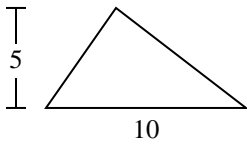
Antworten

- 1. _____
- 2. _____
- 3. _____
- 4. _____
- 5. _____
- 6. _____
- 7. _____
- 8. _____
- 9. _____
- 10. _____

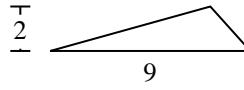


Berechne die Fläche jedes Dreiecks. Die Einheiten sind nicht maßstäblich.

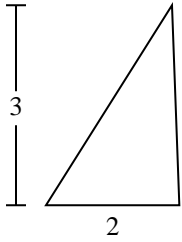
1)



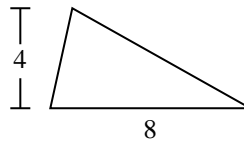
2)



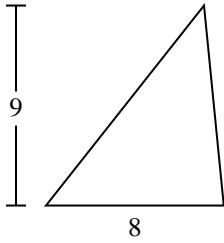
3)



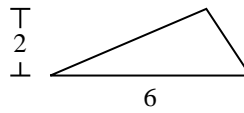
4)



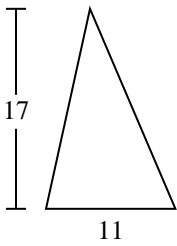
5)



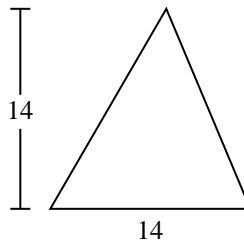
6)



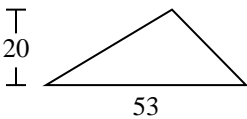
7)



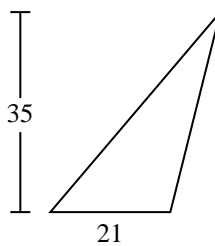
8)



9)



10)

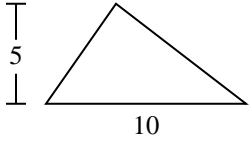
**Antworten**1. 252. 93. 34. 165. 366. 67. 93,58. 989. 53010. 367,5



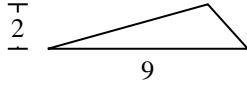
Berechne die Fläche jedes Dreiecks. Die Einheiten sind nicht maßstäblich.

93,5	98	530	25	9
6	36	16	3	

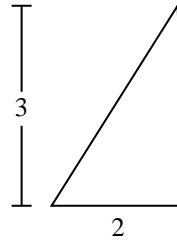
1)



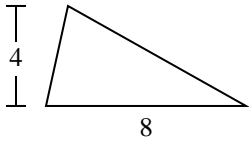
2)



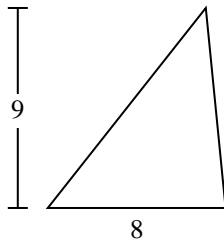
3)



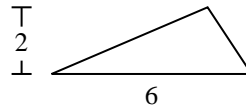
4)



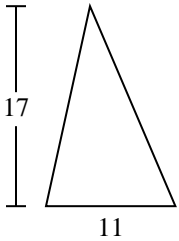
5)



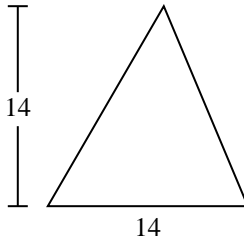
6)



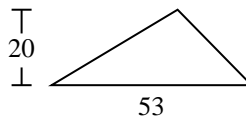
7)



8)



9)



Antworten

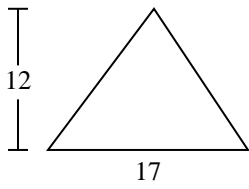
1. _____
2. _____
3. _____
4. _____
5. _____
6. _____
7. _____
8. _____
9. _____



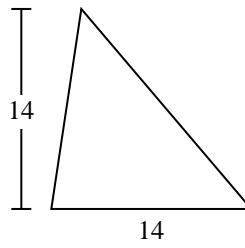
Berechne die Fläche jedes Dreiecks. Die Einheiten sind nicht maßstäblich.

Antworten

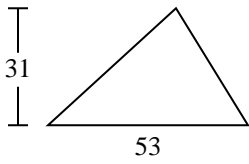
1)



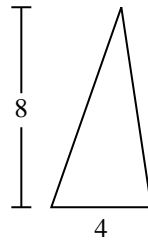
2)



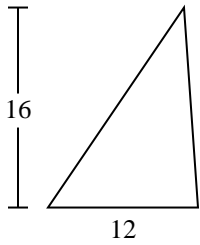
3)



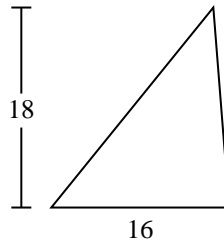
4)



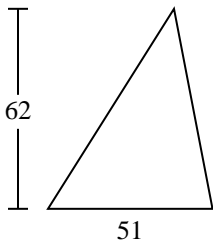
5)



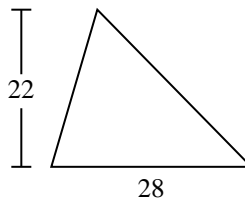
6)



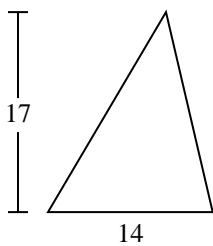
7)



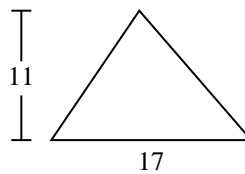
8)



9)



10)

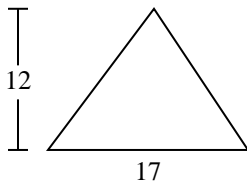


- 1. _____
- 2. _____
- 3. _____
- 4. _____
- 5. _____
- 6. _____
- 7. _____
- 8. _____
- 9. _____
- 10. _____

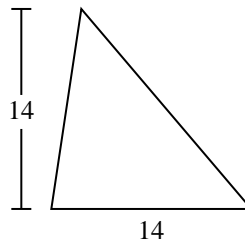


Berechne die Fläche jedes Dreiecks. Die Einheiten sind nicht maßstäblich.

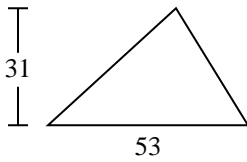
1)



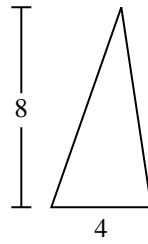
2)



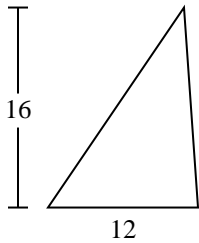
3)



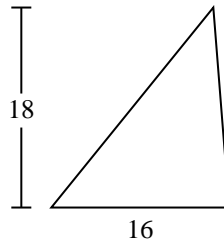
4)



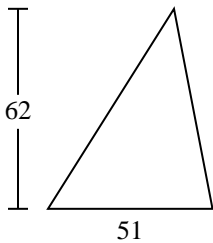
5)



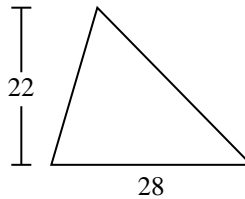
6)



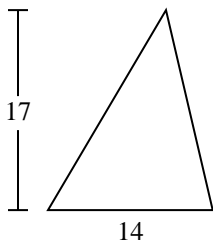
7)



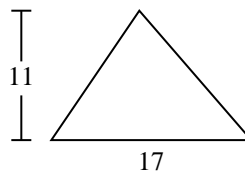
8)



9)



10)

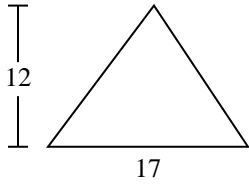
**Antworten**1. **102**2. **98**3. **821,5**4. **16**5. **96**6. **144**7. **1.581**8. **308**9. **119**10. **93,5**



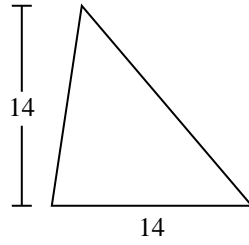
Berechne die Fläche jedes Dreiecks. Die Einheiten sind nicht maßstäblich.

102	1.581	308	144	16
119	821,5	98	96	

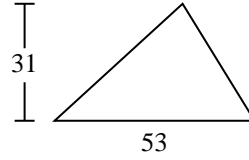
1)



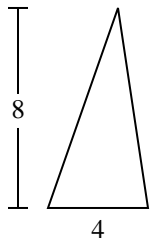
2)



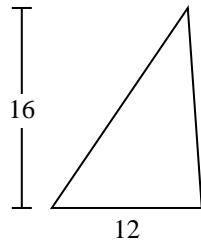
3)



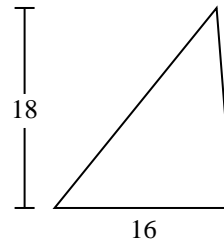
4)



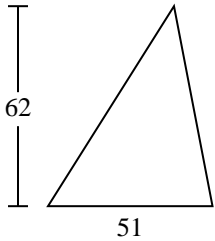
5)



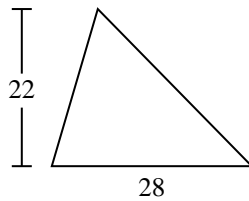
6)



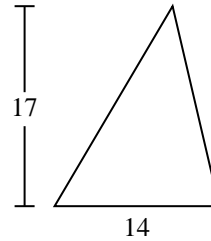
7)



8)



9)

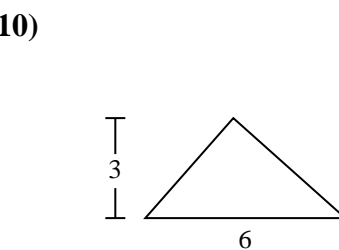
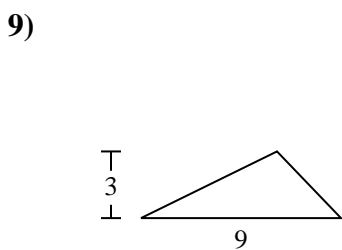
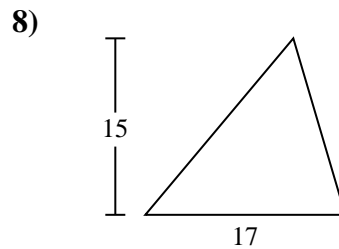
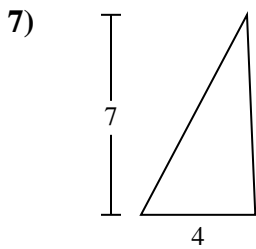
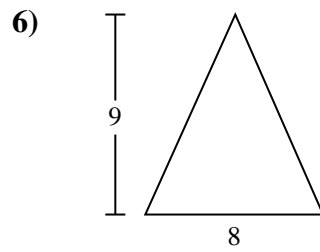
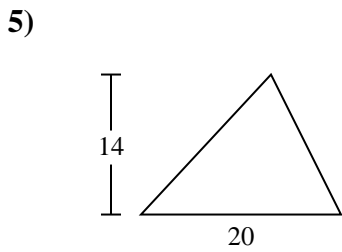
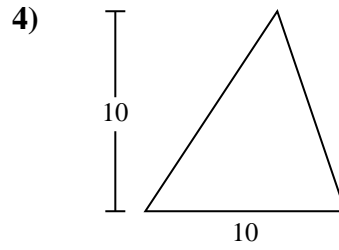
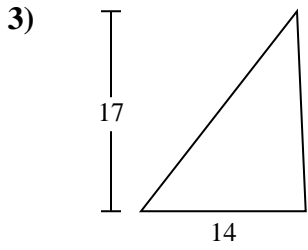
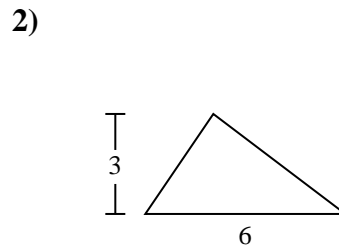
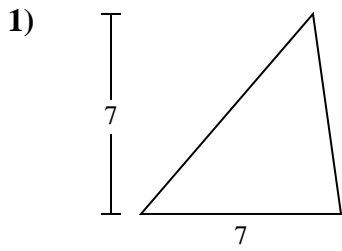


Antworten

1. _____
2. _____
3. _____
4. _____
5. _____
6. _____
7. _____
8. _____
9. _____



Berechne die Fläche jedes Dreiecks. Die Einheiten sind nicht maßstäblich.

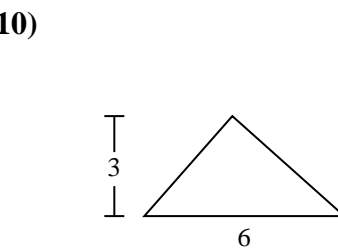
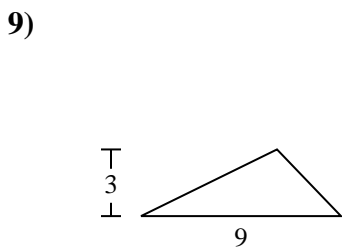
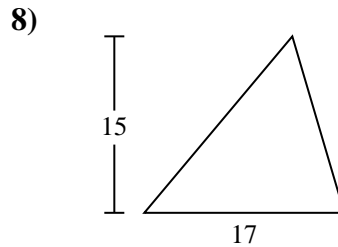
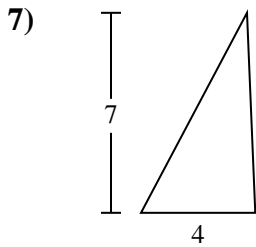
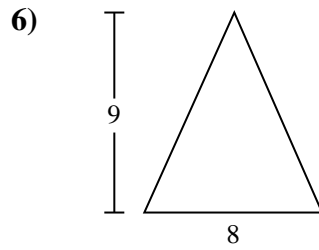
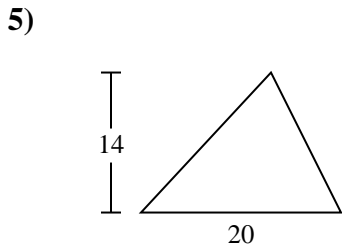
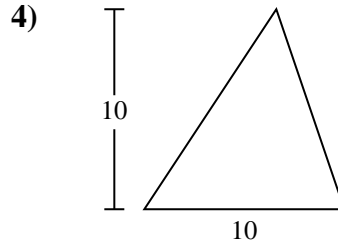
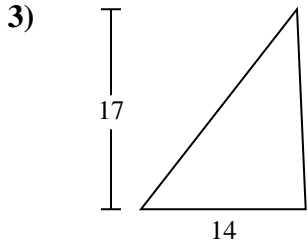
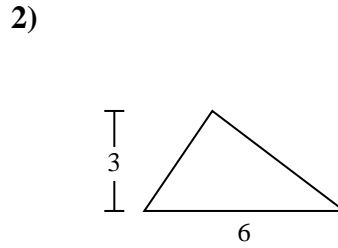
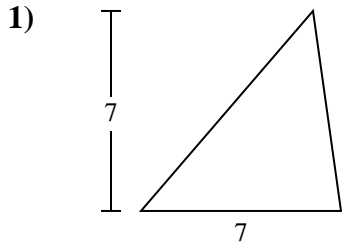


Antworten

- 1. _____
- 2. _____
- 3. _____
- 4. _____
- 5. _____
- 6. _____
- 7. _____
- 8. _____
- 9. _____
- 10. _____



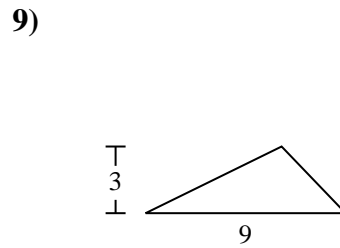
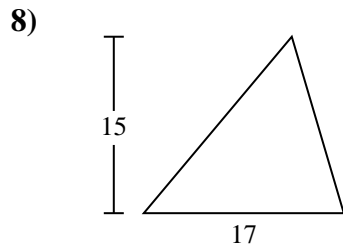
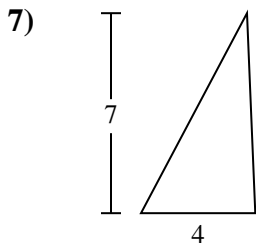
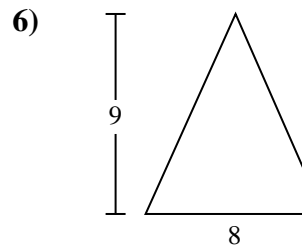
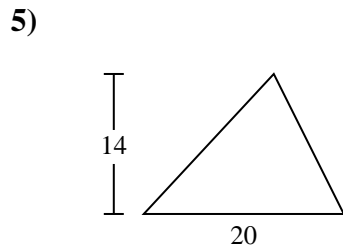
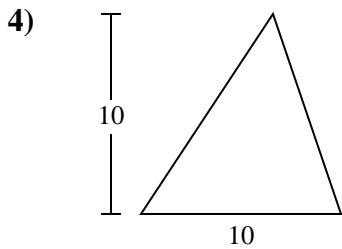
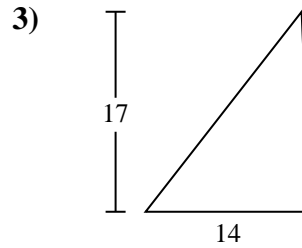
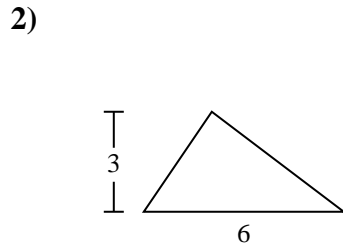
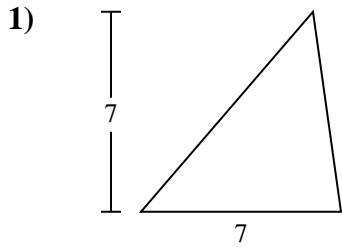
Berechne die Fläche jedes Dreiecks. Die Einheiten sind nicht maßstäblich.

**Antworten**1. 24,52. 93. 1194. 505. 1406. 367. 148. 127,59. 13,510. 9



Berechne die Fläche jedes Dreiecks. Die Einheiten sind nicht maßstäblich.

127,5	13,5	119	140	14
24,5	9	36	50	



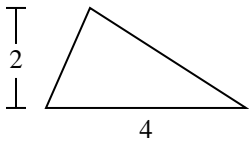
Antworten

1. _____
2. _____
3. _____
4. _____
5. _____
6. _____
7. _____
8. _____
9. _____

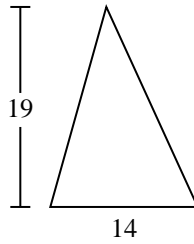


Berechne die Fläche jedes Dreiecks. Die Einheiten sind nicht maßstäblich.

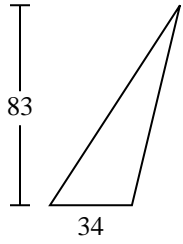
1)



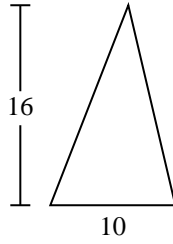
2)



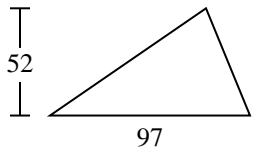
3)



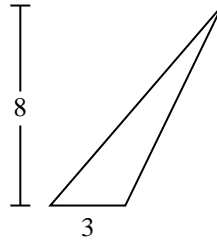
4)



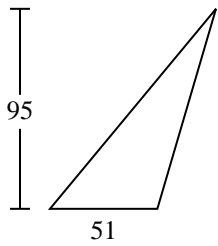
5)



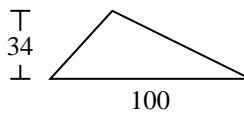
6)



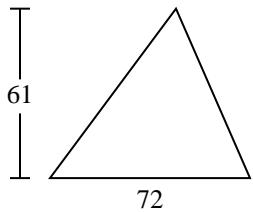
7)



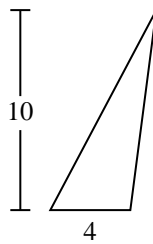
8)



9)



10)



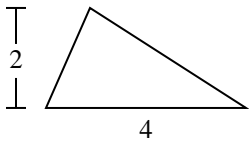
Antworten

- 1. _____
- 2. _____
- 3. _____
- 4. _____
- 5. _____
- 6. _____
- 7. _____
- 8. _____
- 9. _____
- 10. _____

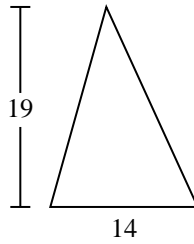


Berechne die Fläche jedes Dreiecks. Die Einheiten sind nicht maßstäblich.

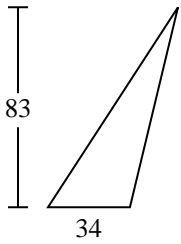
1)



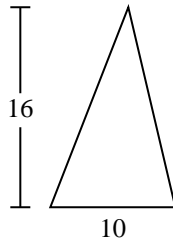
2)



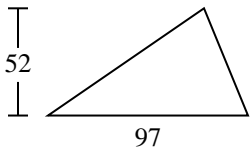
3)



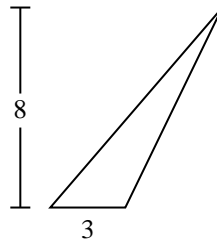
4)



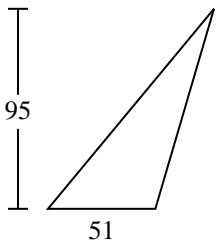
5)



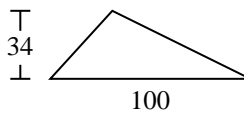
6)



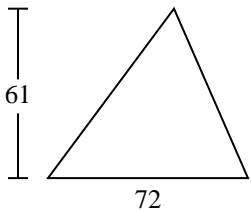
7)



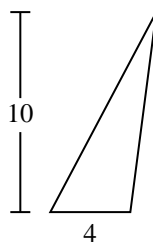
8)



9)



10)



Antworten

1. 4

2. 133

3. 1.411

4. 80

5. 2.522

6. 12

7. 2.422,5

8. 1.700

9. 2.196

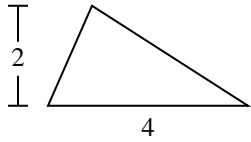
10. 20



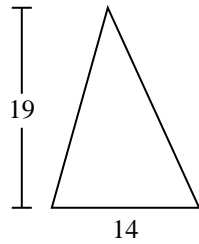
Berechne die Fläche jedes Dreiecks. Die Einheiten sind nicht maßstäblich.

133	4	1.411	2.522	2.196
1.700	2.422,5	80	12	

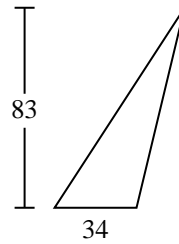
1)



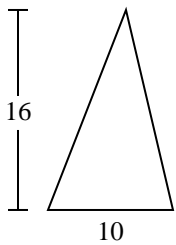
2)



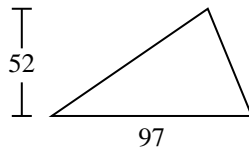
3)



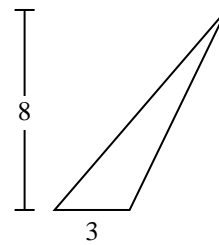
4)



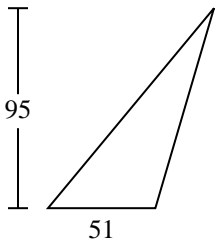
5)



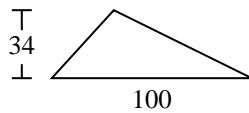
6)



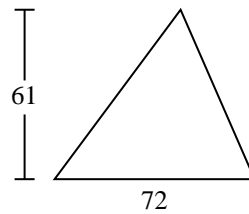
7)



8)



9)



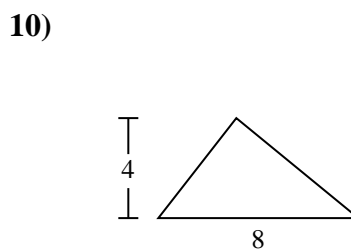
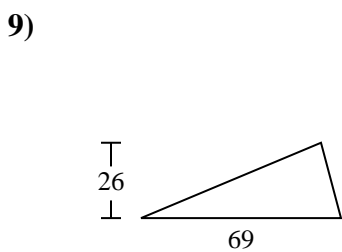
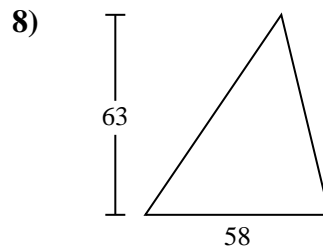
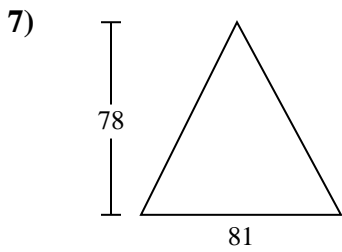
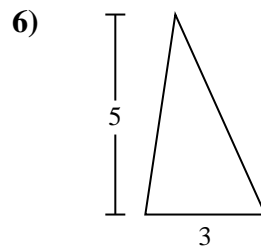
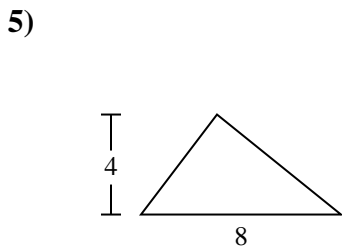
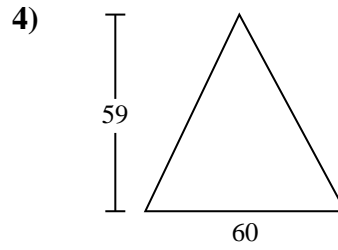
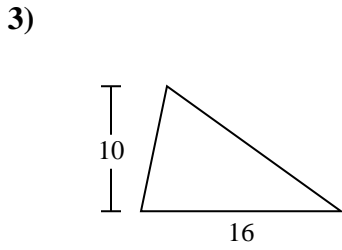
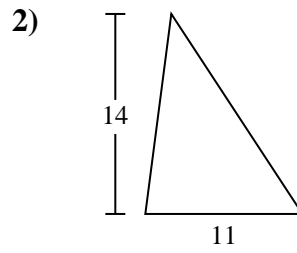
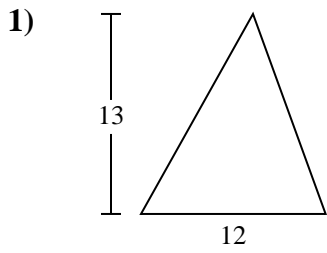
Antworten

1. _____
2. _____
3. _____
4. _____
5. _____
6. _____
7. _____
8. _____
9. _____



Berechne die Fläche jedes Dreiecks. Die Einheiten sind nicht maßstäblich.

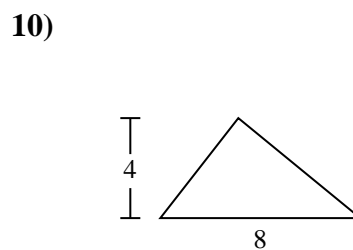
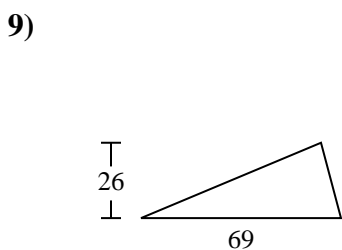
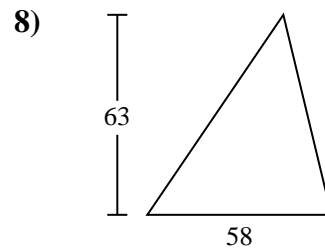
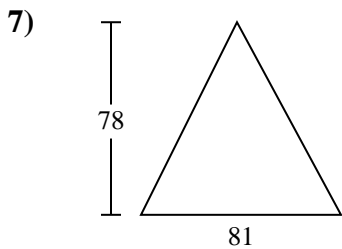
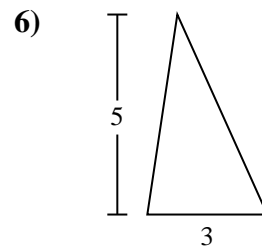
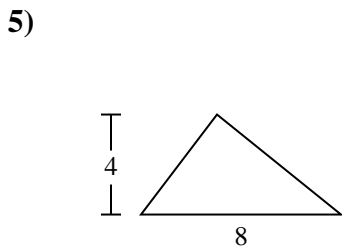
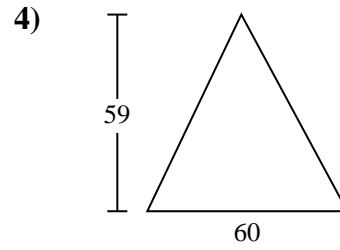
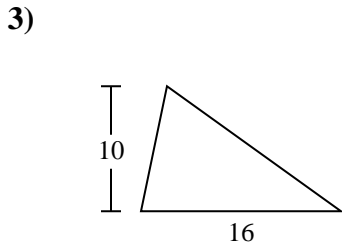
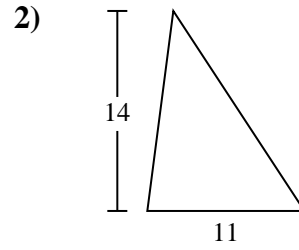
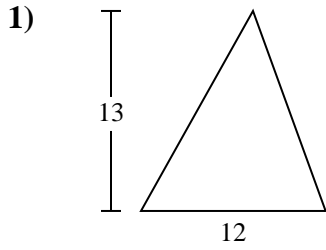
Antworten



- 1. _____
- 2. _____
- 3. _____
- 4. _____
- 5. _____
- 6. _____
- 7. _____
- 8. _____
- 9. _____
- 10. _____



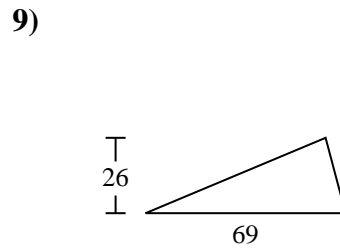
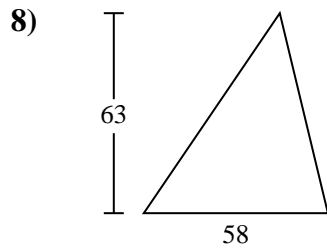
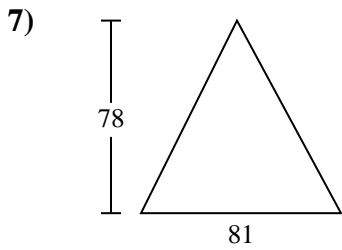
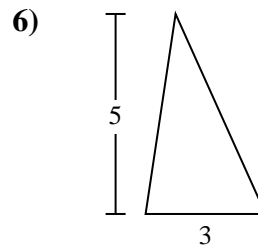
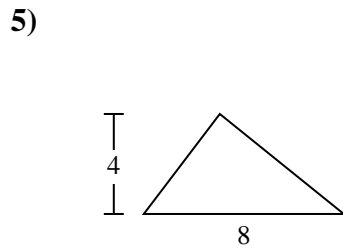
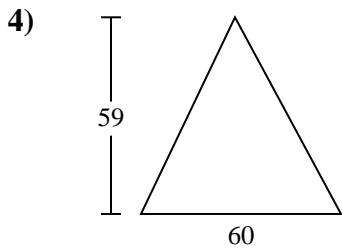
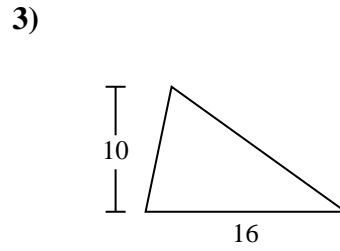
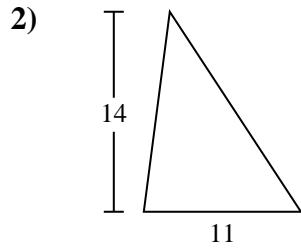
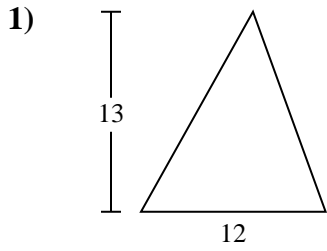
Berechne die Fläche jedes Dreiecks. Die Einheiten sind nicht maßstäblich.

**Antworten**1. **78**2. **77**3. **80**4. **1.770**5. **16**6. **7,5**7. **3.159**8. **1.827**9. **897**10. **16**



Berechne die Fläche jedes Dreiecks. Die Einheiten sind nicht maßstäblich.

1.827	1.770	7,5	78	3.159
80	77	897	16	



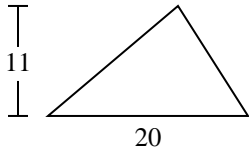
Antworten

1. _____
2. _____
3. _____
4. _____
5. _____
6. _____
7. _____
8. _____
9. _____

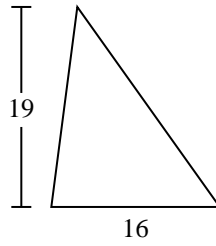


Berechne die Fläche jedes Dreiecks. Die Einheiten sind nicht maßstäblich.

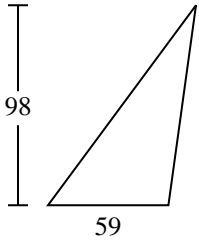
1)



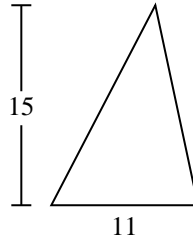
2)



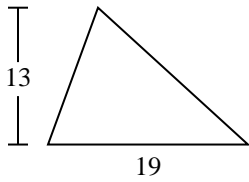
3)



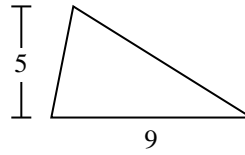
4)



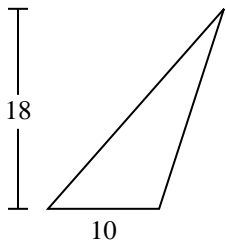
5)



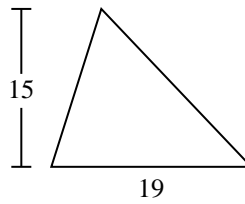
6)



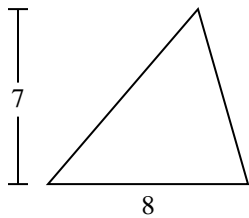
7)



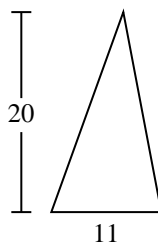
8)



9)



10)



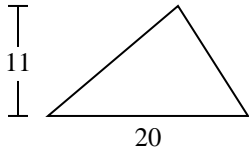
Antworten

- 1. _____
- 2. _____
- 3. _____
- 4. _____
- 5. _____
- 6. _____
- 7. _____
- 8. _____
- 9. _____
- 10. _____

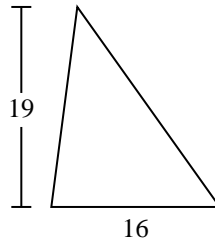


Berechne die Fläche jedes Dreiecks. Die Einheiten sind nicht maßstäblich.

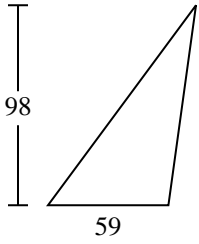
1)



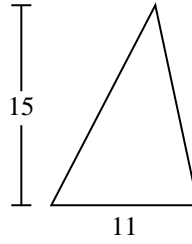
2)



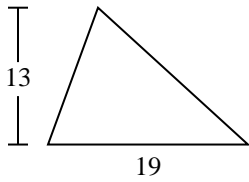
3)



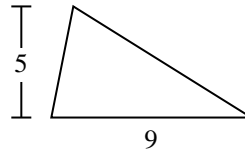
4)



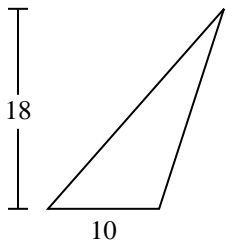
5)



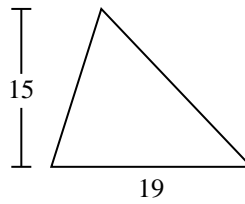
6)



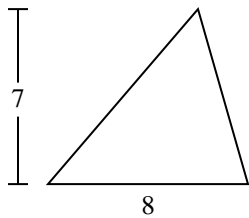
7)



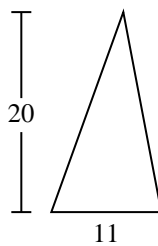
8)



9)



10)



Antworten

1. **110**

2. **152**

3. **2.891**

4. **82,5**

5. **123,5**

6. **22,5**

7. **90**

8. **142,5**

9. **28**

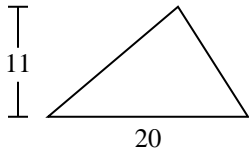
10. **110**



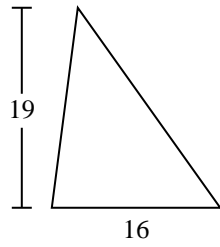
Berechne die Fläche jedes Dreiecks. Die Einheiten sind nicht maßstäblich.

22,5	152	28	90	142,5
123,5	2.891	82,5	110	

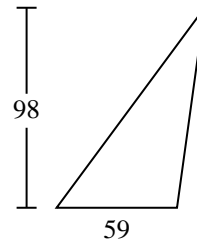
1)



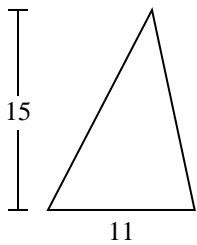
2)



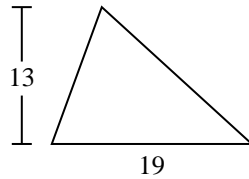
3)



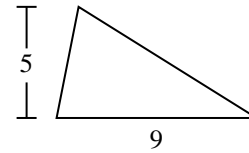
4)



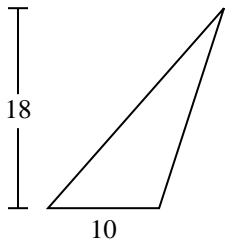
5)



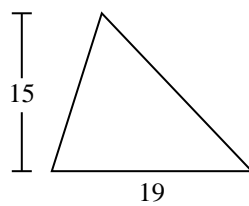
6)



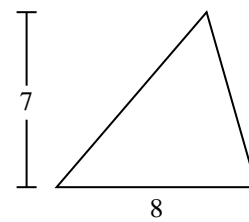
7)



8)



9)



Antworten

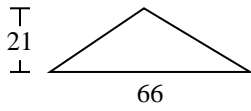
1. _____
2. _____
3. _____
4. _____
5. _____
6. _____
7. _____
8. _____
9. _____



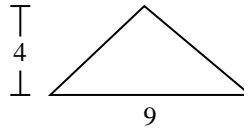
Berechne die Fläche jedes Dreiecks. Die Einheiten sind nicht maßstäblich.

Antworten

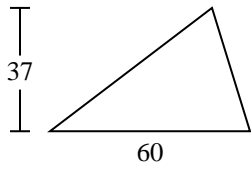
1)



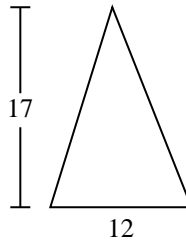
2)



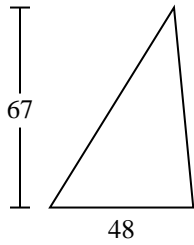
3)



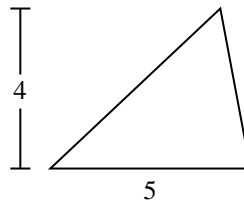
4)



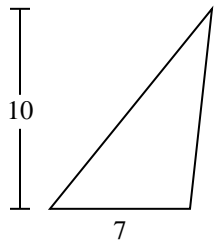
5)



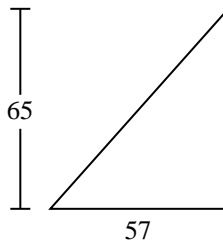
6)



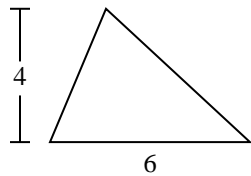
7)



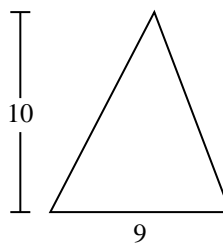
8)



9)



10)

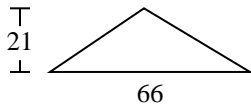


- 1. _____
- 2. _____
- 3. _____
- 4. _____
- 5. _____
- 6. _____
- 7. _____
- 8. _____
- 9. _____
- 10. _____

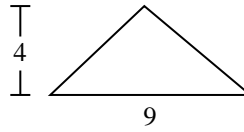


Berechne die Fläche jedes Dreiecks. Die Einheiten sind nicht maßstäblich.

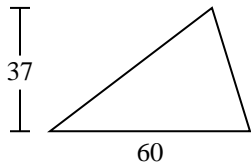
1)



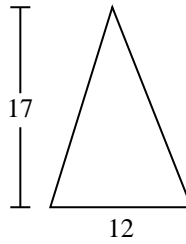
2)



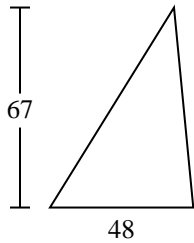
3)



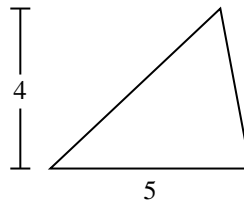
4)



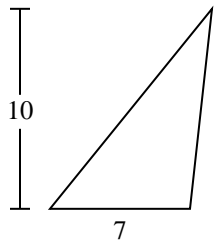
5)



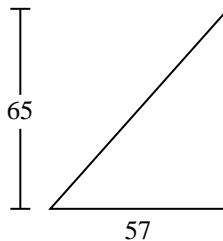
6)



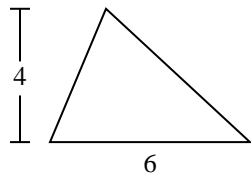
7)



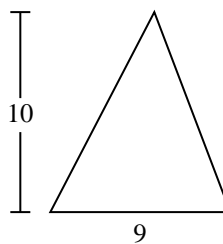
8)



9)



10)

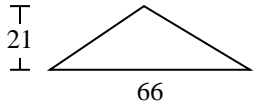
**Antworten**1. **693**2. **18**3. **1.110**4. **102**5. **1.608**6. **10**7. **35**8. **1.852,5**9. **12**10. **45**



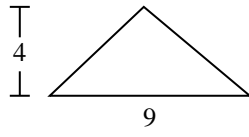
Berechne die Fläche jedes Dreiecks. Die Einheiten sind nicht maßstäblich.

1.110	693	102	1.852,5	10
18	12	1.608	35	

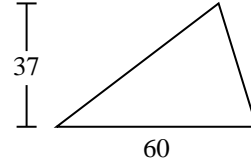
1)



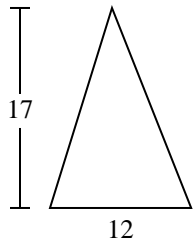
2)



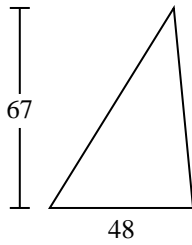
3)



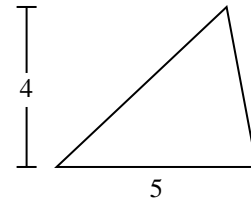
4)



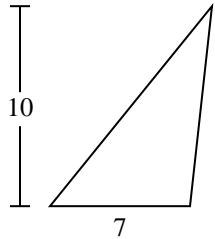
5)



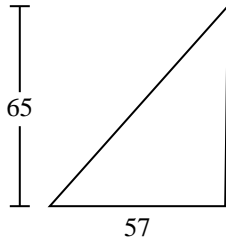
6)



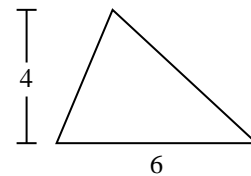
7)



8)



9)



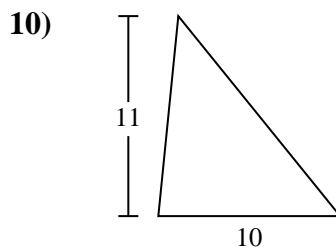
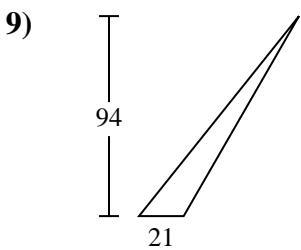
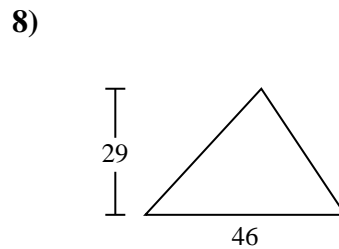
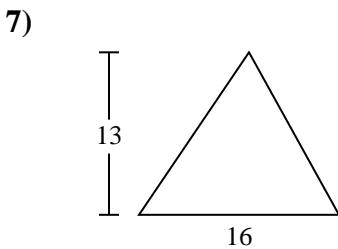
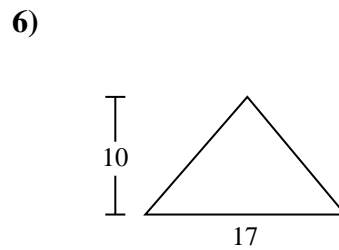
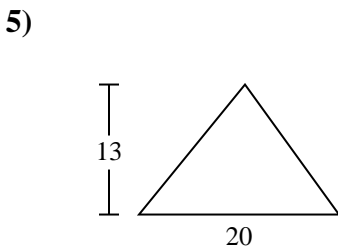
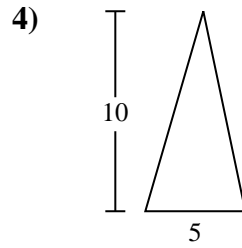
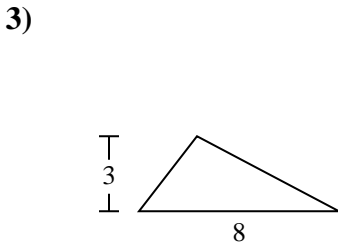
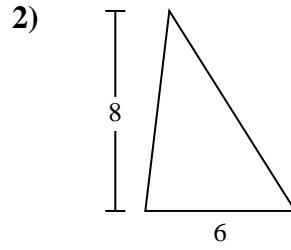
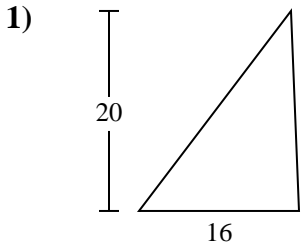
Antworten

1. _____
2. _____
3. _____
4. _____
5. _____
6. _____
7. _____
8. _____
9. _____



Berechne die Fläche jedes Dreiecks. Die Einheiten sind nicht maßstäblich.

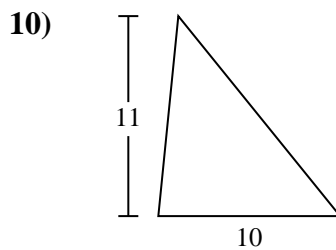
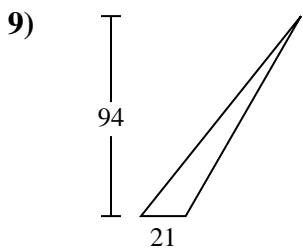
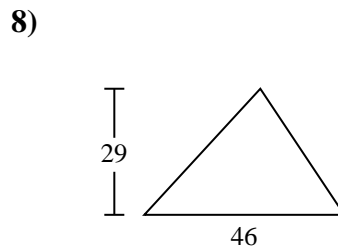
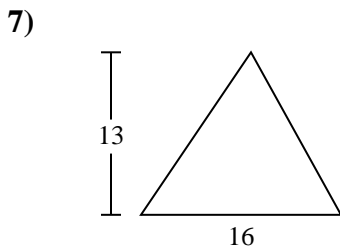
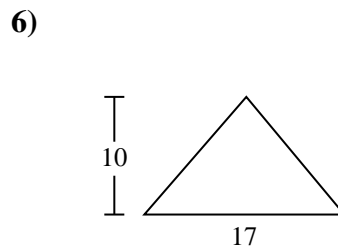
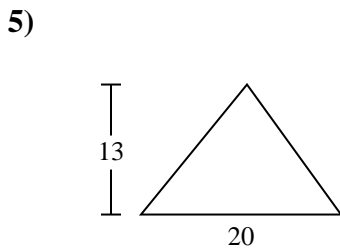
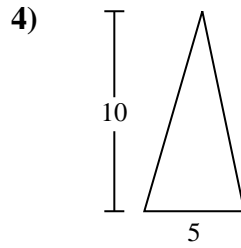
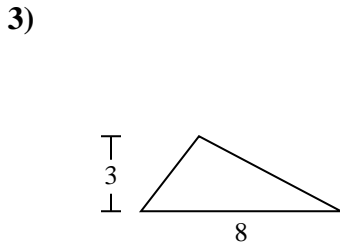
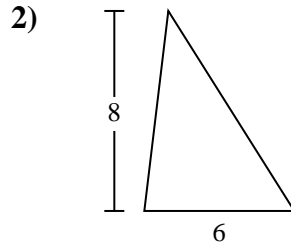
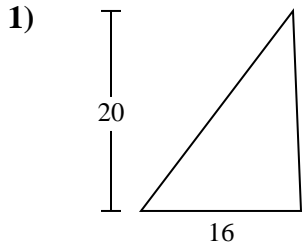
Antworten



- 1. _____
- 2. _____
- 3. _____
- 4. _____
- 5. _____
- 6. _____
- 7. _____
- 8. _____
- 9. _____
- 10. _____



Berechne die Fläche jedes Dreiecks. Die Einheiten sind nicht maßstäblich.



Antworten

1. **160**

2. **24**

3. **12**

4. **25**

5. **130**

6. **85**

7. **104**

8. **667**

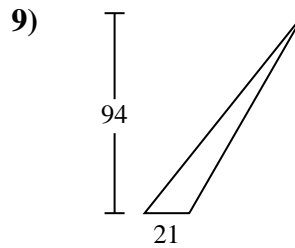
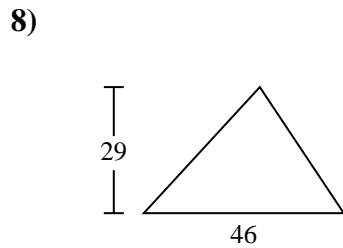
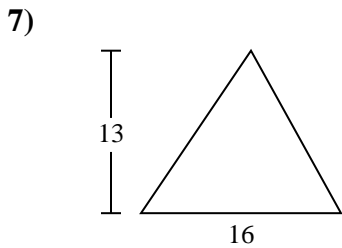
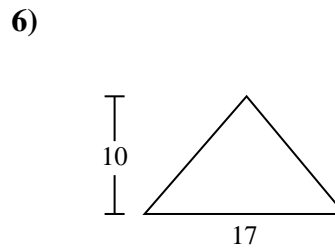
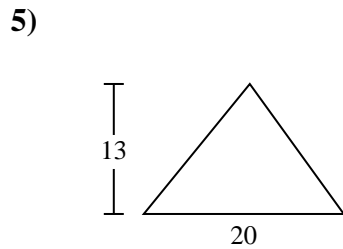
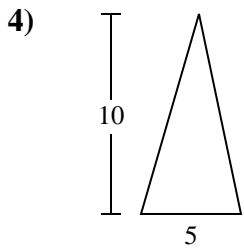
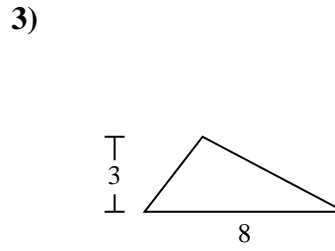
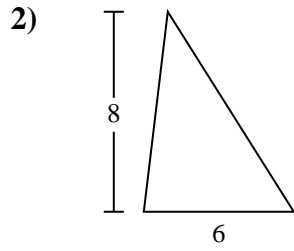
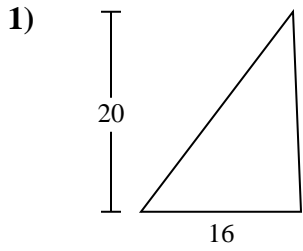
9. **987**

10. **55**



Berechne die Fläche jedes Dreiecks. Die Einheiten sind nicht maßstäblich.

25	160	85	24	667
987	104	12	130	



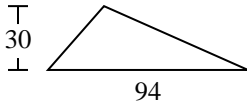
Antworten

1. _____
2. _____
3. _____
4. _____
5. _____
6. _____
7. _____
8. _____
9. _____

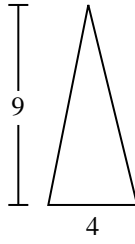


Berechne die Fläche jedes Dreiecks. Die Einheiten sind nicht maßstäblich.

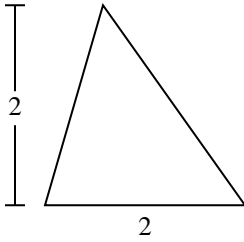
1)



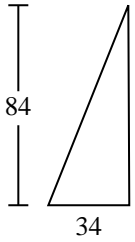
2)



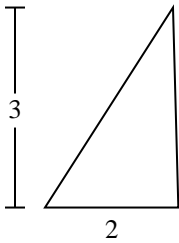
3)



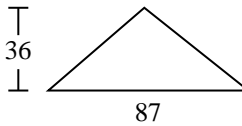
4)



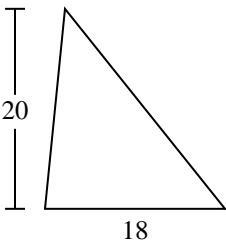
5)



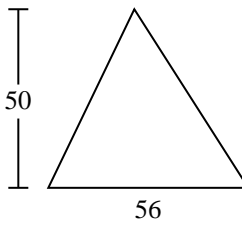
6)



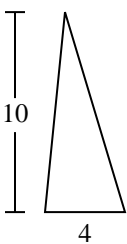
7)



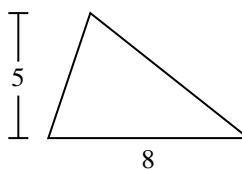
8)



9)



10)



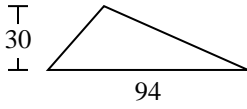
Antworten

- 1. _____
- 2. _____
- 3. _____
- 4. _____
- 5. _____
- 6. _____
- 7. _____
- 8. _____
- 9. _____
- 10. _____

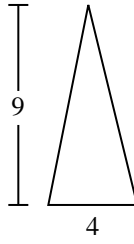


Berechne die Fläche jedes Dreiecks. Die Einheiten sind nicht maßstäblich.

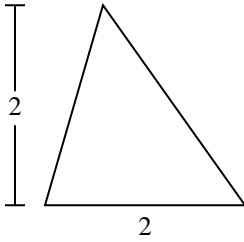
1)



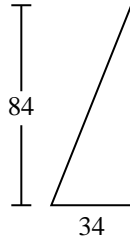
2)



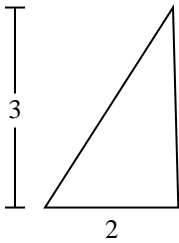
3)



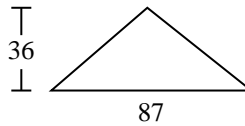
4)



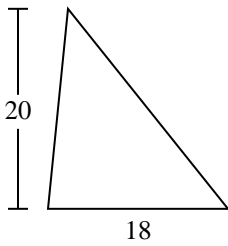
5)



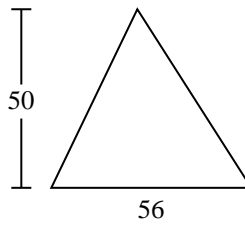
6)



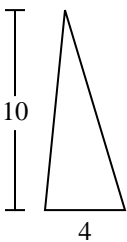
7)



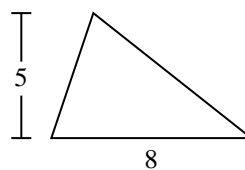
8)



9)



10)



Antworten

1. **1.410**

2. **18**

3. **2**

4. **1.428**

5. **3**

6. **1.566**

7. **180**

8. **1.400**

9. **20**

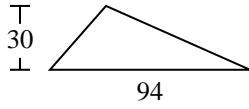
10. **20**



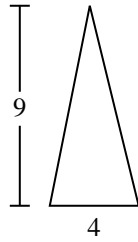
Berechne die Fläche jedes Dreiecks. Die Einheiten sind nicht maßstäblich.

180	1.428	18	1.566	1.400
3	2	20	1.410	

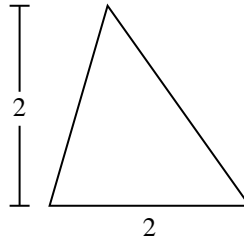
1)



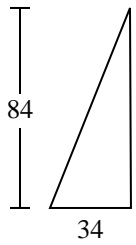
2)



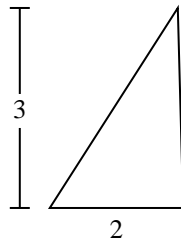
3)



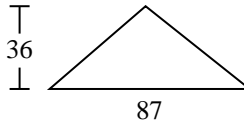
4)



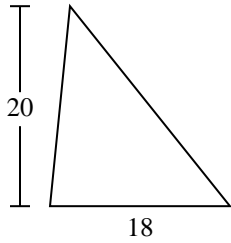
5)



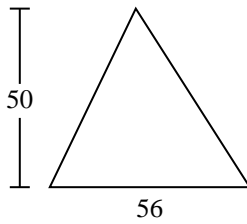
6)



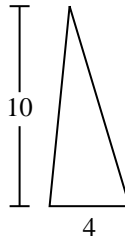
7)



8)



9)



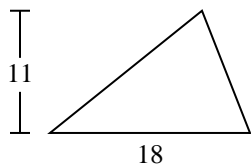
Antworten

1. _____
2. _____
3. _____
4. _____
5. _____
6. _____
7. _____
8. _____
9. _____



Berechne die Fläche jedes Dreiecks. Die Einheiten sind nicht maßstäblich.

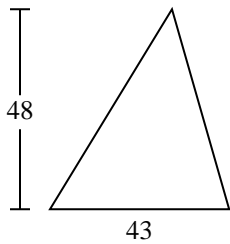
1)



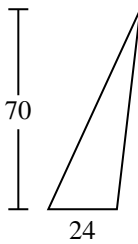
2)



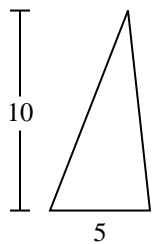
3)



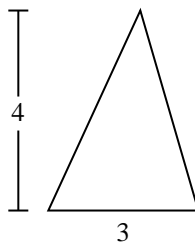
4)



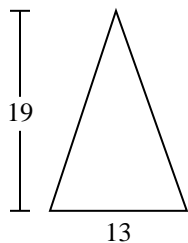
5)



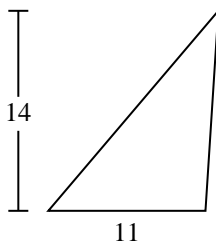
6)



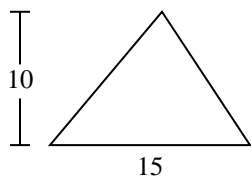
7)



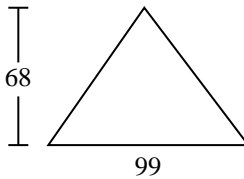
8)



9)



10)



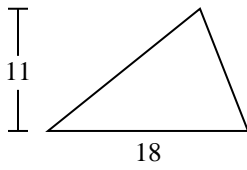
Antworten

- 1. _____
- 2. _____
- 3. _____
- 4. _____
- 5. _____
- 6. _____
- 7. _____
- 8. _____
- 9. _____
- 10. _____



Berechne die Fläche jedes Dreiecks. Die Einheiten sind nicht maßstäblich.

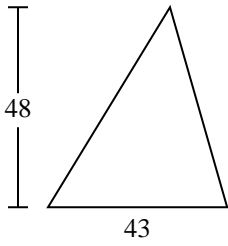
1)



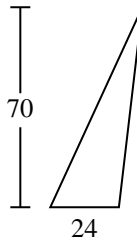
2)



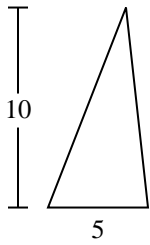
3)



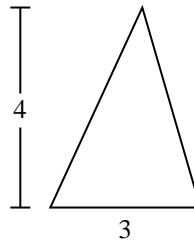
4)



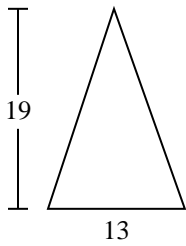
5)



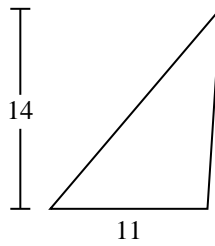
6)



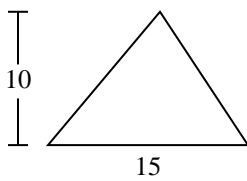
7)



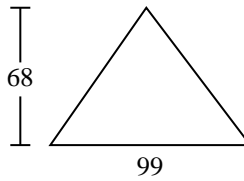
8)



9)



10)



Antworten

1. **99**

2. **7**

3. **1.032**

4. **840**

5. **25**

6. **6**

7. **123,5**

8. **77**

9. **75**

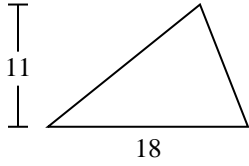
10. **3.366**



Berechne die Fläche jedes Dreiecks. Die Einheiten sind nicht maßstäblich.

77	6	99	1.032	25
840	75	123,5	7	

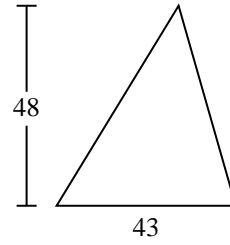
1)



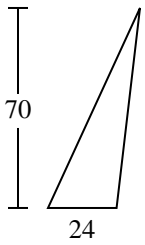
2)



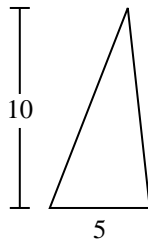
3)



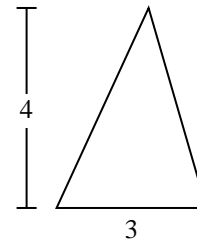
4)



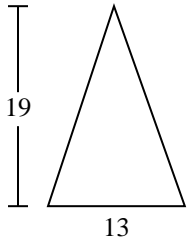
5)



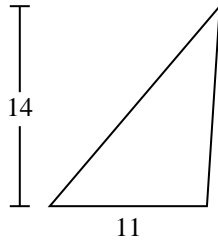
6)



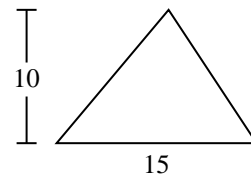
7)



8)



9)



Antworten

1. _____
2. _____
3. _____
4. _____
5. _____
6. _____
7. _____
8. _____
9. _____