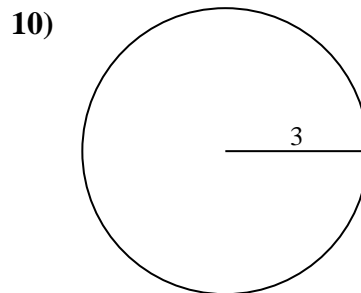
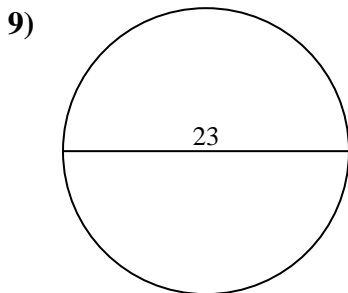
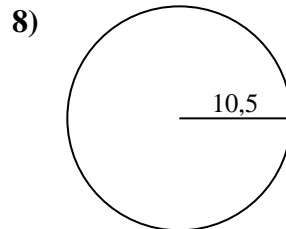
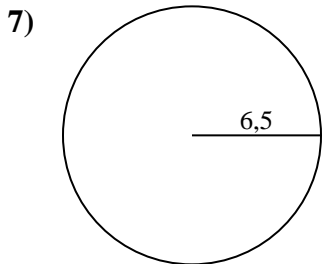
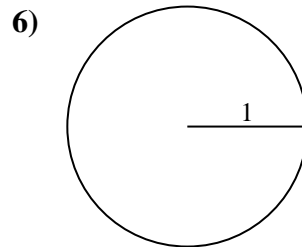
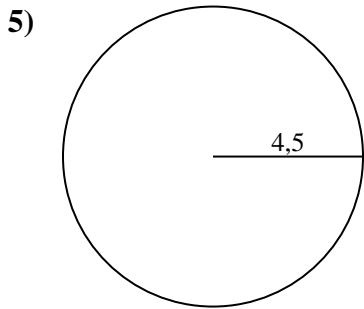
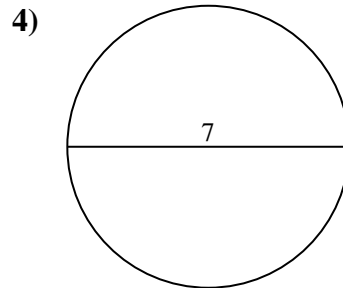
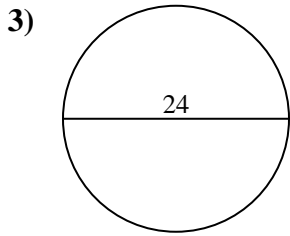
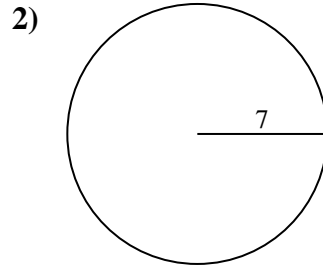
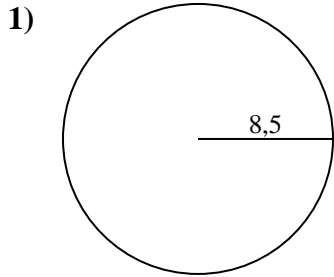




Berechne die Kreisfläche. Die Kreise sind nicht maßstäblich.

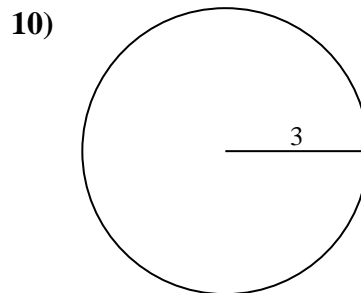
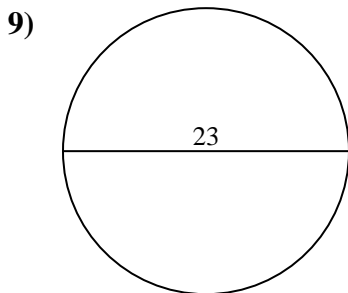
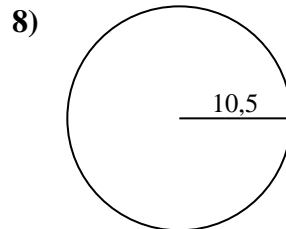
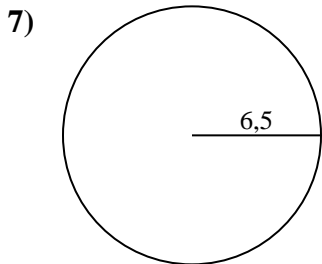
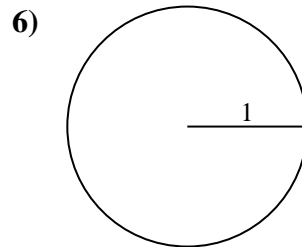
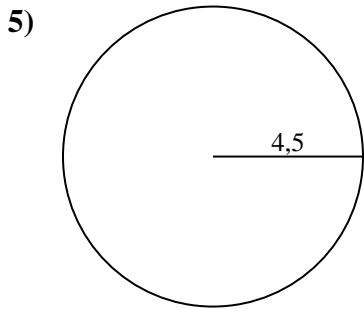
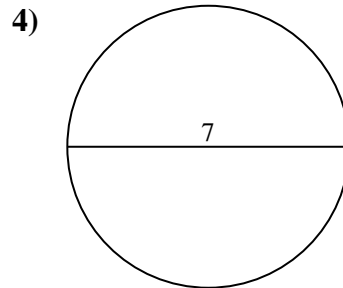
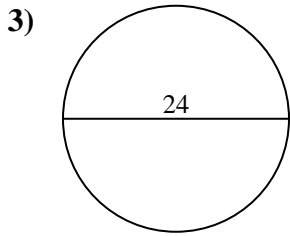
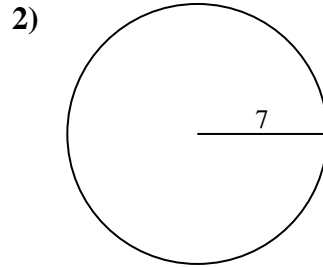
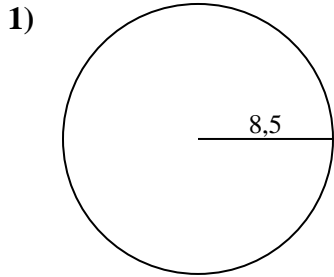


**Antworten**

- 1. \_\_\_\_\_
- 2. \_\_\_\_\_
- 3. \_\_\_\_\_
- 4. \_\_\_\_\_
- 5. \_\_\_\_\_
- 6. \_\_\_\_\_
- 7. \_\_\_\_\_
- 8. \_\_\_\_\_
- 9. \_\_\_\_\_
- 10. \_\_\_\_\_



Berechne die Kreisfläche. Die Kreise sind nicht maßstäblich.



**Antworten**

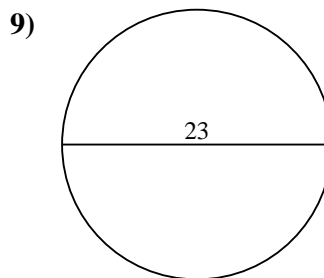
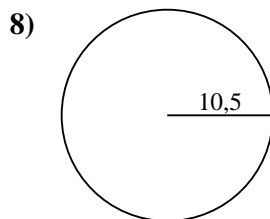
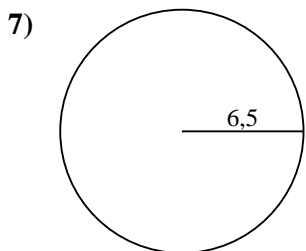
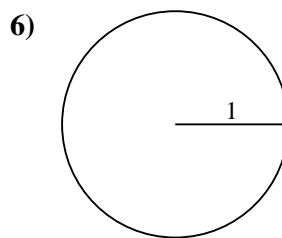
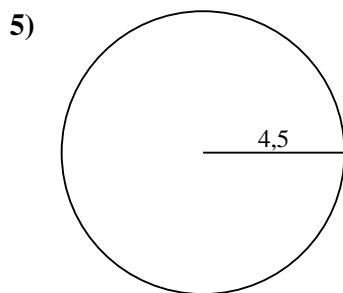
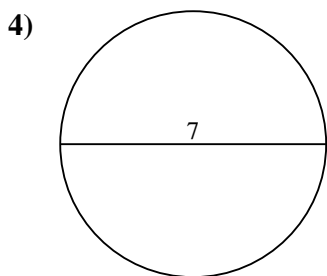
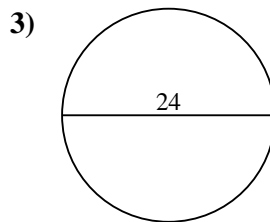
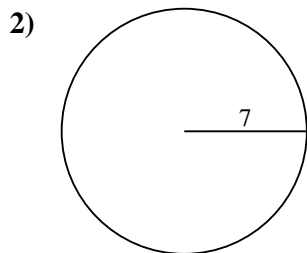
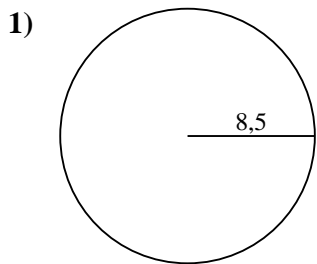
- 1. 227
- 2. 153,9
- 3. 452,4
- 4. 38,5
- 5. 63,6
- 6. 3,1
- 7. 132,7
- 8. 346,4
- 9. 415,5
- 10. 28,3



**Berechne die Kreisfläche. Die Kreise sind nicht maßstäblich.**

38,5	132,7	63,6	346,4	415,5
3,1	153,9	227	452,4	

**Antworten**



- 1. \_\_\_\_\_
- 2. \_\_\_\_\_
- 3. \_\_\_\_\_
- 4. \_\_\_\_\_
- 5. \_\_\_\_\_
- 6. \_\_\_\_\_
- 7. \_\_\_\_\_
- 8. \_\_\_\_\_
- 9. \_\_\_\_\_