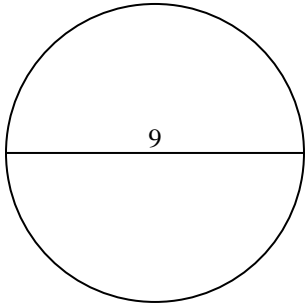




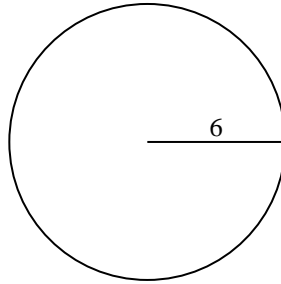
Berechne die Kreisfläche. Die Kreise sind nicht maßstäblich.

**Antworten**

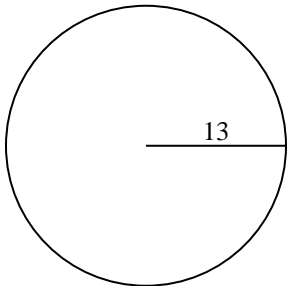
1)



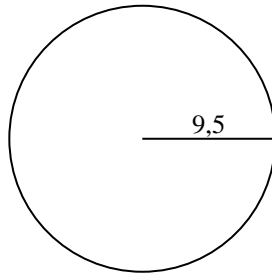
2)



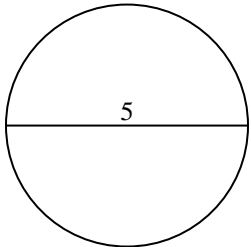
3)



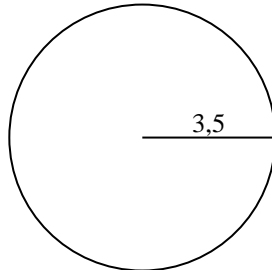
4)



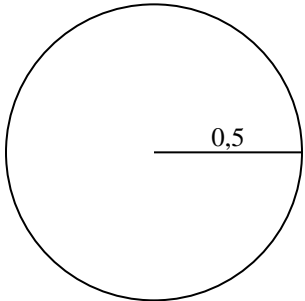
5)



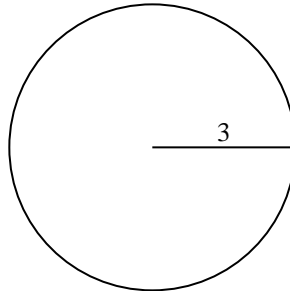
6)



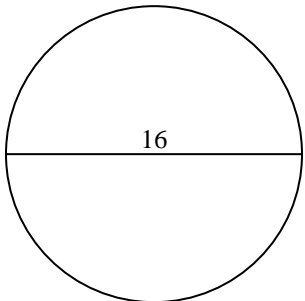
7)



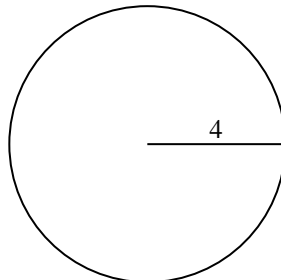
8)



9)



10)

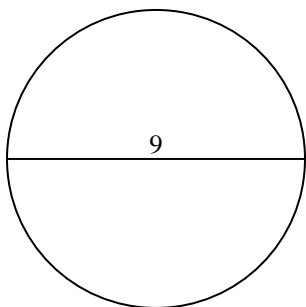


- 1. \_\_\_\_\_
- 2. \_\_\_\_\_
- 3. \_\_\_\_\_
- 4. \_\_\_\_\_
- 5. \_\_\_\_\_
- 6. \_\_\_\_\_
- 7. \_\_\_\_\_
- 8. \_\_\_\_\_
- 9. \_\_\_\_\_
- 10. \_\_\_\_\_

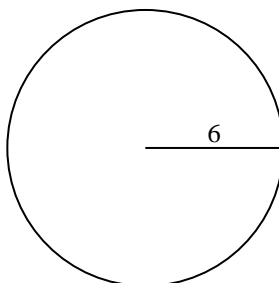


Berechne die Kreisfläche. Die Kreise sind nicht maßstäblich.

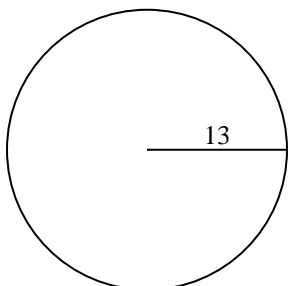
1)



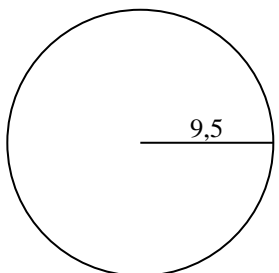
2)



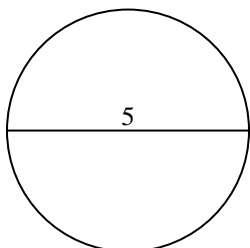
3)



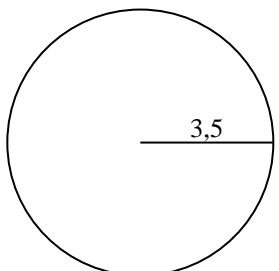
4)



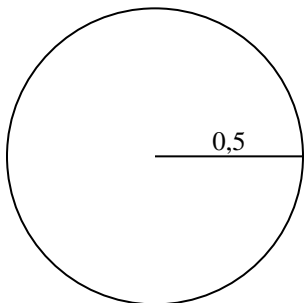
5)



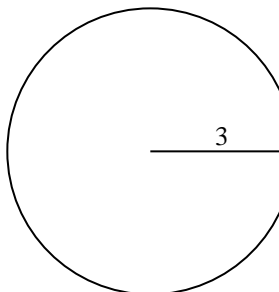
6)



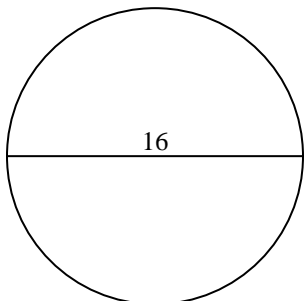
7)



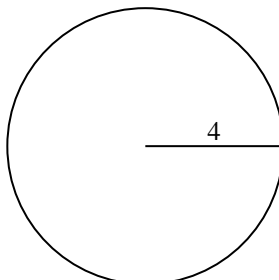
8)



9)



10)

**Antworten**1. 63,62. 113,13. 530,94. 283,55. 19,66. 38,57. 0,88. 28,39. 201,110. 50,3

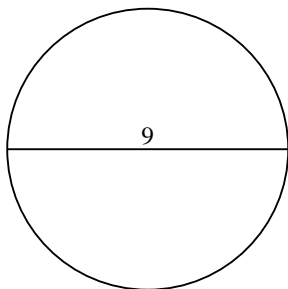


**Berechne die Kreisfläche. Die Kreise sind nicht maßstäblich.**

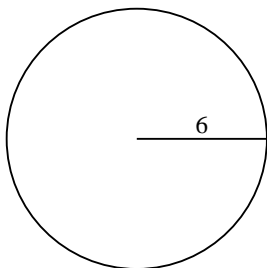
28,3	113,1	201,1	38,5	283,5
0,8	19,6	63,6	530,9	

**Antworten**

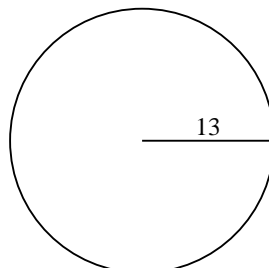
1)



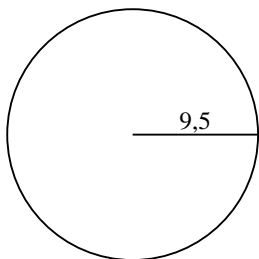
2)



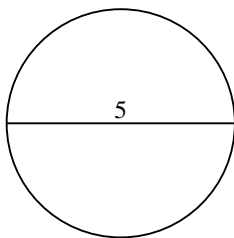
3)



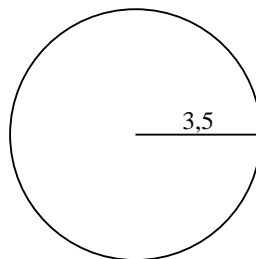
4)



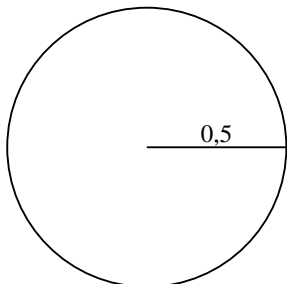
5)



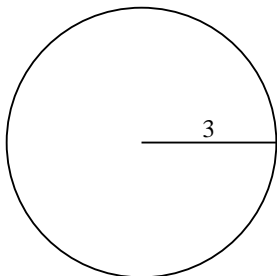
6)



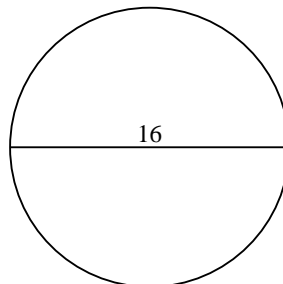
7)



8)



9)



- 1. \_\_\_\_\_
- 2. \_\_\_\_\_
- 3. \_\_\_\_\_
- 4. \_\_\_\_\_
- 5. \_\_\_\_\_
- 6. \_\_\_\_\_
- 7. \_\_\_\_\_
- 8. \_\_\_\_\_
- 9. \_\_\_\_\_