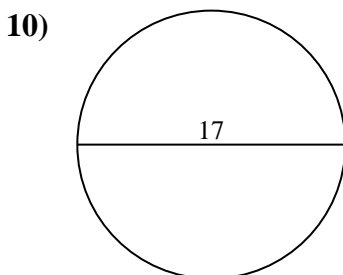
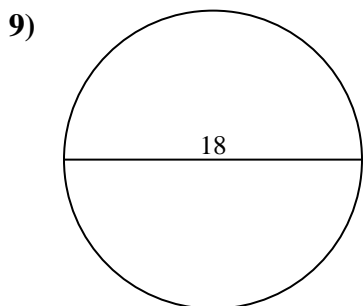
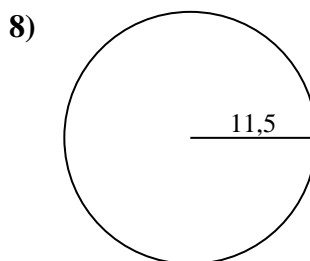
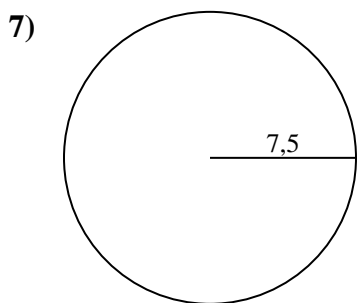
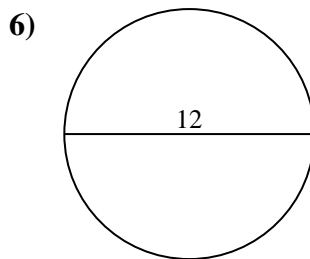
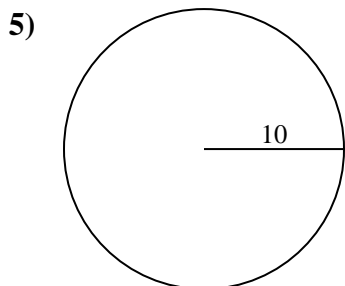
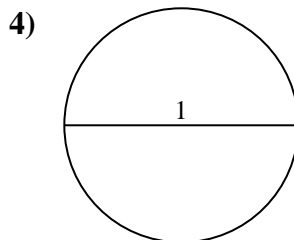
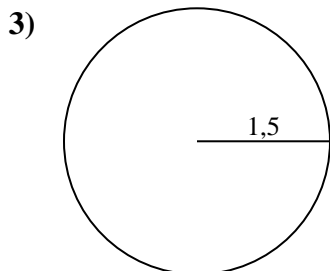
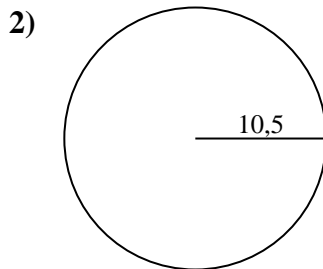
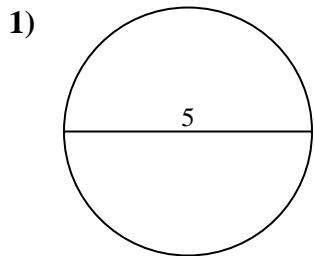




Berechne die Kreisfläche und den Kreisumfang jedes Kreises. Die Kreise sind nicht maßstäblich.

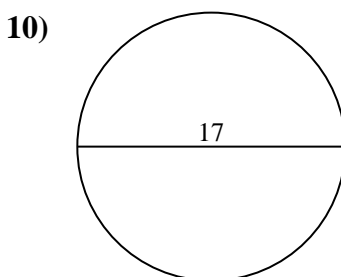
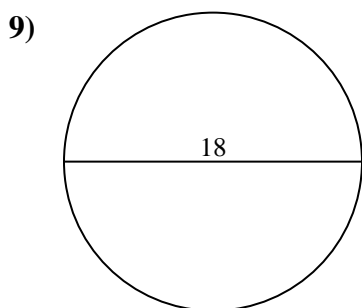
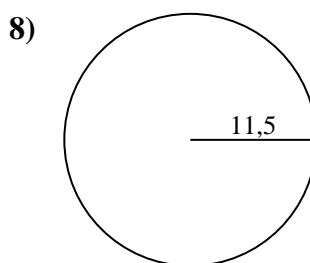
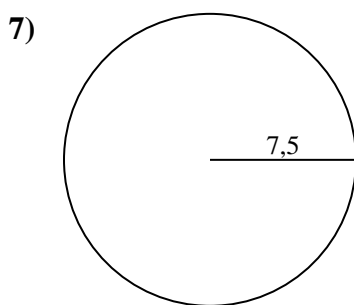
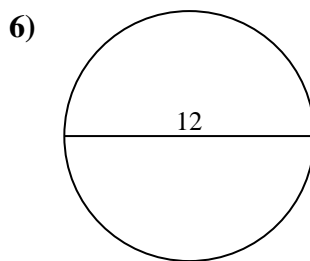
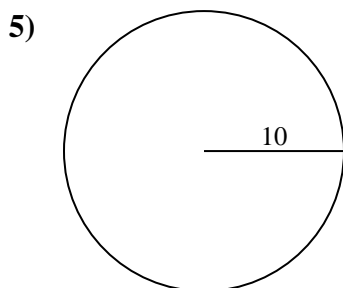
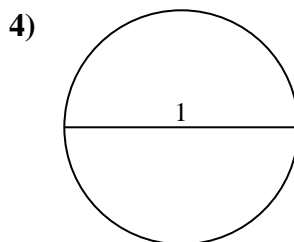
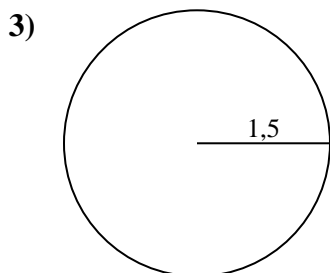
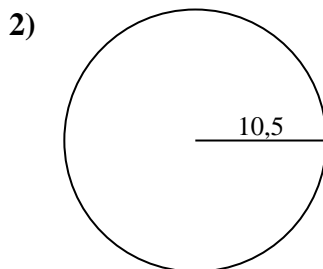
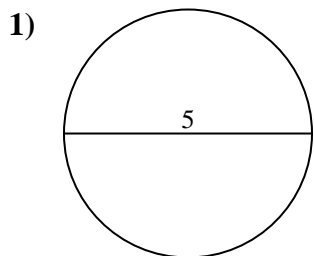


Antworten

- 1. _____
- 2. _____
- 3. _____
- 4. _____
- 5. _____
- 6. _____
- 7. _____
- 8. _____
- 9. _____
- 10. _____



Berechne die Kreisfläche und den Kreisumfang jedes Kreises. Die Kreise sind nicht maßstäblich.

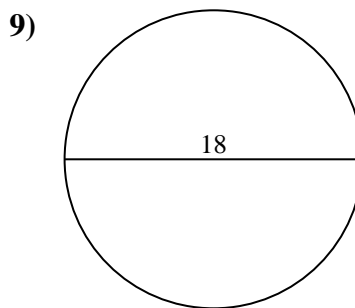
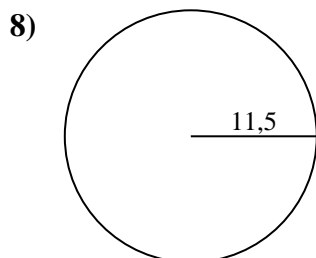
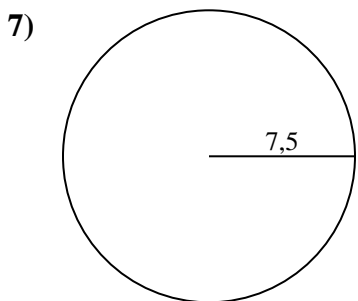
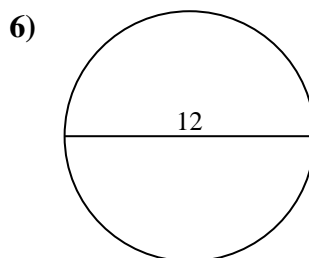
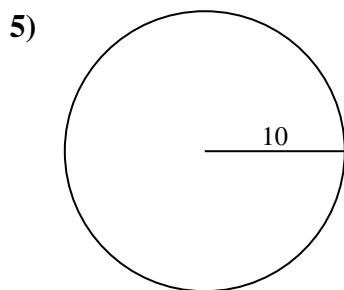
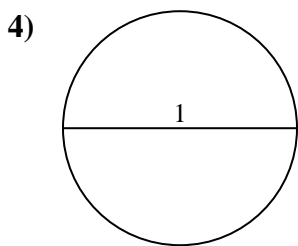
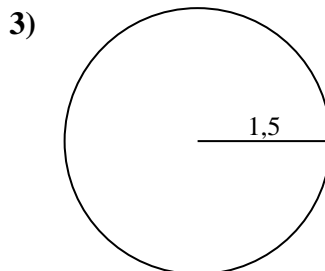
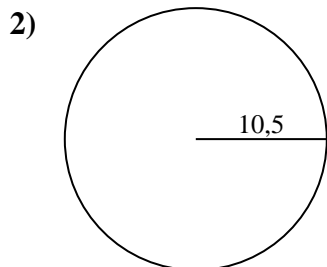
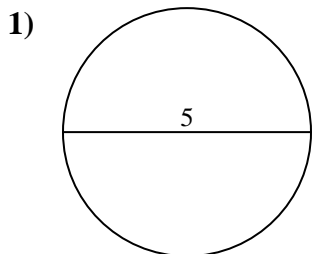
**Antworten**

| | | |
|-----|--------------|-------------|
| 1. | <u>19,6</u> | <u>15,7</u> |
| 2. | <u>346,4</u> | <u>66</u> |
| 3. | <u>7,1</u> | <u>9,4</u> |
| 4. | <u>0,8</u> | <u>3,1</u> |
| 5. | <u>314,2</u> | <u>62,8</u> |
| 6. | <u>113,1</u> | <u>37,7</u> |
| 7. | <u>176,7</u> | <u>47,1</u> |
| 8. | <u>415,5</u> | <u>72,3</u> |
| 9. | <u>254,5</u> | <u>56,5</u> |
| 10. | <u>227</u> | <u>53,4</u> |



Berechne die Kreisfläche und den Kreisumfang jedes Kreises. Die Kreise sind nicht maßstäblich.

| | | | | |
|-------|-------|-------|-------|-------|
| 9,4 | 66 | 346,4 | 254,5 | 62,8 |
| 176,7 | 47,1 | 15,7 | 3,1 | 415,5 |
| 56,5 | 0,8 | 113,1 | 19,6 | 37,7 |
| 72,3 | 314,2 | 7,1 | | |



Antworten

1. _____
2. _____
3. _____
4. _____
5. _____
6. _____
7. _____
8. _____
9. _____